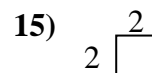
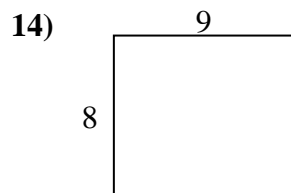
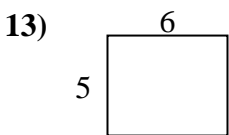
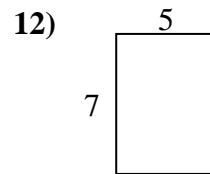
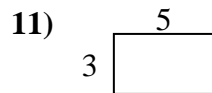
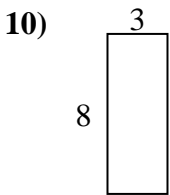
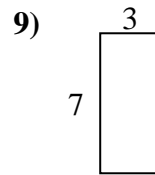
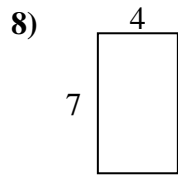
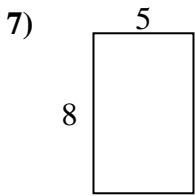
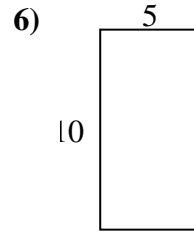
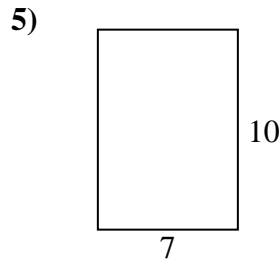
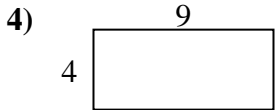
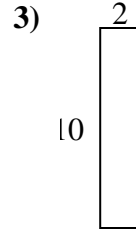
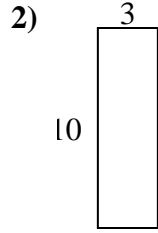
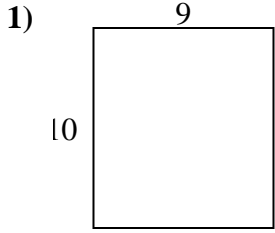




Calcola il perimetro e l'area di ogni figura, Ogni misura è in pollici (in).

Non vanno fatte le equivalenze.



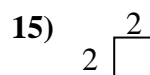
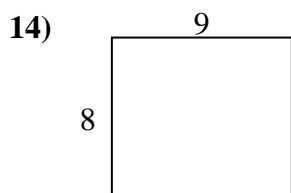
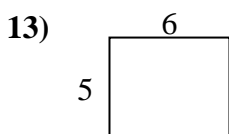
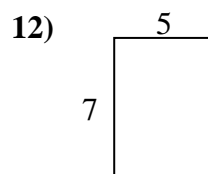
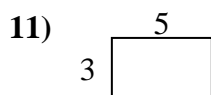
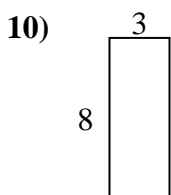
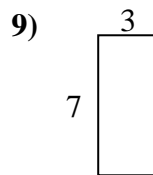
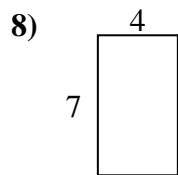
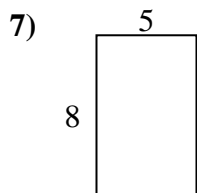
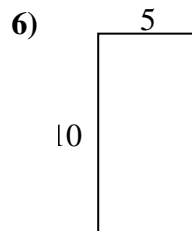
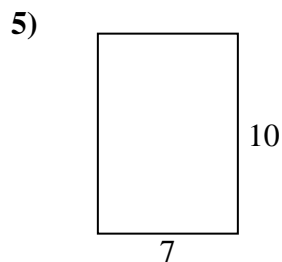
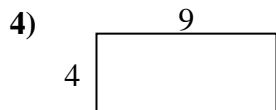
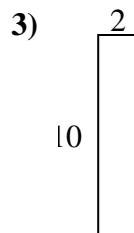
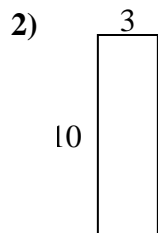
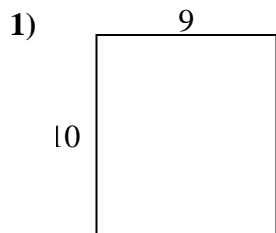
Risposte

1. _____
2. _____
3. _____
4. _____
5. _____
6. _____
7. _____
8. _____
9. _____
10. _____
11. _____
12. _____
13. _____
14. _____
15. _____



Calcola il perimetro e l'area di ogni figura, Ogni misura è in pollici (in).

Non vanno fatte le equivalenze.



Risposte

1. 38 in 90 in²
2. 26 in 30 in²
3. 24 in 20 in²
4. 26 in 36 in²
5. 34 in 70 in²
6. 30 in 50 in²
7. 26 in 40 in²
8. 22 in 28 in²
9. 20 in 21 in²
10. 22 in 24 in²
11. 16 in 15 in²
12. 24 in 35 in²
13. 22 in 30 in²
14. 34 in 72 in²
15. 8 in 4 in²