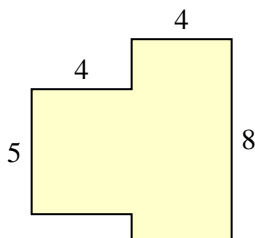


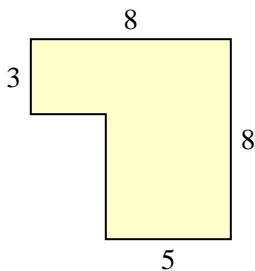


Trova l'area di ciascuna forma, Le misure sono in millimetri (mm). Non fare l'equivalenza.

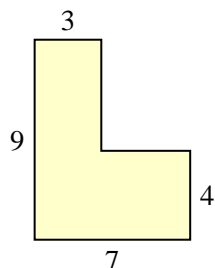
1)



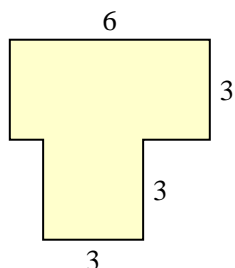
2)



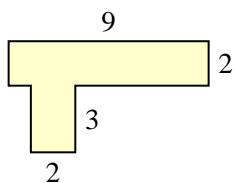
3)



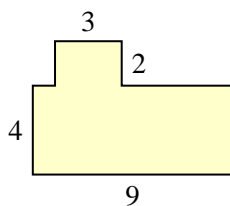
4)



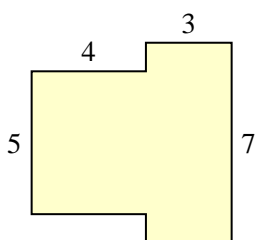
5)



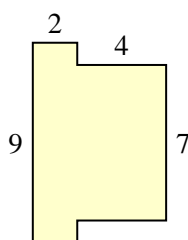
6)



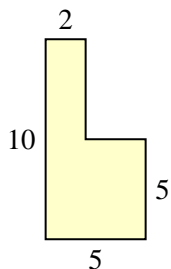
7)



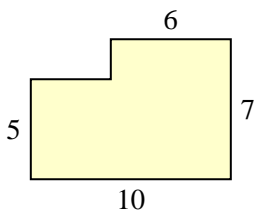
8)



9)



10)

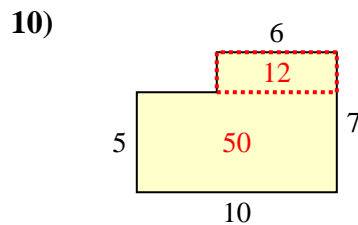
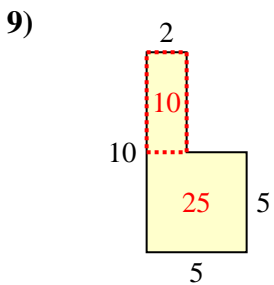
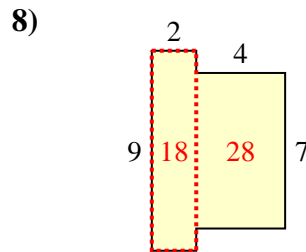
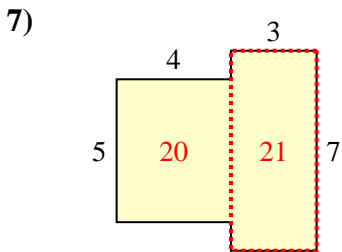
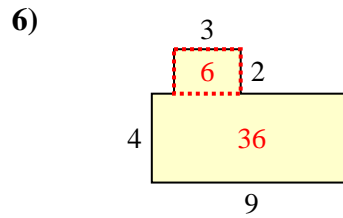
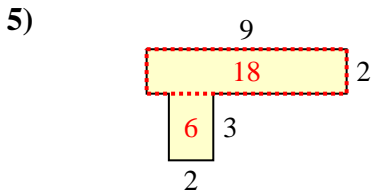
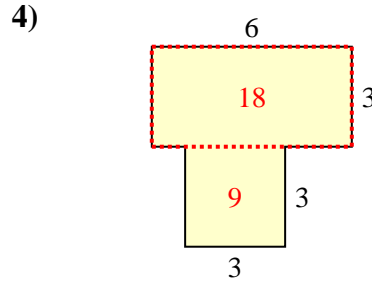
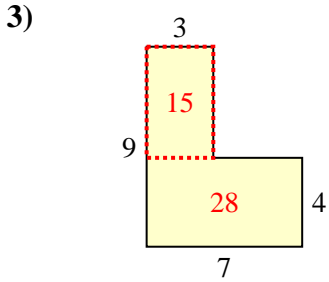
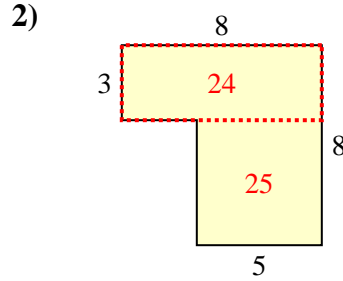
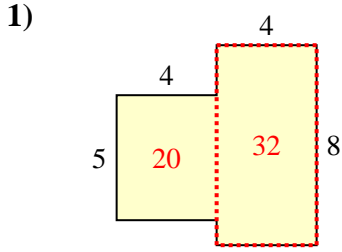


Risposte

- 1. _____
- 2. _____
- 3. _____
- 4. _____
- 5. _____
- 6. _____
- 7. _____
- 8. _____
- 9. _____
- 10. _____



Trova l'area di ciascuna forma, Le misure sono in millimetri (mm). Non fare l'equivalenza.



Risposte

1. 52 mm²
2. 49 mm²
3. 43 mm²
4. 27 mm²
5. 24 mm²
6. 42 mm²
7. 41 mm²
8. 46 mm²
9. 35 mm²
10. 62 mm²