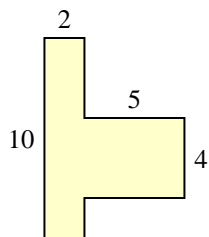


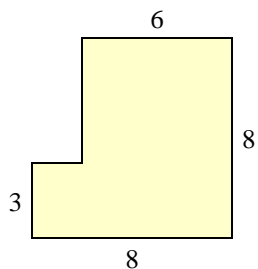


Trova l'area di ciascuna forma, Le misure sono in millimetri (mm). Non fare l'equivalenza.

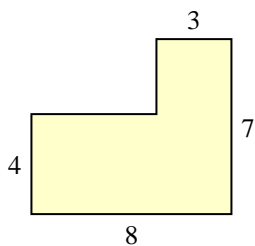
1)



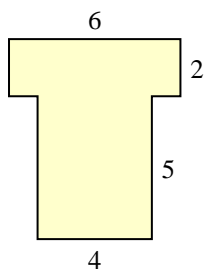
2)



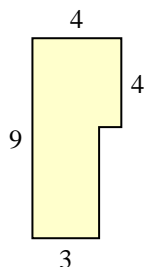
3)



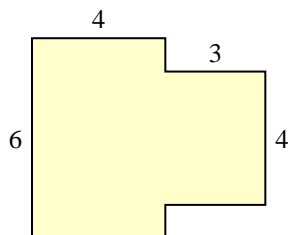
4)



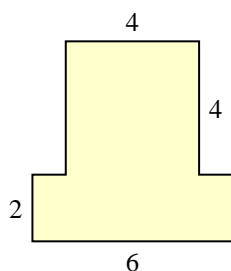
5)



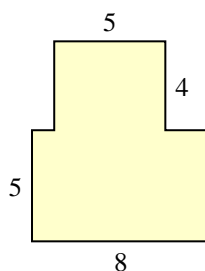
6)



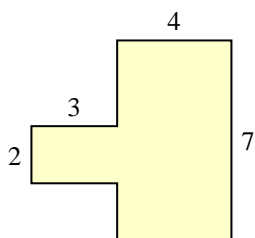
7)



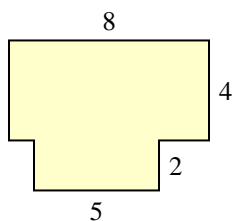
8)



9)



10)



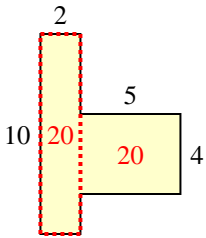
Risposte

- 1. _____
- 2. _____
- 3. _____
- 4. _____
- 5. _____
- 6. _____
- 7. _____
- 8. _____
- 9. _____
- 10. _____

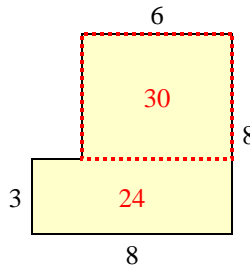


Trova l'area di ciascuna forma, Le misure sono in millimetri (mm). Non fare l'equivalenza.

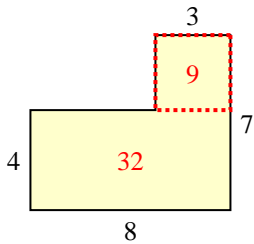
1)



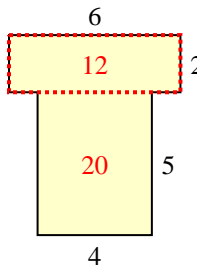
2)



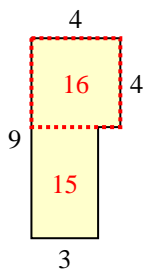
3)



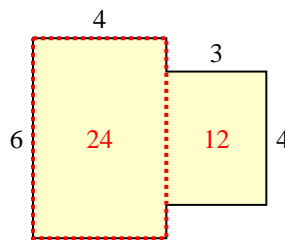
4)



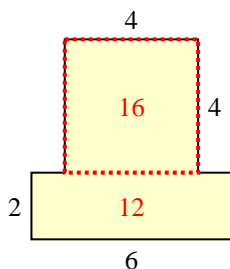
5)



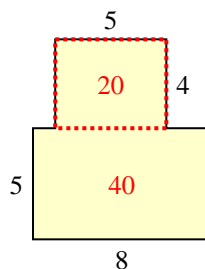
6)



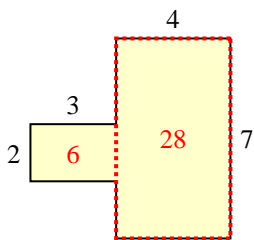
7)



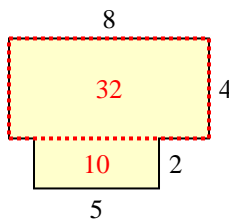
8)



9)



10)



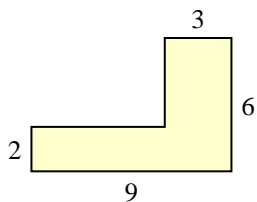
Risposte

1. 40 mm²
2. 54 mm²
3. 41 mm²
4. 32 mm²
5. 31 mm²
6. 36 mm²
7. 28 mm²
8. 60 mm²
9. 34 mm²
10. 42 mm²

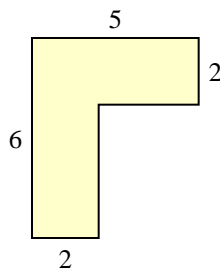


Trova l'area di ciascuna forma, Le misure sono in millimetri (mm). Non fare l'equivalenza.

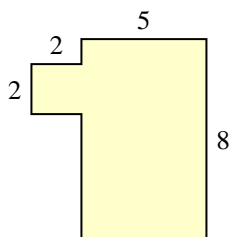
1)



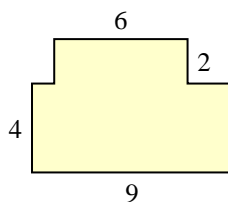
2)



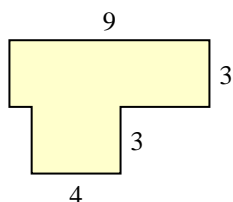
3)



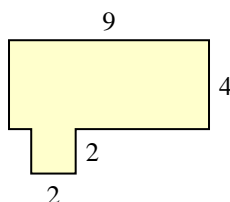
4)



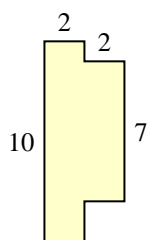
5)



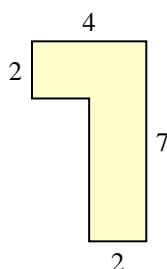
6)



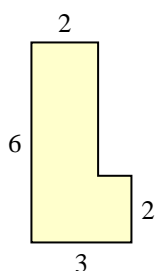
7)



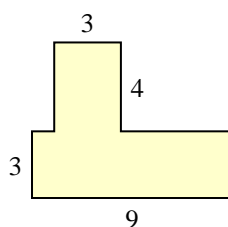
8)



9)



10)



Risposte

1. _____

2. _____

3. _____

4. _____

5. _____

6. _____

7. _____

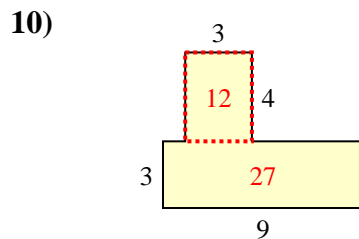
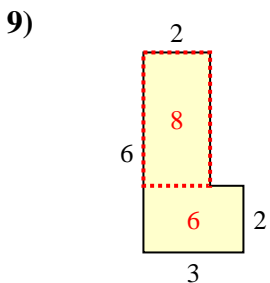
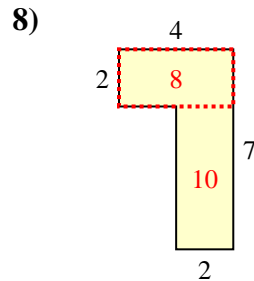
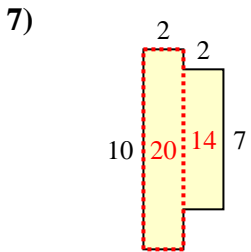
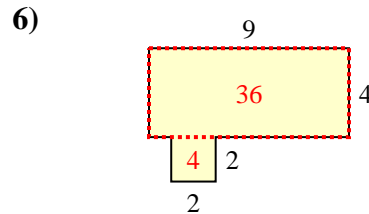
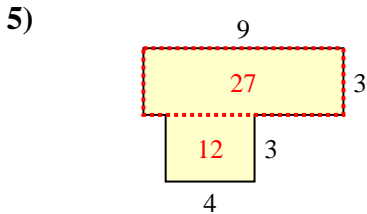
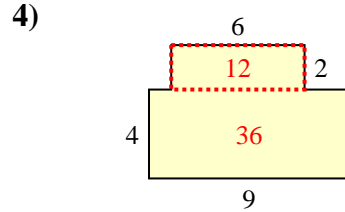
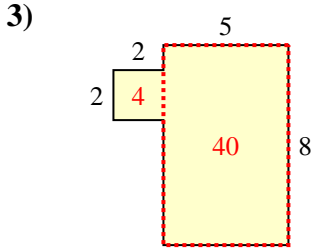
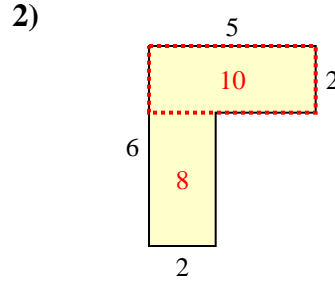
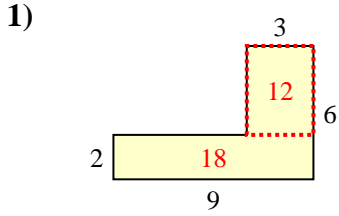
8. _____

9. _____

10. _____



Trova l'area di ciascuna forma, Le misure sono in millimetri (mm). Non fare l'equivalenza.



Risposte

1. 30 mm²

2. 18 mm²

3. 44 mm²

4. 48 mm²

5. 39 mm²

6. 40 mm²

7. 34 mm²

8. 18 mm²

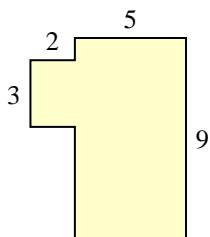
9. 14 mm²

10. 39 mm²

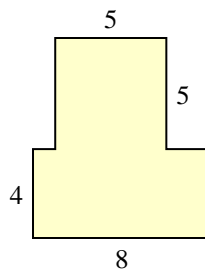


Trova l'area di ciascuna forma, Le misure sono in millimetri (mm). Non fare l'equivalenza.

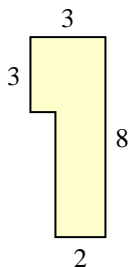
1)



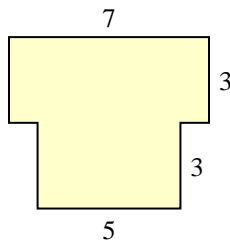
2)



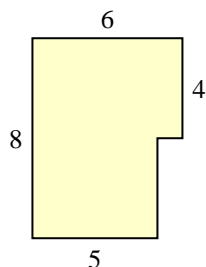
3)



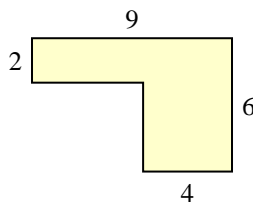
4)



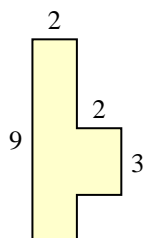
5)



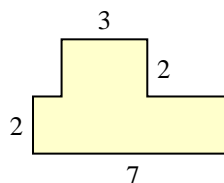
6)



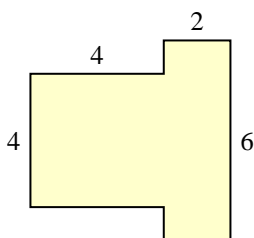
7)



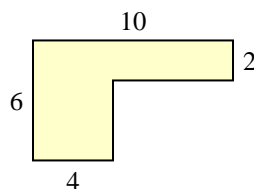
8)



9)



10)



Risposte

1. _____

2. _____

3. _____

4. _____

5. _____

6. _____

7. _____

8. _____

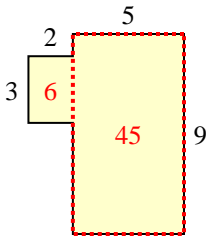
9. _____

10. _____

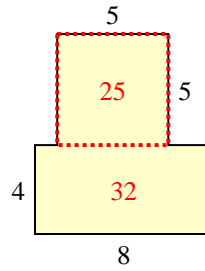


Trova l'area di ciascuna forma, Le misure sono in millimetri (mm). Non fare l'equivalenza.

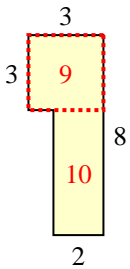
1)



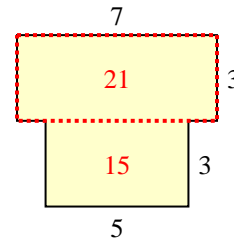
2)



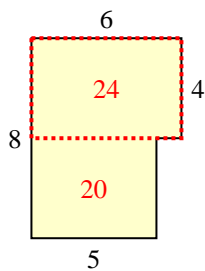
3)



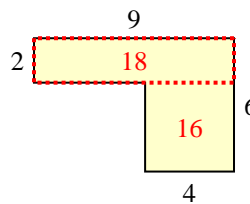
4)



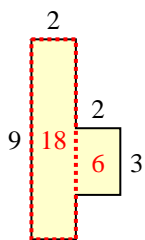
5)



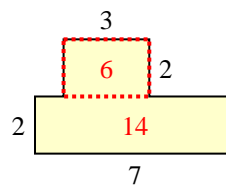
6)



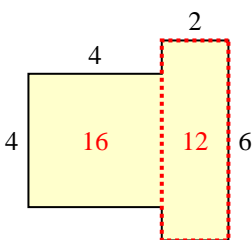
7)



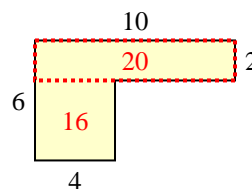
8)



9)



10)



Risposte

1. 51 mm²

2. 57 mm²

3. 19 mm²

4. 36 mm²

5. 44 mm²

6. 34 mm²

7. 24 mm²

8. 20 mm²

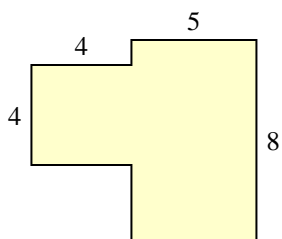
9. 28 mm²

10. 36 mm²

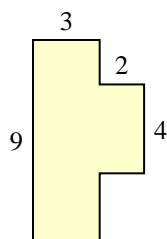


Trova l'area di ciascuna forma, Le misure sono in millimetri (mm). Non fare l'equivalenza.

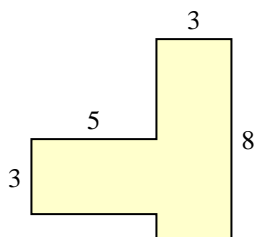
1)



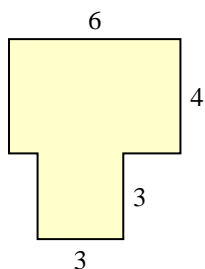
2)



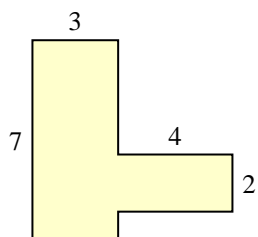
3)



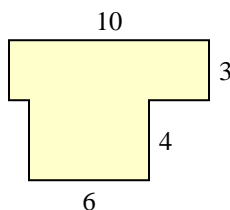
4)



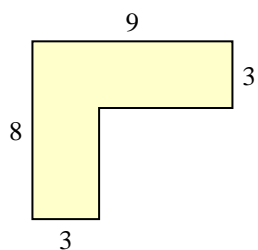
5)



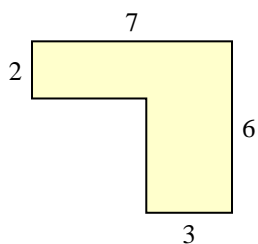
6)



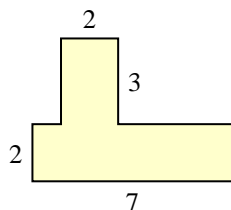
7)



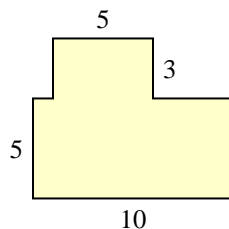
8)



9)



10)



Risposte

1. _____

2. _____

3. _____

4. _____

5. _____

6. _____

7. _____

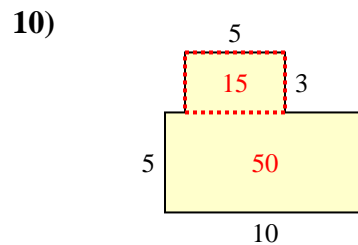
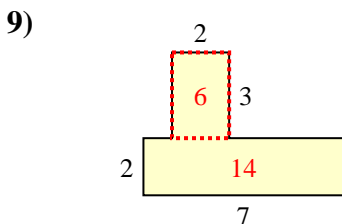
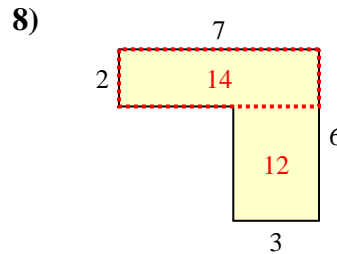
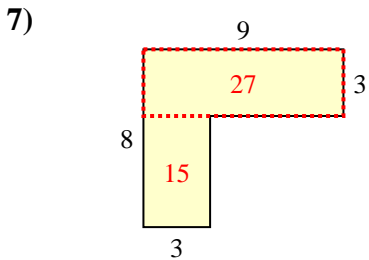
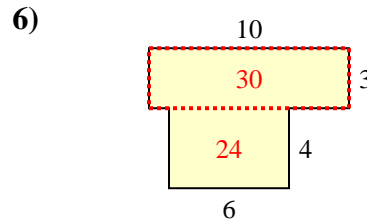
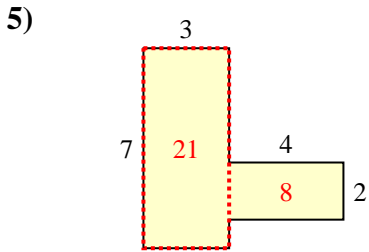
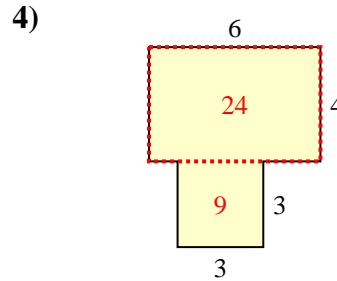
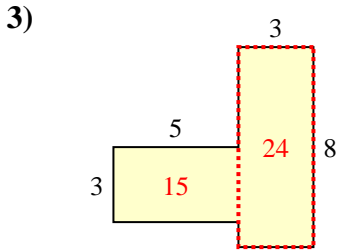
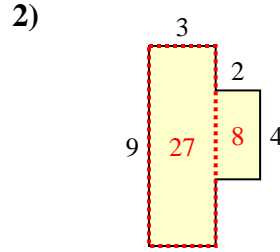
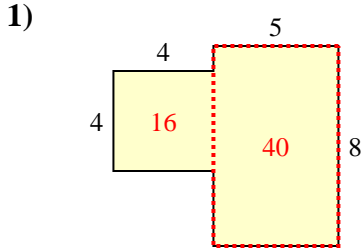
8. _____

9. _____

10. _____



Trova l'area di ciascuna forma, Le misure sono in millimetri (mm). Non fare l'equivalenza.



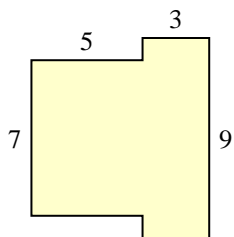
Risposte

1. 56 mm²
2. 35 mm²
3. 39 mm²
4. 33 mm²
5. 29 mm²
6. 54 mm²
7. 42 mm²
8. 26 mm²
9. 20 mm²
10. 65 mm²

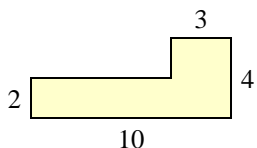


Trova l'area di ciascuna forma, Le misure sono in millimetri (mm). Non fare l'equivalenza.

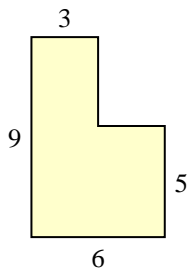
1)



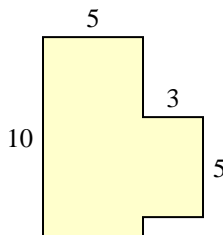
2)



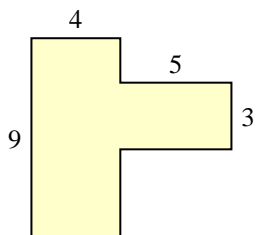
3)



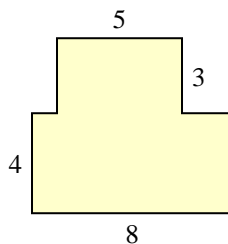
4)



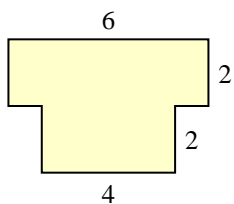
5)



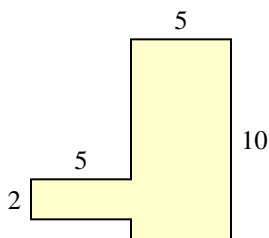
6)



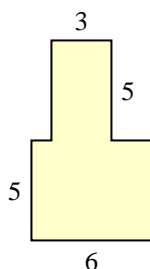
7)



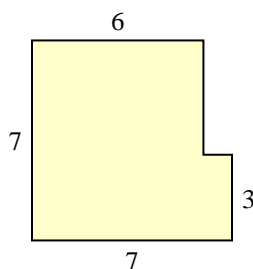
8)



9)



10)



Risposte

1. _____

2. _____

3. _____

4. _____

5. _____

6. _____

7. _____

8. _____

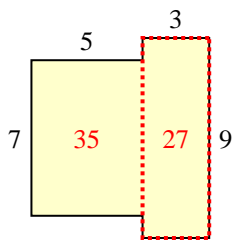
9. _____

10. _____

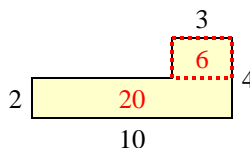


Trova l'area di ciascuna forma, Le misure sono in millimetri (mm). Non fare l'equivalenza.

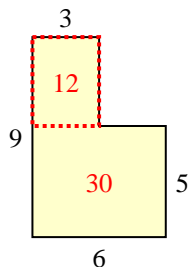
1)



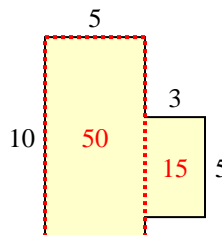
2)



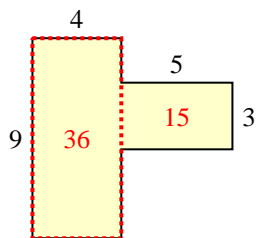
3)



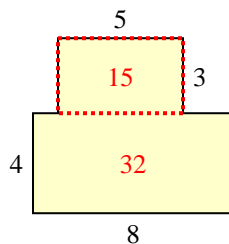
4)



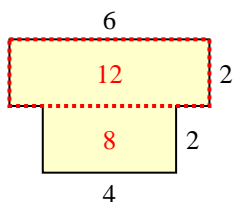
5)



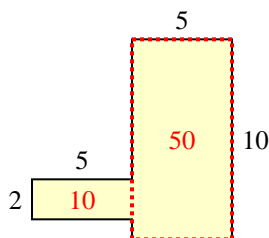
6)



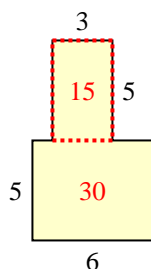
7)



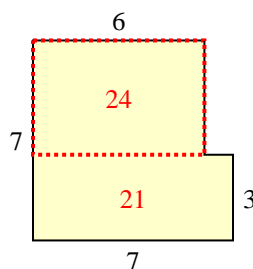
8)



9)



10)



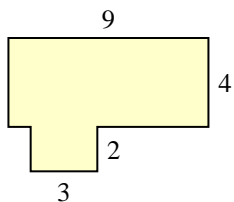
Risposte

1. 62 mm²
2. 26 mm²
3. 42 mm²
4. 65 mm²
5. 51 mm²
6. 47 mm²
7. 20 mm²
8. 60 mm²
9. 45 mm²
10. 45 mm²

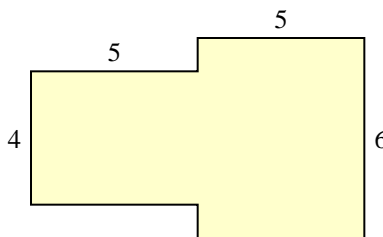


Trova l'area di ciascuna forma, Le misure sono in millimetri (mm). Non fare l'equivalenza.

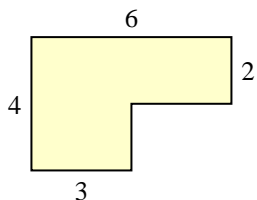
1)



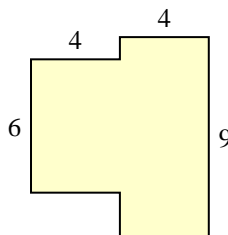
2)



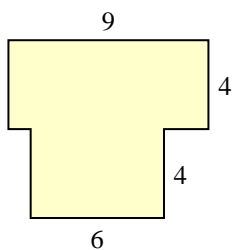
3)



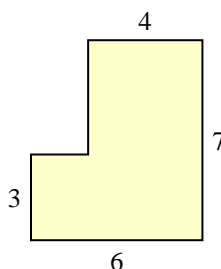
4)



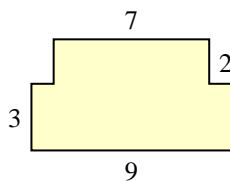
5)



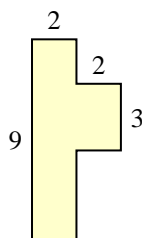
6)



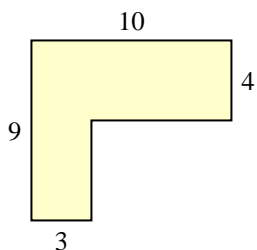
7)



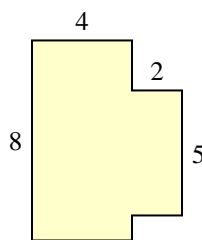
8)



9)



10)

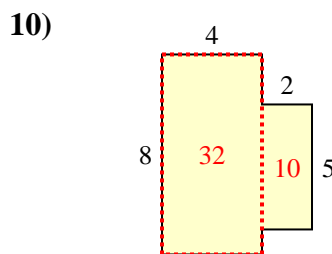
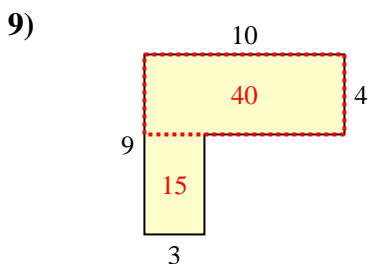
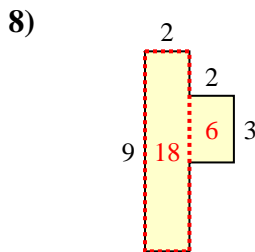
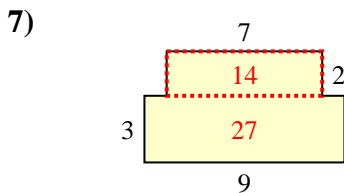
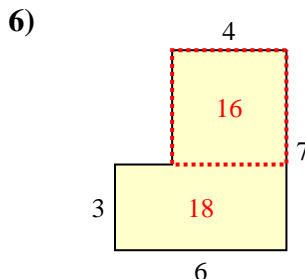
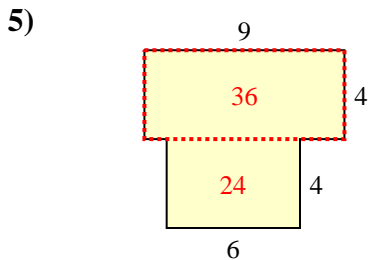
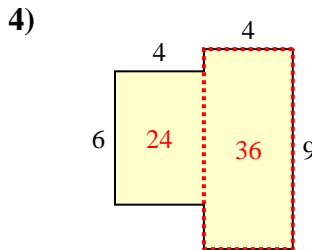
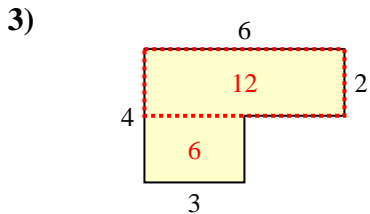
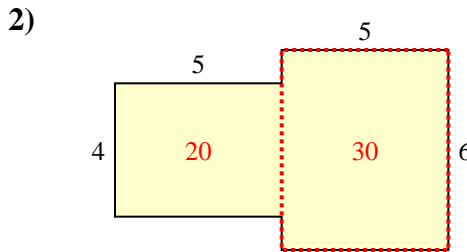
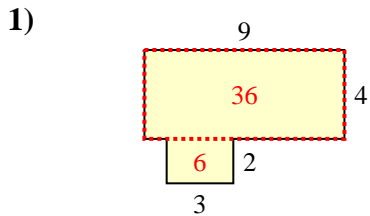


Risposte

- 1. _____
- 2. _____
- 3. _____
- 4. _____
- 5. _____
- 6. _____
- 7. _____
- 8. _____
- 9. _____
- 10. _____



Trova l'area di ciascuna forma, Le misure sono in millimetri (mm). Non fare l'equivalenza.



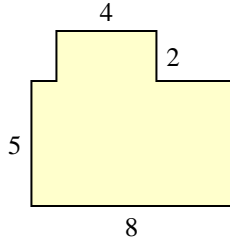
Risposte

1. 42 mm²
2. 50 mm²
3. 18 mm²
4. 60 mm²
5. 60 mm²
6. 34 mm²
7. 41 mm²
8. 24 mm²
9. 55 mm²
10. 42 mm²

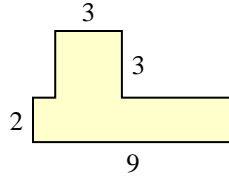


Trova l'area di ciascuna forma, Le misure sono in millimetri (mm). Non fare l'equivalenza.

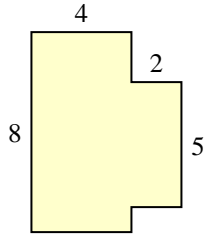
1)



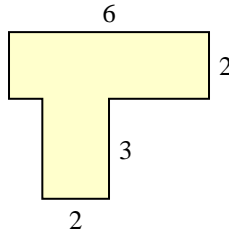
2)



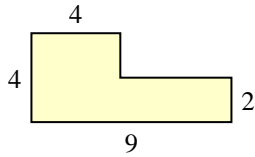
3)



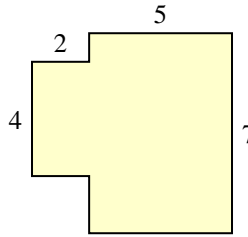
4)



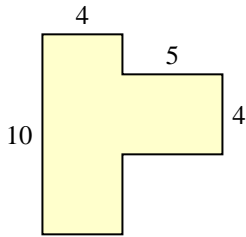
5)



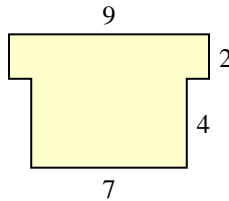
6)



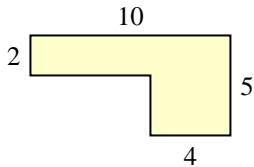
7)



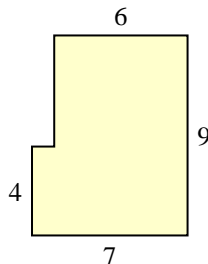
8)



9)



10)



Risposte

1. _____

2. _____

3. _____

4. _____

5. _____

6. _____

7. _____

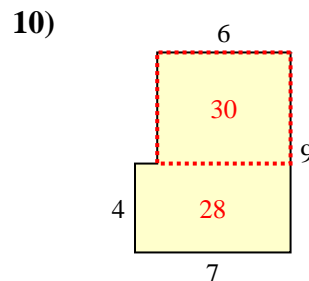
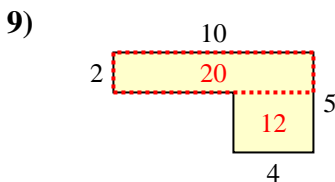
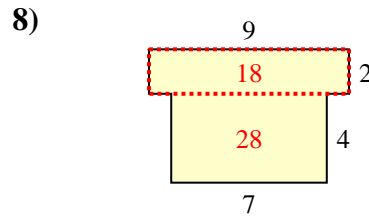
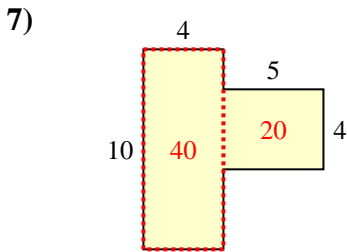
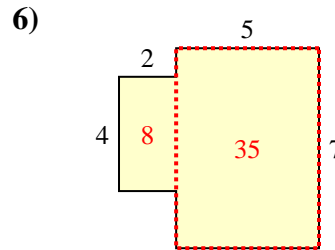
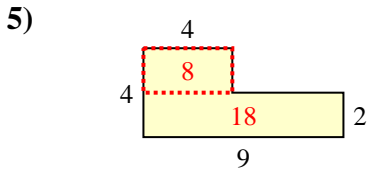
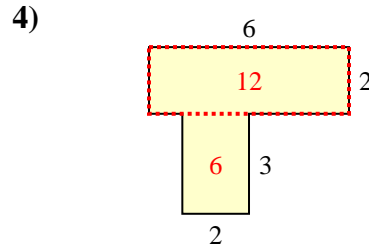
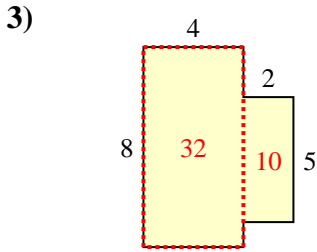
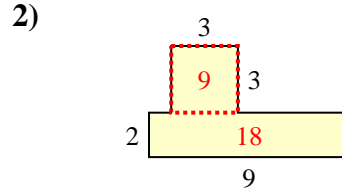
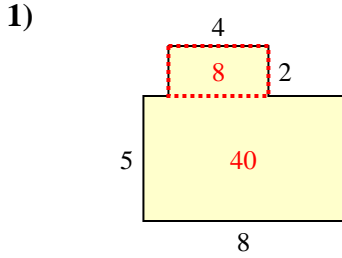
8. _____

9. _____

10. _____



Trova l'area di ciascuna forma, Le misure sono in millimetri (mm). Non fare l'equivalenza.



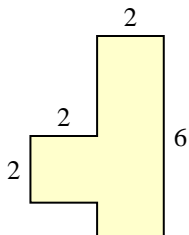
Risposte

1. 48 mm²
2. 27 mm²
3. 42 mm²
4. 18 mm²
5. 26 mm²
6. 43 mm²
7. 60 mm²
8. 46 mm²
9. 32 mm²
10. 58 mm²

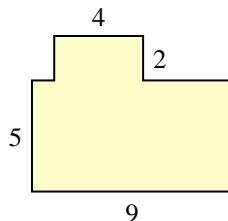


Trova l'area di ciascuna forma, Le misure sono in millimetri (mm). Non fare l'equivalenza.

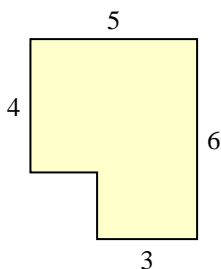
1)



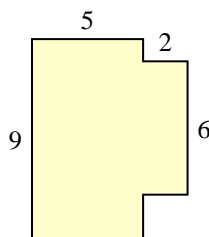
2)



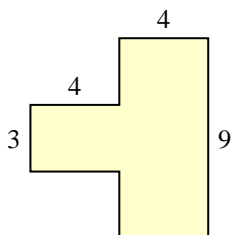
3)



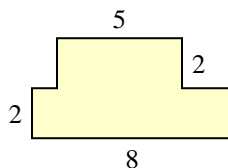
4)



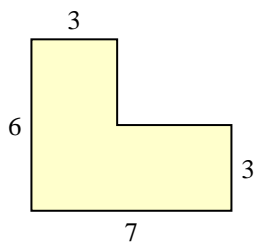
5)



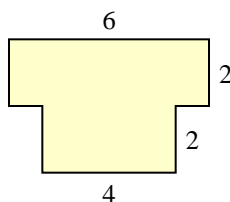
6)



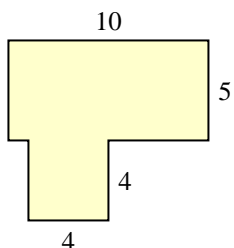
7)



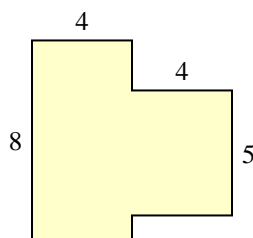
8)



9)



10)



Risposte

1. _____

2. _____

3. _____

4. _____

5. _____

6. _____

7. _____

8. _____

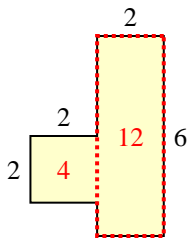
9. _____

10. _____

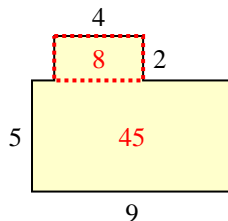


Trova l'area di ciascuna forma, Le misure sono in millimetri (mm). Non fare l'equivalenza.

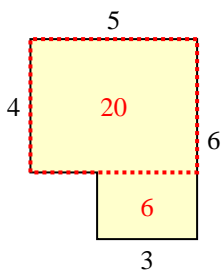
1)



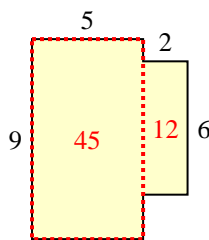
2)



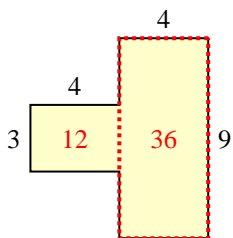
3)



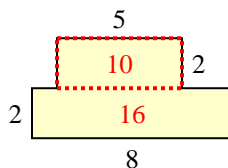
4)



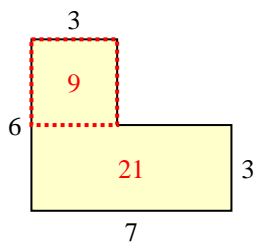
5)



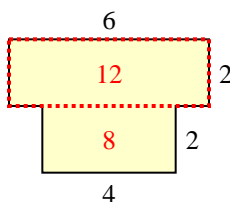
6)



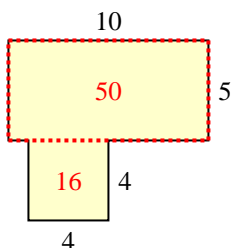
7)



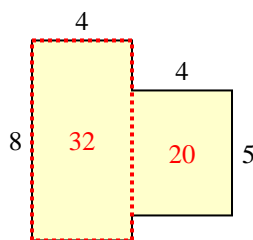
8)



9)



10)



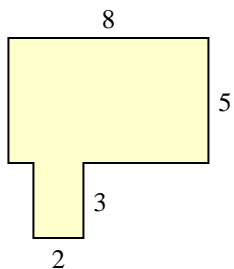
Risposte

1. 16 mm²
2. 53 mm²
3. 26 mm²
4. 57 mm²
5. 48 mm²
6. 26 mm²
7. 30 mm²
8. 20 mm²
9. 66 mm²
10. 52 mm²

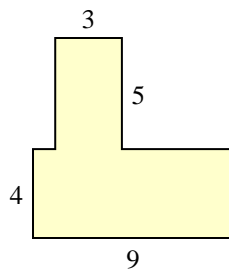


Trova l'area di ciascuna forma, Le misure sono in millimetri (mm). Non fare l'equivalenza.

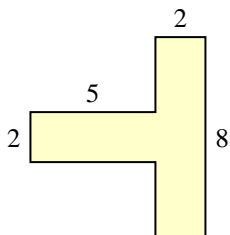
1)



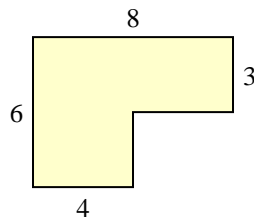
2)



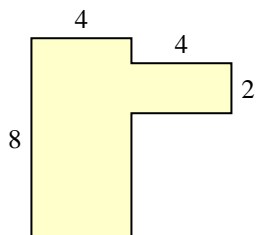
3)



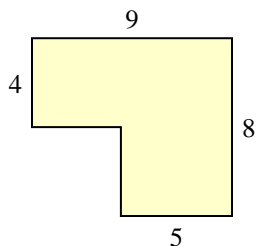
4)



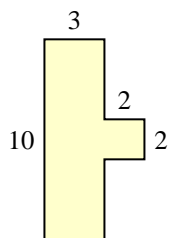
5)



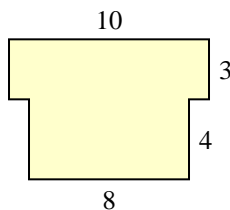
6)



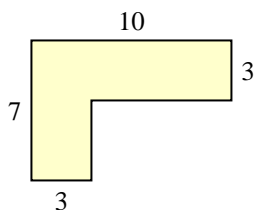
7)



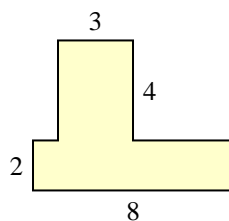
8)



9)



10)



Risposte

1. _____

2. _____

3. _____

4. _____

5. _____

6. _____

7. _____

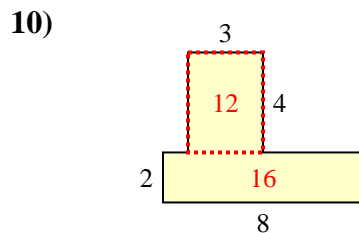
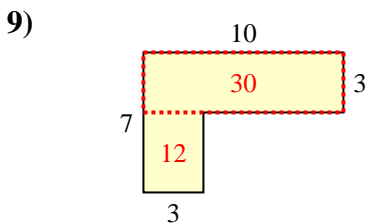
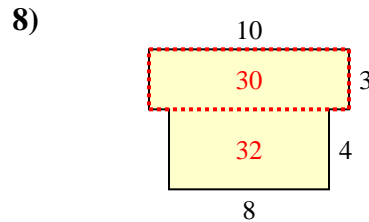
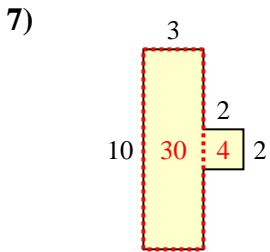
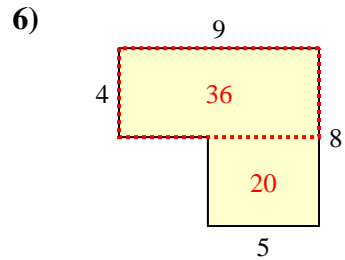
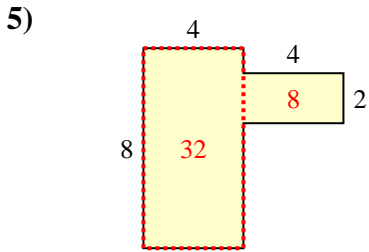
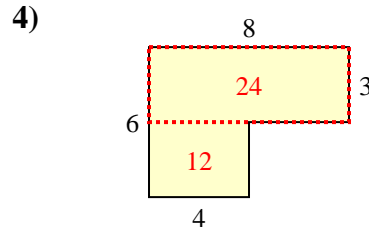
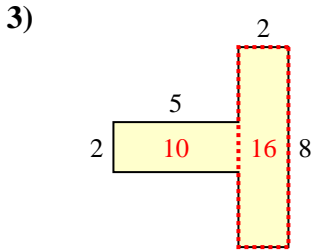
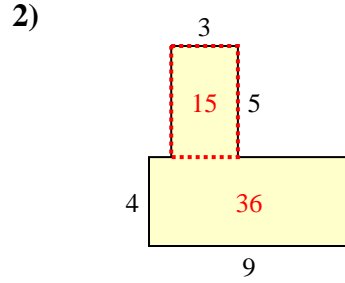
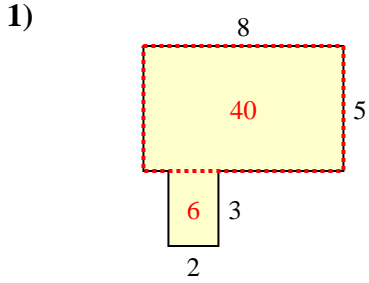
8. _____

9. _____

10. _____

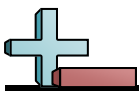


Trova l'area di ciascuna forma, Le misure sono in millimetri (mm). Non fare l'equivalenza.



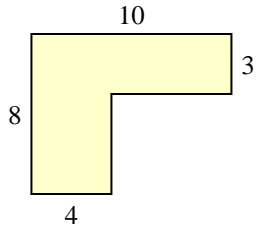
Risposte

1. 46 mm²
2. 51 mm²
3. 26 mm²
4. 36 mm²
5. 40 mm²
6. 56 mm²
7. 34 mm²
8. 62 mm²
9. 42 mm²
10. 28 mm²

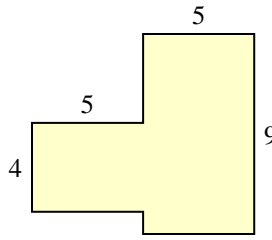


Trova l'area di ciascuna forma, Le misure sono in millimetri (mm). Non fare l'equivalenza.

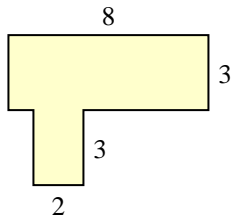
1)



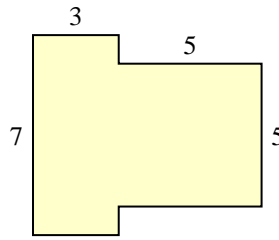
2)



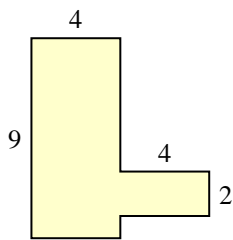
3)



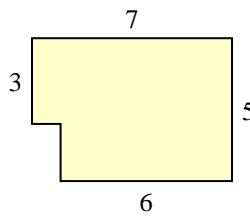
4)



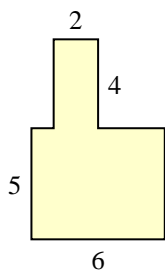
5)



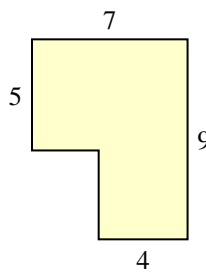
6)



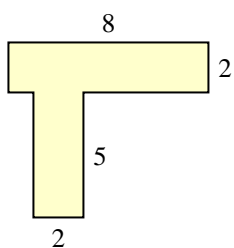
7)



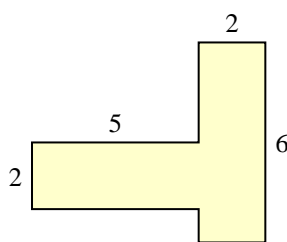
8)



9)



10)

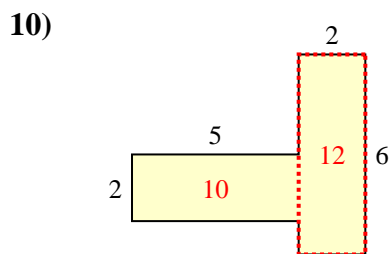
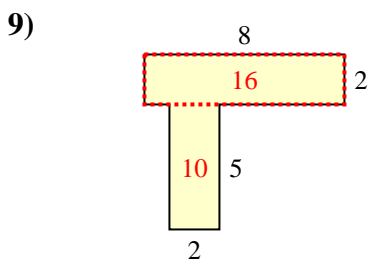
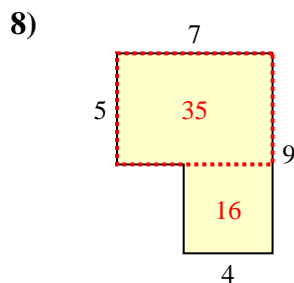
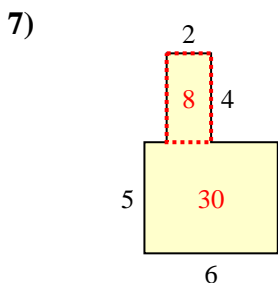
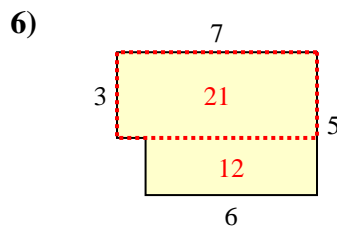
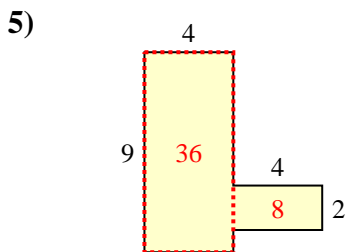
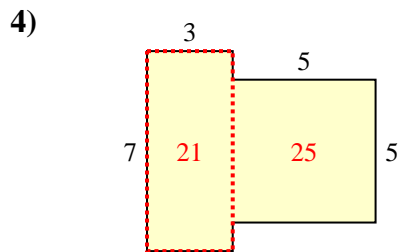
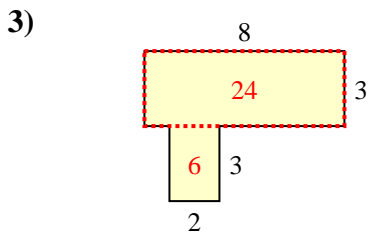
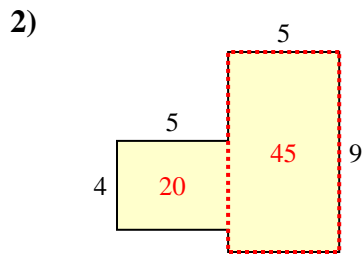
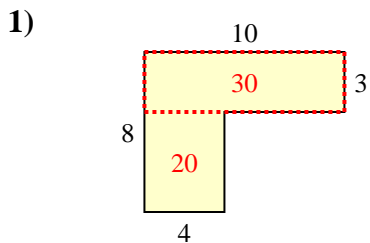


Risposte

- 1. _____
- 2. _____
- 3. _____
- 4. _____
- 5. _____
- 6. _____
- 7. _____
- 8. _____
- 9. _____
- 10. _____



Trova l'area di ciascuna forma, Le misure sono in millimetri (mm). Non fare l'equivalenza.



Risposte

1. 50 mm²
2. 65 mm²
3. 30 mm²
4. 46 mm²
5. 44 mm²
6. 33 mm²
7. 38 mm²
8. 51 mm²
9. 26 mm²
10. 22 mm²