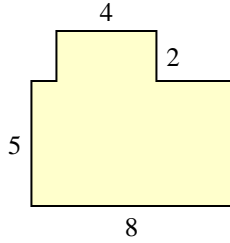


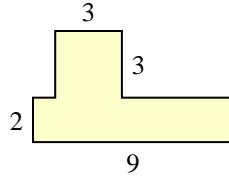


Trova l'area di ciascuna forma, Le misure sono in millimetri (mm). Non fare l'equivalenza.

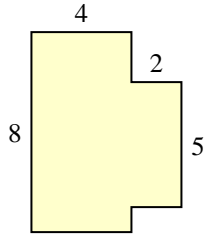
1)



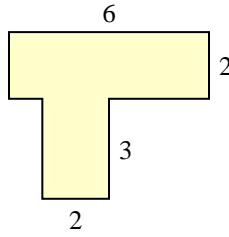
2)



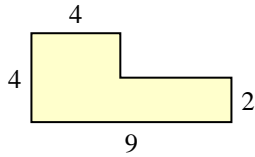
3)



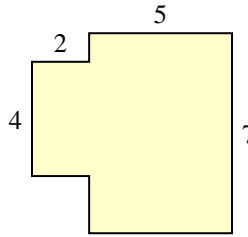
4)



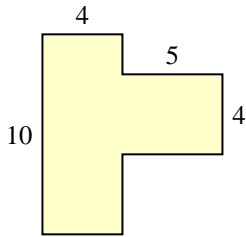
5)



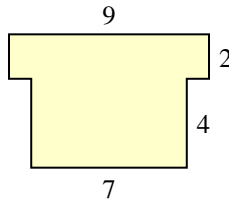
6)



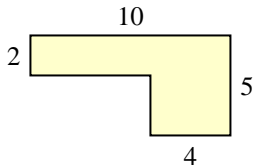
7)



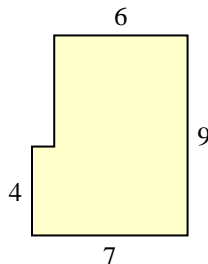
8)



9)



10)



Risposte

1. _____

2. _____

3. _____

4. _____

5. _____

6. _____

7. _____

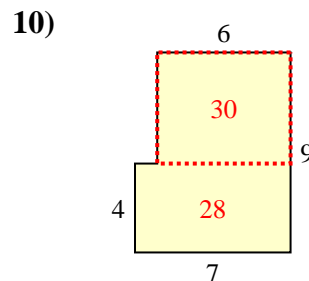
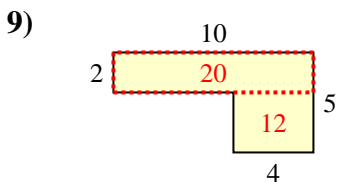
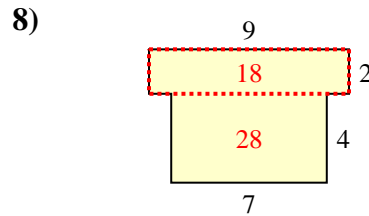
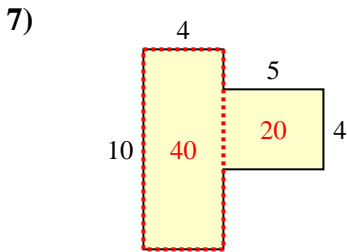
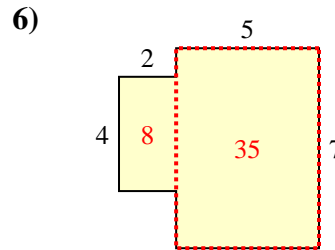
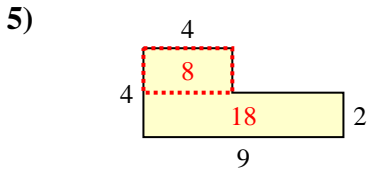
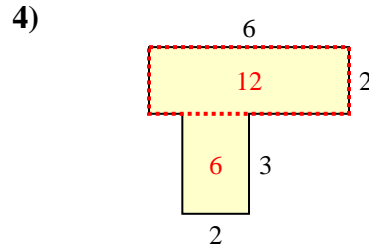
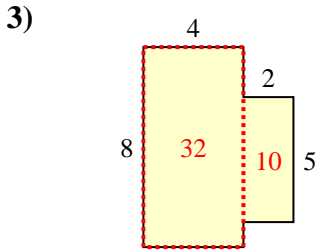
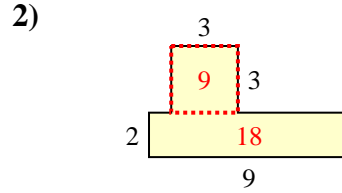
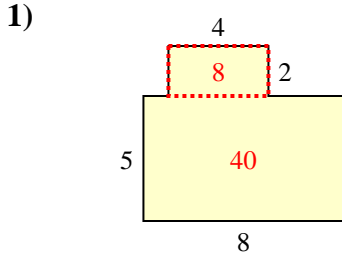
8. _____

9. _____

10. _____



Trova l'area di ciascuna forma, Le misure sono in millimetri (mm). Non fare l'equivalenza.



Risposte

1. 48 mm²
2. 27 mm²
3. 42 mm²
4. 18 mm²
5. 26 mm²
6. 43 mm²
7. 60 mm²
8. 46 mm²
9. 32 mm²
10. 58 mm²