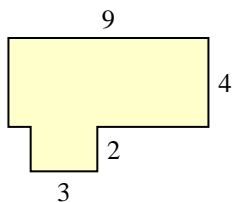


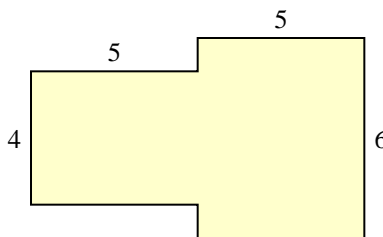


Trova l'area di ciascuna forma, Le misure sono in millimetri (mm). Non fare l'equivalenza.

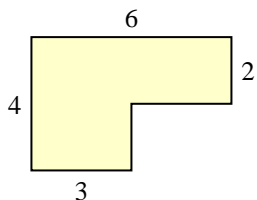
1)



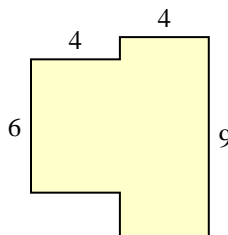
2)



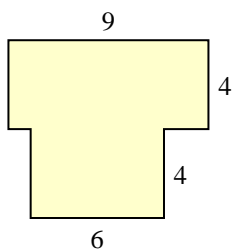
3)



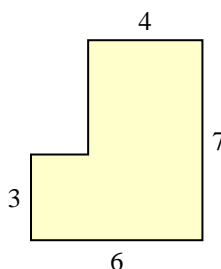
4)



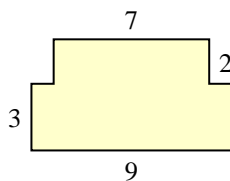
5)



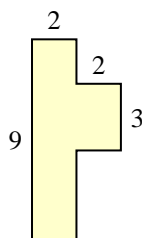
6)



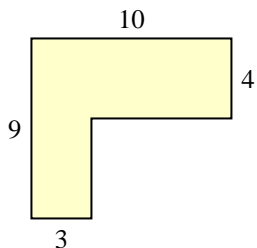
7)



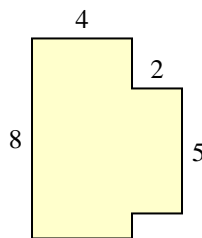
8)



9)



10)



Risposte

1. \_\_\_\_\_

2. \_\_\_\_\_

3. \_\_\_\_\_

4. \_\_\_\_\_

5. \_\_\_\_\_

6. \_\_\_\_\_

7. \_\_\_\_\_

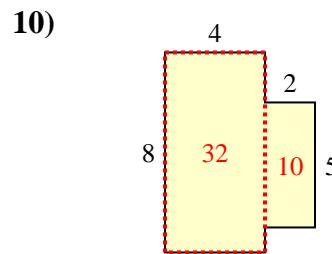
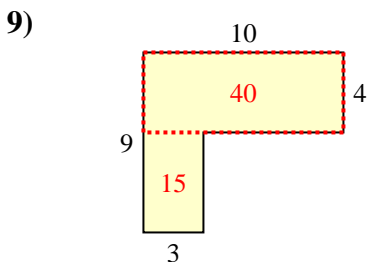
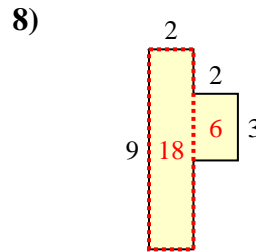
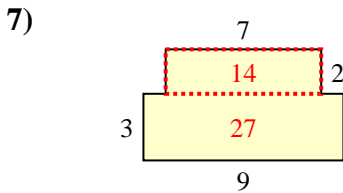
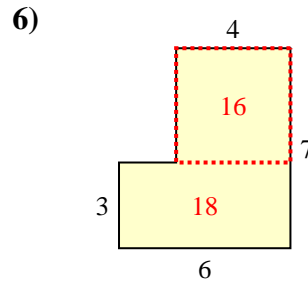
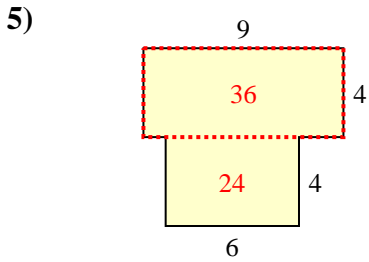
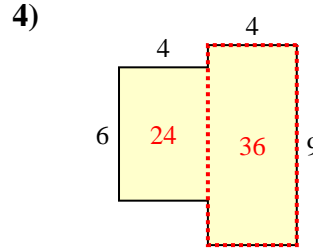
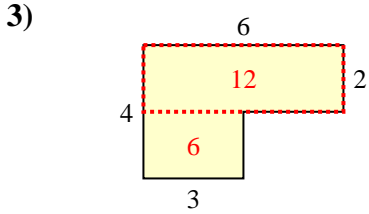
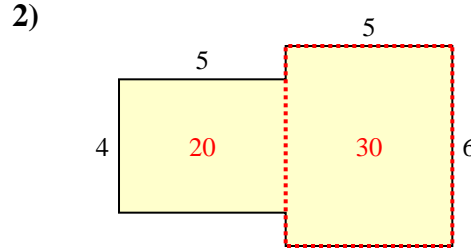
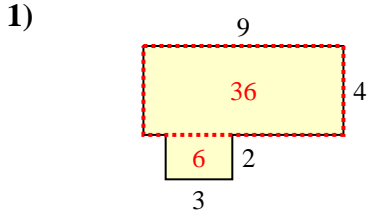
8. \_\_\_\_\_

9. \_\_\_\_\_

10. \_\_\_\_\_



Trova l'area di ciascuna forma, Le misure sono in millimetri (mm). Non fare l'equivalenza.



**Risposte**

1. 42 mm<sup>2</sup>
2. 50 mm<sup>2</sup>
3. 18 mm<sup>2</sup>
4. 60 mm<sup>2</sup>
5. 60 mm<sup>2</sup>
6. 34 mm<sup>2</sup>
7. 41 mm<sup>2</sup>
8. 24 mm<sup>2</sup>
9. 55 mm<sup>2</sup>
10. 42 mm<sup>2</sup>