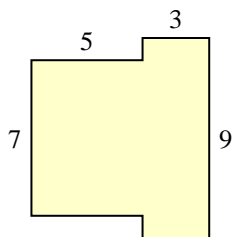


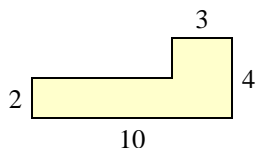


Trova l'area di ciascuna forma, Le misure sono in millimetri (mm). Non fare l'equivalenza.

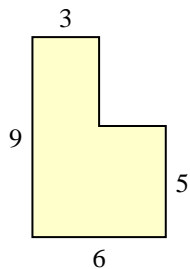
1)



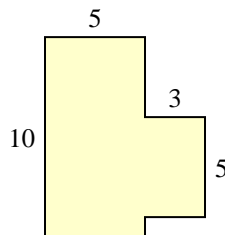
2)



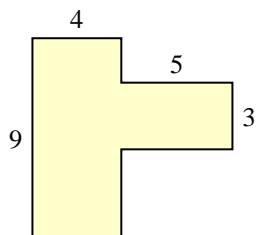
3)



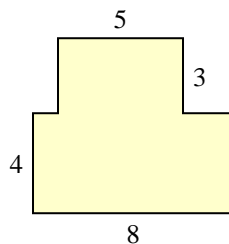
4)



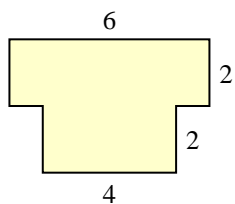
5)



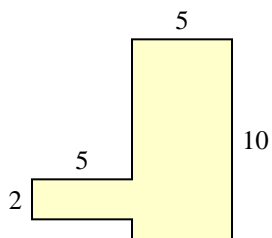
6)



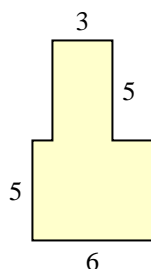
7)



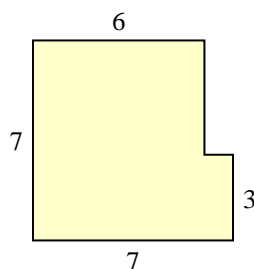
8)



9)



10)



Risposte

1. \_\_\_\_\_

2. \_\_\_\_\_

3. \_\_\_\_\_

4. \_\_\_\_\_

5. \_\_\_\_\_

6. \_\_\_\_\_

7. \_\_\_\_\_

8. \_\_\_\_\_

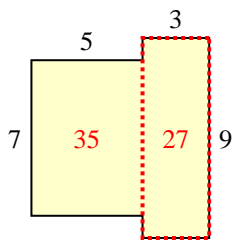
9. \_\_\_\_\_

10. \_\_\_\_\_

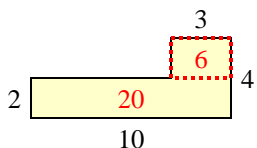


Trova l'area di ciascuna forma, Le misure sono in millimetri (mm). Non fare l'equivalenza.

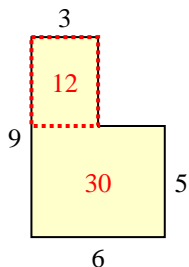
1)



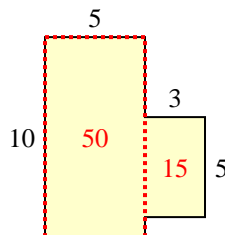
2)



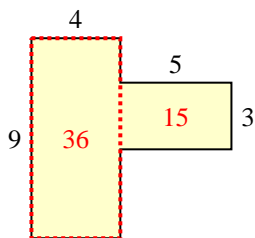
3)



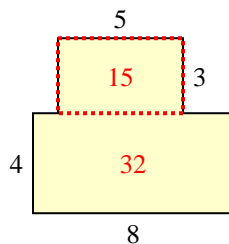
4)



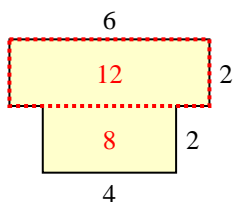
5)



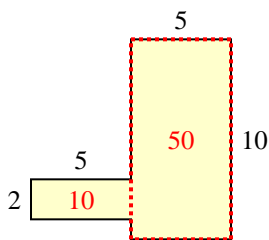
6)



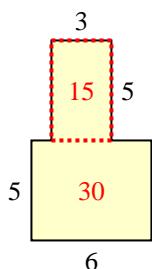
7)



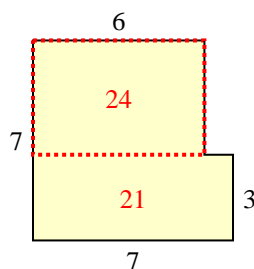
8)



9)



10)



**Risposte**

1. 62 mm<sup>2</sup>
2. 26 mm<sup>2</sup>
3. 42 mm<sup>2</sup>
4. 65 mm<sup>2</sup>
5. 51 mm<sup>2</sup>
6. 47 mm<sup>2</sup>
7. 20 mm<sup>2</sup>
8. 60 mm<sup>2</sup>
9. 45 mm<sup>2</sup>
10. 45 mm<sup>2</sup>