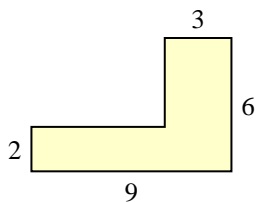


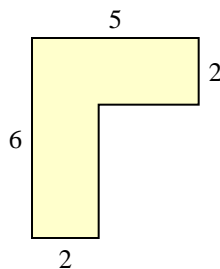


Trova l'area di ciascuna forma, Le misure sono in millimetri (mm). Non fare l'equivalenza.

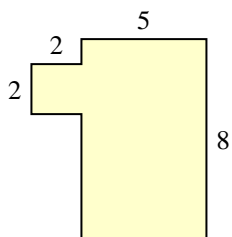
1)



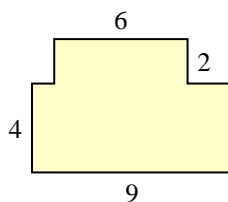
2)



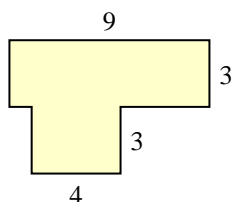
3)



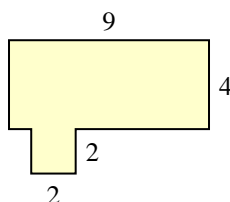
4)



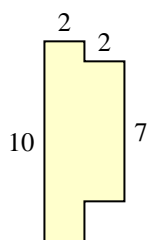
5)



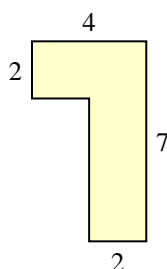
6)



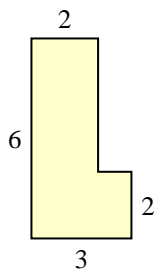
7)



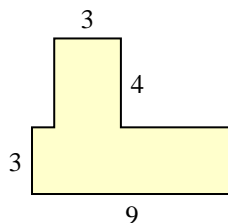
8)



9)



10)



Risposte

1. _____

2. _____

3. _____

4. _____

5. _____

6. _____

7. _____

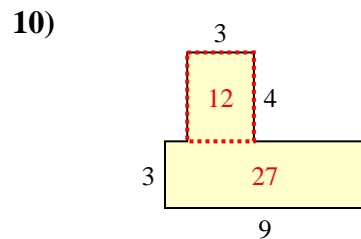
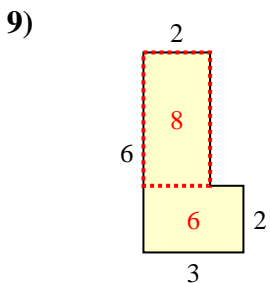
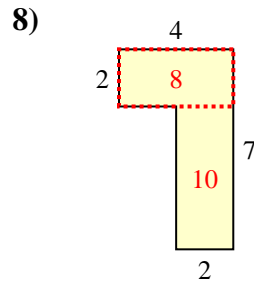
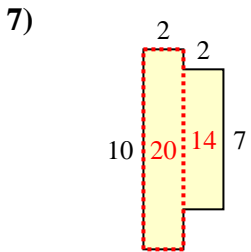
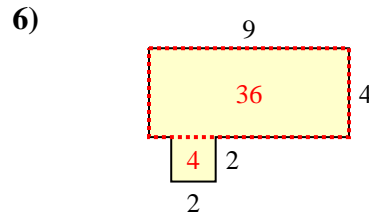
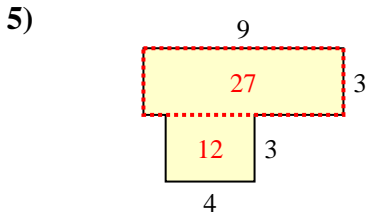
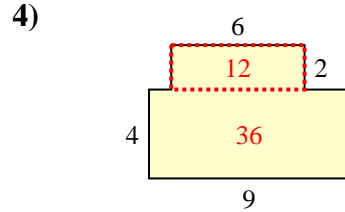
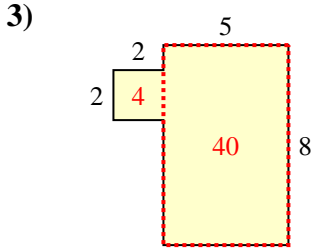
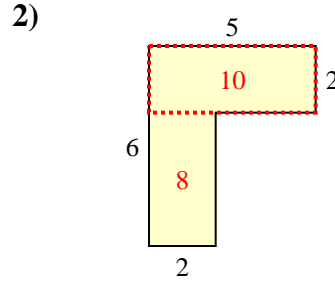
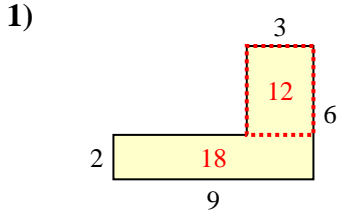
8. _____

9. _____

10. _____



Trova l'area di ciascuna forma, Le misure sono in millimetri (mm). Non fare l'equivalenza.



Risposte

1. 30 mm²

2. 18 mm²

3. 44 mm²

4. 48 mm²

5. 39 mm²

6. 40 mm²

7. 34 mm²

8. 18 mm²

9. 14 mm²

10. 39 mm²