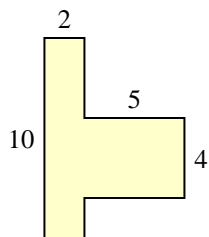


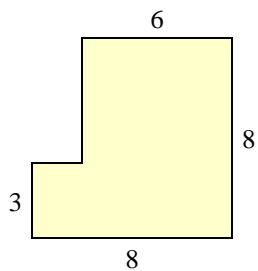


Trova l'area di ciascuna forma, Le misure sono in millimetri (mm). Non fare l'equivalenza.

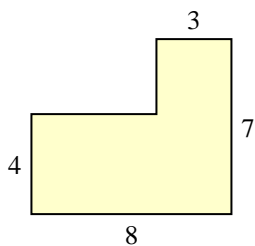
1)



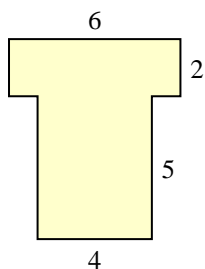
2)



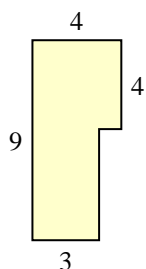
3)



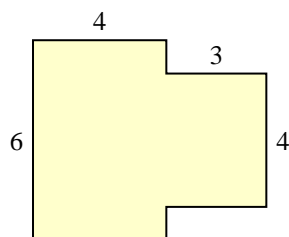
4)



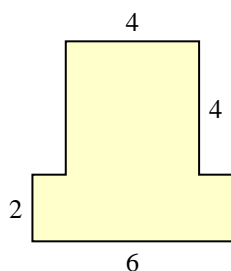
5)



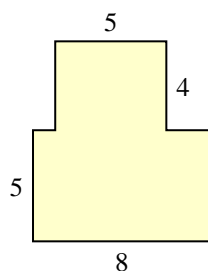
6)



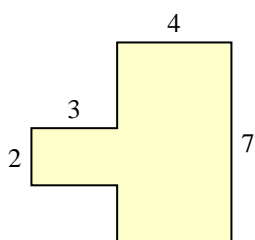
7)



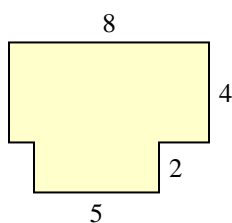
8)



9)



10)



Risposte

1. _____

2. _____

3. _____

4. _____

5. _____

6. _____

7. _____

8. _____

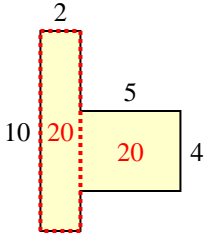
9. _____

10. _____

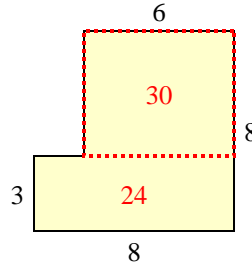


Trova l'area di ciascuna forma, Le misure sono in millimetri (mm). Non fare l'equivalenza.

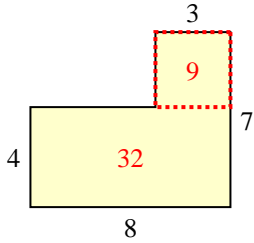
1)



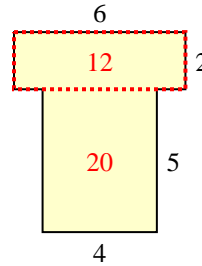
2)



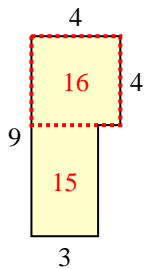
3)



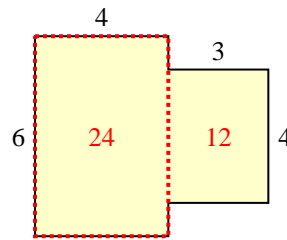
4)



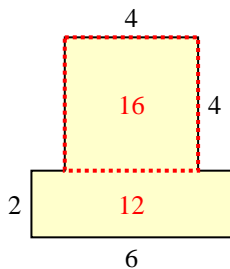
5)



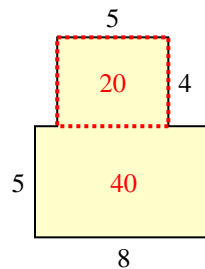
6)



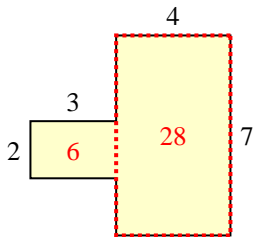
7)



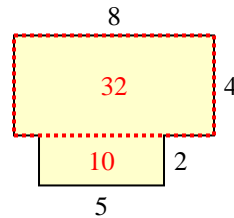
8)



9)



10)



Risposte

1. 40 mm²
2. 54 mm²
3. 41 mm²
4. 32 mm²
5. 31 mm²
6. 36 mm²
7. 28 mm²
8. 60 mm²
9. 34 mm²
10. 42 mm²