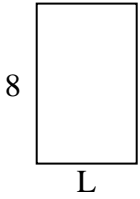





Calcola il valore di "L".

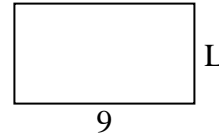
1) Area = 40 u^2



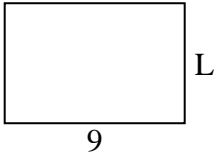
2) Area = 30 u^2



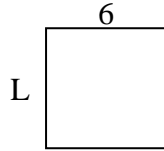
3) Area = 45 u^2



4) Area = 54 u^2



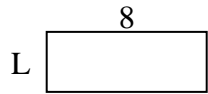
5) Area = 36 u^2



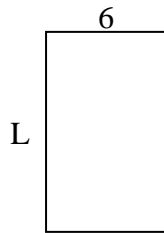
6) Area = 4 u^2



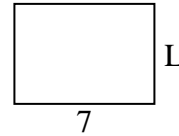
7) Area = 24 u^2



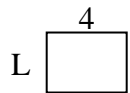
8) Area = 60 u^2



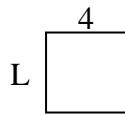
9) Area = 35 u^2



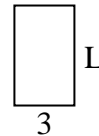
10) Area = 12 u^2



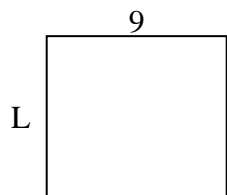
11) Area = 16 u^2




12) Area = 15 u^2



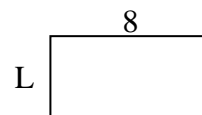
13) Area = 72 u^2



14) Area = 18 u^2



15) Area = 32 u^2

**Risposte**

1. _____

2. _____

3. _____

4. _____

5. _____

6. _____

7. _____

8. _____

9. _____

10. _____

11. _____

12. _____

13. _____

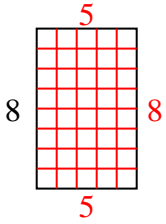
14. _____

15. _____

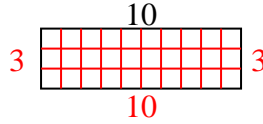


Calcola il valore di "L".

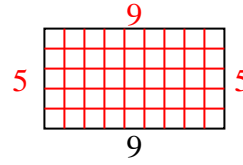
1) Area = 40 u^2



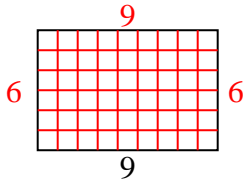
2) Area = 30 u^2



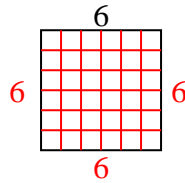
3) Area = 45 u^2



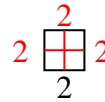
4) Area = 54 u^2



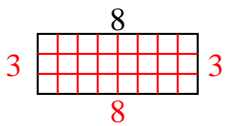
5) Area = 36 u^2



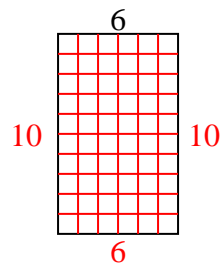
6) Area = 4 u^2



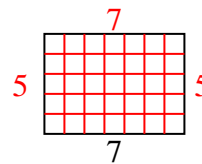
7) Area = 24 u^2



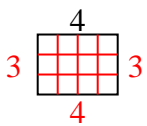
8) Area = 60 u^2



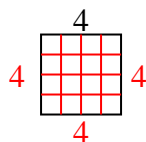
9) Area = 35 u^2



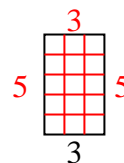
10) Area = 12 u^2



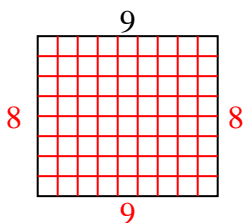
11) Area = 16 u^2



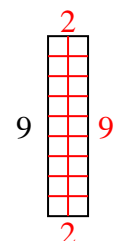
12) Area = 15 u^2



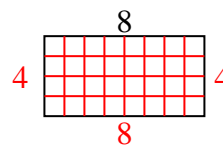
13) Area = 72 u^2



14) Area = 18 u^2



15) Area = 32 u^2

**Risposte**1. 52. 33. 54. 65. 66. 27. 38. 109. 510. 311. 412. 513. 814. 215. 4