

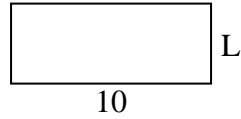


Calcola il valore di "L".

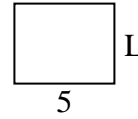
1) Area = 4 u^2




2) Area = 40 u^2



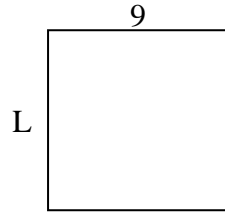
3) Area = 20 u^2



4) Area = 30 u^2



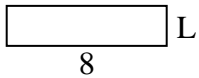
5) Area = 81 u^2



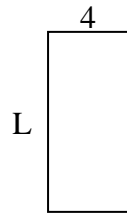
6) Area = 6 u^2



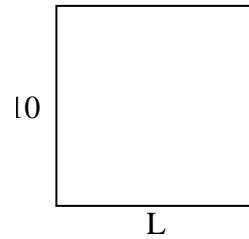
7) Area = 16 u^2



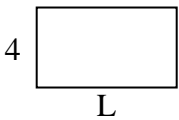
8) Area = 36 u^2



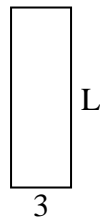
9) Area = 100 u^2



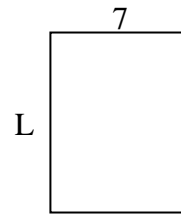
10) Area = 28 u^2



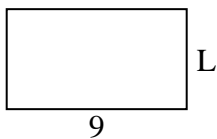
11) Area = 27 u^2



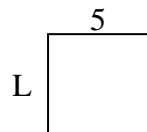
12) Area = 63 u^2



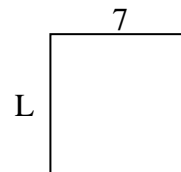
13) Area = 45 u^2



14) Area = 25 u^2



15) Area = 49 u^2

**Risposte**

1. _____

2. _____

3. _____

4. _____

5. _____

6. _____

7. _____

8. _____

9. _____

10. _____

11. _____

12. _____

13. _____

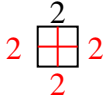
14. _____

15. _____

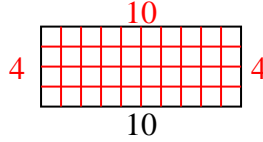


Calcola il valore di "L".

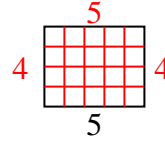
1) Area = $4 u^2$



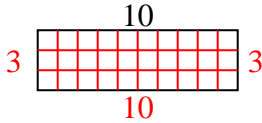
2) Area = $40 u^2$



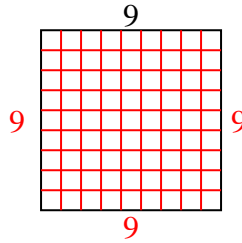
3) Area = $20 u^2$



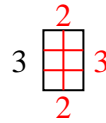
4) Area = $30 u^2$



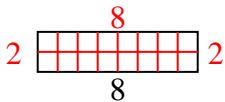
5) Area = $81 u^2$



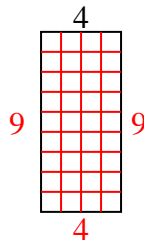
6) Area = $6 u^2$



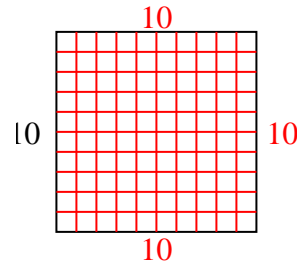
7) Area = $16 u^2$



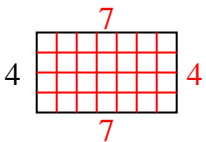
8) Area = $36 u^2$



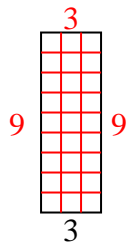
9) Area = $100 u^2$



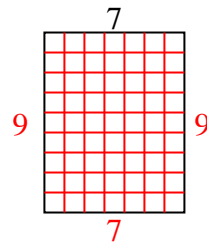
10) Area = $28 u^2$



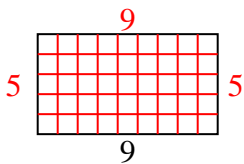
11) Area = $27 u^2$



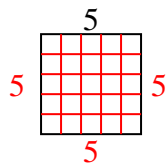
12) Area = $63 u^2$



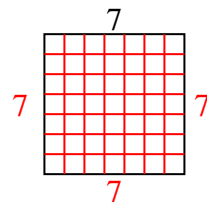
13) Area = $45 u^2$



14) Area = $25 u^2$



15) Area = $49 u^2$

**Risposte**1. 22. 43. 44. 35. 96. 27. 28. 99. 1010. 711. 912. 913. 514. 515. 7