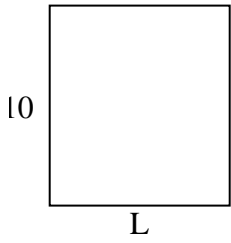


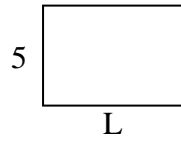


Calcola il valore di "L".

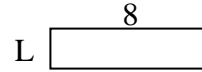
1) Area =  $90 u^2$



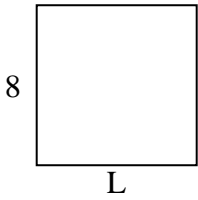
2) Area =  $35 u^2$



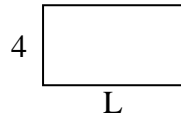
3) Area =  $16 u^2$



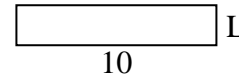
4) Area =  $64 u^2$




5) Area =  $28 u^2$



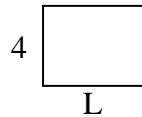
6) Area =  $20 u^2$



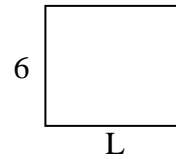
7) Area =  $18 u^2$



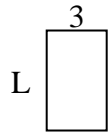
8) Area =  $20 u^2$



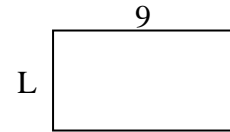
9) Area =  $42 u^2$



10) Area =  $15 u^2$




11) Area =  $45 u^2$



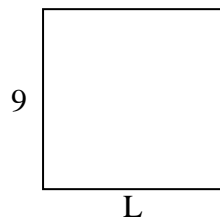
12) Area =  $10 u^2$



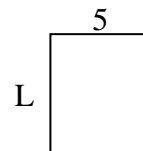
13) Area =  $54 u^2$



14) Area =  $81 u^2$



15) Area =  $30 u^2$

**Risposte**

1. \_\_\_\_\_

2. \_\_\_\_\_

3. \_\_\_\_\_

4. \_\_\_\_\_

5. \_\_\_\_\_

6. \_\_\_\_\_

7. \_\_\_\_\_

8. \_\_\_\_\_

9. \_\_\_\_\_

10. \_\_\_\_\_

11. \_\_\_\_\_

12. \_\_\_\_\_

13. \_\_\_\_\_

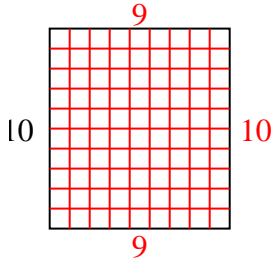
14. \_\_\_\_\_

15. \_\_\_\_\_

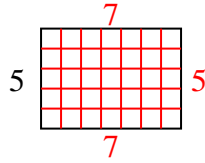


Calcola il valore di "L".

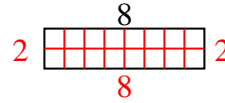
1) Area =  $90 \text{ u}^2$



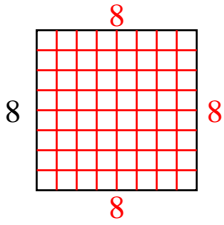
2) Area =  $35 \text{ u}^2$



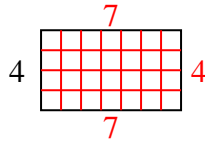
3) Area =  $16 \text{ u}^2$



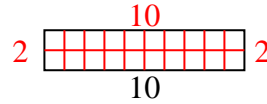
4) Area =  $64 \text{ u}^2$



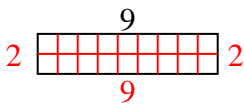
5) Area =  $28 \text{ u}^2$



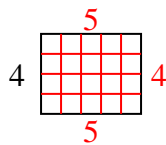
6) Area =  $20 \text{ u}^2$



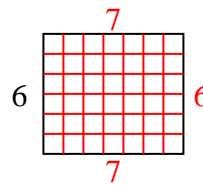
7) Area =  $18 \text{ u}^2$



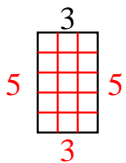
8) Area =  $20 \text{ u}^2$



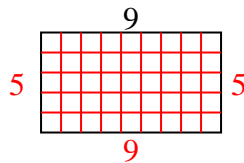
9) Area =  $42 \text{ u}^2$



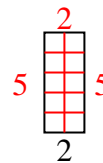
10) Area =  $15 \text{ u}^2$



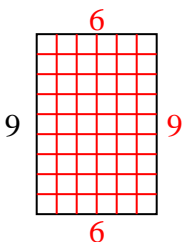
11) Area =  $45 \text{ u}^2$



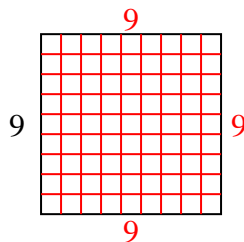
12) Area =  $10 \text{ u}^2$



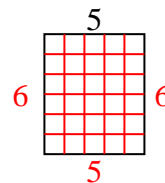
13) Area =  $54 \text{ u}^2$



14) Area =  $81 \text{ u}^2$



15) Area =  $30 \text{ u}^2$

**Risposte**1. 92. 73. 24. 85. 76. 27. 28. 59. 710. 511. 512. 513. 614. 915. 6