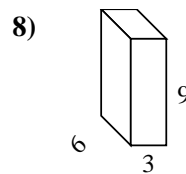
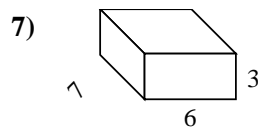
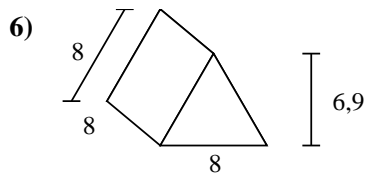
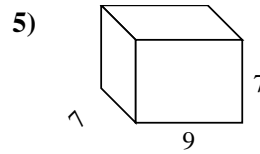
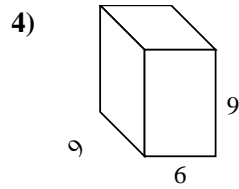
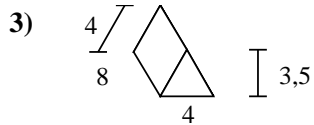
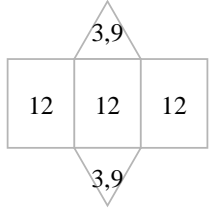
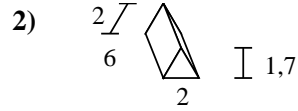
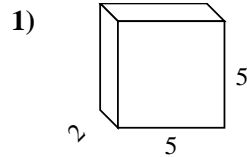
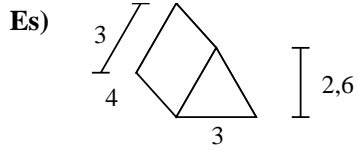




Calcola la superficie di ogni figura.



Risposte

Es. 43,8 cm²

1. _____

2. _____

3. _____

4. _____

5. _____

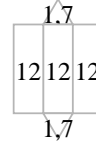
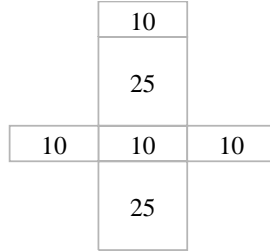
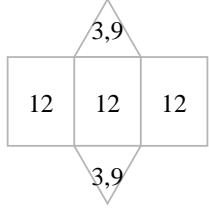
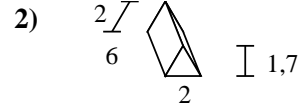
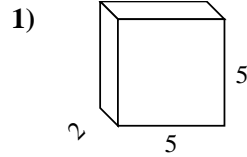
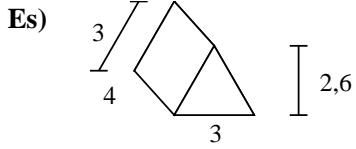
6. _____

7. _____

8. _____



Calcola la superficie di ogni figura.



Risposte

Es. 43,8 cm²

1. 90 cm²

2. 39,4 cm²

3. 110 cm²

4. 378 cm²

5. 350 cm²

6. 247,2 cm²

7. 162 cm²

8. 198 cm²

