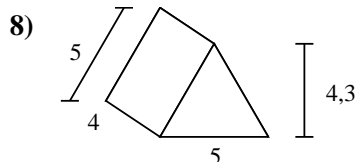
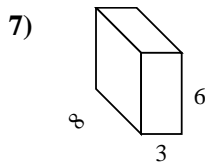
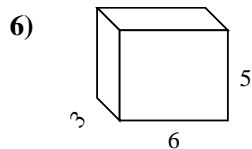
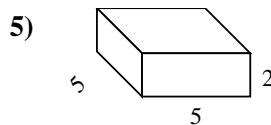
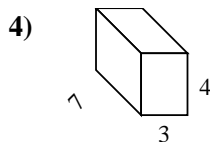
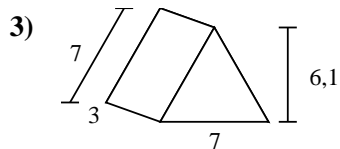
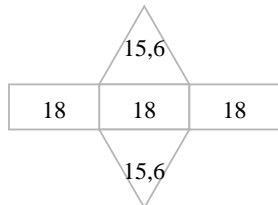
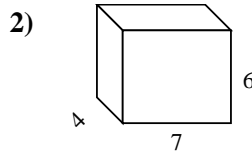
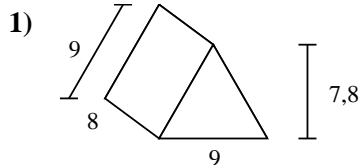
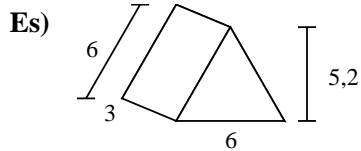




Calcola la superficie di ogni figura.



**Risposte**

Es. 85,2 cm<sup>2</sup>

1. \_\_\_\_\_

2. \_\_\_\_\_

3. \_\_\_\_\_

4. \_\_\_\_\_

5. \_\_\_\_\_

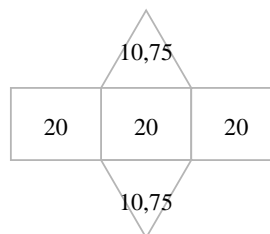
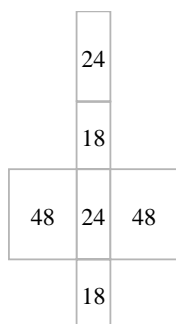
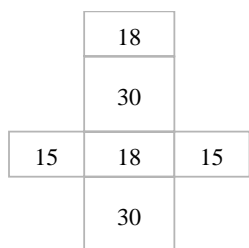
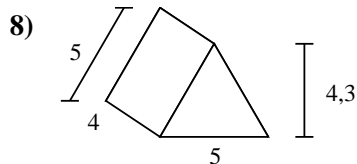
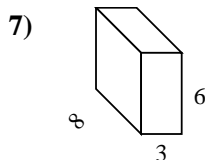
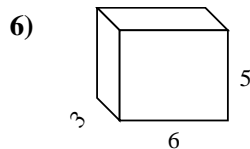
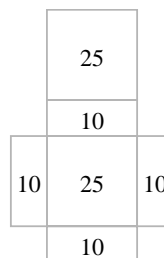
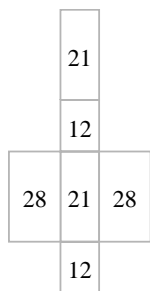
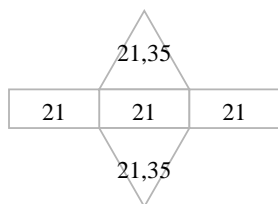
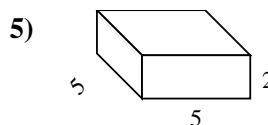
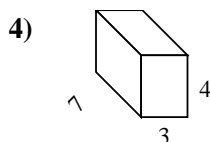
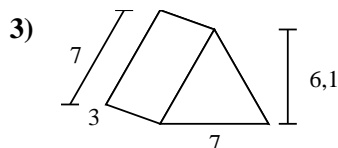
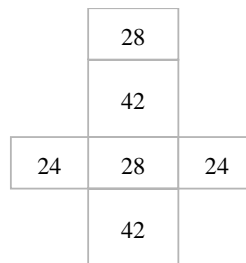
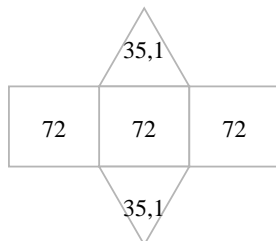
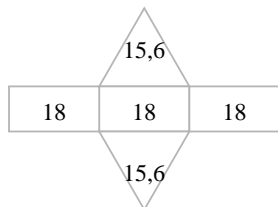
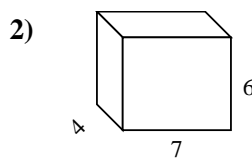
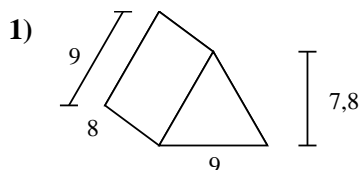
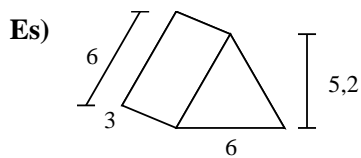
6. \_\_\_\_\_

7. \_\_\_\_\_

8. \_\_\_\_\_



Calcola la superficie di ogni figura.



**Risposte**

Es. 85,2 cm<sup>2</sup>

1. 286,2 cm<sup>2</sup>

2. 188 cm<sup>2</sup>

3. 105,7 cm<sup>2</sup>

4. 122 cm<sup>2</sup>

5. 90 cm<sup>2</sup>

6. 126 cm<sup>2</sup>

7. 180 cm<sup>2</sup>

8. 81,5 cm<sup>2</sup>