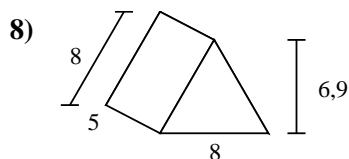
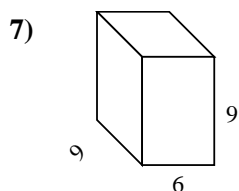
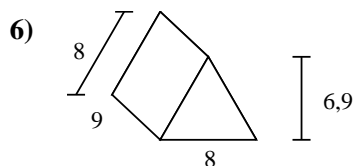
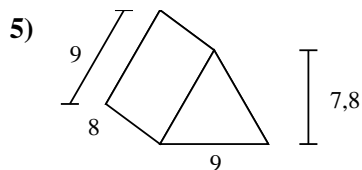
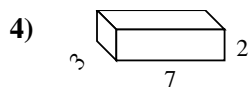
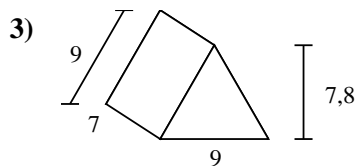
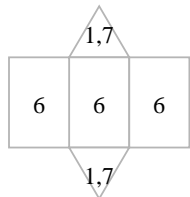
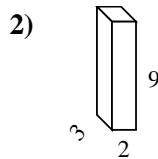
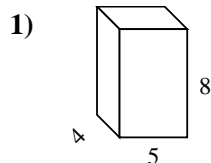
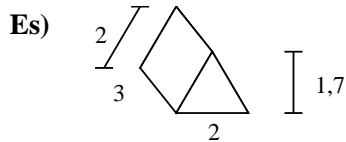




Calcola la superficie di ogni figura.



Risposte

Es. 21,4 cm²

1. _____

2. _____

3. _____

4. _____

5. _____

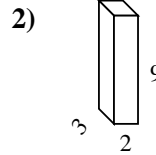
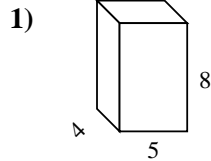
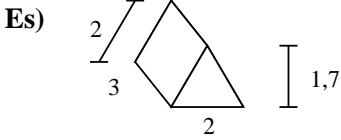
6. _____

7. _____

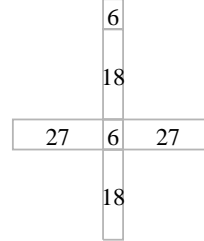
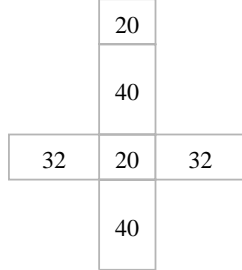
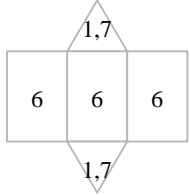
8. _____



Calcola la superficie di ogni figura.



Risposte
Es. 21,4 cm²

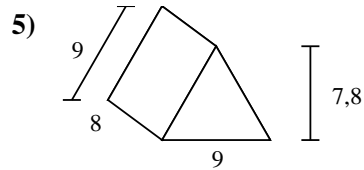
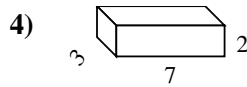
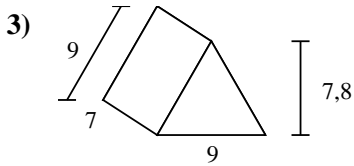


1. 184 cm²

2. 102 cm²

3. 259,2 cm²

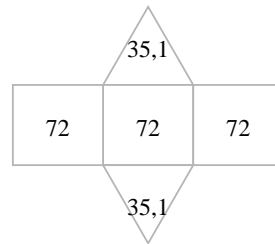
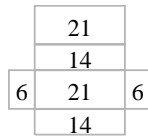
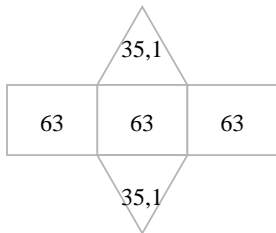
4. 82 cm²



5. 286,2 cm²

6. 271,2 cm²

7. 378 cm²



8. 175,2 cm²

