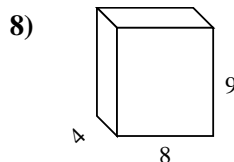
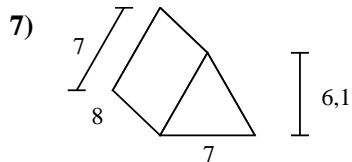
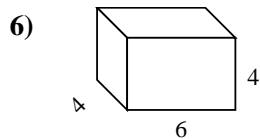
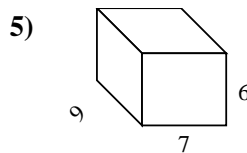
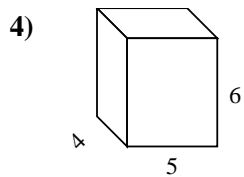
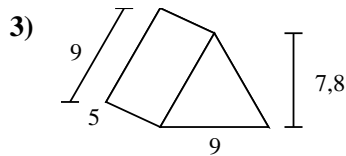
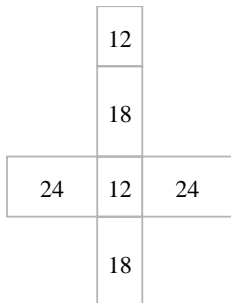
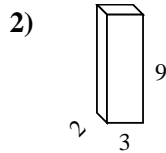
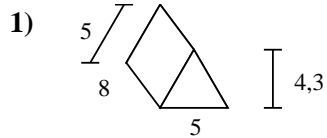
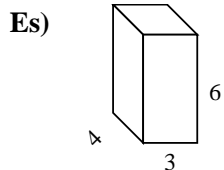




Calcola la superficie di ogni figura.



Risposte

Es. 108 cm²

1. _____

2. _____

3. _____

4. _____

5. _____

6. _____

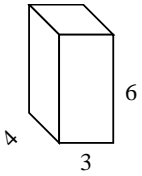
7. _____

8. _____

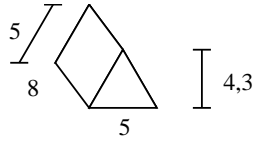


Calcola la superficie di ogni figura.

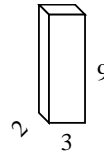
Es)



1)



2)



Risposte

Es. 108 cm²

1. 141,5 cm²

2. 102 cm²

3. 205,2 cm²

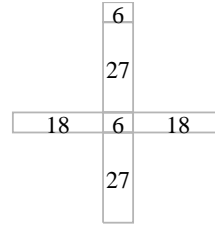
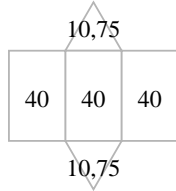
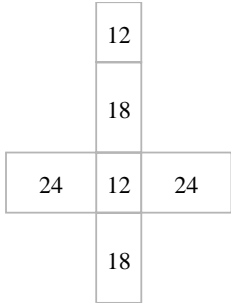
4. 148 cm²

5. 318 cm²

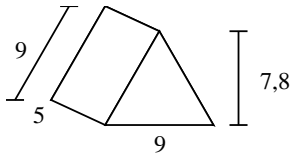
6. 128 cm²

7. 210,7 cm²

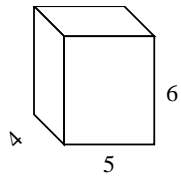
8. 280 cm²



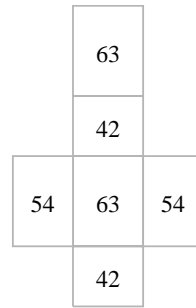
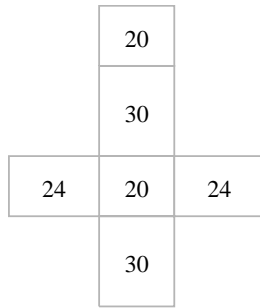
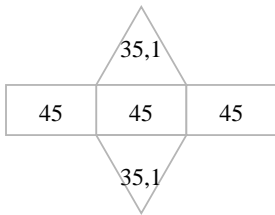
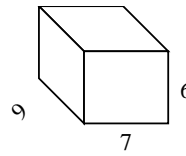
3)



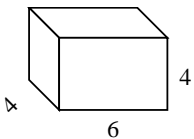
4)



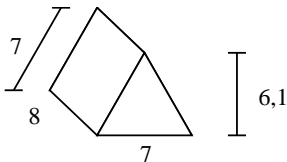
5)



6)



7)



8)

