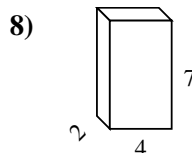
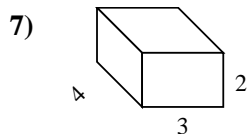
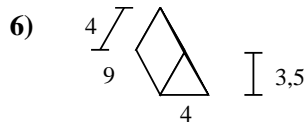
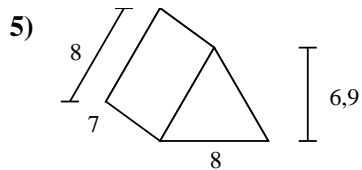
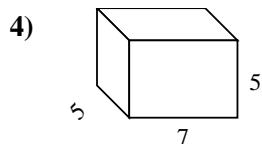
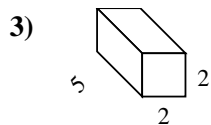
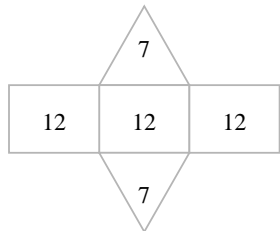
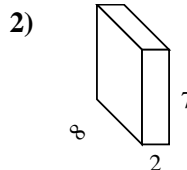
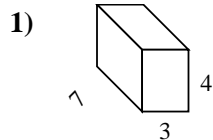
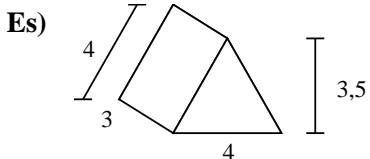




Calcola la superficie di ogni figura.



**Risposte**

Es. 50 cm<sup>2</sup>

1. \_\_\_\_\_

2. \_\_\_\_\_

3. \_\_\_\_\_

4. \_\_\_\_\_

5. \_\_\_\_\_

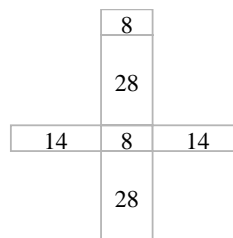
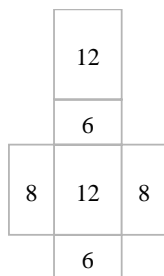
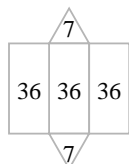
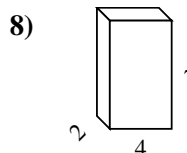
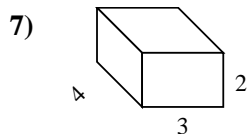
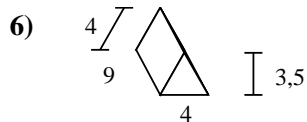
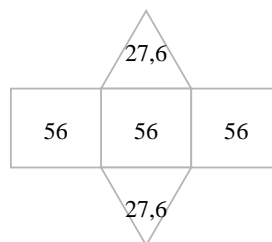
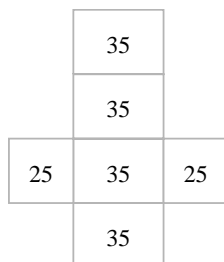
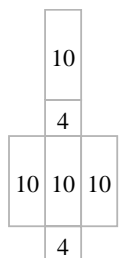
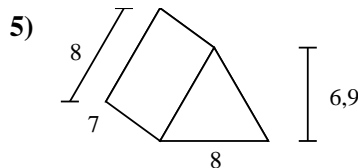
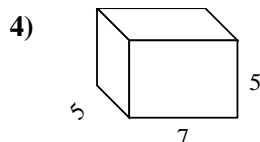
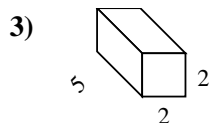
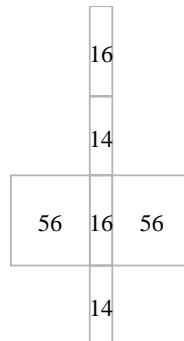
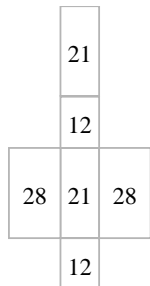
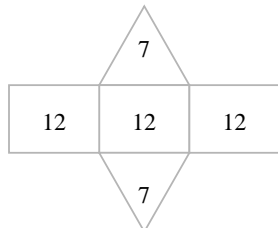
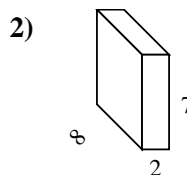
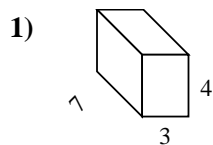
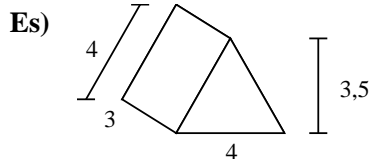
6. \_\_\_\_\_

7. \_\_\_\_\_

8. \_\_\_\_\_



Calcola la superficie di ogni figura.



**Risposte**

Es. 50 cm<sup>2</sup>

1. 122 cm<sup>2</sup>

2. 172 cm<sup>2</sup>

3. 48 cm<sup>2</sup>

4. 190 cm<sup>2</sup>

5. 223,2 cm<sup>2</sup>

6. 122 cm<sup>2</sup>

7. 52 cm<sup>2</sup>

8. 100 cm<sup>2</sup>