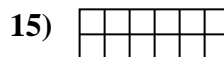
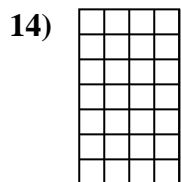
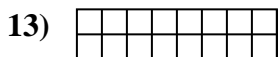
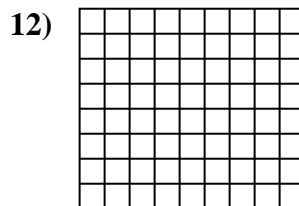
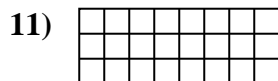
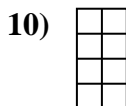
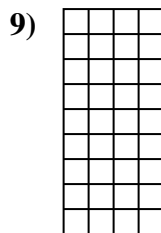
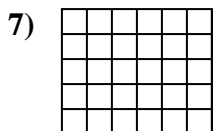
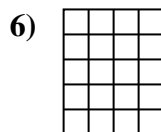
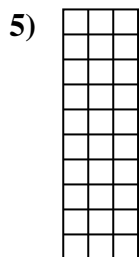
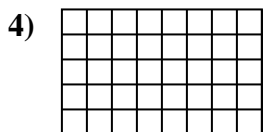

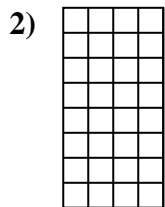
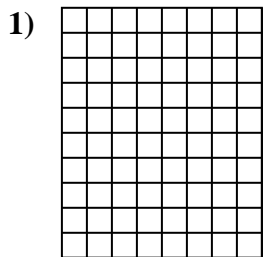




Calcola l'area. Ogni quadratino corrisponde ad 1 unità.



Risposte

1. _____

2. _____

3. _____

4. _____

5. _____

6. _____

7. _____

8. _____

9. _____

10. _____

11. _____

12. _____

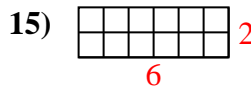
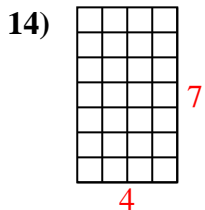
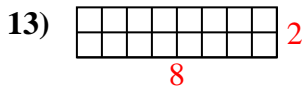
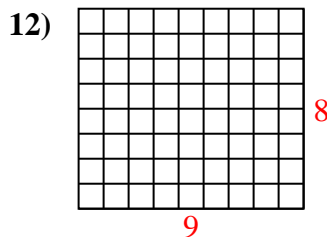
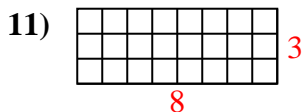
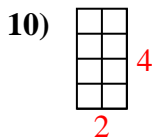
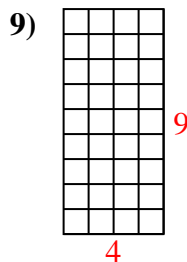
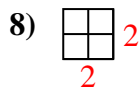
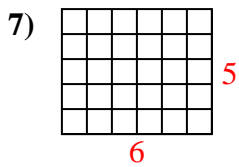
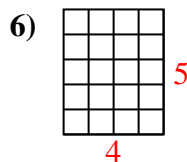
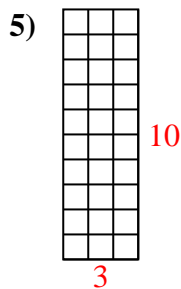
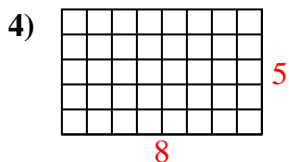
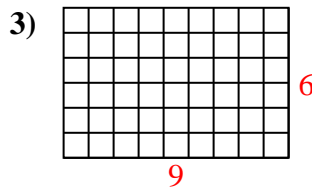
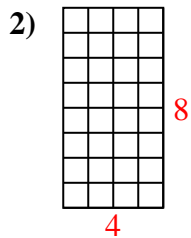
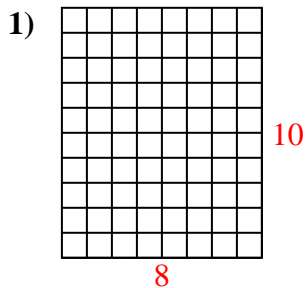
13. _____

14. _____

15. _____



Calcola l'area. Ogni quadratino corrisponde ad 1 unità.



Risposte

1. 80 u²

2. 32 u²

3. 54 u²

4. 40 u²

5. 30 u²

6. 20 u²

7. 30 u²

8. 4 u²

9. 36 u²

10. 8 u²

11. 24 u²

12. 72 u²

13. 16 u²

14. 28 u²

15. 12 u²