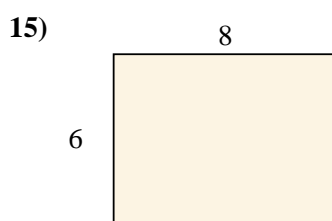
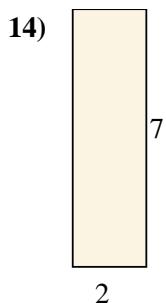
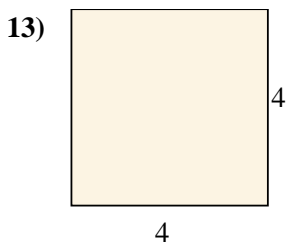
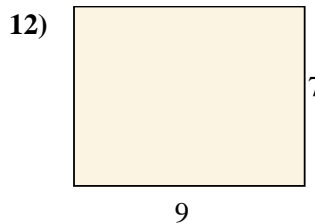
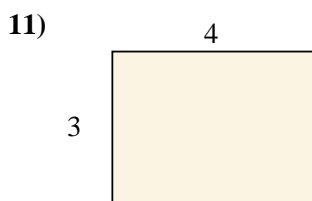
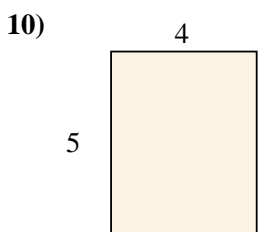
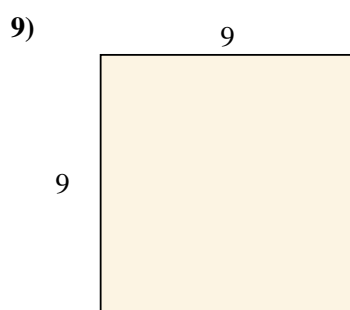
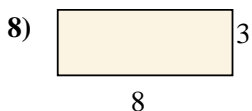
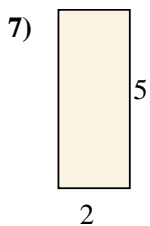
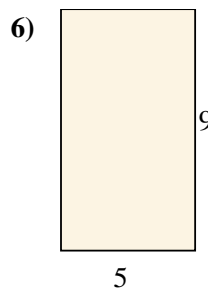
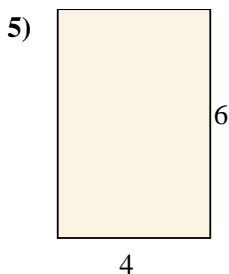
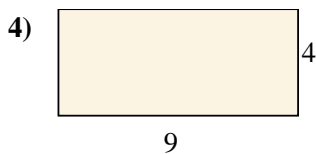

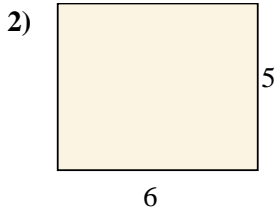
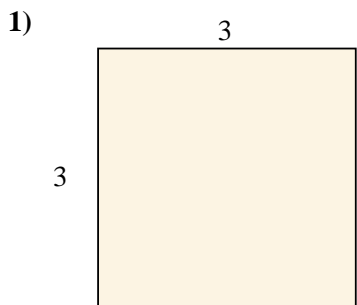




Trova l'area dei seguenti rettangoli.



**Risposte**

1. \_\_\_\_\_

2. \_\_\_\_\_

3. \_\_\_\_\_

4. \_\_\_\_\_

5. \_\_\_\_\_

6. \_\_\_\_\_

7. \_\_\_\_\_

8. \_\_\_\_\_

9. \_\_\_\_\_

10. \_\_\_\_\_

11. \_\_\_\_\_

12. \_\_\_\_\_

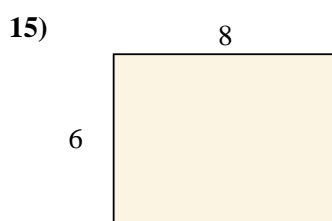
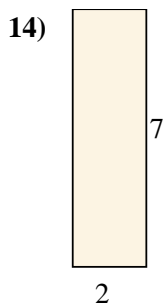
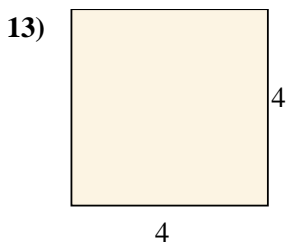
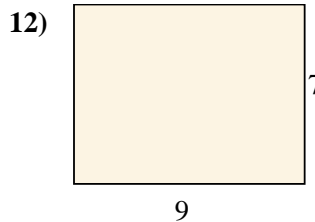
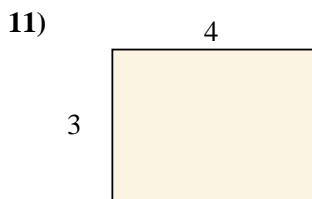
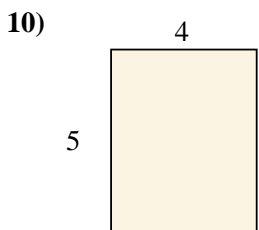
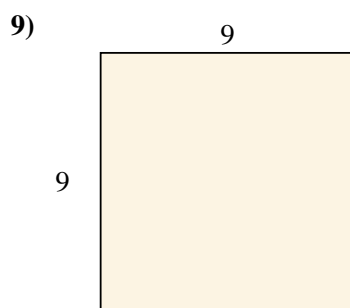
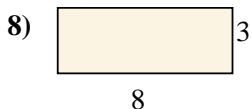
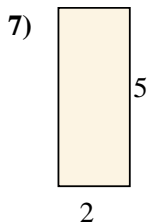
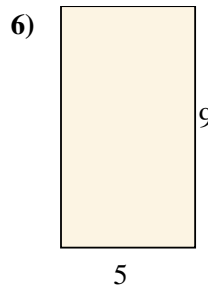
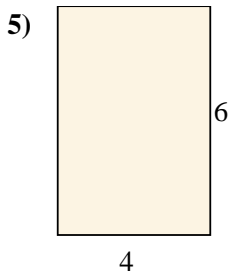
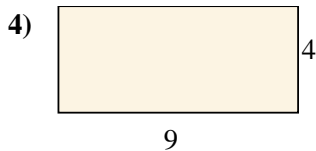

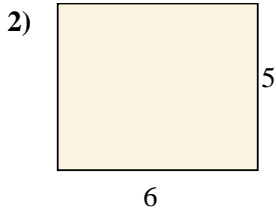
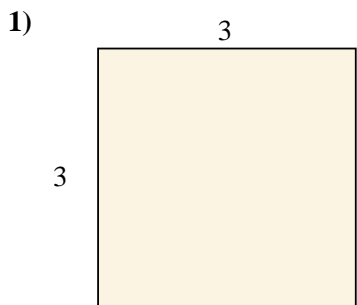
13. \_\_\_\_\_

14. \_\_\_\_\_

15. \_\_\_\_\_



Trova l'area dei seguenti rettangoli.



**Risposte**

1. 9 cm<sup>2</sup>

2. 30 cm<sup>2</sup>

3. 8 cm<sup>2</sup>

4. 36 cm<sup>2</sup>

5. 24 cm<sup>2</sup>

6. 45 cm<sup>2</sup>

7. 10 cm<sup>2</sup>

8. 24 cm<sup>2</sup>

9. 81 cm<sup>2</sup>

10. 20 cm<sup>2</sup>

11. 12 cm<sup>2</sup>

12. 63 cm<sup>2</sup>

13. 16 cm<sup>2</sup>

14. 14 cm<sup>2</sup>

15. 48 cm<sup>2</sup>