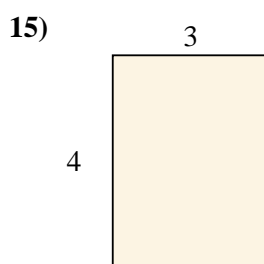
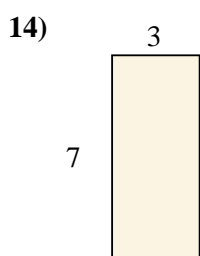
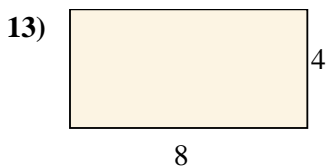
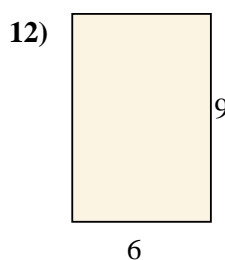
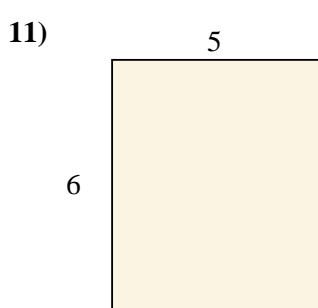
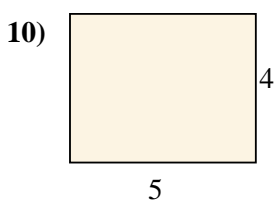
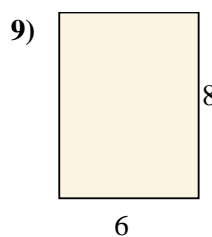
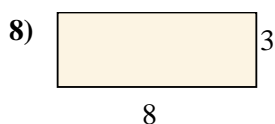
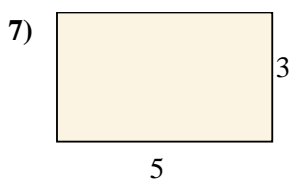
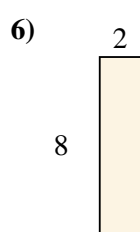
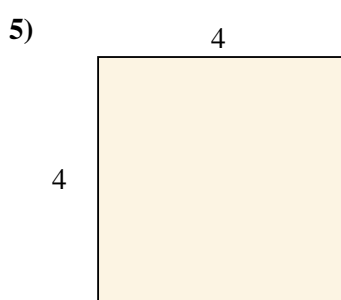
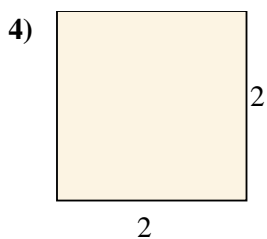
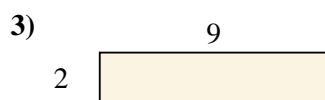
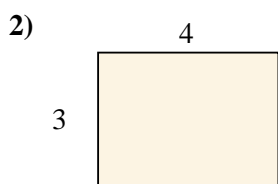





Trova l'area dei seguenti rettangoli.

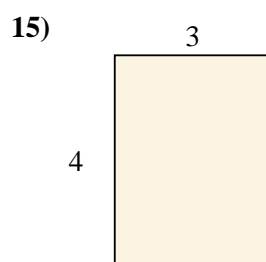
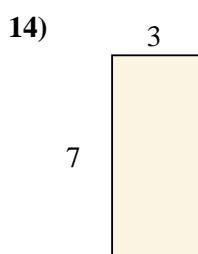
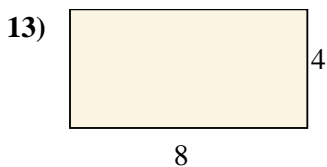
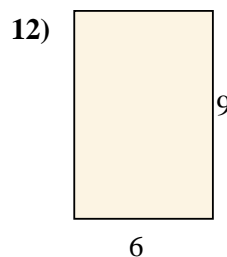
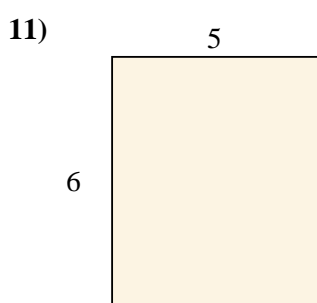
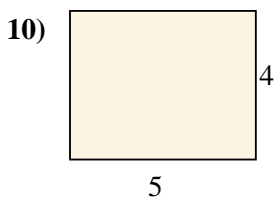
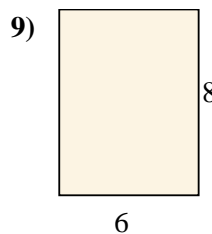
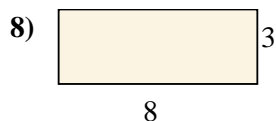
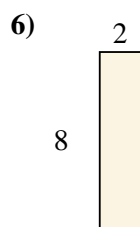
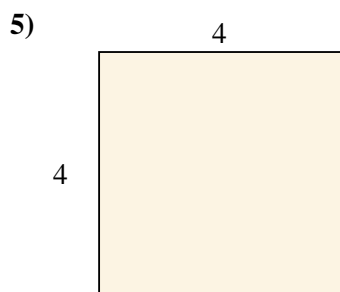
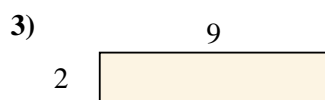
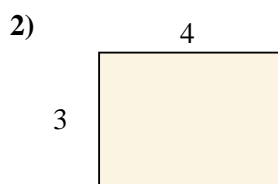



**Risposte**

- 1. \_\_\_\_\_
- 2. \_\_\_\_\_
- 3. \_\_\_\_\_
- 4. \_\_\_\_\_
- 5. \_\_\_\_\_
- 6. \_\_\_\_\_
- 7. \_\_\_\_\_
- 8. \_\_\_\_\_
- 9. \_\_\_\_\_
- 10. \_\_\_\_\_
- 11. \_\_\_\_\_
- 12. \_\_\_\_\_
- 13. \_\_\_\_\_
- 14. \_\_\_\_\_
- 15. \_\_\_\_\_



Trova l'area dei seguenti rettangoli.

**Risposte**1. 8 cm<sup>2</sup>2. 12 cm<sup>2</sup>3. 18 cm<sup>2</sup>4. 4 cm<sup>2</sup>5. 16 cm<sup>2</sup>6. 16 cm<sup>2</sup>7. 15 cm<sup>2</sup>8. 24 cm<sup>2</sup>9. 48 cm<sup>2</sup>10. 20 cm<sup>2</sup>11. 30 cm<sup>2</sup>12. 54 cm<sup>2</sup>13. 32 cm<sup>2</sup>14. 21 cm<sup>2</sup>15. 12 cm<sup>2</sup>