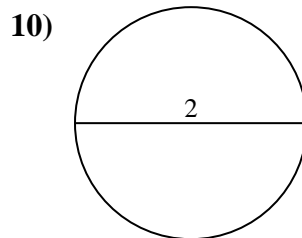
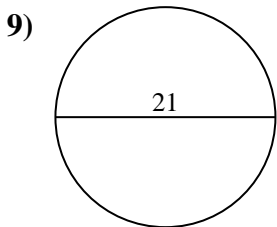
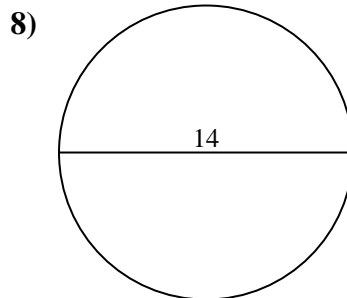
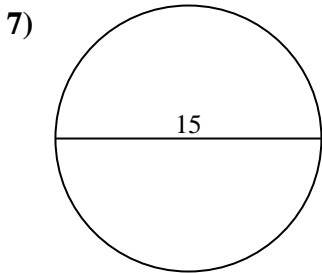
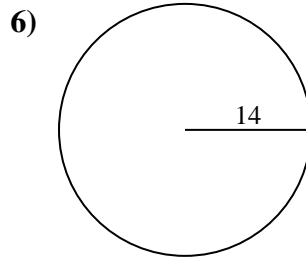
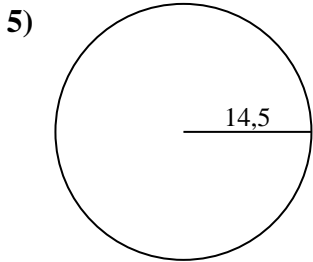
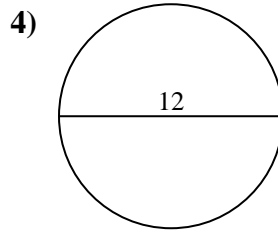
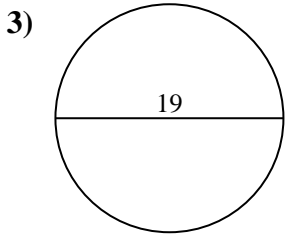
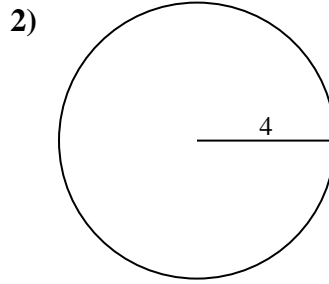
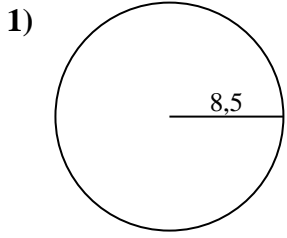




Calcola la circonferenza di ogni cerchio. I cerchi non sono da scalare.

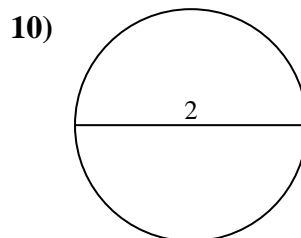
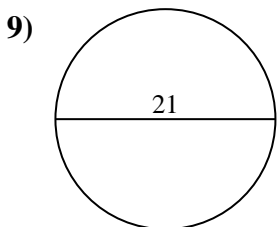
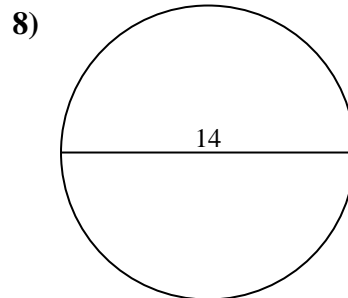
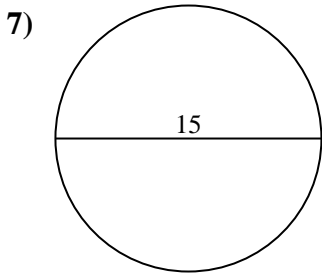
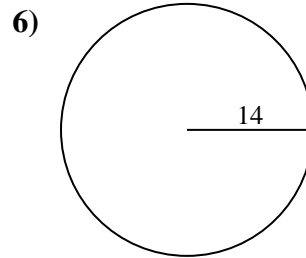
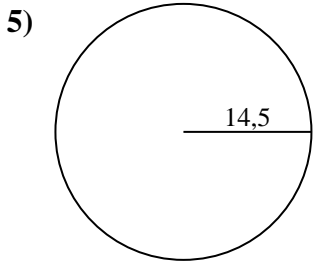
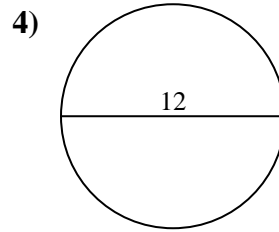
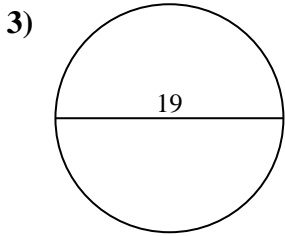
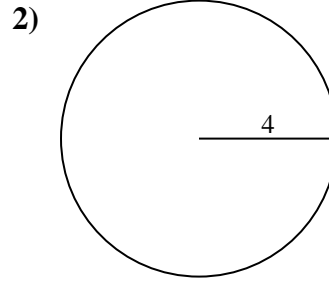
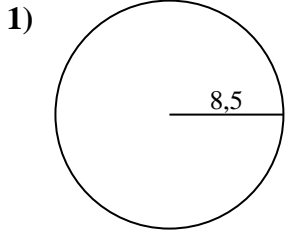


**Risposte**

- 1. \_\_\_\_\_
- 2. \_\_\_\_\_
- 3. \_\_\_\_\_
- 4. \_\_\_\_\_
- 5. \_\_\_\_\_
- 6. \_\_\_\_\_
- 7. \_\_\_\_\_
- 8. \_\_\_\_\_
- 9. \_\_\_\_\_
- 10. \_\_\_\_\_



Calcola la circonferenza di ogni cerchio. I cerchi non sono da scalare.

**Risposte**1. 53,41 cm2. 25,13 cm3. 59,69 cm4. 37,7 cm5. 91,11 cm6. 87,96 cm7. 47,12 cm8. 43,98 cm9. 65,97 cm10. 6,28 cm



Calcola la circonferenza di ogni cerchio. I cerchi non sono da scalare.

**Risposte**

6,28 cm

43,98 cm

87,96 cm

37,7 cm

53,41 cm

47,12 cm

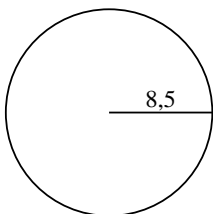
59,69 cm

25,13 cm

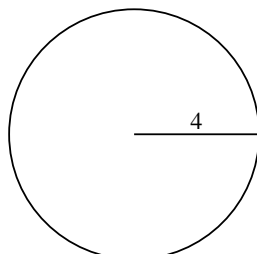
65,97 cm

91,11 cm

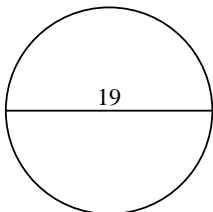
1)



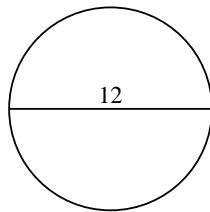
2)



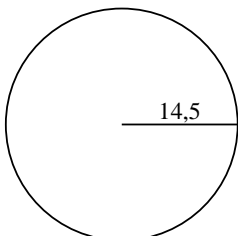
3)



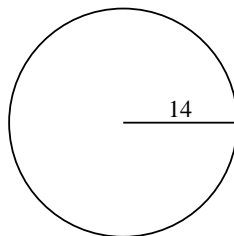
4)



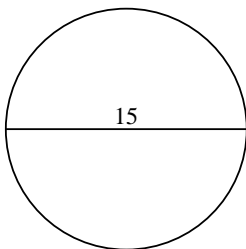
5)



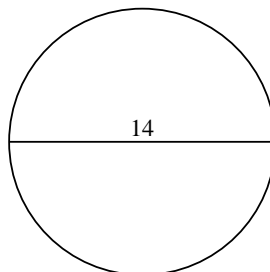
6)



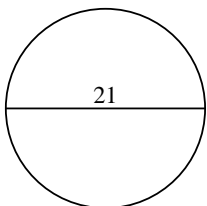
7)



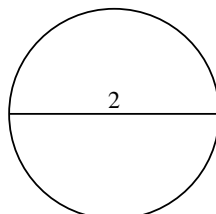
8)



9)



10)



1. \_\_\_\_\_

2. \_\_\_\_\_

3. \_\_\_\_\_

4. \_\_\_\_\_

5. \_\_\_\_\_

6. \_\_\_\_\_

7. \_\_\_\_\_

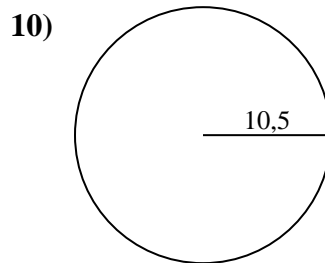
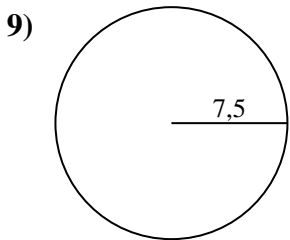
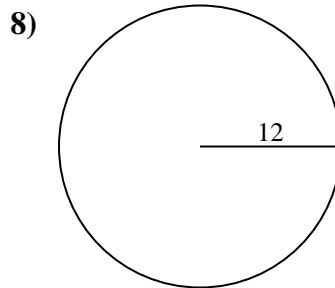
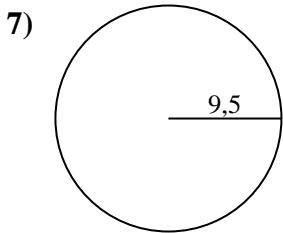
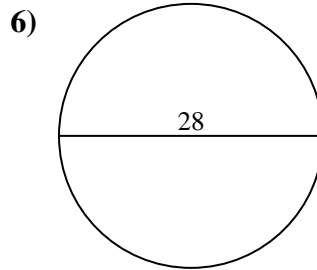
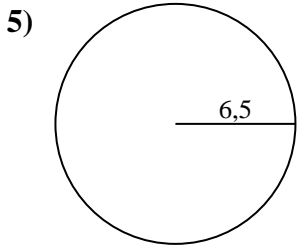
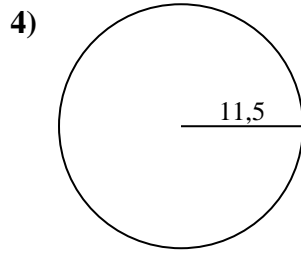
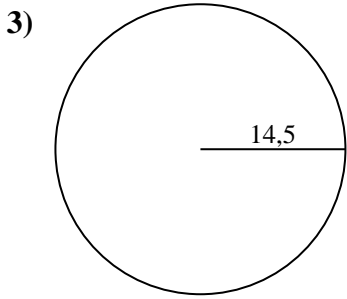
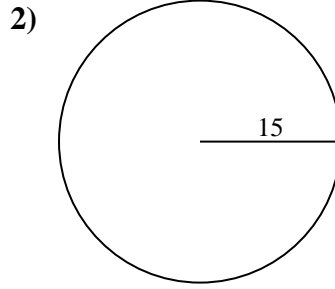
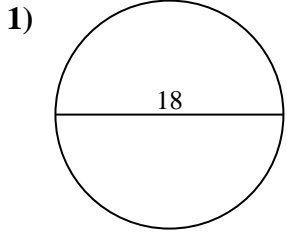
8. \_\_\_\_\_

9. \_\_\_\_\_

10. \_\_\_\_\_



Calcola la circonferenza di ogni cerchio. I cerchi non sono da scalare.

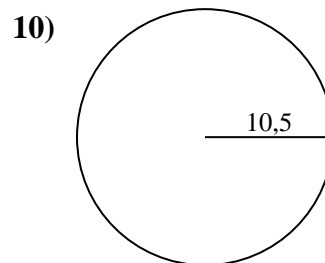
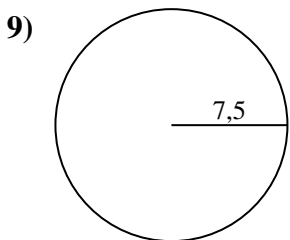
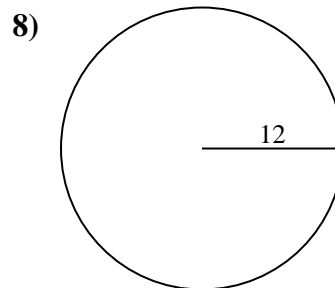
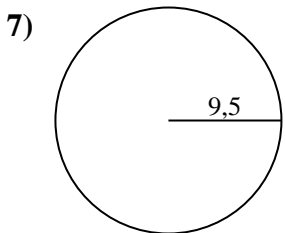
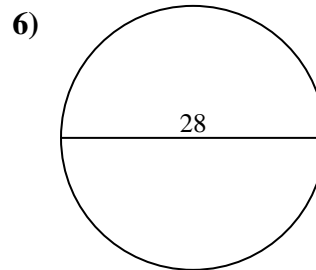
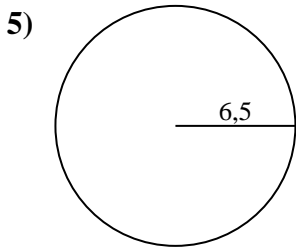
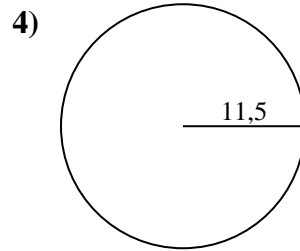
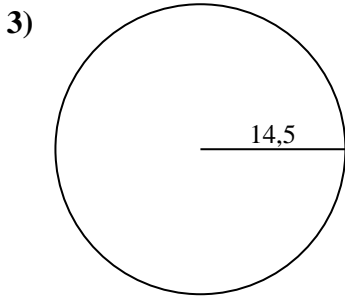
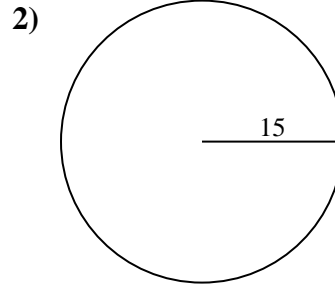
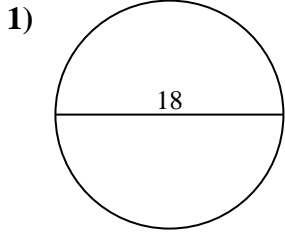


**Risposte**

- 1. \_\_\_\_\_
- 2. \_\_\_\_\_
- 3. \_\_\_\_\_
- 4. \_\_\_\_\_
- 5. \_\_\_\_\_
- 6. \_\_\_\_\_
- 7. \_\_\_\_\_
- 8. \_\_\_\_\_
- 9. \_\_\_\_\_
- 10. \_\_\_\_\_



Calcola la circonferenza di ogni cerchio. I cerchi non sono da scalare.

**Risposte**1. 56,55 cm2. 94,25 cm3. 91,11 cm4. 72,26 cm5. 40,84 cm6. 87,96 cm7. 59,69 cm8. 75,4 cm9. 47,12 cm10. 65,97 cm



Calcola la circonferenza di ogni cerchio. I cerchi non sono da scalare.

91,11 cm

56,55 cm

47,12 cm

72,26 cm

59,69 cm

40,84 cm

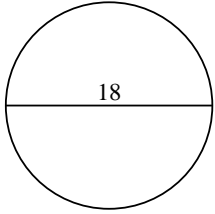
87,96 cm

94,25 cm

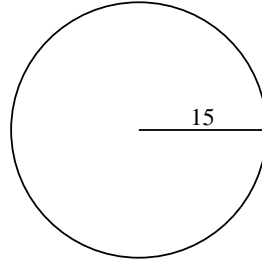
75,4 cm

65,97 cm

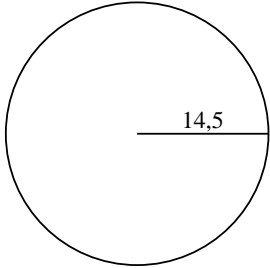
1)



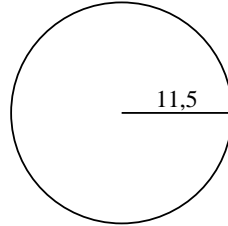
2)



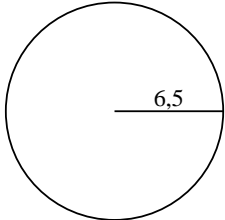
3)



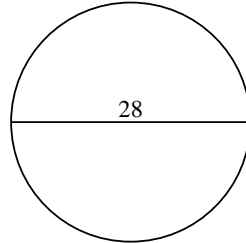
4)



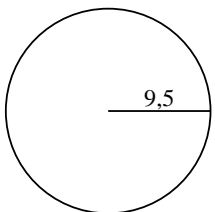
5)



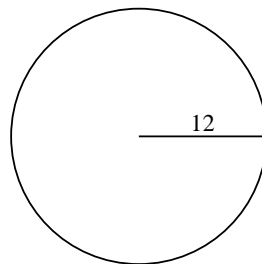
6)



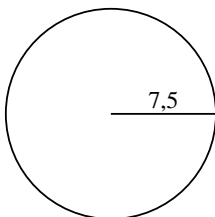
7)



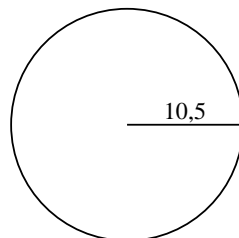
8)



9)



10)



**Risposte**

1. \_\_\_\_\_

2. \_\_\_\_\_

3. \_\_\_\_\_

4. \_\_\_\_\_

5. \_\_\_\_\_

6. \_\_\_\_\_

7. \_\_\_\_\_

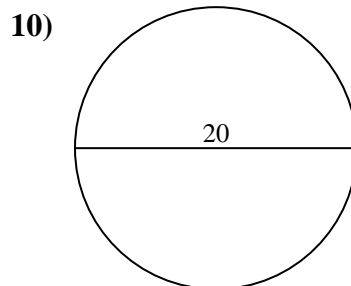
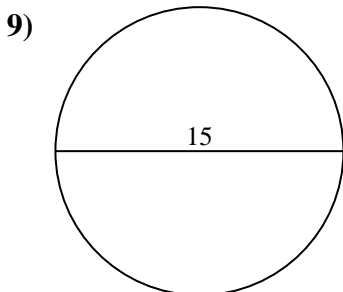
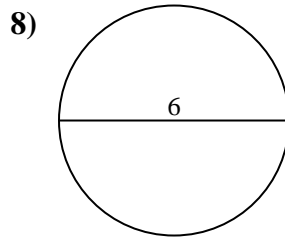
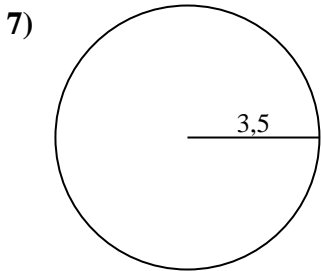
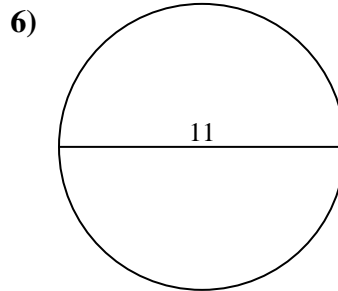
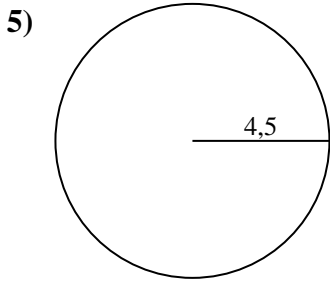
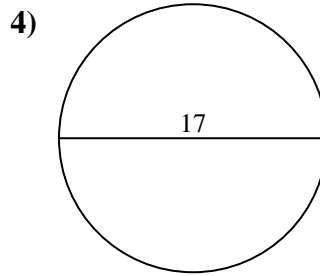
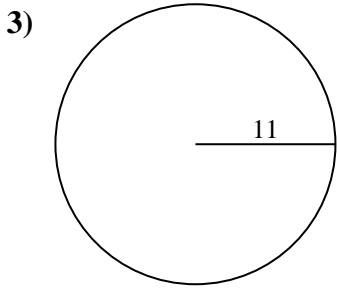
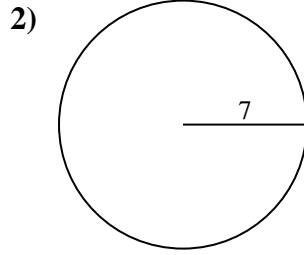
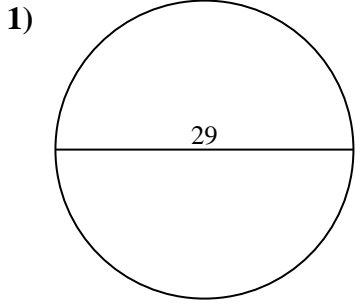
8. \_\_\_\_\_

9. \_\_\_\_\_

10. \_\_\_\_\_



Calcola la circonferenza di ogni cerchio. I cerchi non sono da scalare.

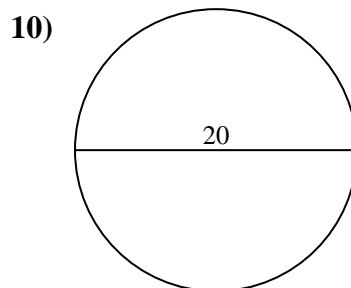
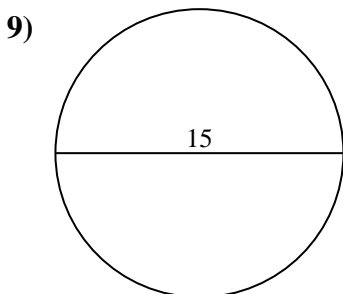
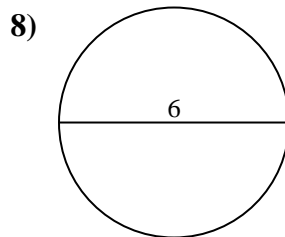
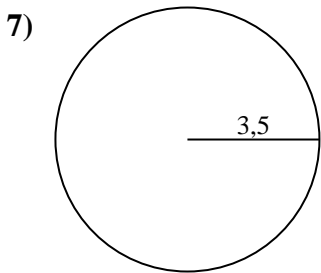
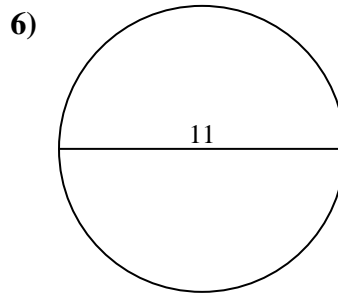
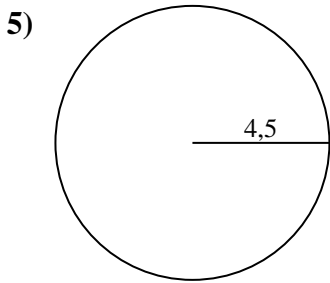
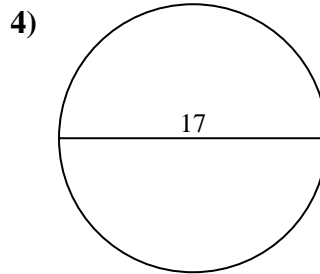
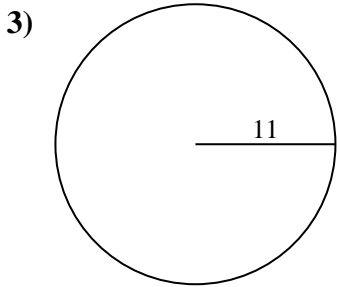
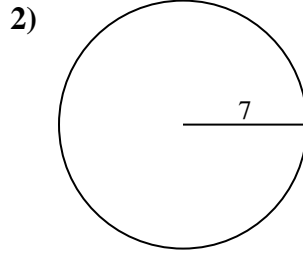
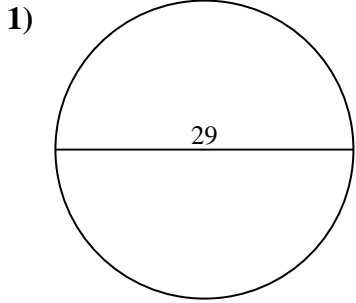


**Risposte**

- 1. \_\_\_\_\_
- 2. \_\_\_\_\_
- 3. \_\_\_\_\_
- 4. \_\_\_\_\_
- 5. \_\_\_\_\_
- 6. \_\_\_\_\_
- 7. \_\_\_\_\_
- 8. \_\_\_\_\_
- 9. \_\_\_\_\_
- 10. \_\_\_\_\_



Calcola la circonferenza di ogni cerchio. I cerchi non sono da scalare.

**Risposte**1. 91,11 cm2. 43,98 cm3. 69,12 cm4. 53,41 cm5. 28,27 cm6. 34,56 cm7. 21,99 cm8. 18,85 cm9. 47,12 cm10. 62,83 cm





Calcola la circonferenza di ogni cerchio. I cerchi non sono da scalare.

21,99 cm

62,83 cm

69,12 cm

47,12 cm

53,41 cm

28,27 cm

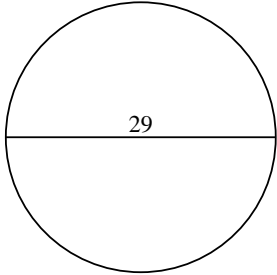
43,98 cm

18,85 cm

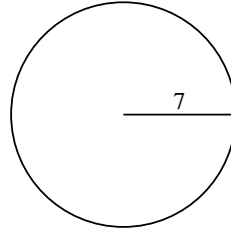
34,56 cm

91,11 cm

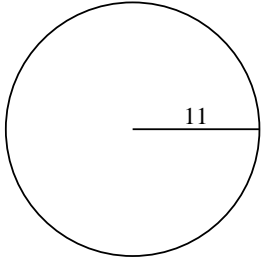
1)



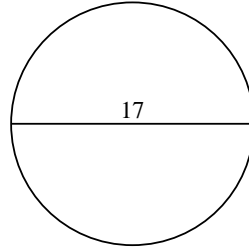
2)



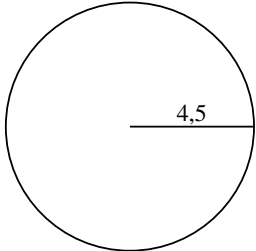
3)



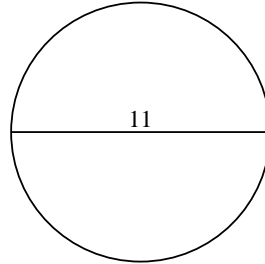
4)



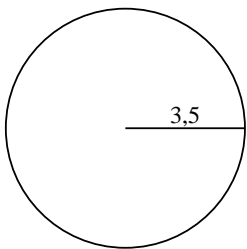
5)



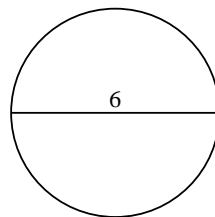
6)



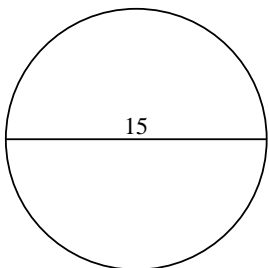
7)



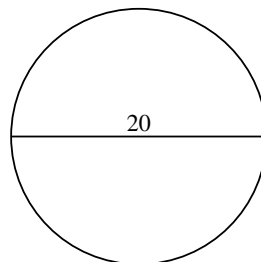
8)



9)



10)



**Risposte**

1. \_\_\_\_\_

2. \_\_\_\_\_

3. \_\_\_\_\_

4. \_\_\_\_\_

5. \_\_\_\_\_

6. \_\_\_\_\_

7. \_\_\_\_\_

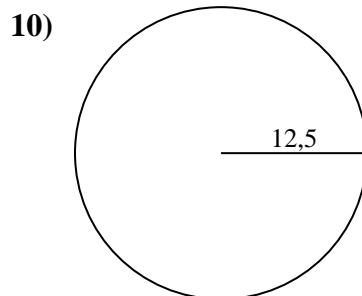
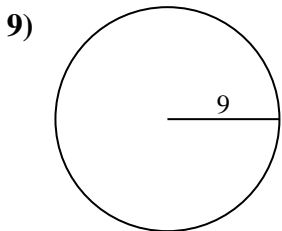
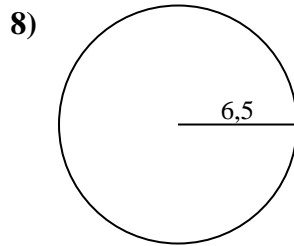
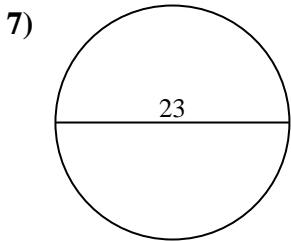
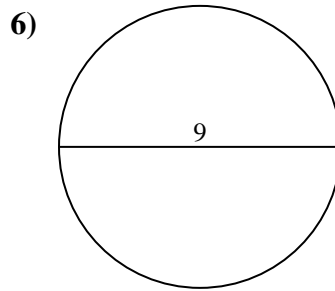
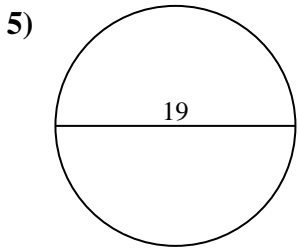
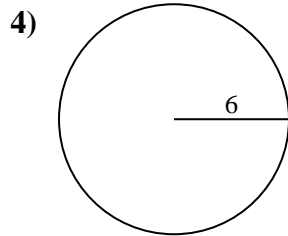
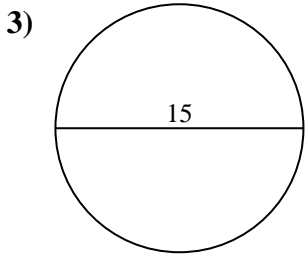
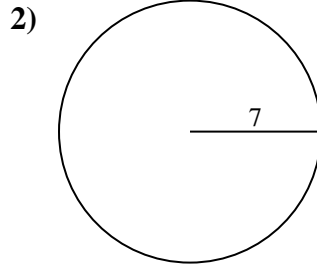
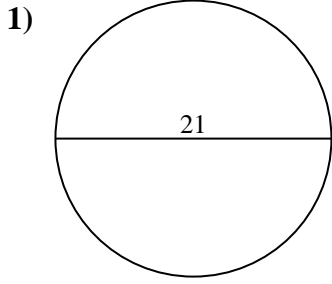
8. \_\_\_\_\_

9. \_\_\_\_\_

10. \_\_\_\_\_



Calcola la circonferenza di ogni cerchio. I cerchi non sono da scalare.

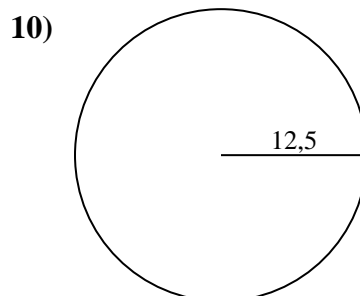
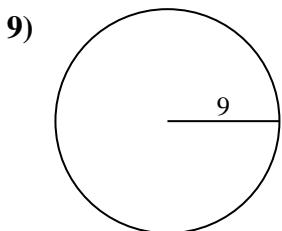
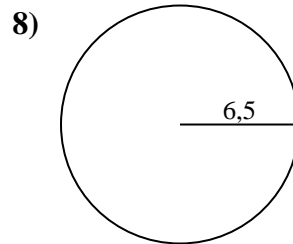
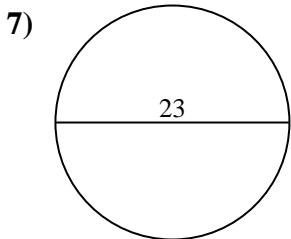
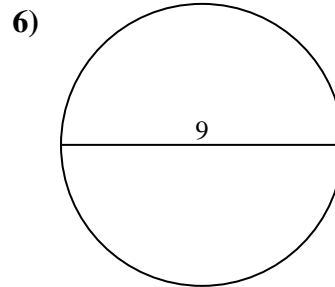
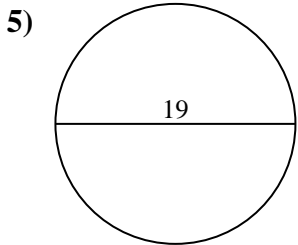
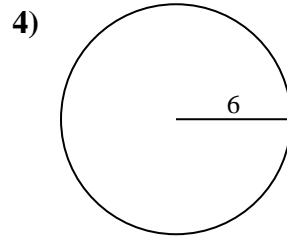
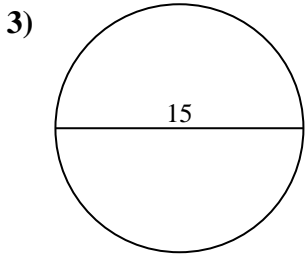
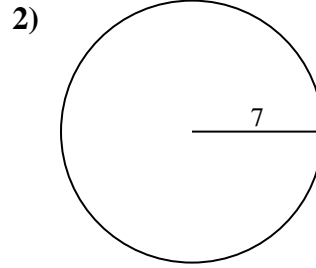
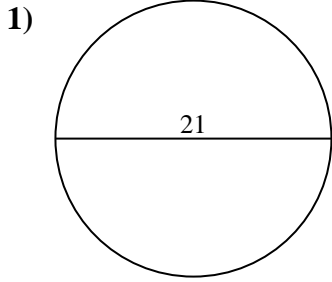


**Risposte**

- 1. \_\_\_\_\_
- 2. \_\_\_\_\_
- 3. \_\_\_\_\_
- 4. \_\_\_\_\_
- 5. \_\_\_\_\_
- 6. \_\_\_\_\_
- 7. \_\_\_\_\_
- 8. \_\_\_\_\_
- 9. \_\_\_\_\_
- 10. \_\_\_\_\_



Calcola la circonferenza di ogni cerchio. I cerchi non sono da scalare.

**Risposte**1. **65,97 cm**2. **43,98 cm**3. **47,12 cm**4. **37,7 cm**5. **59,69 cm**6. **28,27 cm**7. **72,26 cm**8. **40,84 cm**9. **56,55 cm**10. **78,54 cm**



Calcola la circonferenza di ogni cerchio. I cerchi non sono da scalare.

28,27 cm

78,54 cm

43,98 cm

40,84 cm

56,55 cm

47,12 cm

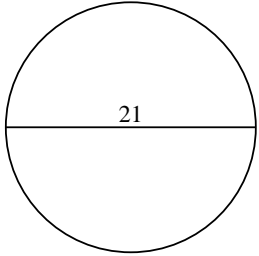
65,97 cm

59,69 cm

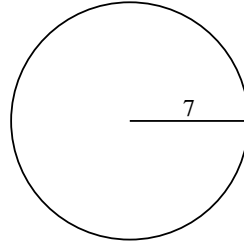
72,26 cm

37,7 cm

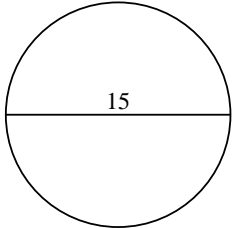
1)



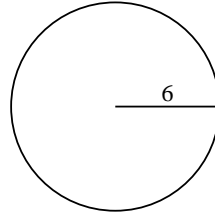
2)



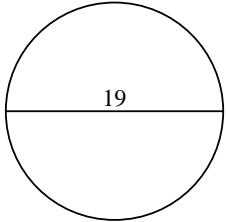
3)



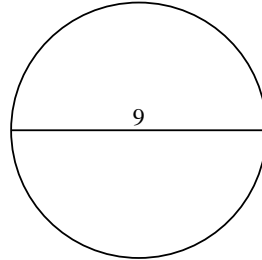
4)



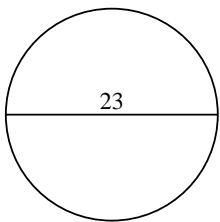
5)



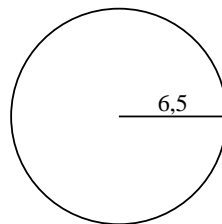
6)



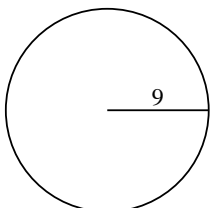
7)



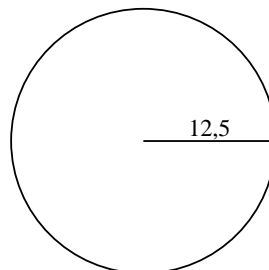
8)



9)



10)



**Risposte**

1. \_\_\_\_\_

2. \_\_\_\_\_

3. \_\_\_\_\_

4. \_\_\_\_\_

5. \_\_\_\_\_

6. \_\_\_\_\_

7. \_\_\_\_\_

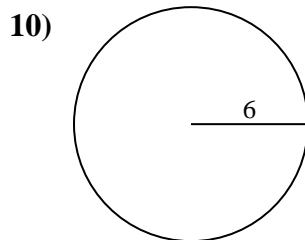
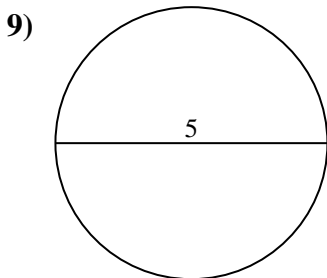
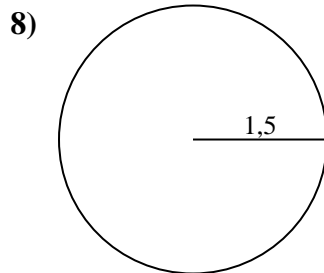
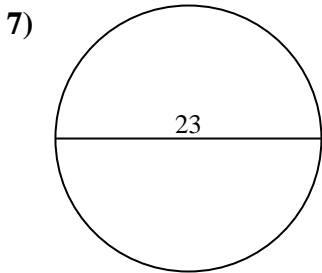
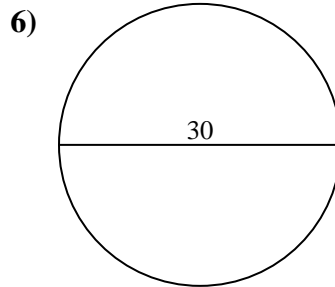
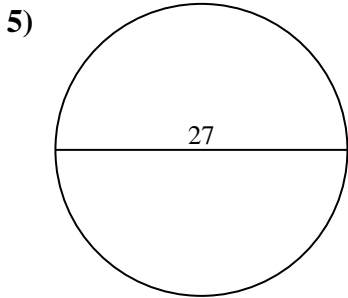
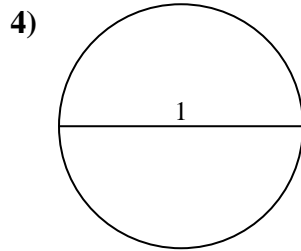
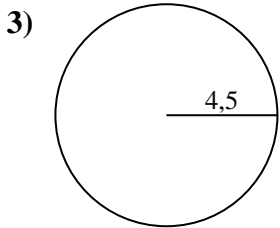
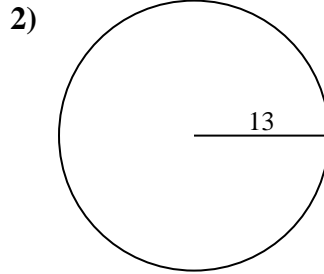
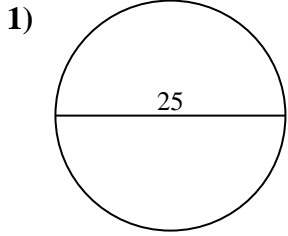
8. \_\_\_\_\_

9. \_\_\_\_\_

10. \_\_\_\_\_



Calcola la circonferenza di ogni cerchio. I cerchi non sono da scalare.

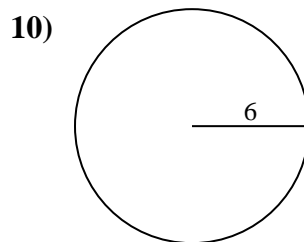
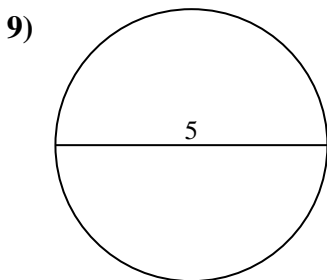
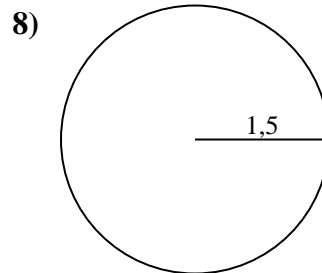
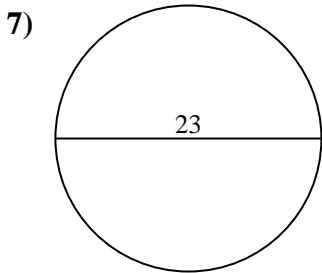
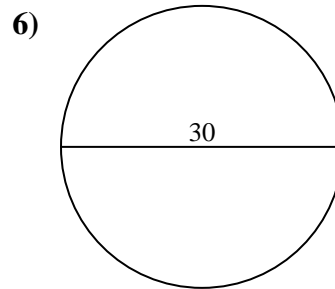
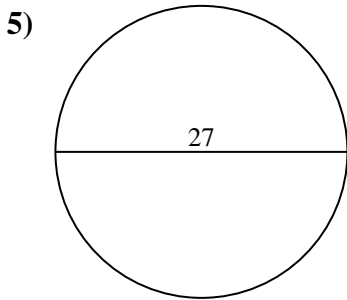
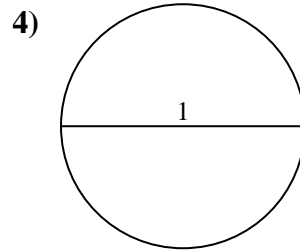
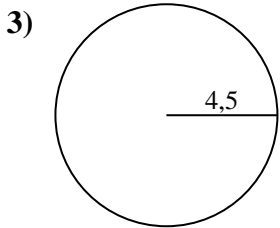
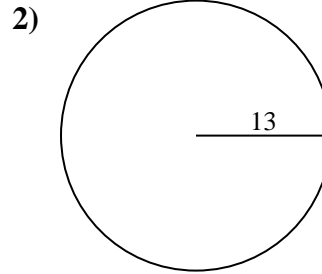
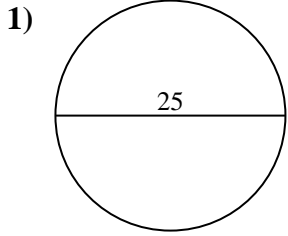


**Risposte**

- 1. \_\_\_\_\_
- 2. \_\_\_\_\_
- 3. \_\_\_\_\_
- 4. \_\_\_\_\_
- 5. \_\_\_\_\_
- 6. \_\_\_\_\_
- 7. \_\_\_\_\_
- 8. \_\_\_\_\_
- 9. \_\_\_\_\_
- 10. \_\_\_\_\_



Calcola la circonferenza di ogni cerchio. I cerchi non sono da scalare.

**Risposte**1. **78,54 cm**2. **81,68 cm**3. **28,27 cm**4. **3,14 cm**5. **84,82 cm**6. **94,25 cm**7. **72,26 cm**8. **9,42 cm**9. **15,71 cm**10. **37,7 cm**



Calcola la circonferenza di ogni cerchio. I cerchi non sono da scalare.

15,71 cm

28,27 cm

72,26 cm

84,82 cm

81,68 cm

9,42 cm

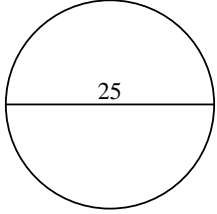
3,14 cm

78,54 cm

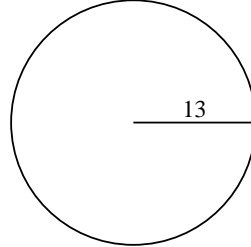
94,25 cm

37,7 cm

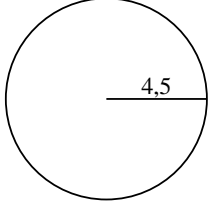
1)



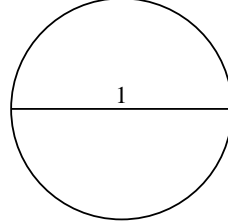
2)



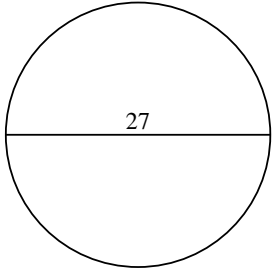
3)



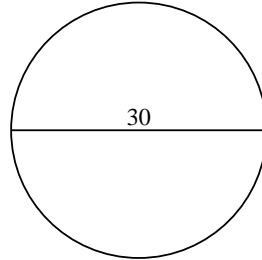
4)



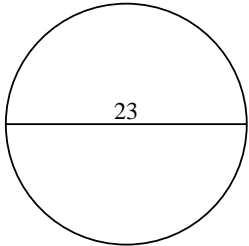
5)



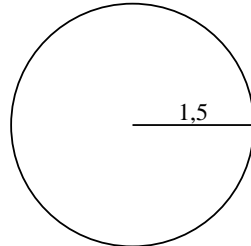
6)



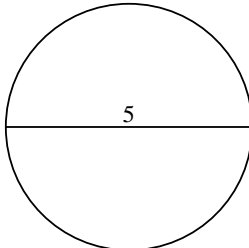
7)



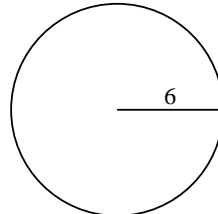
8)



9)



10)



**Risposte**

1. \_\_\_\_\_

2. \_\_\_\_\_

3. \_\_\_\_\_

4. \_\_\_\_\_

5. \_\_\_\_\_

6. \_\_\_\_\_

7. \_\_\_\_\_

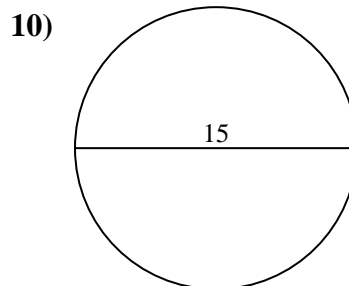
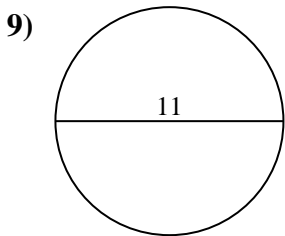
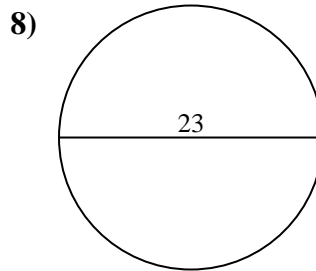
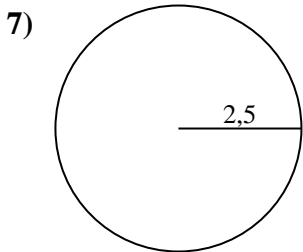
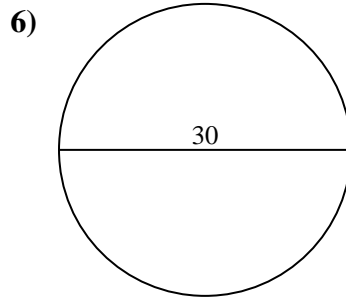
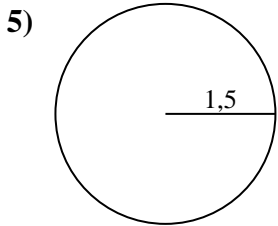
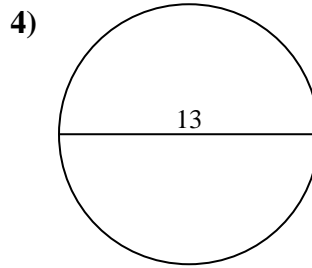
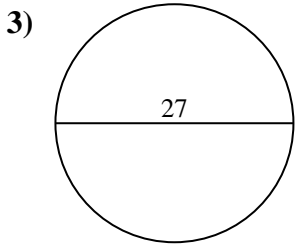
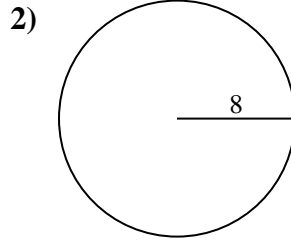
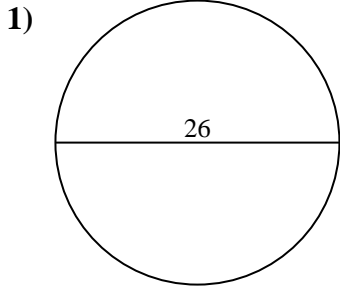
8. \_\_\_\_\_

9. \_\_\_\_\_

10. \_\_\_\_\_



Calcola la circonferenza di ogni cerchio. I cerchi non sono da scalare.



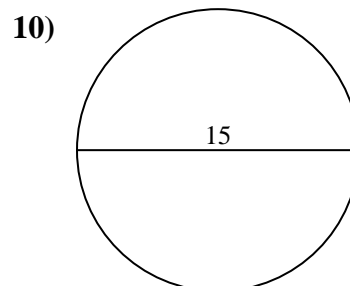
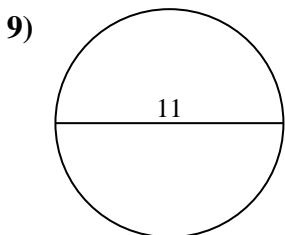
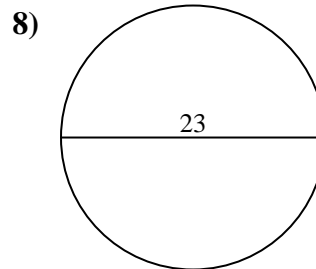
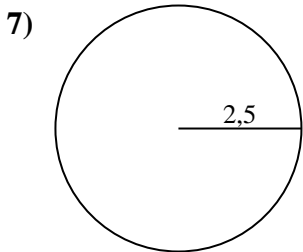
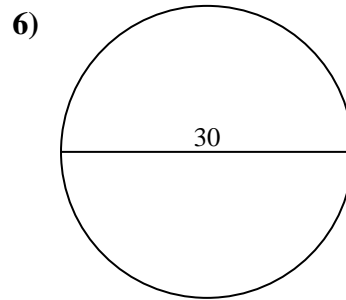
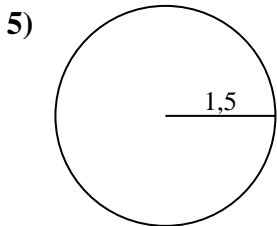
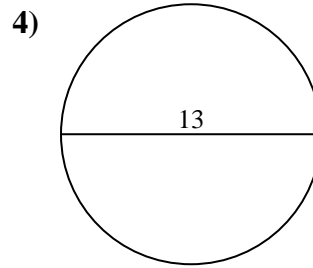
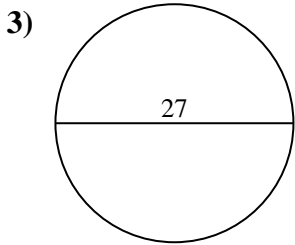
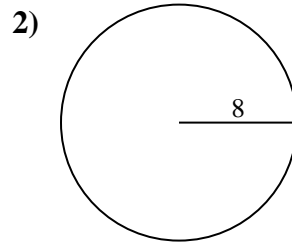
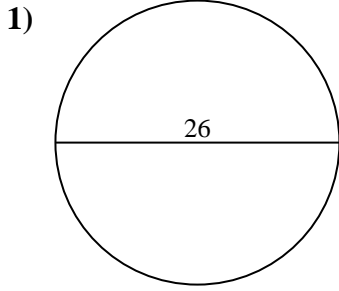
**Risposte**

- 1. \_\_\_\_\_
- 2. \_\_\_\_\_
- 3. \_\_\_\_\_
- 4. \_\_\_\_\_
- 5. \_\_\_\_\_
- 6. \_\_\_\_\_
- 7. \_\_\_\_\_
- 8. \_\_\_\_\_
- 9. \_\_\_\_\_
- 10. \_\_\_\_\_





Calcola la circonferenza di ogni cerchio. I cerchi non sono da scalare.

**Risposte**1. 81,68 cm2. 50,27 cm3. 84,82 cm4. 40,84 cm5. 9,42 cm6. 94,25 cm7. 15,71 cm8. 72,26 cm9. 34,56 cm10. 47,12 cm



Calcola la circonferenza di ogni cerchio. I cerchi non sono da scalare.

34,56 cm

81,68 cm

47,12 cm

72,26 cm

15,71 cm

9,42 cm

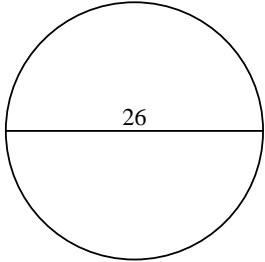
84,82 cm

40,84 cm

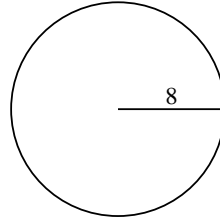
50,27 cm

94,25 cm

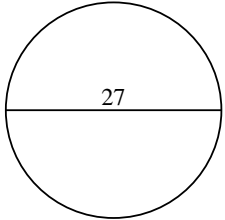
1)



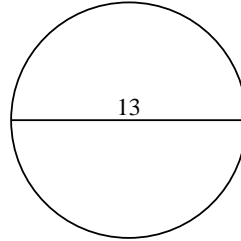
2)



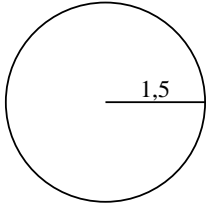
3)



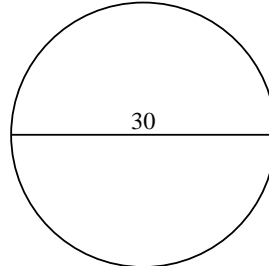
4)



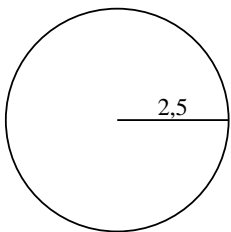
5)



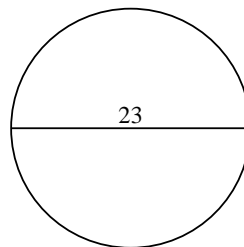
6)



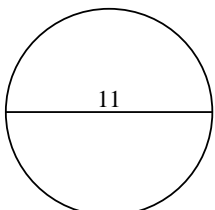
7)



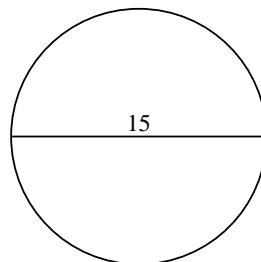
8)



9)



10)



**Risposte**

1. \_\_\_\_\_

2. \_\_\_\_\_

3. \_\_\_\_\_

4. \_\_\_\_\_

5. \_\_\_\_\_

6. \_\_\_\_\_

7. \_\_\_\_\_

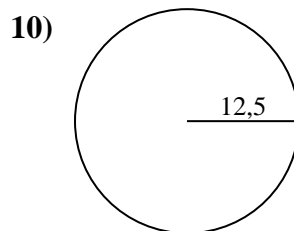
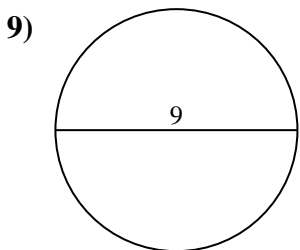
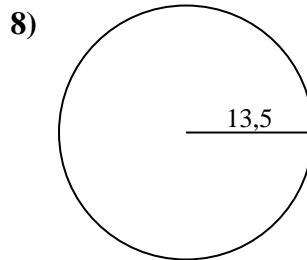
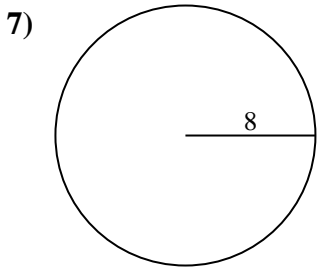
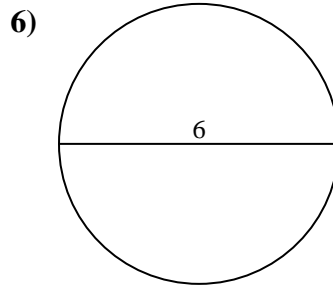
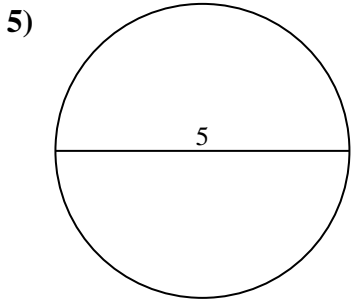
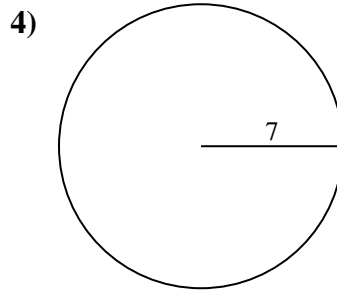
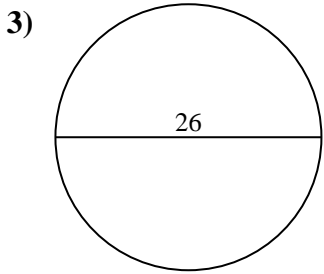
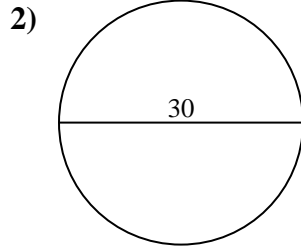
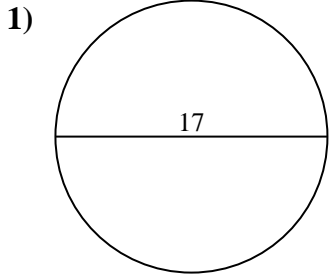
8. \_\_\_\_\_

9. \_\_\_\_\_

10. \_\_\_\_\_



Calcola la circonferenza di ogni cerchio. I cerchi non sono da scalare.

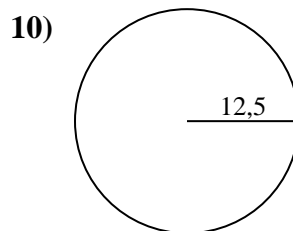
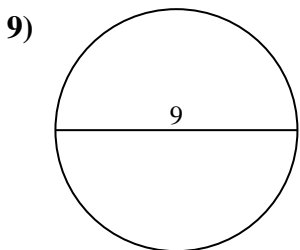
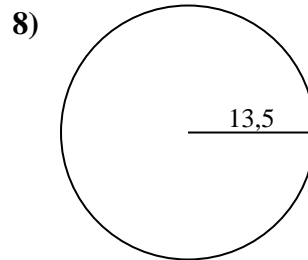
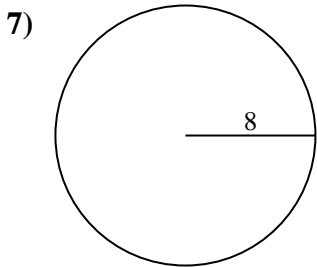
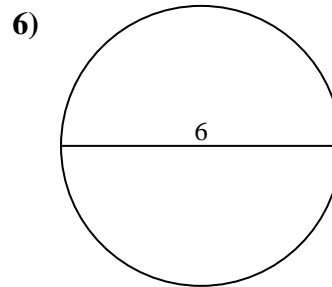
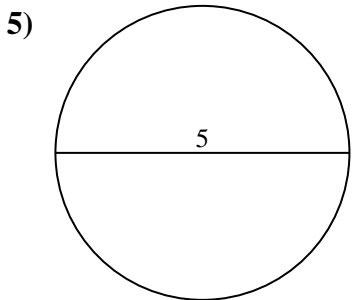
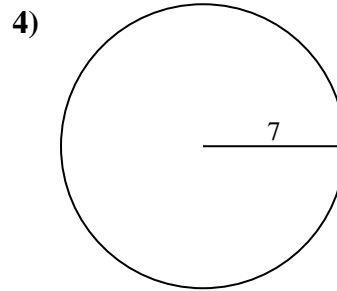
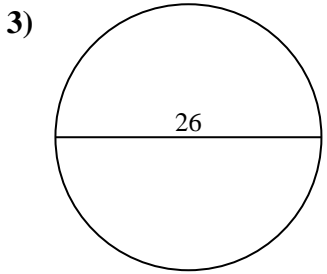
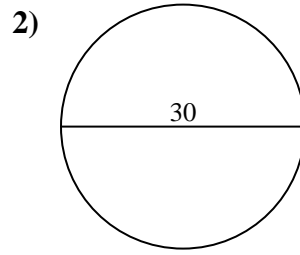
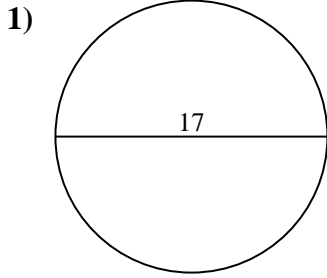


**Risposte**

- 1. \_\_\_\_\_
- 2. \_\_\_\_\_
- 3. \_\_\_\_\_
- 4. \_\_\_\_\_
- 5. \_\_\_\_\_
- 6. \_\_\_\_\_
- 7. \_\_\_\_\_
- 8. \_\_\_\_\_
- 9. \_\_\_\_\_
- 10. \_\_\_\_\_



Calcola la circonferenza di ogni cerchio. I cerchi non sono da scalare.

**Risposte**1. 53,41 cm2. 94,25 cm3. 81,68 cm4. 43,98 cm5. 15,71 cm6. 18,85 cm7. 50,27 cm8. 84,82 cm9. 28,27 cm10. 78,54 cm



Calcola la circonferenza di ogni cerchio. I cerchi non sono da scalare.

43,98 cm

78,54 cm

84,82 cm

15,71 cm

94,25 cm

50,27 cm

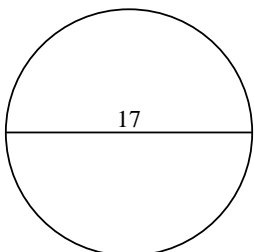
53,41 cm

28,27 cm

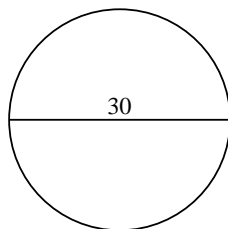
81,68 cm

18,85 cm

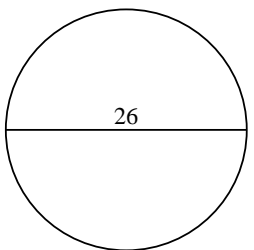
1)



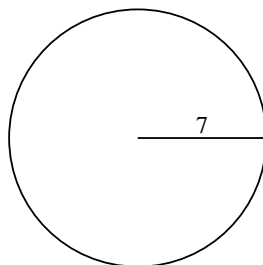
2)



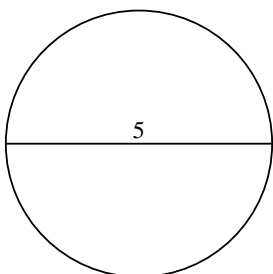
3)



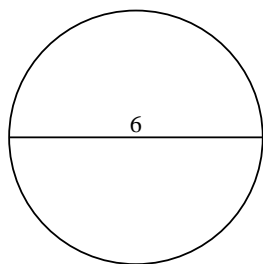
4)



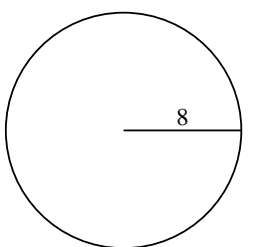
5)



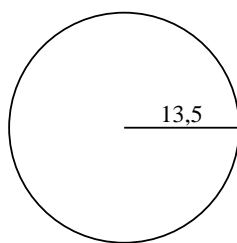
6)



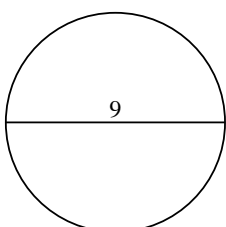
7)



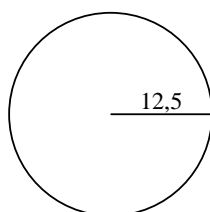
8)



9)



10)



**Risposte**

1. \_\_\_\_\_

2. \_\_\_\_\_

3. \_\_\_\_\_

4. \_\_\_\_\_

5. \_\_\_\_\_

6. \_\_\_\_\_

7. \_\_\_\_\_

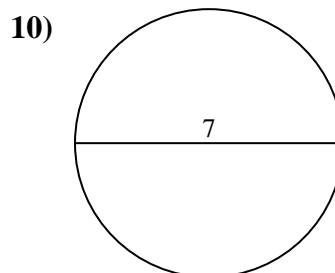
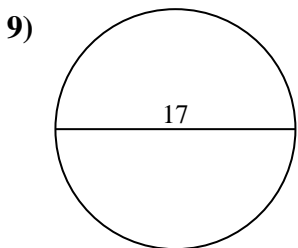
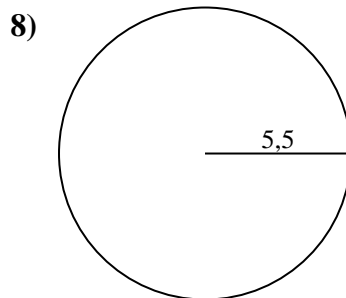
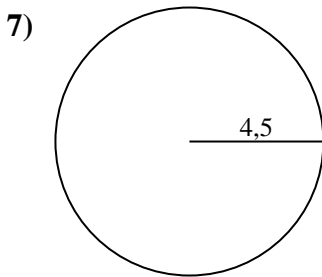
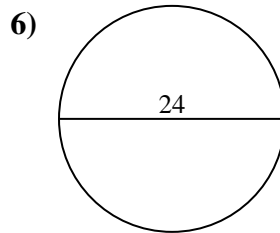
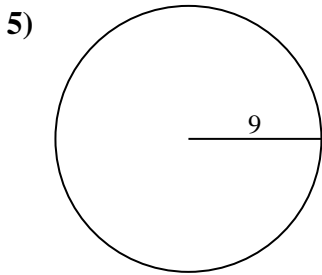
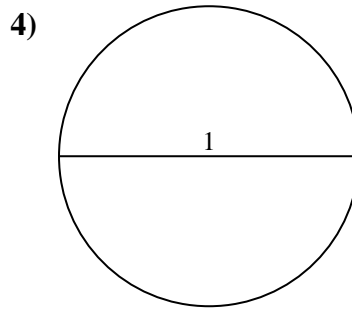
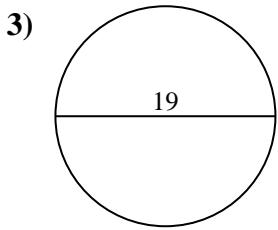
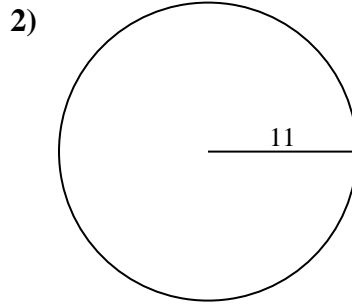
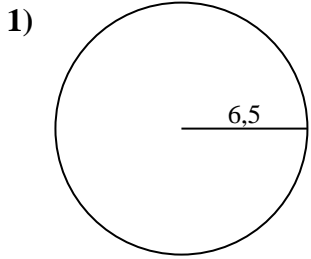
8. \_\_\_\_\_

9. \_\_\_\_\_

10. \_\_\_\_\_



Calcola la circonferenza di ogni cerchio. I cerchi non sono da scalare.

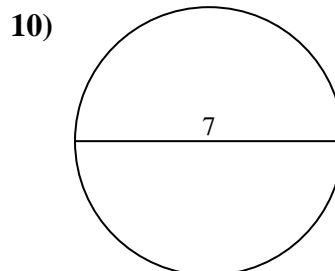
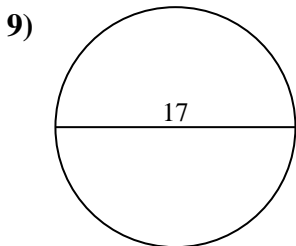
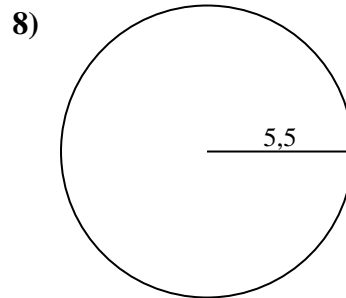
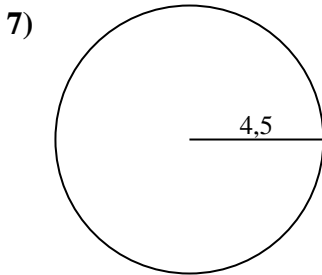
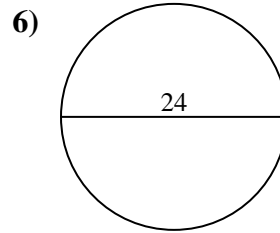
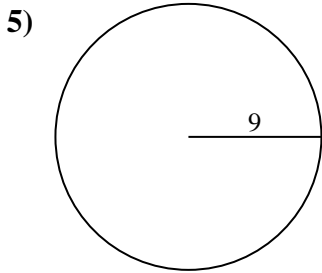
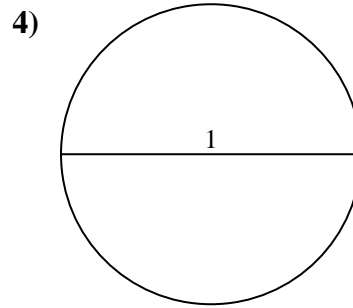
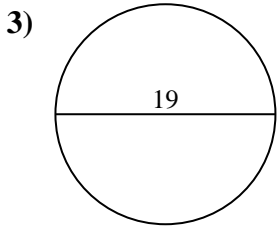
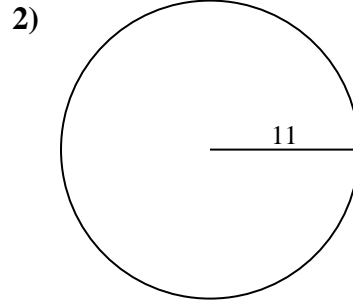
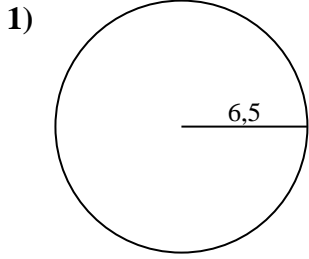


**Risposte**

- 1. \_\_\_\_\_
- 2. \_\_\_\_\_
- 3. \_\_\_\_\_
- 4. \_\_\_\_\_
- 5. \_\_\_\_\_
- 6. \_\_\_\_\_
- 7. \_\_\_\_\_
- 8. \_\_\_\_\_
- 9. \_\_\_\_\_
- 10. \_\_\_\_\_



Calcola la circonferenza di ogni cerchio. I cerchi non sono da scalare.

**Risposte**1. 40,84 cm2. 69,12 cm3. 59,69 cm4. 3,14 cm5. 56,55 cm6. 75,4 cm7. 28,27 cm8. 34,56 cm9. 53,41 cm10. 21,99 cm



Calcola la circonferenza di ogni cerchio. I cerchi non sono da scalare.

69,12 cm

21,99 cm

56,55 cm

34,56 cm

3,14 cm

28,27 cm

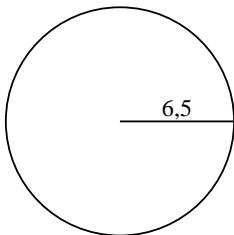
53,41 cm

59,69 cm

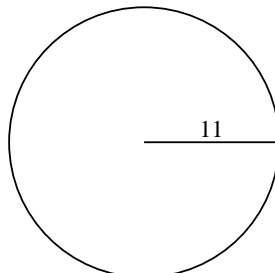
40,84 cm

75,4 cm

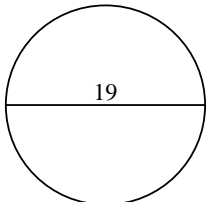
1)



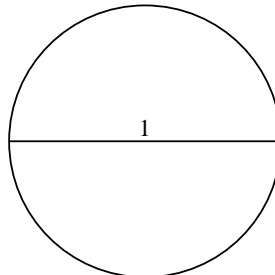
2)



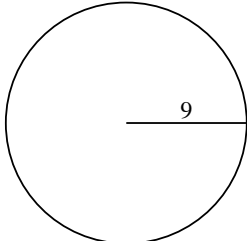
3)



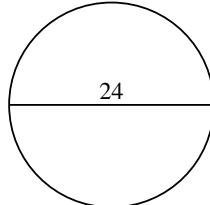
4)



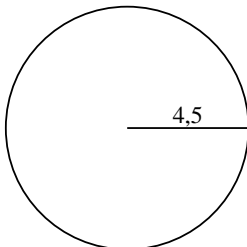
5)



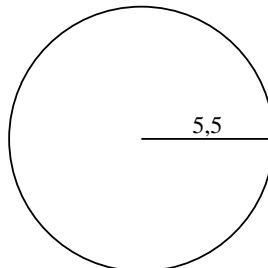
6)



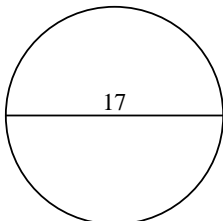
7)



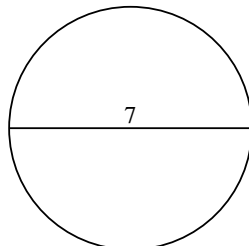
8)



9)



10)



**Risposte**

1. \_\_\_\_\_

2. \_\_\_\_\_

3. \_\_\_\_\_

4. \_\_\_\_\_

5. \_\_\_\_\_

6. \_\_\_\_\_

7. \_\_\_\_\_

8. \_\_\_\_\_

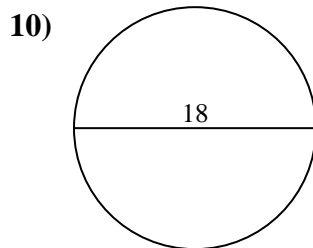
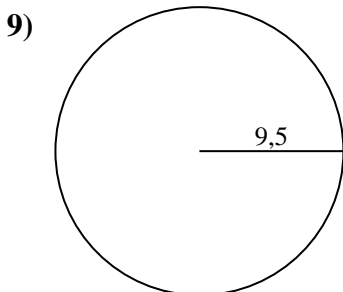
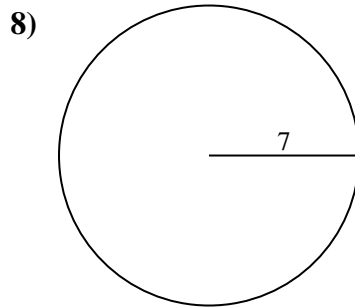
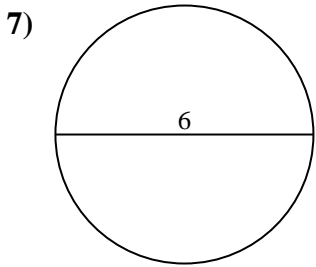
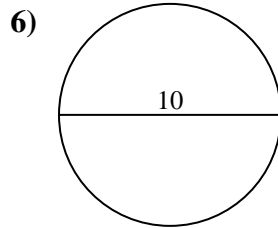
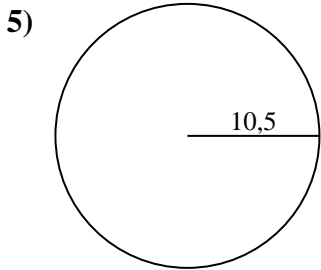
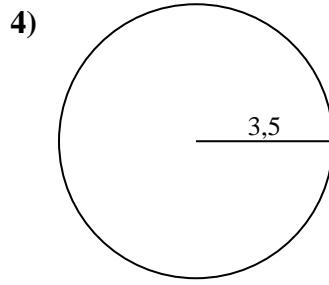
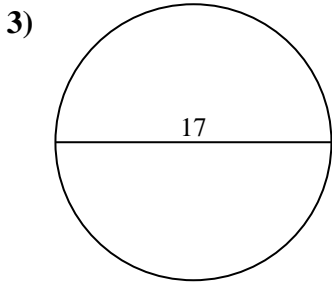
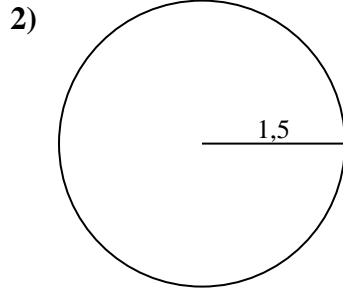
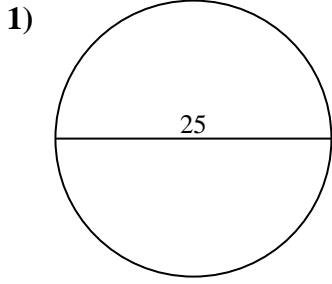
9. \_\_\_\_\_

10. \_\_\_\_\_





Calcola la circonferenza di ogni cerchio. I cerchi non sono da scalare.

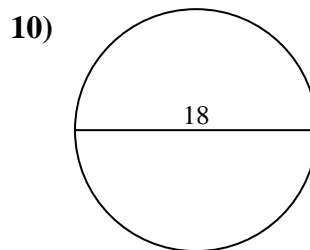
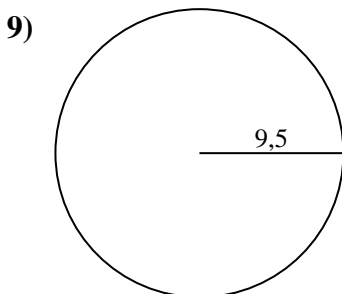
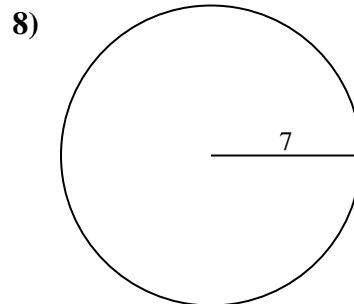
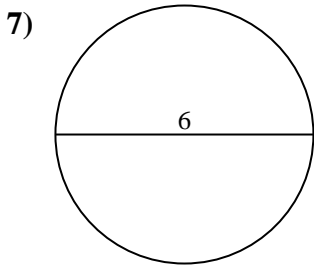
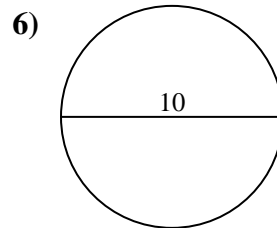
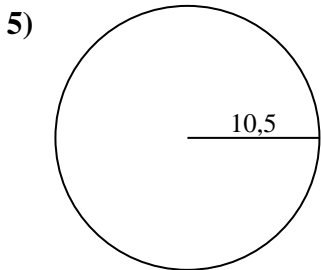
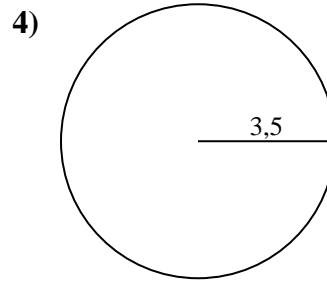
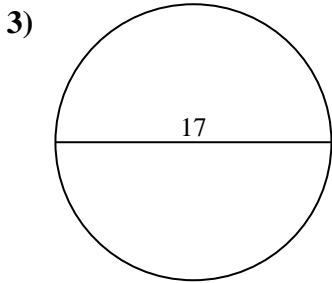
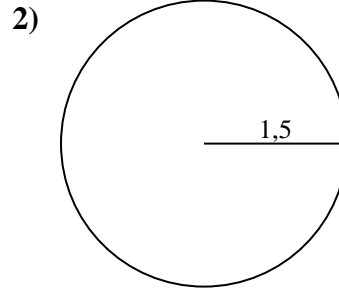
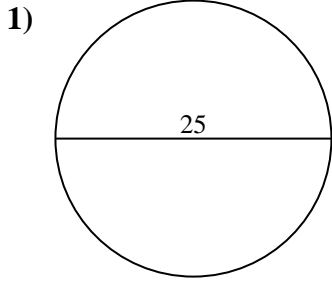


**Risposte**

- 1. \_\_\_\_\_
- 2. \_\_\_\_\_
- 3. \_\_\_\_\_
- 4. \_\_\_\_\_
- 5. \_\_\_\_\_
- 6. \_\_\_\_\_
- 7. \_\_\_\_\_
- 8. \_\_\_\_\_
- 9. \_\_\_\_\_
- 10. \_\_\_\_\_



Calcola la circonferenza di ogni cerchio. I cerchi non sono da scalare.

**Risposte**

1. **78,54 cm**
2. **9,42 cm**
3. **53,41 cm**
4. **21,99 cm**
5. **65,97 cm**
6. **31,42 cm**
7. **18,85 cm**
8. **43,98 cm**
9. **59,69 cm**
10. **56,55 cm**



Calcola la circonferenza di ogni cerchio. I cerchi non sono da scalare.

18,85 cm

9,42 cm

21,99 cm

59,69 cm

78,54 cm

31,42 cm

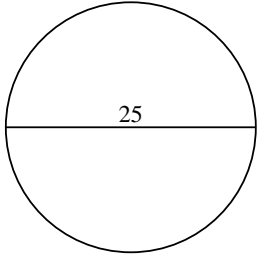
43,98 cm

53,41 cm

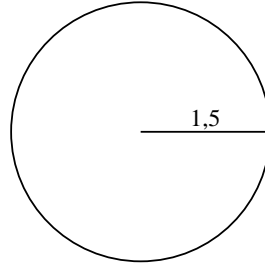
56,55 cm

65,97 cm

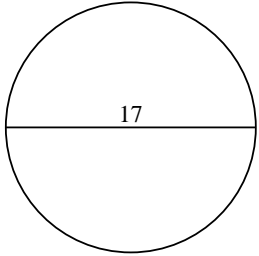
1)



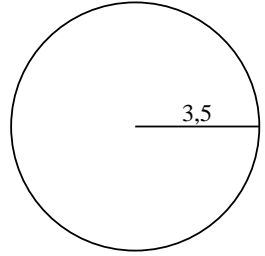
2)



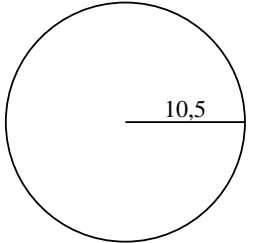
3)



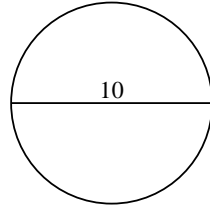
4)



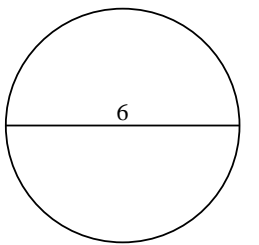
5)



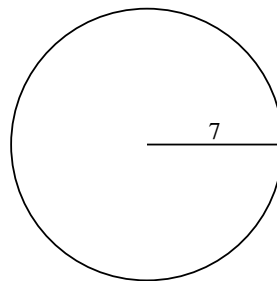
6)



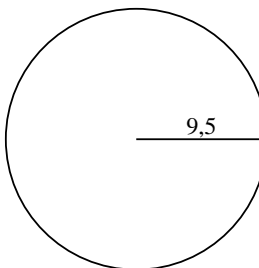
7)



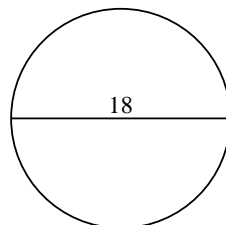
8)



9)



10)



**Risposte**

1. \_\_\_\_\_

2. \_\_\_\_\_

3. \_\_\_\_\_

4. \_\_\_\_\_

5. \_\_\_\_\_

6. \_\_\_\_\_

7. \_\_\_\_\_

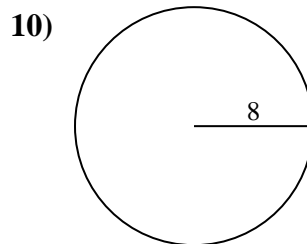
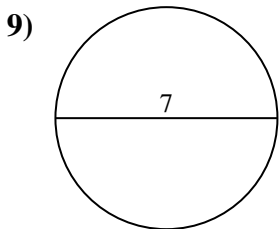
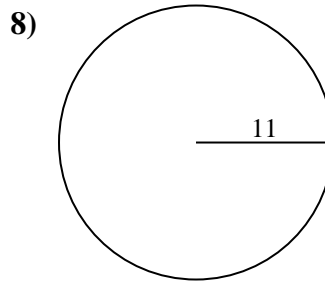
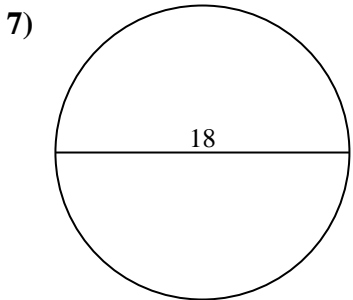
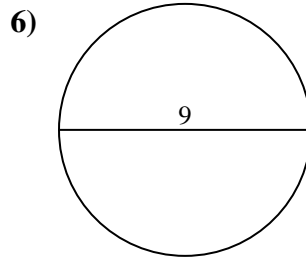
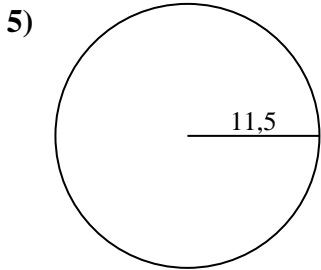
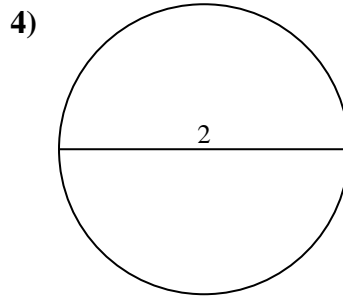
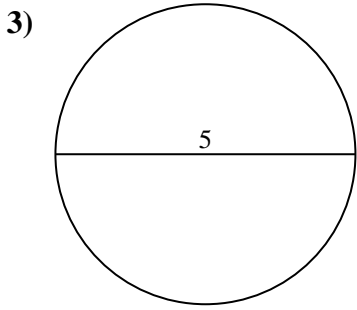
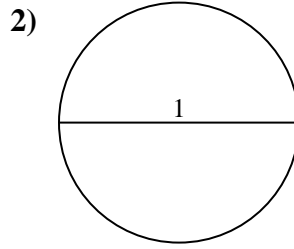
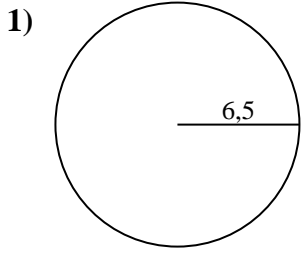
8. \_\_\_\_\_

9. \_\_\_\_\_

10. \_\_\_\_\_



Calcola la circonferenza di ogni cerchio. I cerchi non sono da scalare.

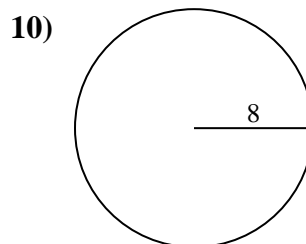
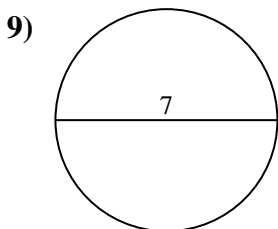
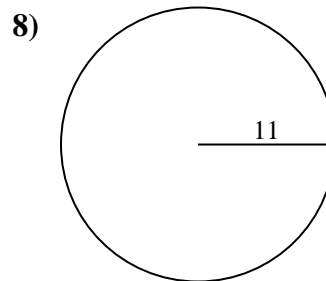
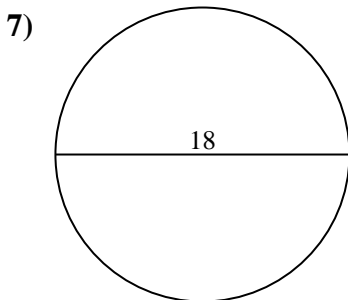
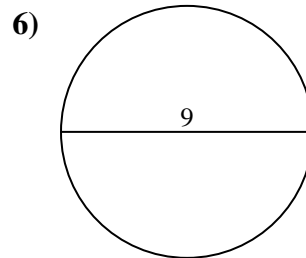
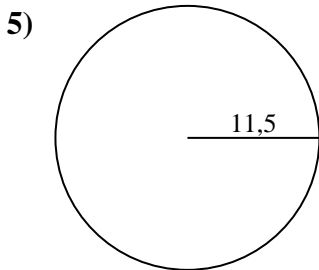
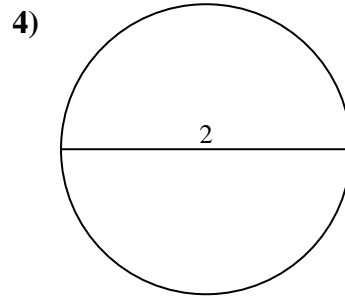
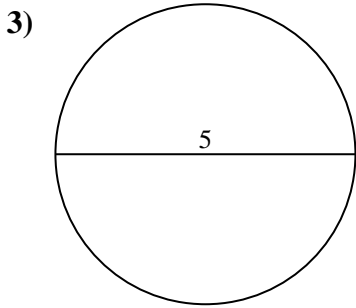
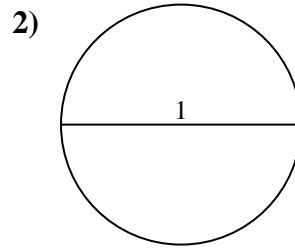
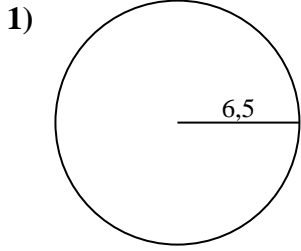


**Risposte**

- 1. \_\_\_\_\_
- 2. \_\_\_\_\_
- 3. \_\_\_\_\_
- 4. \_\_\_\_\_
- 5. \_\_\_\_\_
- 6. \_\_\_\_\_
- 7. \_\_\_\_\_
- 8. \_\_\_\_\_
- 9. \_\_\_\_\_
- 10. \_\_\_\_\_



Calcola la circonferenza di ogni cerchio. I cerchi non sono da scalare.

**Risposte**1. 40,84 cm2. 3,14 cm3. 15,71 cm4. 6,28 cm5. 72,26 cm6. 28,27 cm7. 56,55 cm8. 69,12 cm9. 21,99 cm10. 50,27 cm



Calcola la circonferenza di ogni cerchio. I cerchi non sono da scalare.

28,27 cm

21,99 cm

40,84 cm

6,28 cm

15,71 cm

56,55 cm

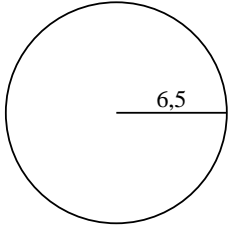
69,12 cm

3,14 cm

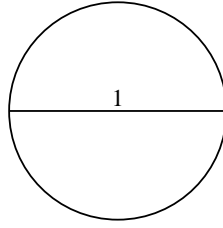
50,27 cm

72,26 cm

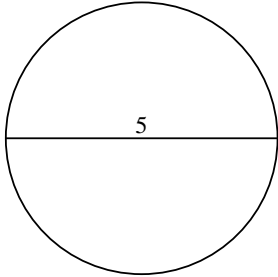
1)



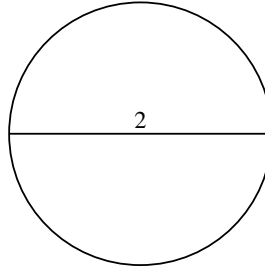
2)



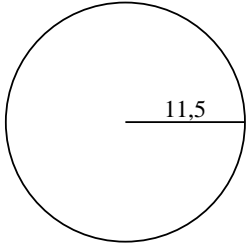
3)



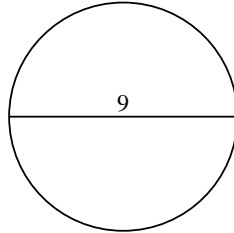
4)



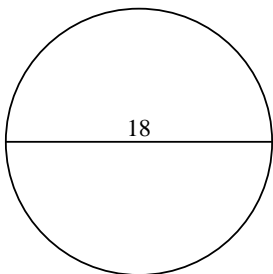
5)



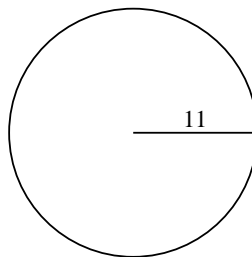
6)



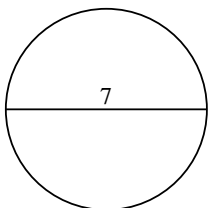
7)



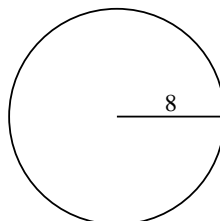
8)



9)



10)



**Risposte**

1. \_\_\_\_\_

2. \_\_\_\_\_

3. \_\_\_\_\_

4. \_\_\_\_\_

5. \_\_\_\_\_

6. \_\_\_\_\_

7. \_\_\_\_\_

8. \_\_\_\_\_

9. \_\_\_\_\_

10. \_\_\_\_\_