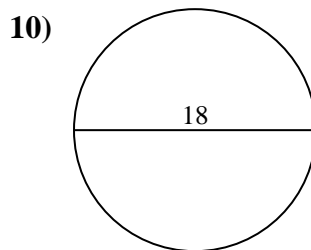
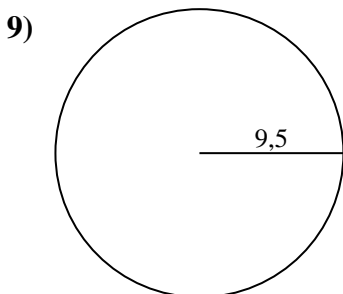
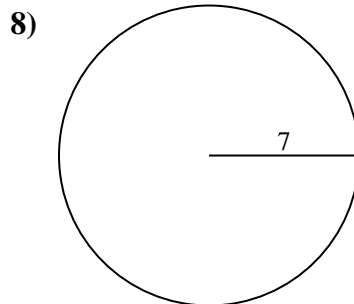
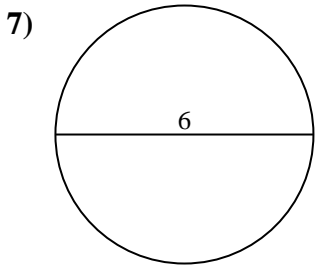
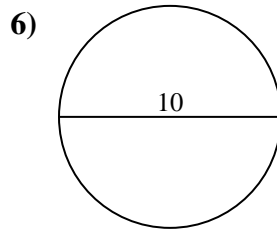
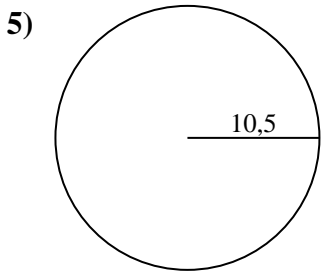
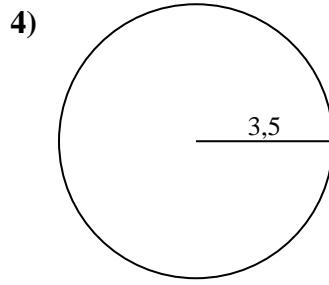
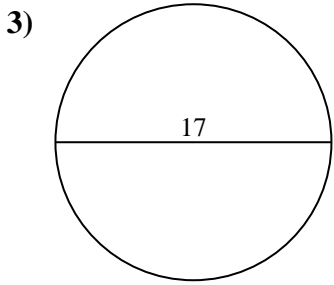
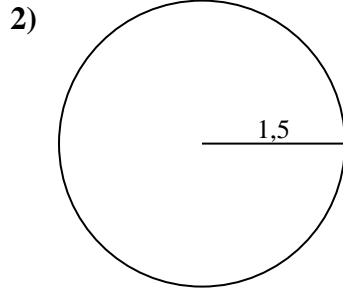
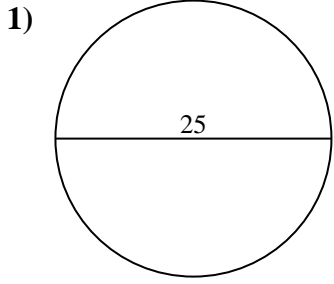




Calcola la circonferenza di ogni cerchio. I cerchi non sono da scalare.

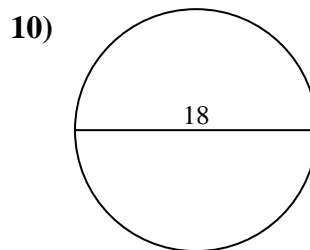
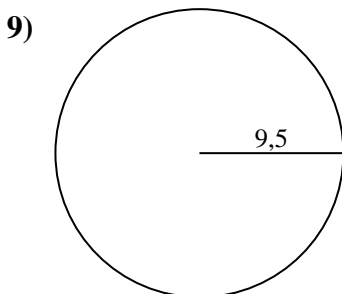
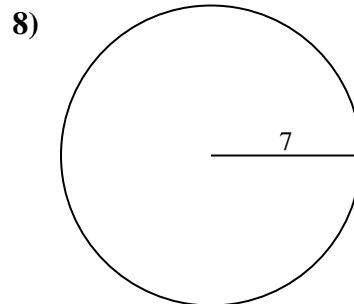
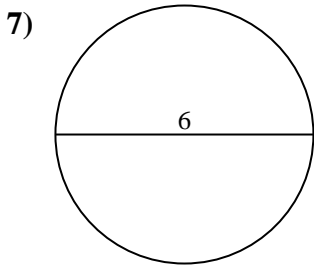
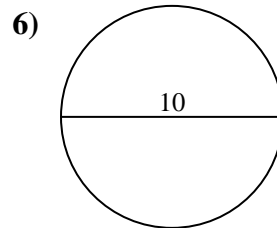
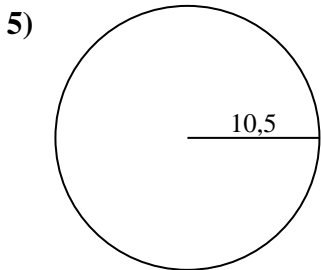
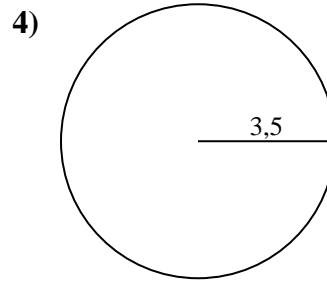
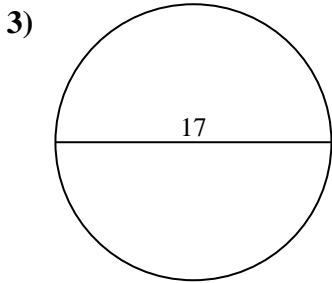
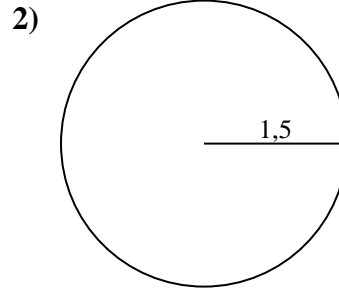
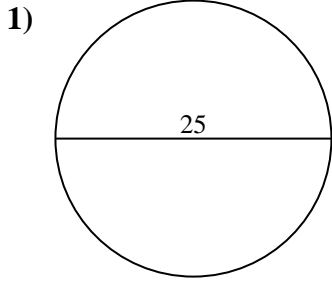


Risposte

- 1. _____
- 2. _____
- 3. _____
- 4. _____
- 5. _____
- 6. _____
- 7. _____
- 8. _____
- 9. _____
- 10. _____



Calcola la circonferenza di ogni cerchio. I cerchi non sono da scalare.

**Risposte**1. **78,54 cm**2. **9,42 cm**3. **53,41 cm**4. **21,99 cm**5. **65,97 cm**6. **31,42 cm**7. **18,85 cm**8. **43,98 cm**9. **59,69 cm**10. **56,55 cm**



Calcola la circonferenza di ogni cerchio. I cerchi non sono da scalare.

| | | | | |
|----------|----------|----------|----------|----------|
| 18,85 cm | 9,42 cm | 21,99 cm | 59,69 cm | 78,54 cm |
| 31,42 cm | 43,98 cm | 53,41 cm | 56,55 cm | 65,97 cm |

Risposte

1. _____
2. _____
3. _____
4. _____
5. _____
6. _____
7. _____
8. _____
9. _____
10. _____

