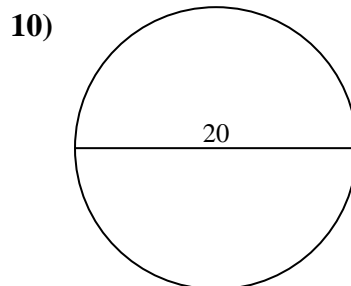
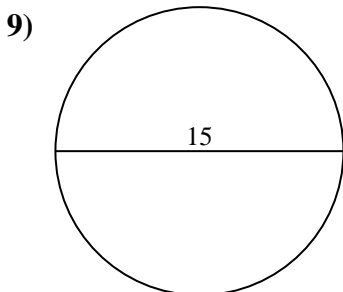
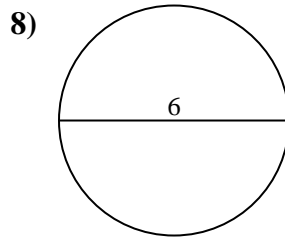
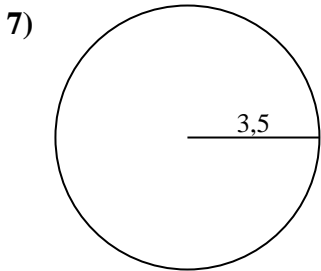
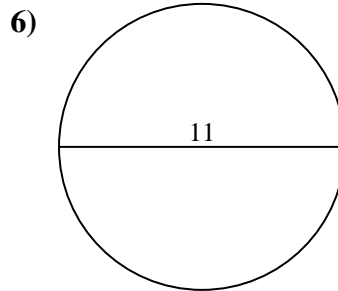
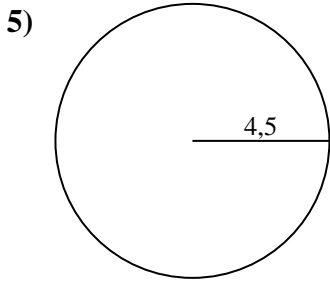
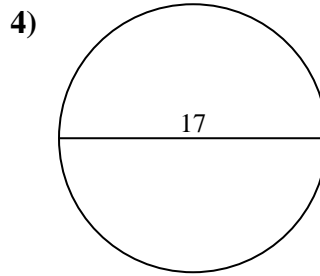
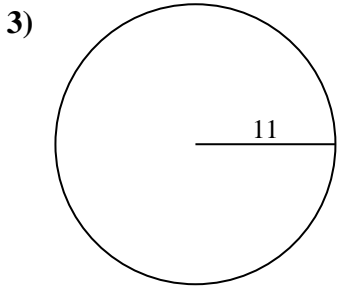
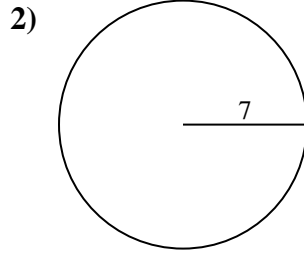
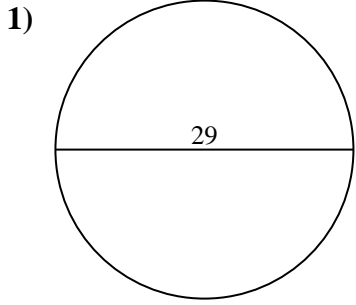




Calcola la circonferenza di ogni cerchio. I cerchi non sono da scalare.

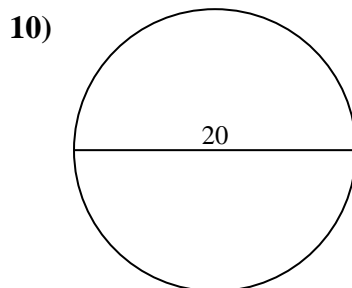
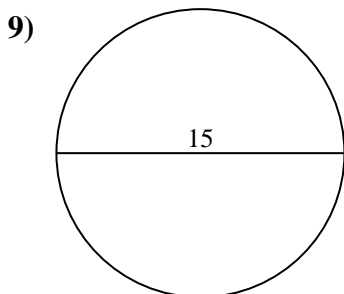
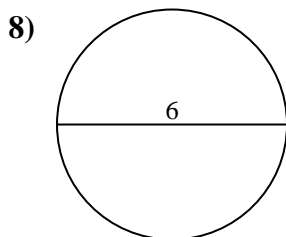
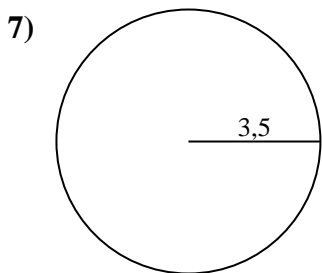
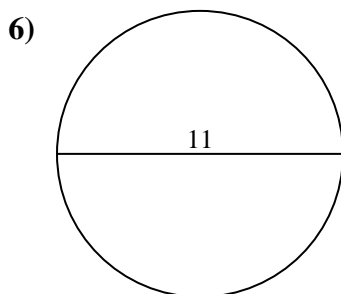
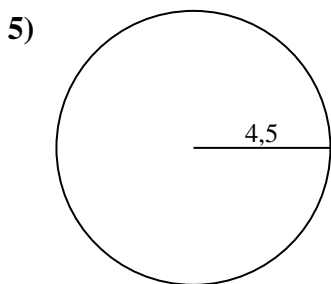
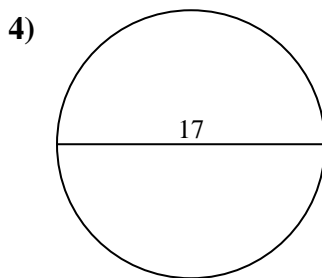
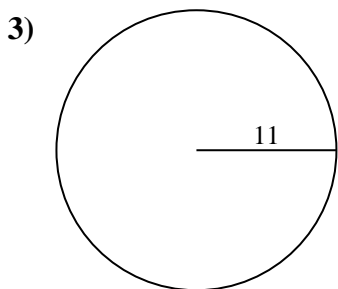
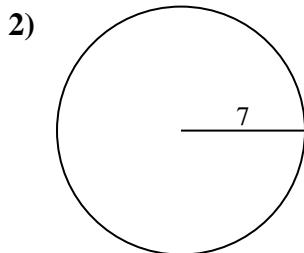
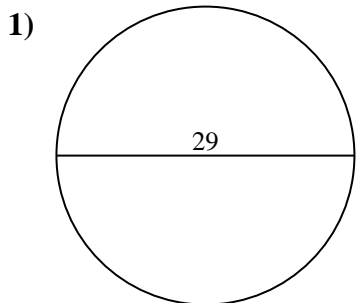


Risposte

- 1. _____
- 2. _____
- 3. _____
- 4. _____
- 5. _____
- 6. _____
- 7. _____
- 8. _____
- 9. _____
- 10. _____



Calcola la circonferenza di ogni cerchio. I cerchi non sono da scalare.

**Risposte**1. 91,11 cm2. 43,98 cm3. 69,12 cm4. 53,41 cm5. 28,27 cm6. 34,56 cm7. 21,99 cm8. 18,85 cm9. 47,12 cm10. 62,83 cm



Calcola la circonferenza di ogni cerchio. I cerchi non sono da scalare.

21,99 cm

62,83 cm

69,12 cm

47,12 cm

53,41 cm

28,27 cm

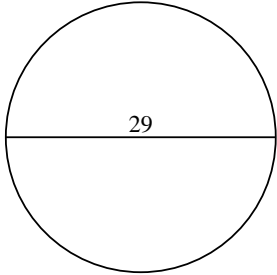
43,98 cm

18,85 cm

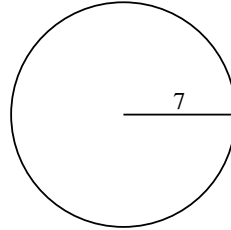
34,56 cm

91,11 cm

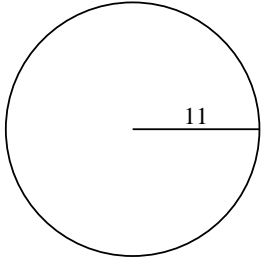
1)



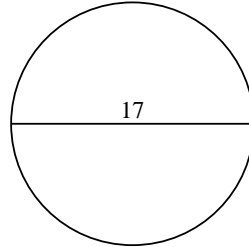
2)



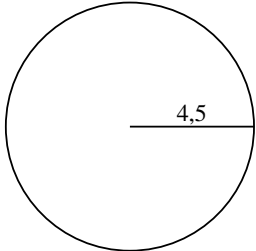
3)



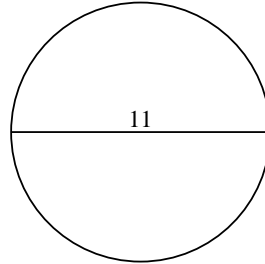
4)



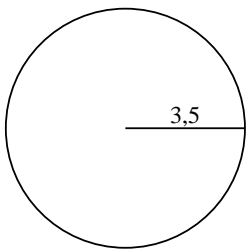
5)



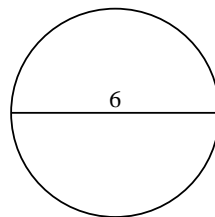
6)



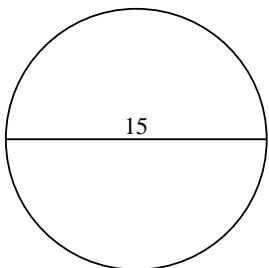
7)



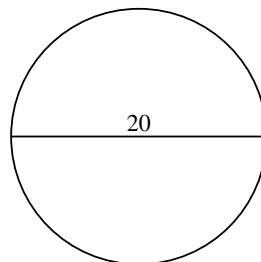
8)



9)



10)



Risposte

1. _____

2. _____

3. _____

4. _____

5. _____

6. _____

7. _____

8. _____

9. _____

10. _____