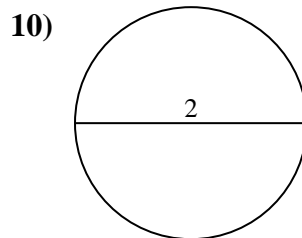
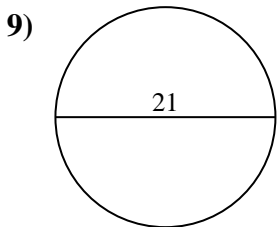
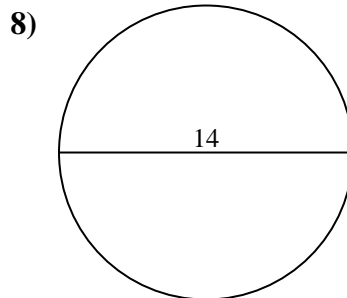
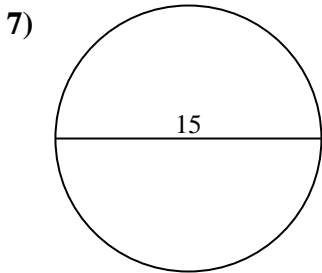
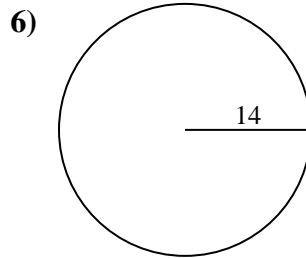
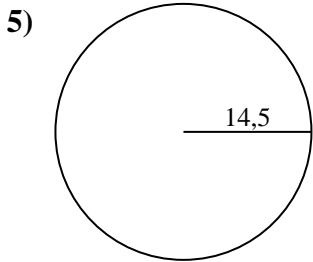
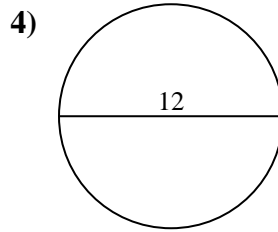
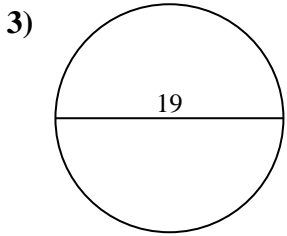
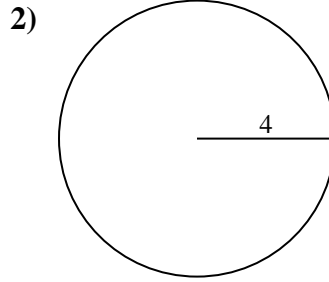
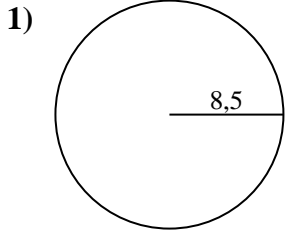




Calcola la circonferenza di ogni cerchio. I cerchi non sono da scalare.

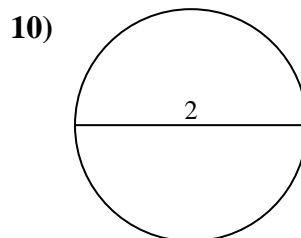
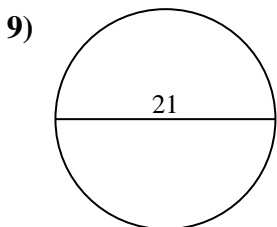
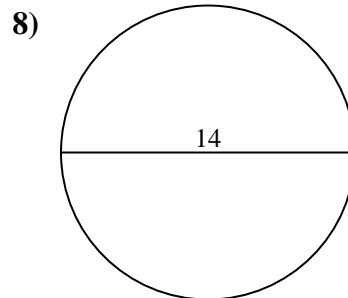
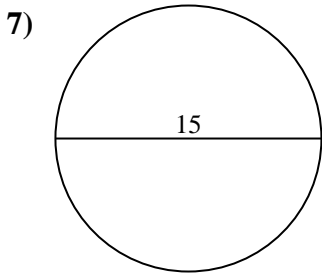
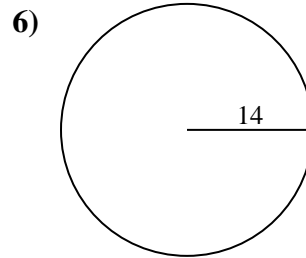
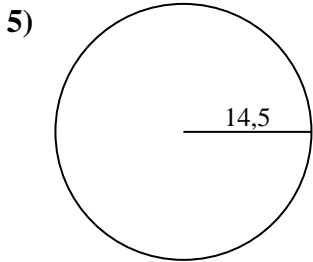
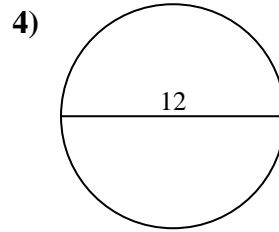
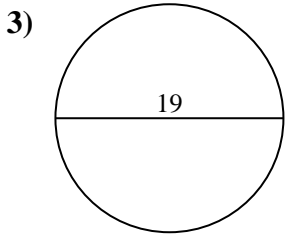
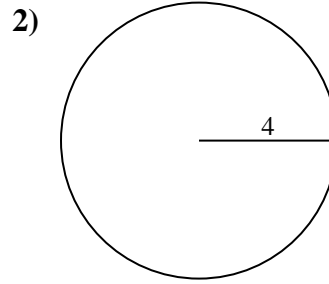
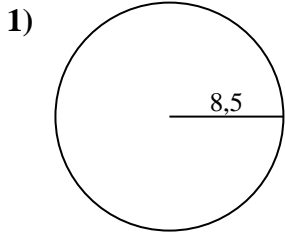


**Risposte**

- 1. \_\_\_\_\_
- 2. \_\_\_\_\_
- 3. \_\_\_\_\_
- 4. \_\_\_\_\_
- 5. \_\_\_\_\_
- 6. \_\_\_\_\_
- 7. \_\_\_\_\_
- 8. \_\_\_\_\_
- 9. \_\_\_\_\_
- 10. \_\_\_\_\_



Calcola la circonferenza di ogni cerchio. I cerchi non sono da scalare.

**Risposte**1. **53,41 cm**2. **25,13 cm**3. **59,69 cm**4. **37,7 cm**5. **91,11 cm**6. **87,96 cm**7. **47,12 cm**8. **43,98 cm**9. **65,97 cm**10. **6,28 cm**



Calcola la circonferenza di ogni cerchio. I cerchi non sono da scalare.

**Risposte**

6,28 cm

43,98 cm

87,96 cm

37,7 cm

53,41 cm

47,12 cm

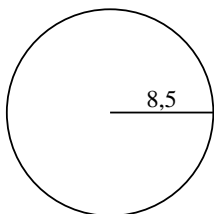
59,69 cm

25,13 cm

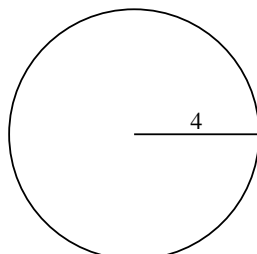
65,97 cm

91,11 cm

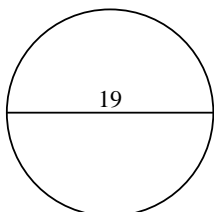
1)



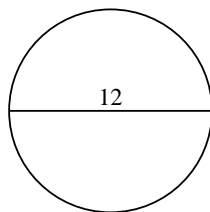
2)



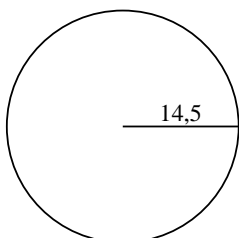
3)



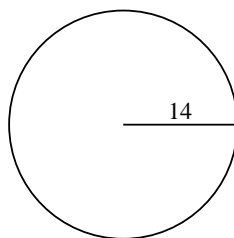
4)



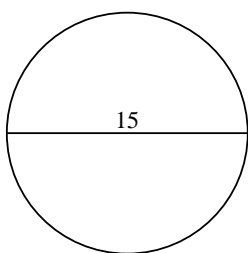
5)



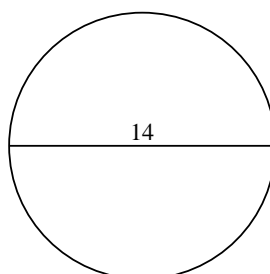
6)



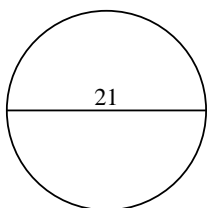
7)



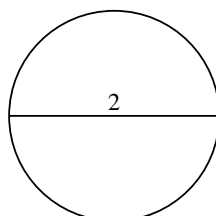
8)



9)



10)



1. \_\_\_\_\_

2. \_\_\_\_\_

3. \_\_\_\_\_

4. \_\_\_\_\_

5. \_\_\_\_\_

6. \_\_\_\_\_

7. \_\_\_\_\_

8. \_\_\_\_\_

9. \_\_\_\_\_

10. \_\_\_\_\_