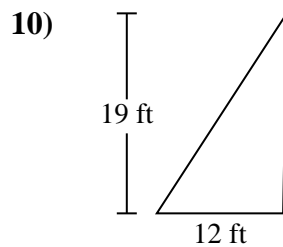
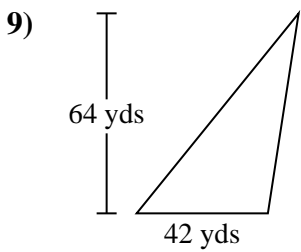
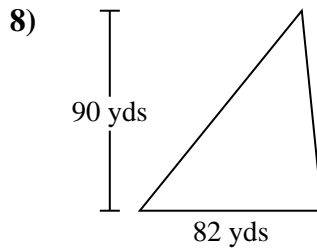
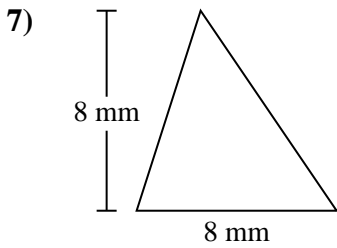
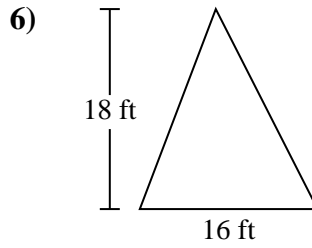
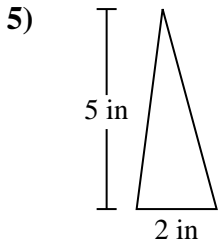
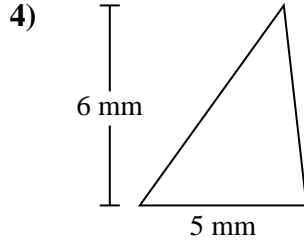
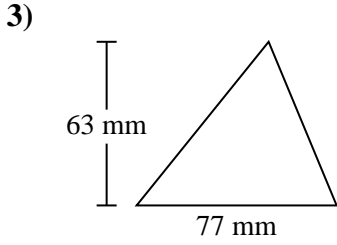
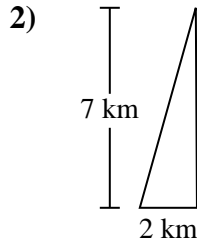
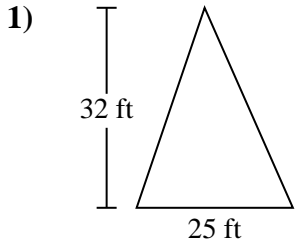




Trova l'area di ciascun traingoli. Le dimensioni non sono in scala.

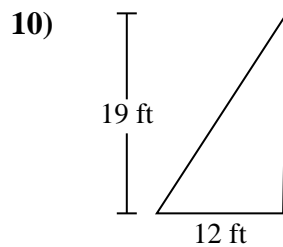
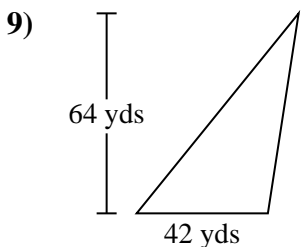
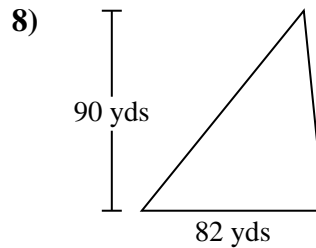
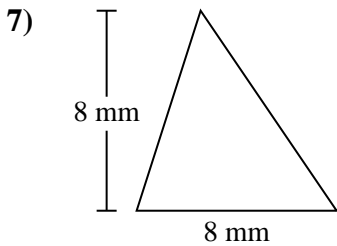
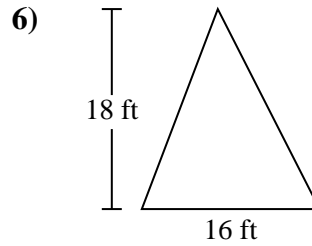
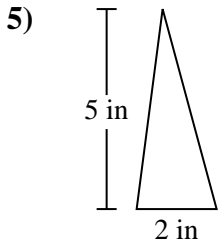
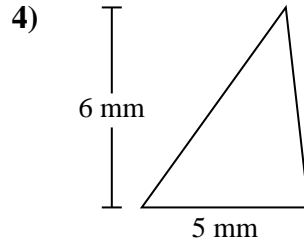
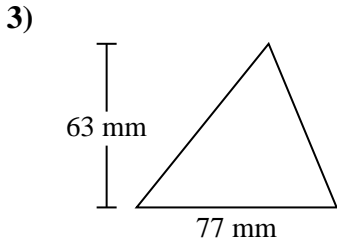
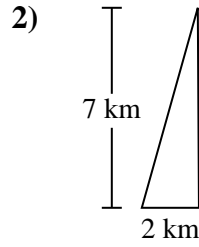
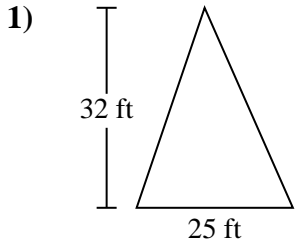


Risposte

1. _____
2. _____
3. _____
4. _____
5. _____
6. _____
7. _____
8. _____
9. _____
10. _____



Trova l'area di ciascun traingoli. Le dimensioni non sono in scala.

**Risposte**

1. 400 ft²
2. 7 km²
3. 2.425,5 mm²
4. 15 mm²
5. 5 in²
6. 144 ft²
7. 32 mm²
8. 3.690 yds²
9. 1.344 yds²
10. 114 ft²



Trova l'area di ciascun triangolo. Le dimensioni non sono in scala.

114 ft^2

32 mm^2

5 in^2

$2.425,5 \text{ mm}^2$

3.690 yds^2

400 ft^2

144 ft^2

1.344 yds^2

15 mm^2

7 km^2

Risposte

1. _____

2. _____

3. _____

4. _____

5. _____

6. _____

7. _____

8. _____

9. _____

10. _____

