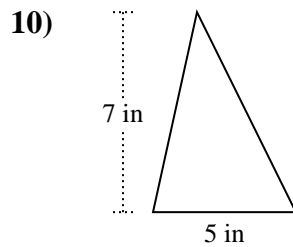
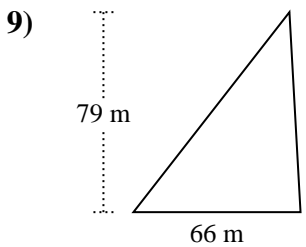
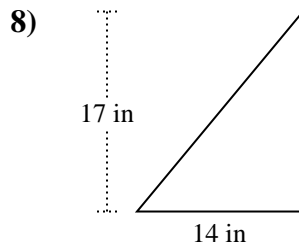
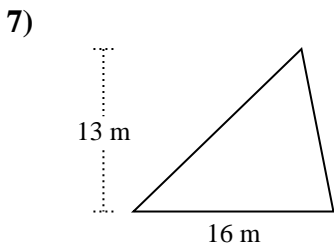
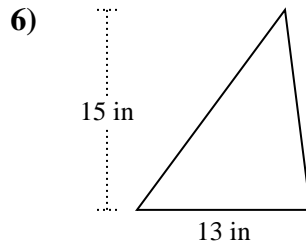
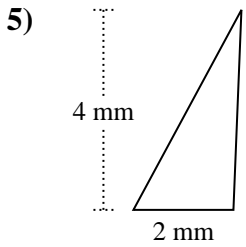
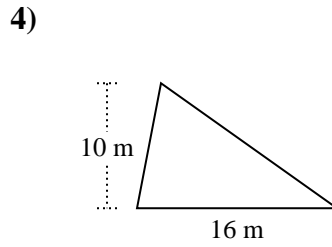
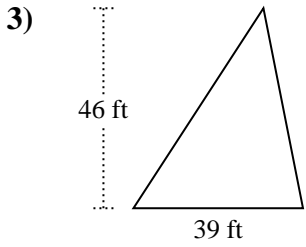
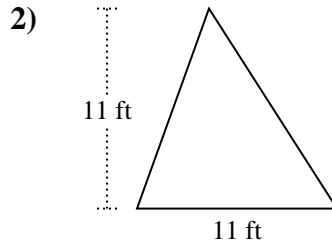
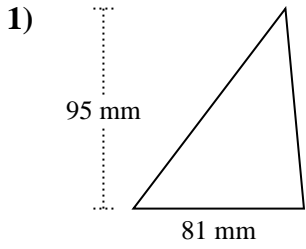




Trova l'area di ciascun traingoli. Le dimensioni non sono in scala.

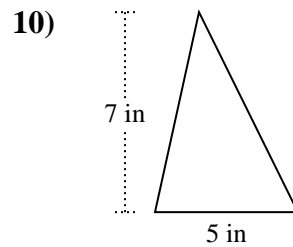
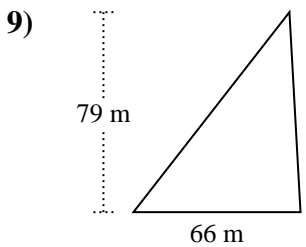
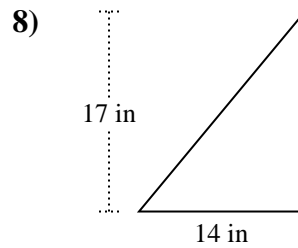
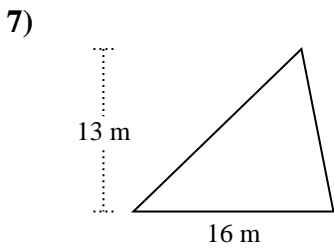
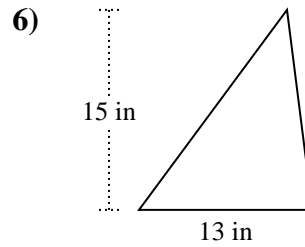
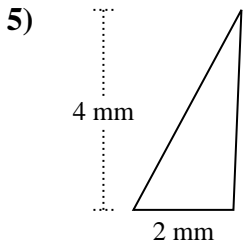
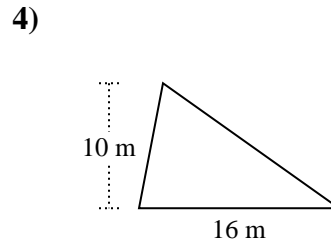
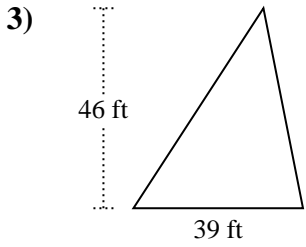
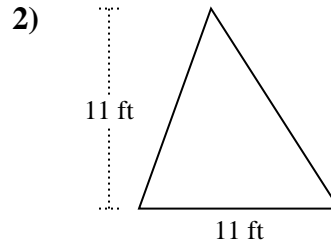
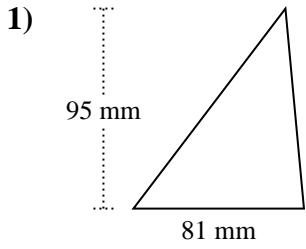


Risposte

- 1. _____
- 2. _____
- 3. _____
- 4. _____
- 5. _____
- 6. _____
- 7. _____
- 8. _____
- 9. _____
- 10. _____



Trova l'area di ciascun traingoli. Le dimensioni non sono in scala.

**Risposte**

1. 3.847,5 mm²
2. 60,5 ft²
3. 897 ft²
4. 80 m²
5. 4 mm²
6. 97,5 in²
7. 104 m²
8. 119 in²
9. 2.607 m²
10. 17,5 in²



Trova l'area di ciascun triangolo. Le dimensioni non sono in scala.

Risposte

60,5

119

2.607

4

104

97,5

3.847,5

897

80

17,5

1. _____

2. _____

3. _____

4. _____

5. _____

6. _____

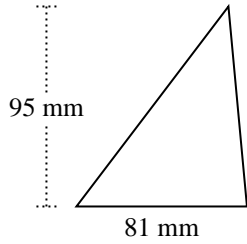
7. _____

8. _____

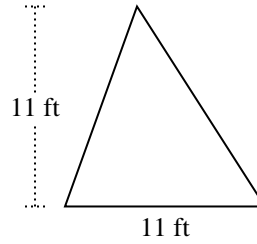
9. _____

10. _____

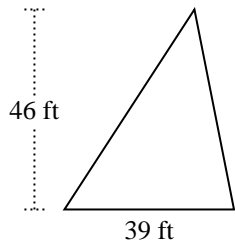
1)



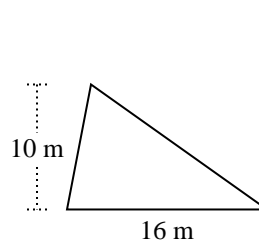
2)



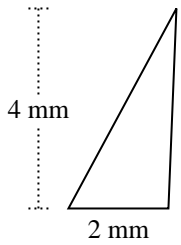
3)



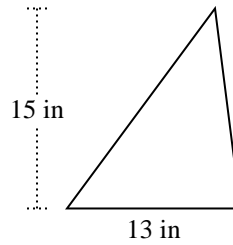
4)



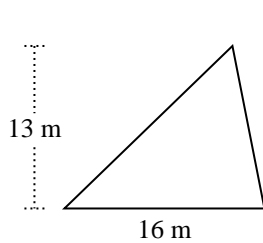
5)



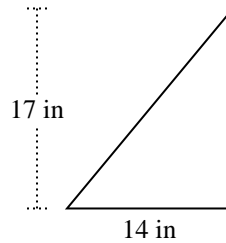
6)



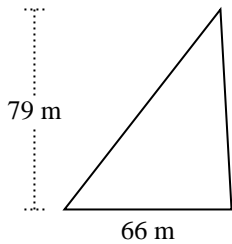
7)



8)



9)



10)

