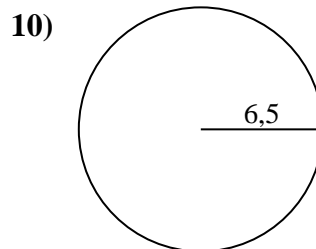
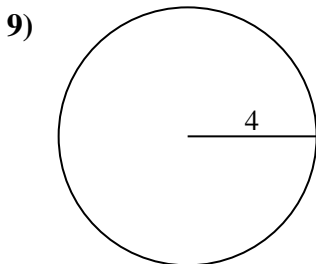
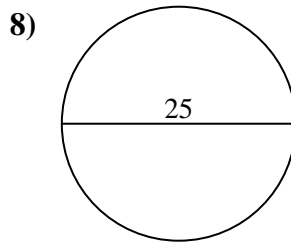
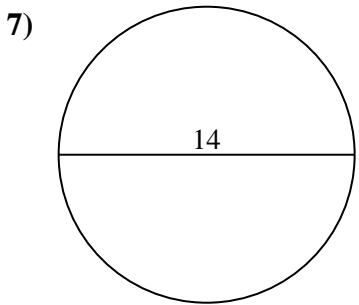
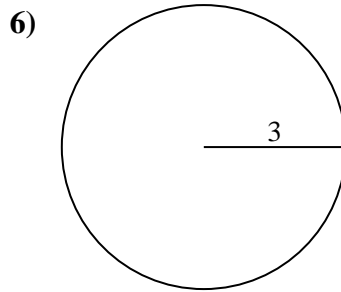
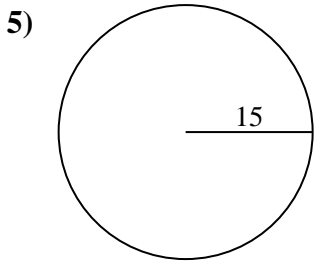
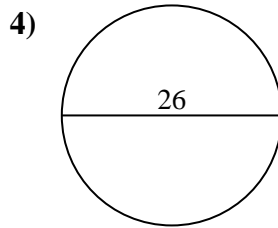
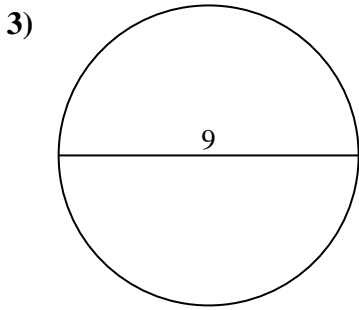
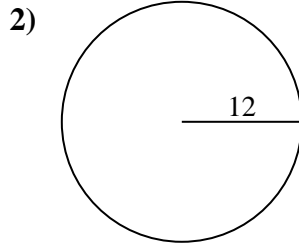
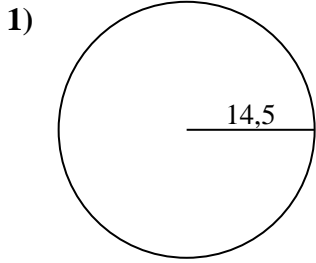




Calcola l'area di ogni cerchio. i cerchi non sono in scala.



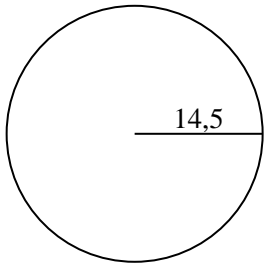
Risposte

- 1. _____
- 2. _____
- 3. _____
- 4. _____
- 5. _____
- 6. _____
- 7. _____
- 8. _____
- 9. _____
- 10. _____

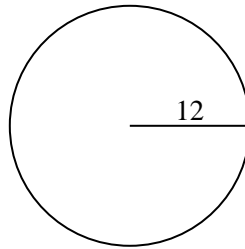


Calcola l'area di ogni cerchio. i cerchi non sono in scala.

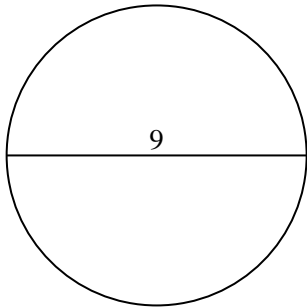
1)



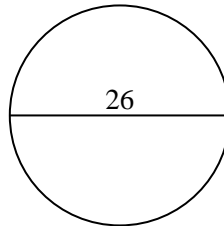
2)



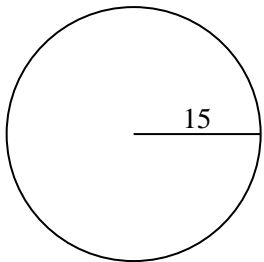
3)



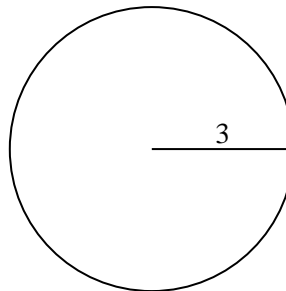
4)



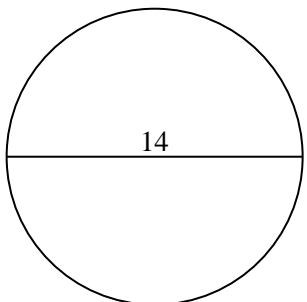
5)



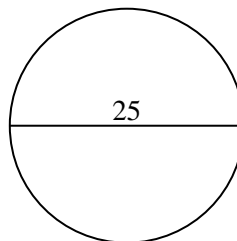
6)



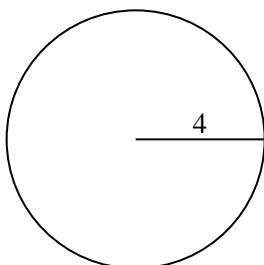
7)



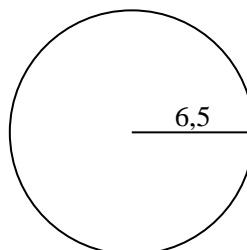
8)



9)



10)

**Risposte**

1. 660,52 cm²
2. 452,39 cm²
3. 63,62 cm²
4. 530,93 cm²
5. 706,86 cm²
6. 28,27 cm²
7. 153,94 cm²
8. 490,87 cm²
9. 50,27 cm²
10. 132,73 cm²