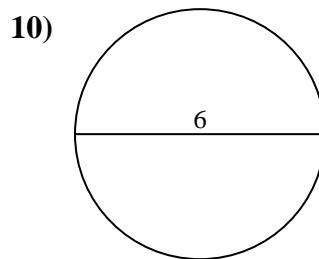
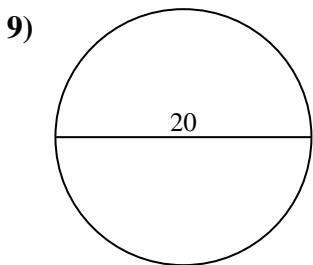
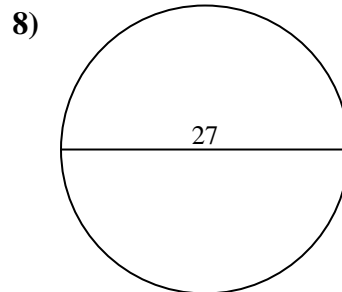
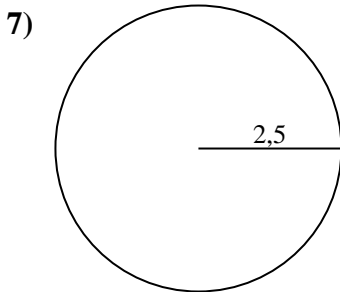
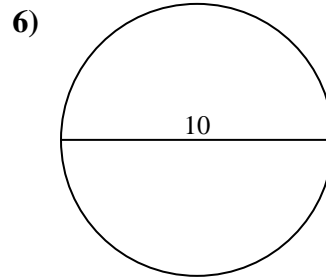
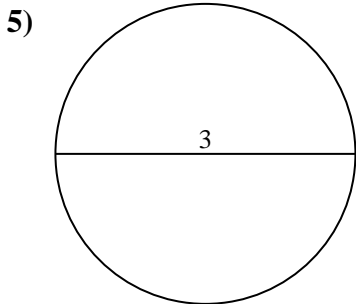
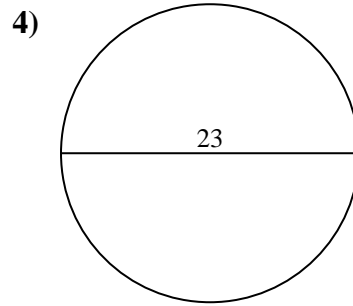
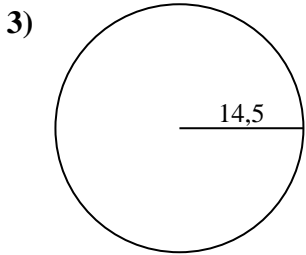
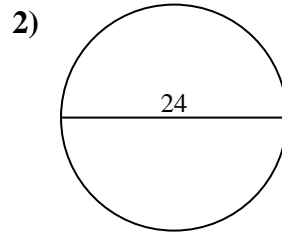
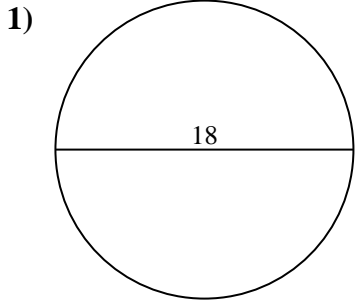




Calcola l'area di ogni cerchio. i cerchi non sono in scala.

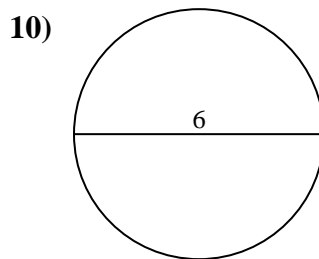
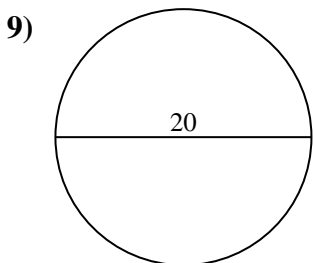
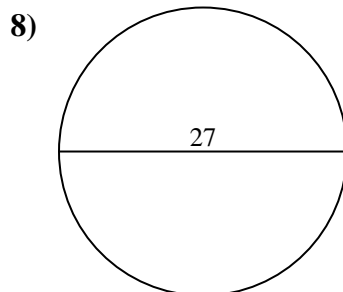
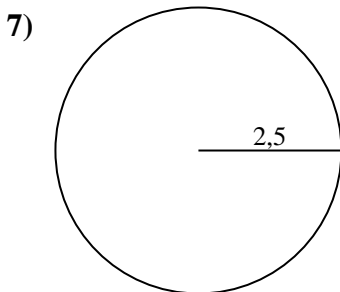
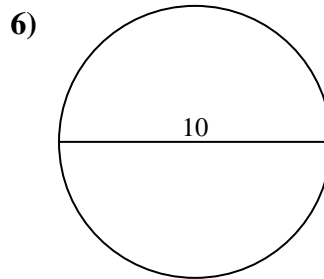
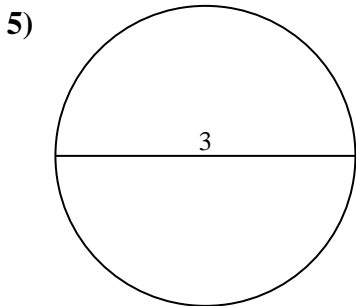
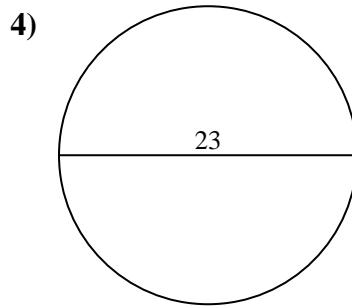
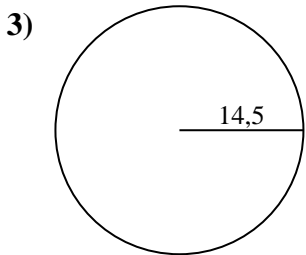
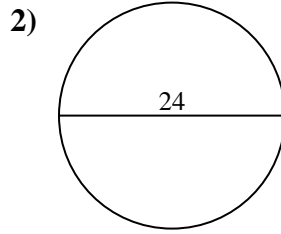
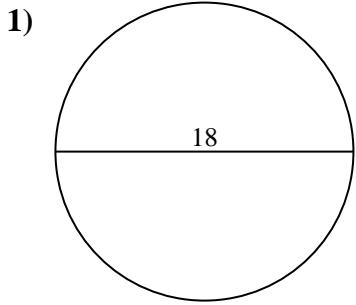


Risposte

- 1. _____
- 2. _____
- 3. _____
- 4. _____
- 5. _____
- 6. _____
- 7. _____
- 8. _____
- 9. _____
- 10. _____



Calcola l'area di ogni cerchio. i cerchi non sono in scala.

**Risposte**

1. 254,47 cm²
2. 452,39 cm²
3. 660,52 cm²
4. 415,48 cm²
5. 7,07 cm²
6. 78,54 cm²
7. 19,63 cm²
8. 572,56 cm²
9. 314,16 cm²
10. 28,27 cm²



Calcola l'area di ogni cerchio. i cerchi non sono in scala.

Risposte

254,47 cm²

28,27 cm²

452,39 cm²

78,54 cm²

19,63 cm²

660,52 cm²

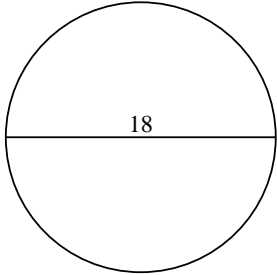
415,48 cm²

314,16 cm²

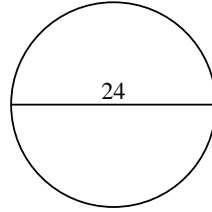
572,56 cm²

7,07 cm²

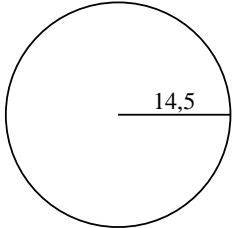
1)



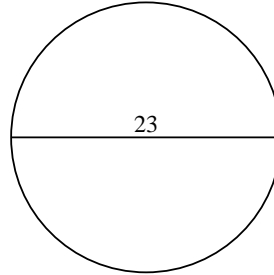
2)



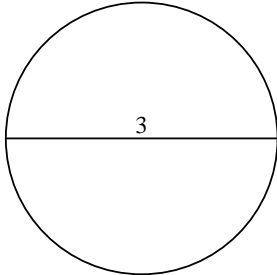
3)



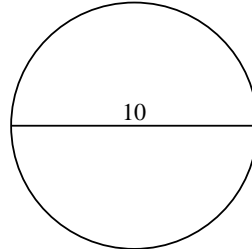
4)



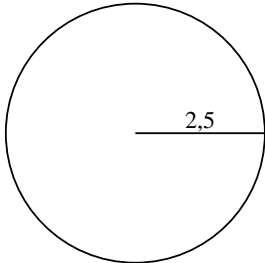
5)



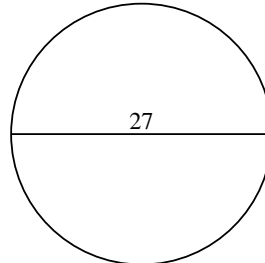
6)



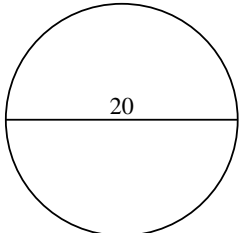
7)



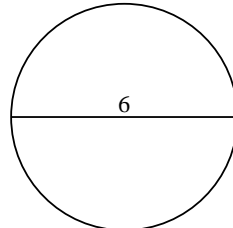
8)



9)



10)



1. _____

2. _____

3. _____

4. _____

5. _____

6. _____

7. _____

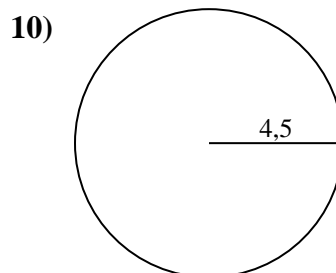
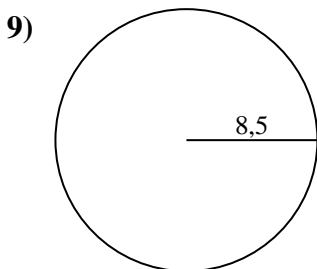
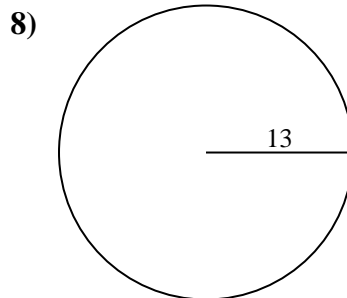
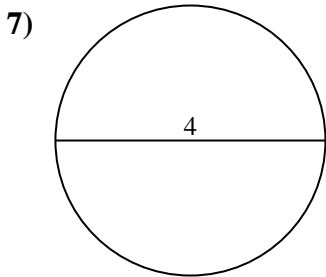
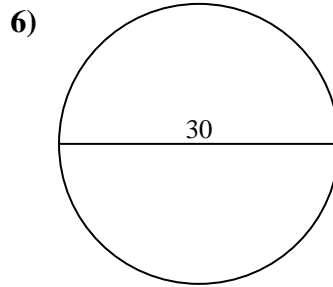
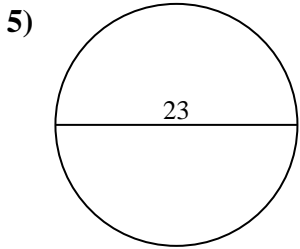
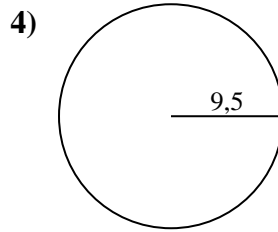
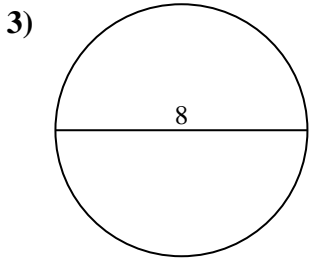
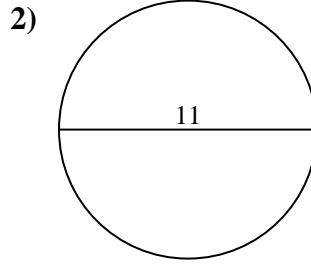
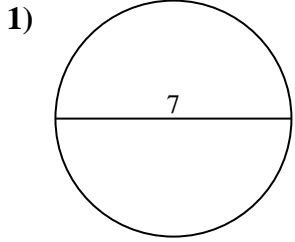
8. _____

9. _____

10. _____



Calcola l'area di ogni cerchio. i cerchi non sono in scala.

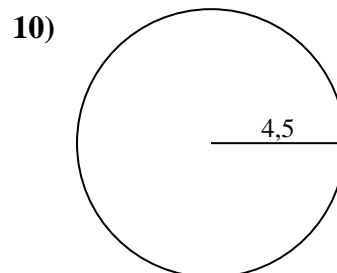
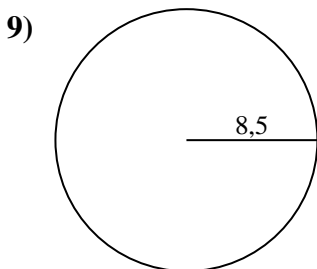
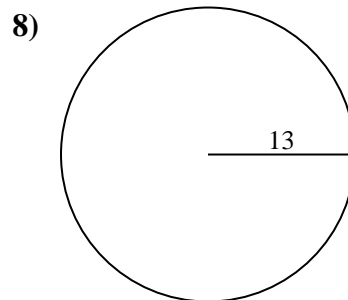
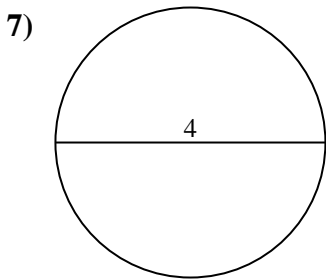
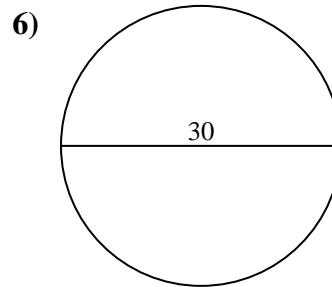
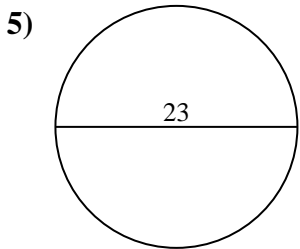
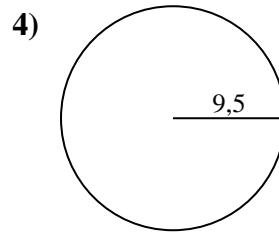
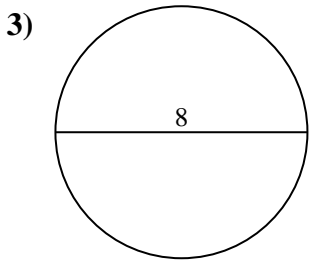
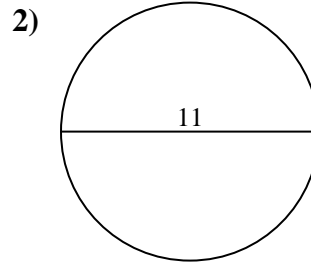
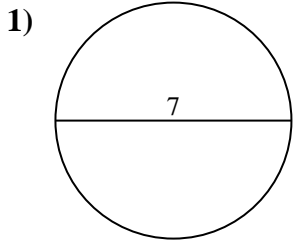


Risposte

- 1. _____
- 2. _____
- 3. _____
- 4. _____
- 5. _____
- 6. _____
- 7. _____
- 8. _____
- 9. _____
- 10. _____



Calcola l'area di ogni cerchio. i cerchi non sono in scala.

**Risposte**

1. **38,48 cm²**
2. **95,03 cm²**
3. **50,27 cm²**
4. **283,53 cm²**
5. **415,48 cm²**
6. **706,86 cm²**
7. **12,57 cm²**
8. **530,93 cm²**
9. **226,98 cm²**
10. **63,62 cm²**



Calcola l'area di ogni cerchio. i cerchi non sono in scala.

Risposte

63,62 cm²

38,48 cm²

95,03 cm²

226,98 cm²

12,57 cm²

50,27 cm²

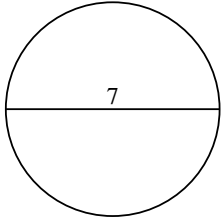
530,93 cm²

415,48 cm²

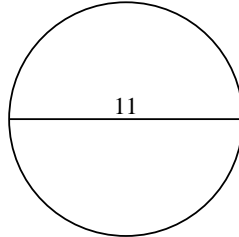
283,53 cm²

706,86 cm²

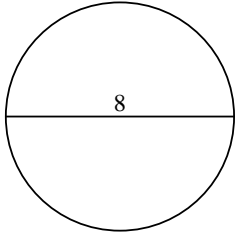
1)



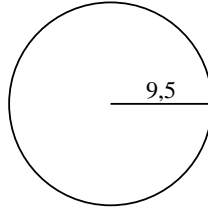
2)



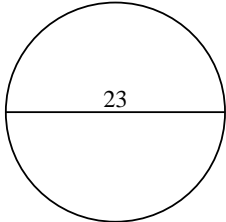
3)



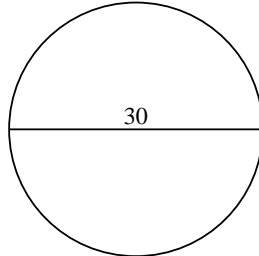
4)



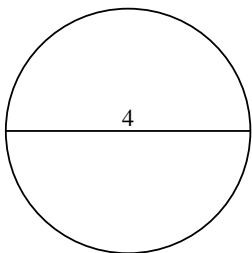
5)



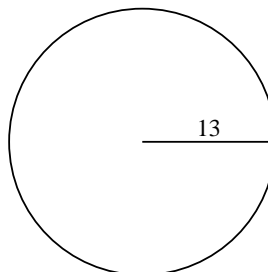
6)



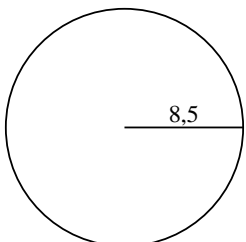
7)



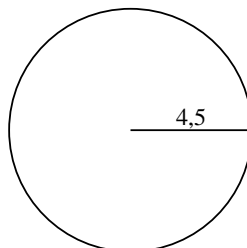
8)



9)



10)



1. _____

2. _____

3. _____

4. _____

5. _____

6. _____

7. _____

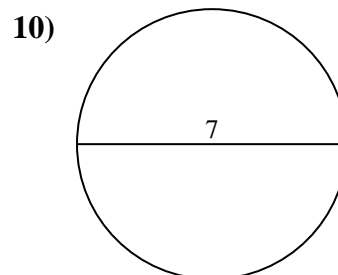
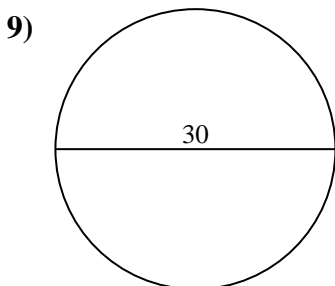
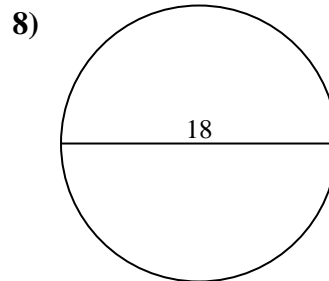
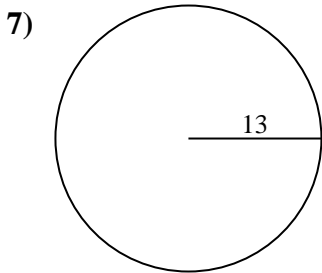
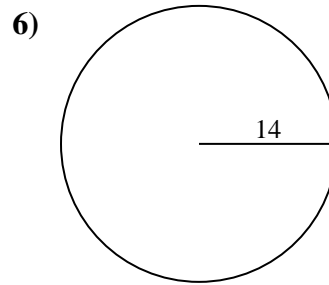
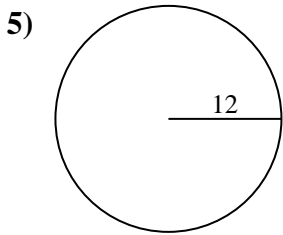
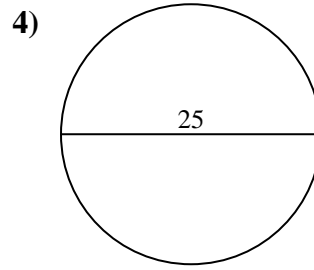
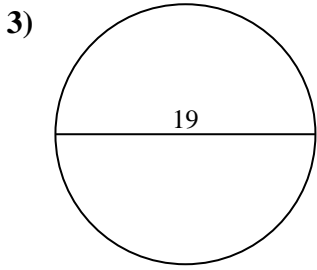
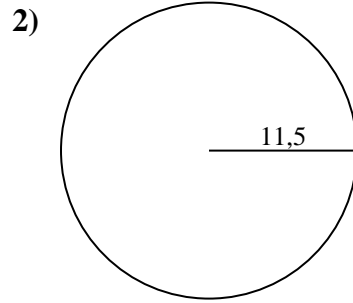
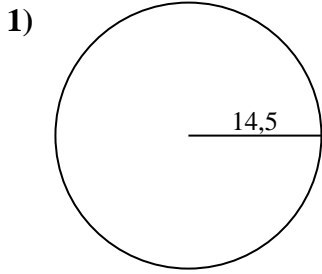
8. _____

9. _____

10. _____



Calcola l'area di ogni cerchio. i cerchi non sono in scala.

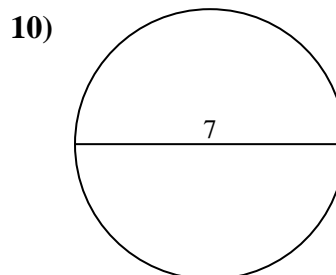
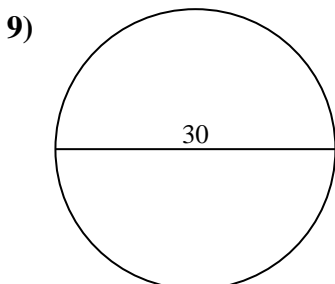
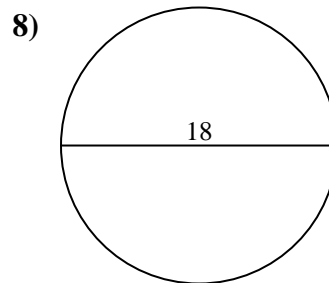
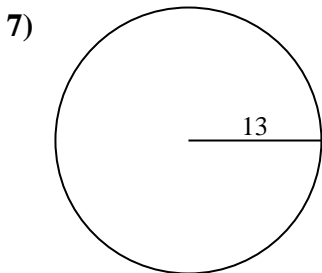
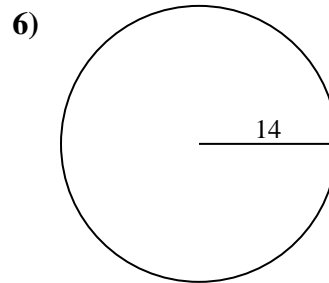
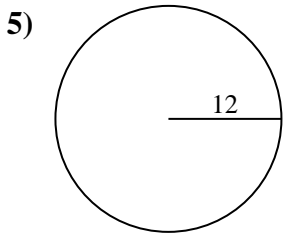
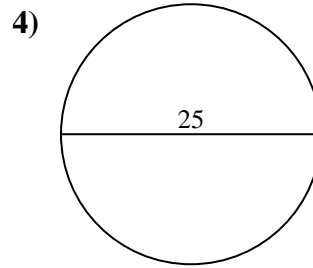
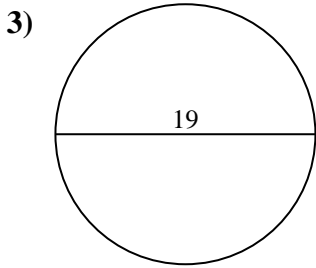
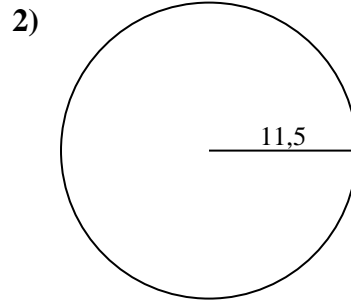
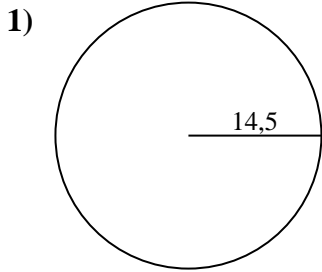


Risposte

- 1. _____
- 2. _____
- 3. _____
- 4. _____
- 5. _____
- 6. _____
- 7. _____
- 8. _____
- 9. _____
- 10. _____



Calcola l'area di ogni cerchio. i cerchi non sono in scala.

**Risposte**

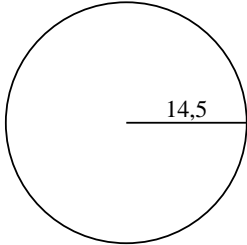
1. **660,52 cm²**
2. **415,48 cm²**
3. **283,53 cm²**
4. **490,87 cm²**
5. **452,39 cm²**
6. **615,75 cm²**
7. **530,93 cm²**
8. **254,47 cm²**
9. **706,86 cm²**
10. **38,48 cm²**



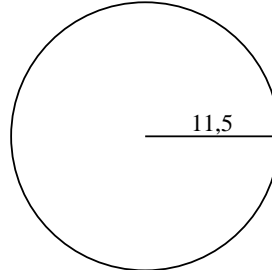
Calcola l'area di ogni cerchio. i cerchi non sono in scala.

660,52 cm²490,87 cm²283,53 cm²706,86 cm²615,75 cm²415,48 cm²452,39 cm²530,93 cm²38,48 cm²254,47 cm²

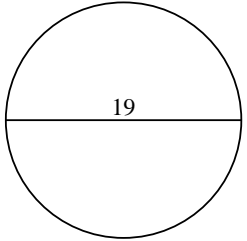
1)



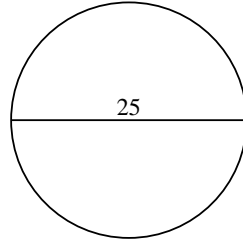
2)



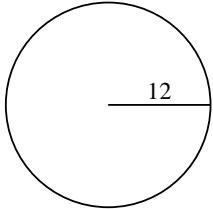
3)



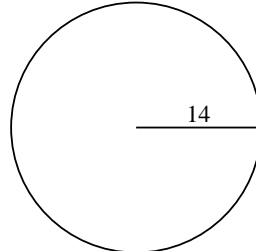
4)



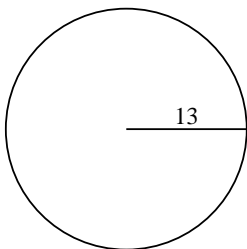
5)



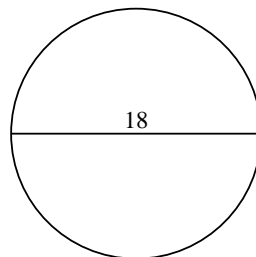
6)



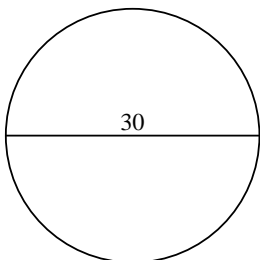
7)



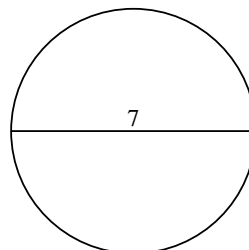
8)



9)



10)

**Risposte**

1. _____

2. _____

3. _____

4. _____

5. _____

6. _____

7. _____

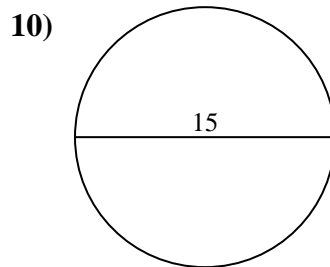
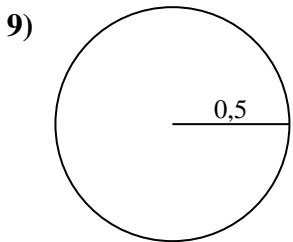
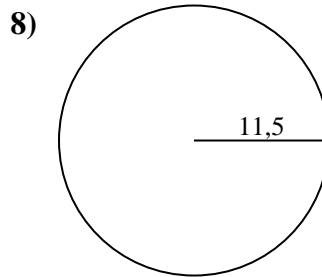
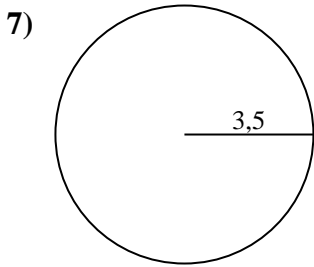
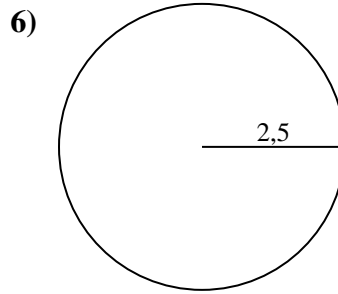
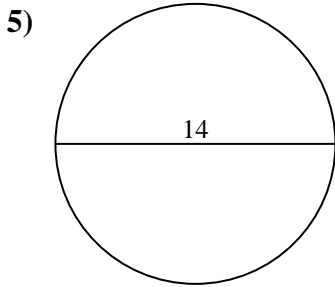
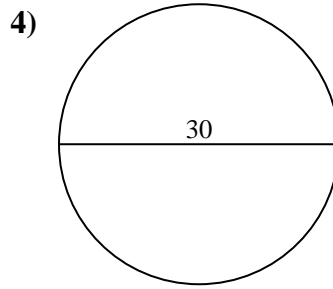
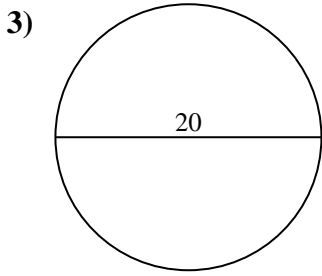
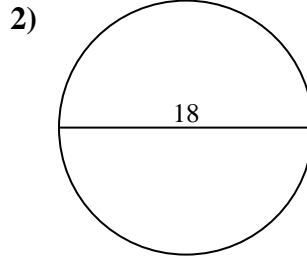
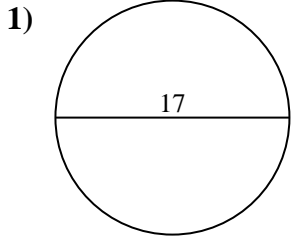
8. _____

9. _____

10. _____



Calcola l'area di ogni cerchio. i cerchi non sono in scala.

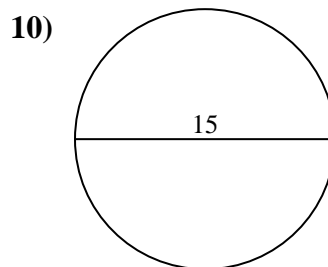
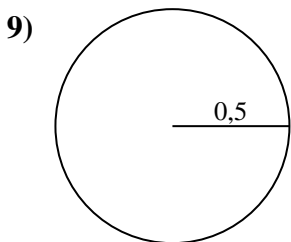
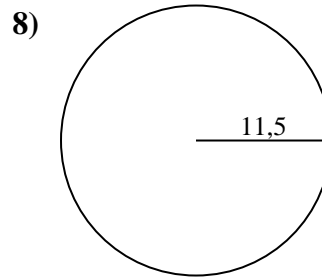
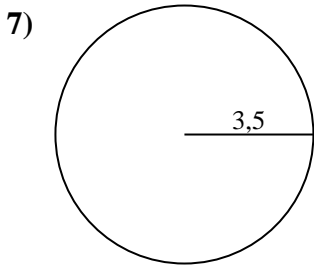
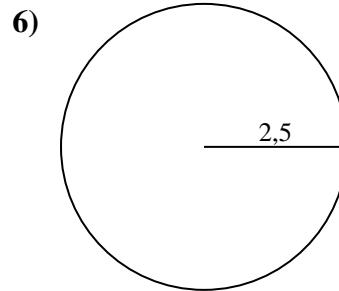
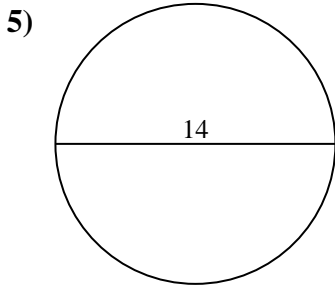
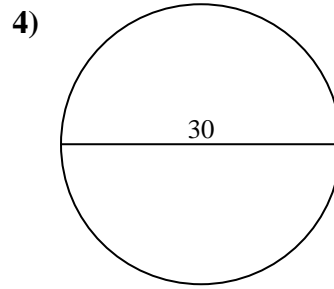
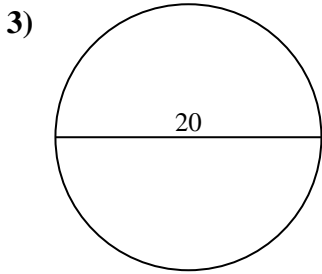
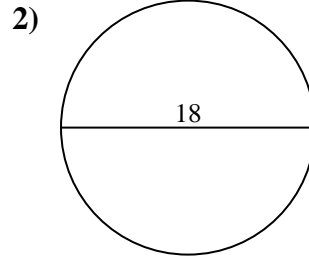
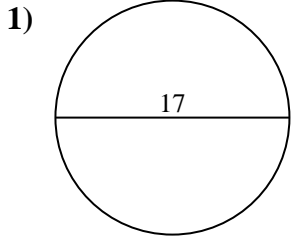


Risposte

- 1. _____
- 2. _____
- 3. _____
- 4. _____
- 5. _____
- 6. _____
- 7. _____
- 8. _____
- 9. _____
- 10. _____



Calcola l'area di ogni cerchio. i cerchi non sono in scala.

**Risposte**

1. 226,98 cm²
2. 254,47 cm²
3. 314,16 cm²
4. 706,86 cm²
5. 153,94 cm²
6. 19,63 cm²
7. 38,48 cm²
8. 415,48 cm²
9. 0,79 cm²
10. 176,71 cm²



Calcola l'area di ogni cerchio. i cerchi non sono in scala.

254,47 cm² 153,94 cm² 415,48 cm² 706,86 cm² 38,48 cm²

226,98 cm² 176,71 cm² 19,63 cm² 314,16 cm² 0,79 cm²

Risposte

1. _____

2. _____

3. _____

4. _____

5. _____

6. _____

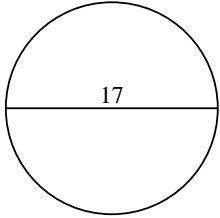
7. _____

8. _____

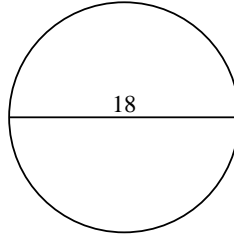
9. _____

10. _____

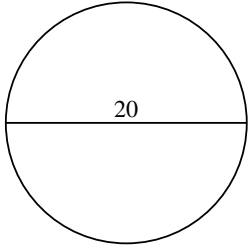
1)



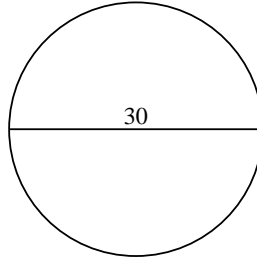
2)



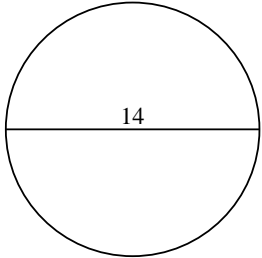
3)



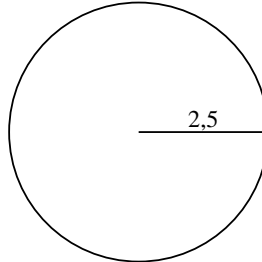
4)



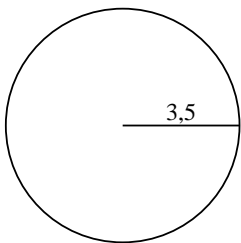
5)



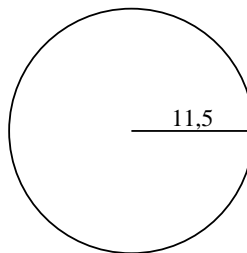
6)



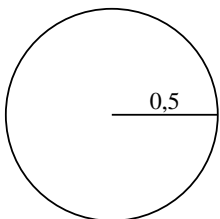
7)



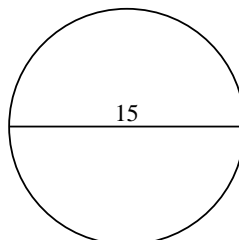
8)



9)

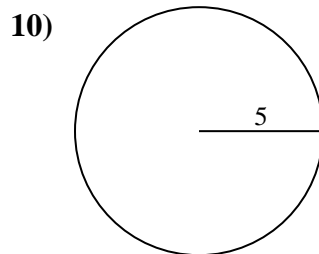
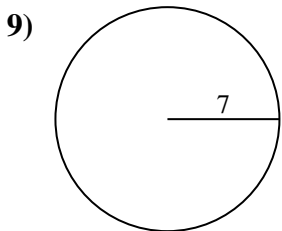
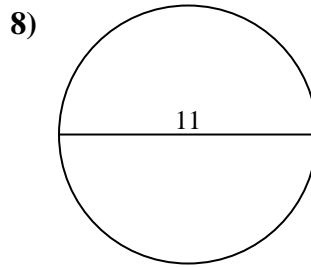
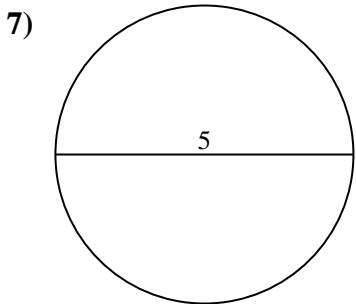
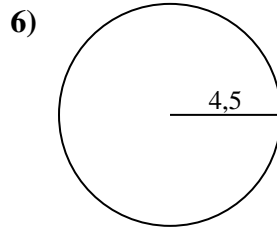
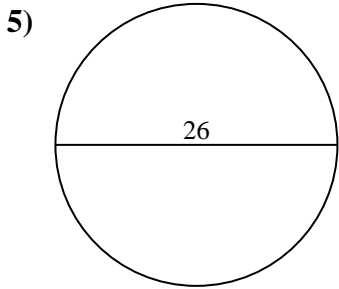
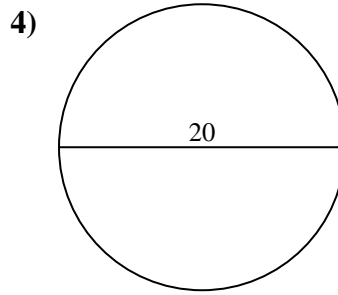
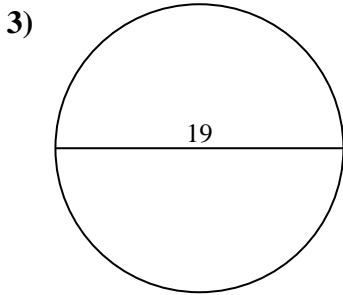
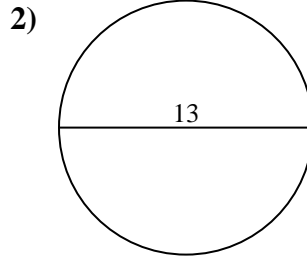
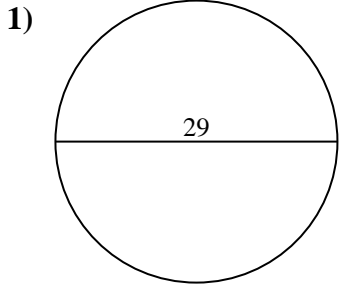


10)





Calcola l'area di ogni cerchio. i cerchi non sono in scala.

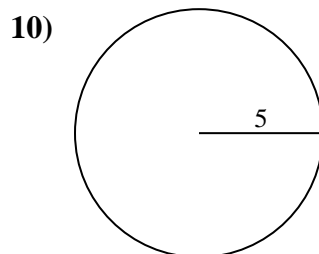
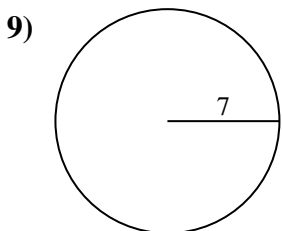
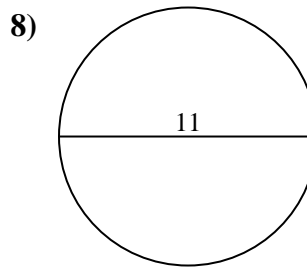
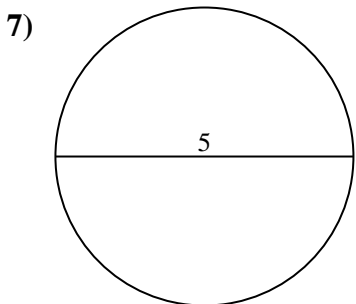
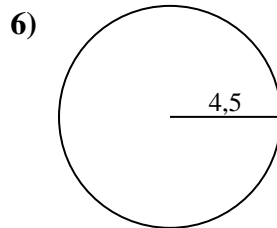
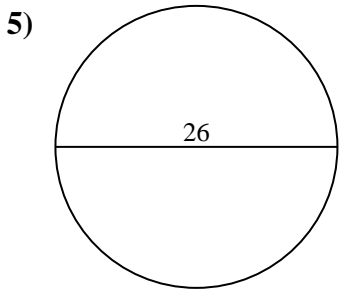
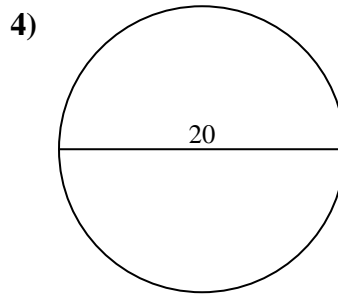
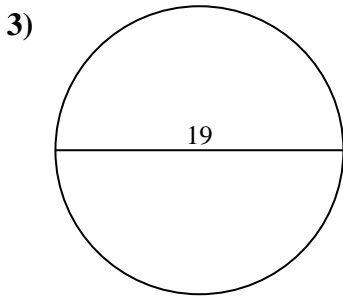
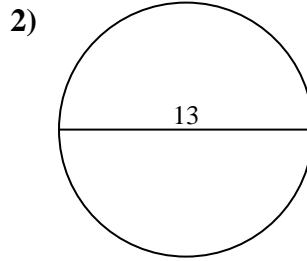
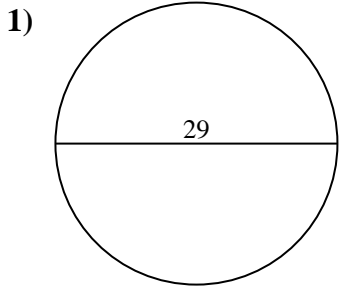


Risposte

- 1. _____
- 2. _____
- 3. _____
- 4. _____
- 5. _____
- 6. _____
- 7. _____
- 8. _____
- 9. _____
- 10. _____



Calcola l'area di ogni cerchio. i cerchi non sono in scala.

**Risposte**

1. **660,52 cm²**
2. **132,73 cm²**
3. **283,53 cm²**
4. **314,16 cm²**
5. **530,93 cm²**
6. **63,62 cm²**
7. **19,63 cm²**
8. **95,03 cm²**
9. **153,94 cm²**
10. **78,54 cm²**



Calcola l'area di ogni cerchio. i cerchi non sono in scala.

Risposte

95,03 cm²

63,62 cm²

314,16 cm²

283,53 cm²

19,63 cm²

1. _____

132,73 cm²

660,52 cm²

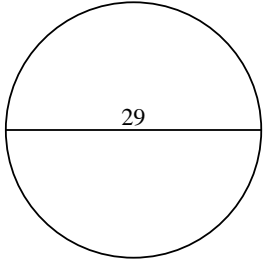
153,94 cm²

530,93 cm²

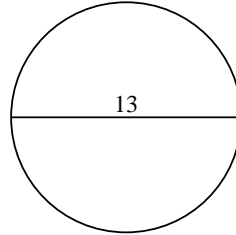
78,54 cm²

2. _____

1)



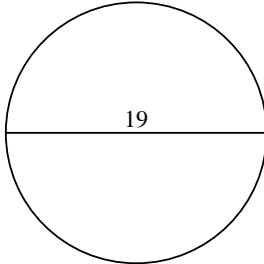
2)



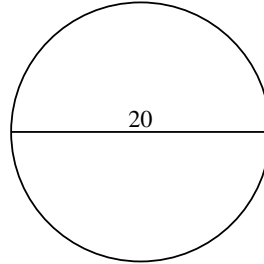
3. _____

4. _____

3)



4)



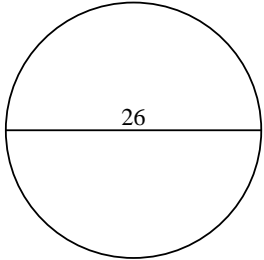
5. _____

6. _____

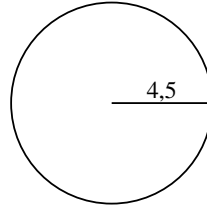
7. _____

8. _____

5)



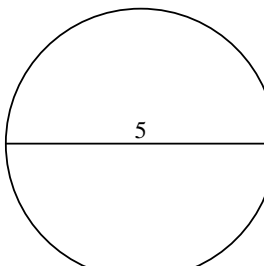
6)



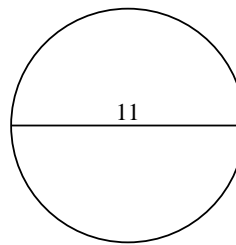
9. _____

10. _____

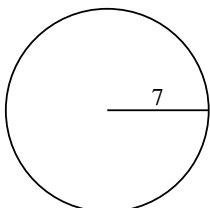
7)



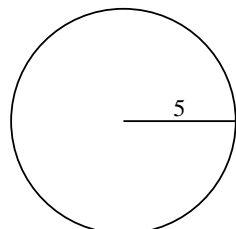
8)



9)

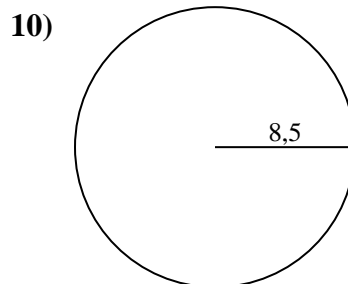
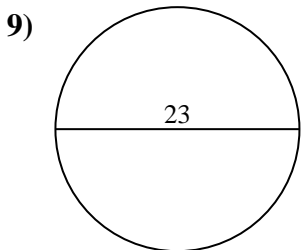
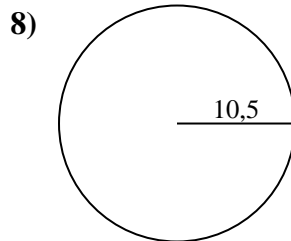
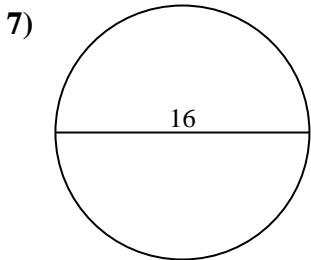
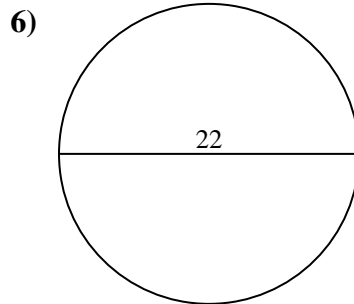
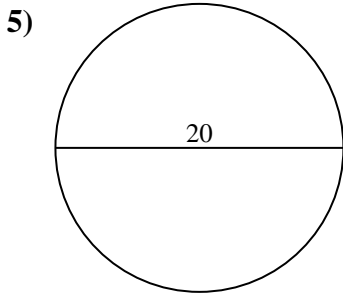
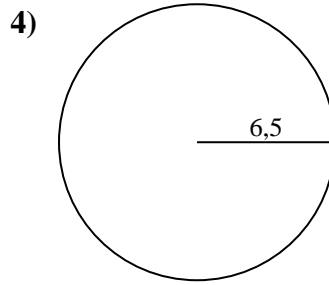
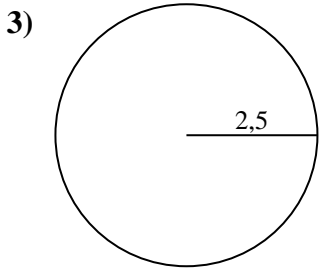
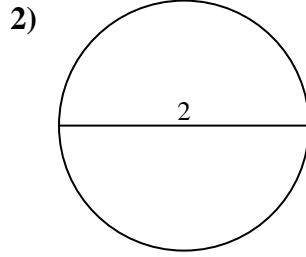
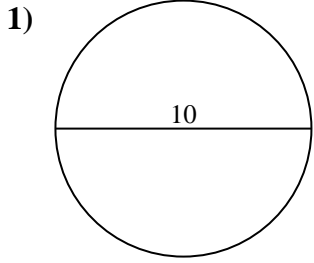


10)





Calcola l'area di ogni cerchio. i cerchi non sono in scala.

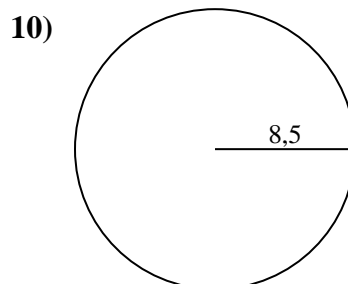
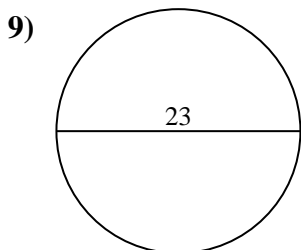
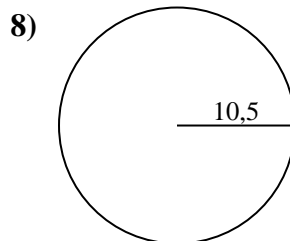
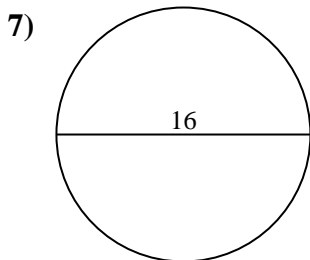
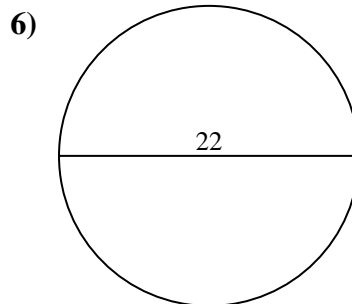
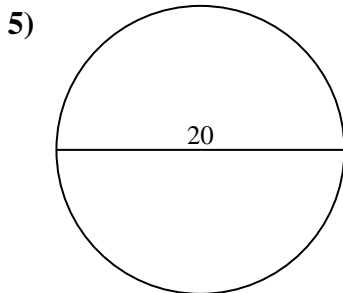
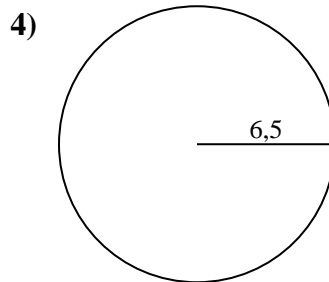
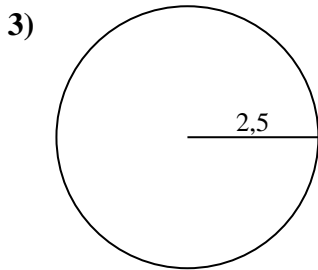
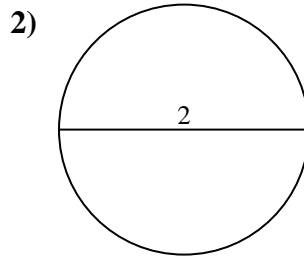
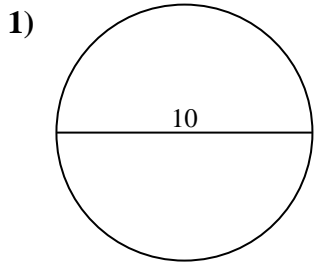


Risposte

- 1. _____
- 2. _____
- 3. _____
- 4. _____
- 5. _____
- 6. _____
- 7. _____
- 8. _____
- 9. _____
- 10. _____



Calcola l'area di ogni cerchio. i cerchi non sono in scala.

**Risposte**

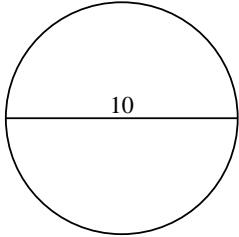
1. 78,54 cm²
2. 3,14 cm²
3. 19,63 cm²
4. 132,73 cm²
5. 314,16 cm²
6. 380,13 cm²
7. 201,06 cm²
8. 346,36 cm²
9. 415,48 cm²
10. 226,98 cm²



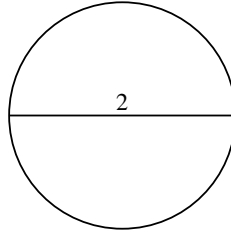
Calcola l'area di ogni cerchio. i cerchi non sono in scala.

415,48 cm²132,73 cm²19,63 cm²314,16 cm²226,98 cm²78,54 cm²3,14 cm²346,36 cm²380,13 cm²201,06 cm²

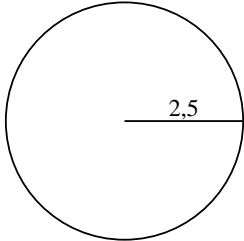
1)



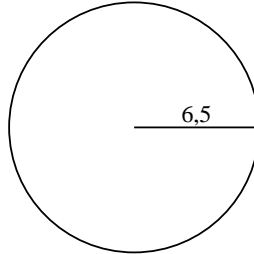
2)



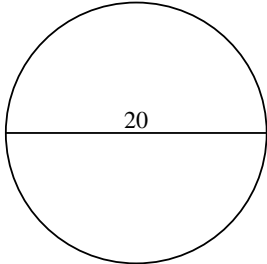
3)



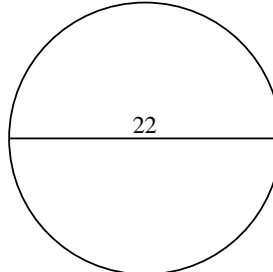
4)



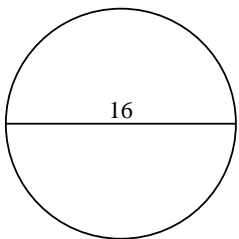
5)



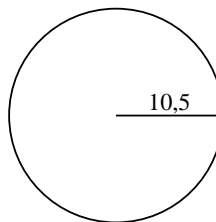
6)



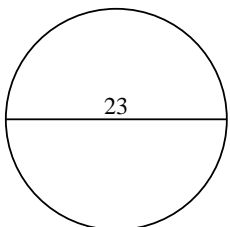
7)



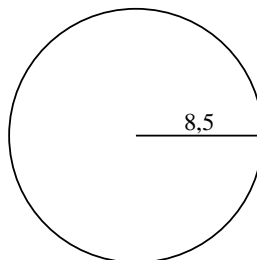
8)



9)



10)

**Risposte**

1. _____

2. _____

3. _____

4. _____

5. _____

6. _____

7. _____

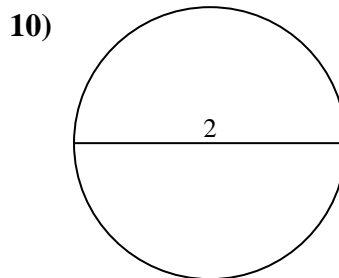
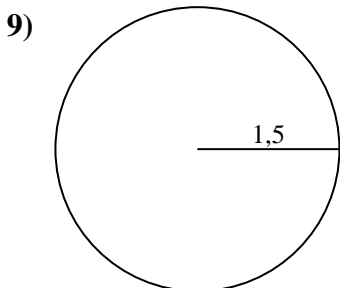
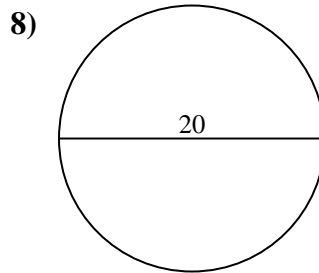
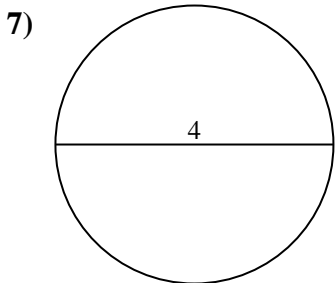
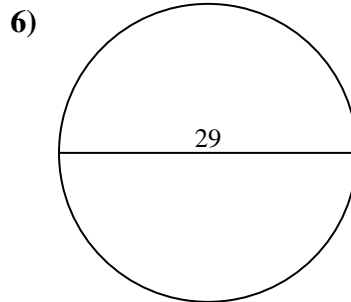
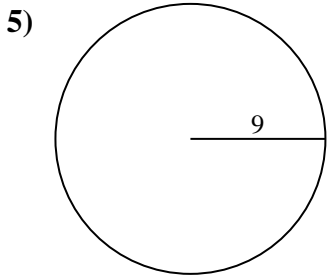
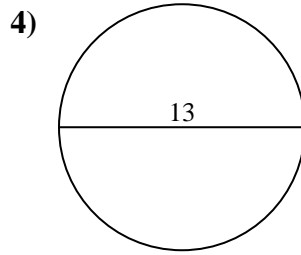
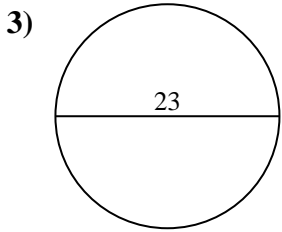
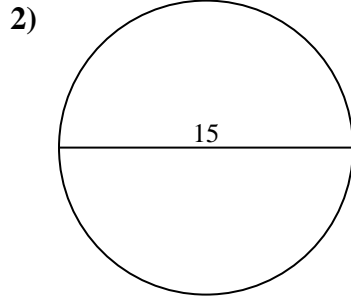
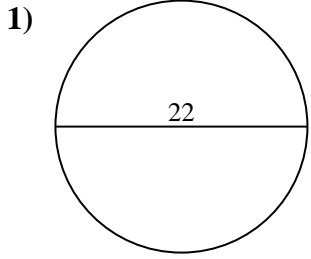
8. _____

9. _____

10. _____



Calcola l'area di ogni cerchio. i cerchi non sono in scala.

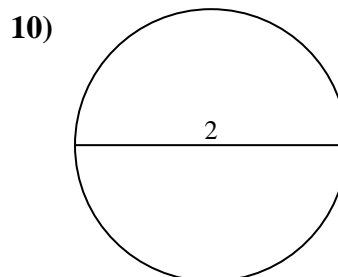
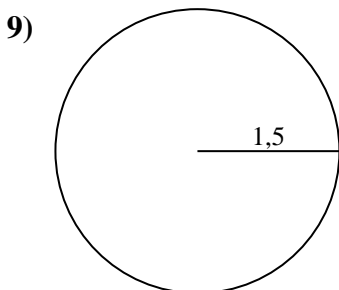
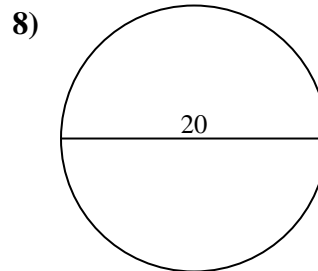
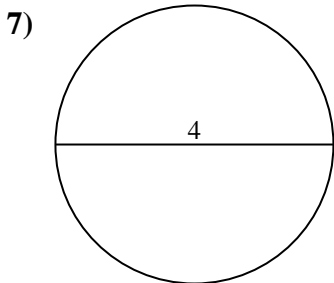
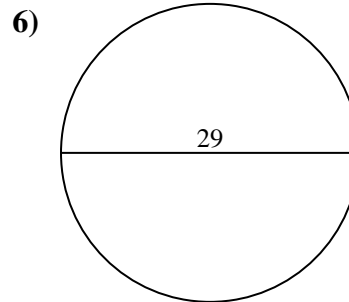
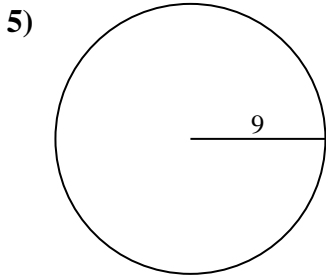
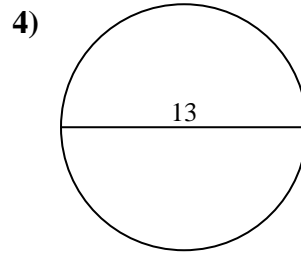
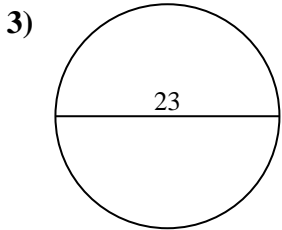
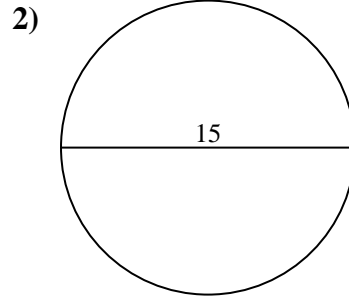
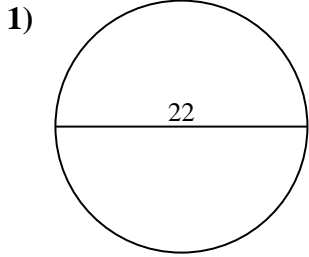


Risposte

- 1. _____
- 2. _____
- 3. _____
- 4. _____
- 5. _____
- 6. _____
- 7. _____
- 8. _____
- 9. _____
- 10. _____



Calcola l'area di ogni cerchio. i cerchi non sono in scala.

**Risposte**

1. **380,13 cm²**
2. **176,71 cm²**
3. **415,48 cm²**
4. **132,73 cm²**
5. **254,47 cm²**
6. **660,52 cm²**
7. **12,57 cm²**
8. **314,16 cm²**
9. **7,07 cm²**
10. **3,14 cm²**



Calcola l'area di ogni cerchio. i cerchi non sono in scala.

Risposte

176,71 cm²

660,52 cm²

380,13 cm²

7,07 cm²

415,48 cm²

314,16 cm²

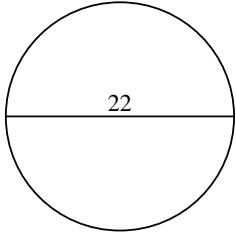
132,73 cm²

254,47 cm²

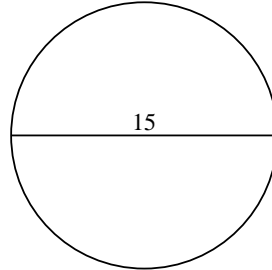
12,57 cm²

3,14 cm²

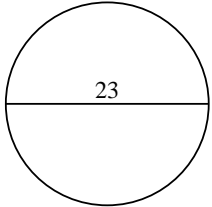
1)



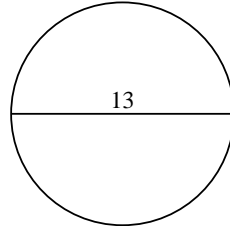
2)



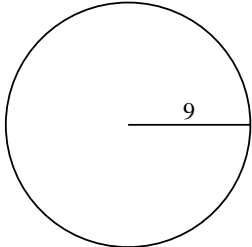
3)



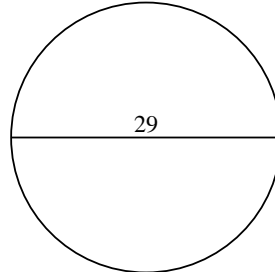
4)



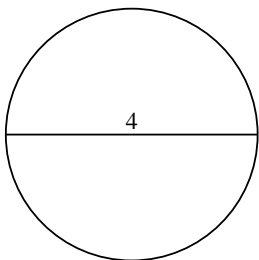
5)



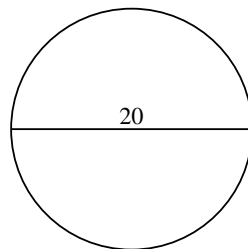
6)



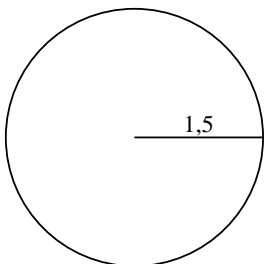
7)



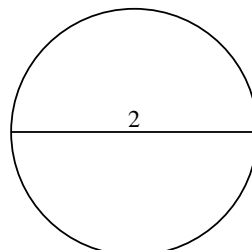
8)



9)



10)



1. _____

2. _____

3. _____

4. _____

5. _____

6. _____

7. _____

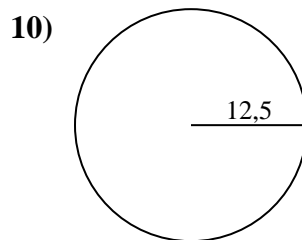
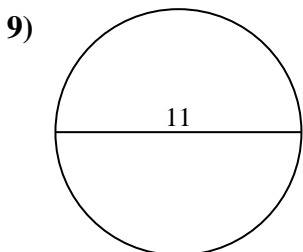
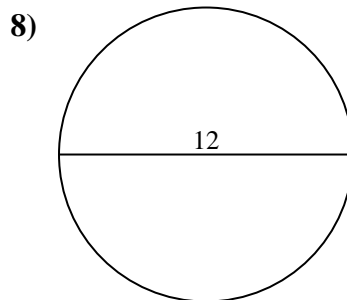
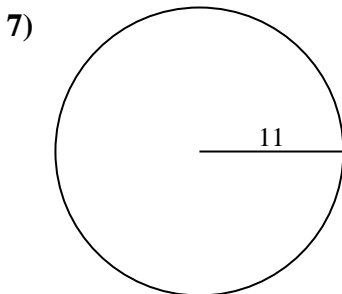
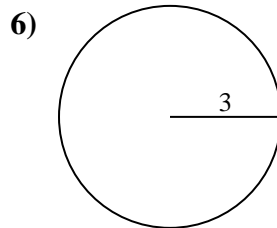
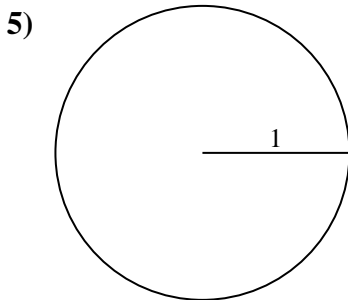
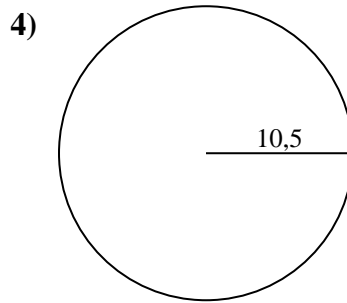
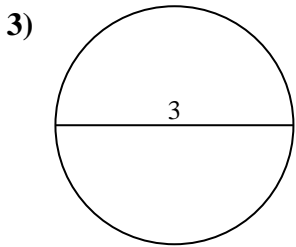
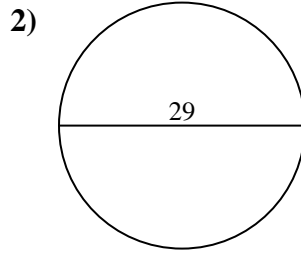
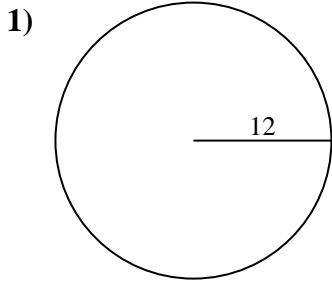
8. _____

9. _____

10. _____



Calcola l'area di ogni cerchio. i cerchi non sono in scala.

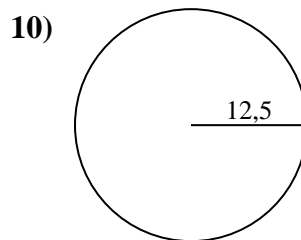
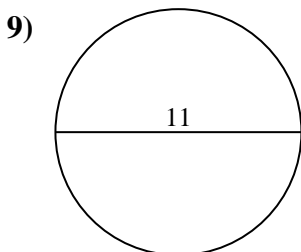
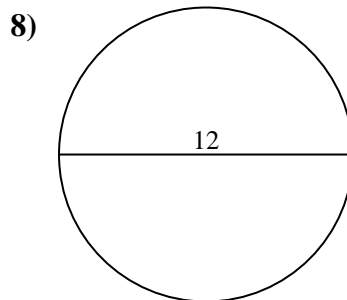
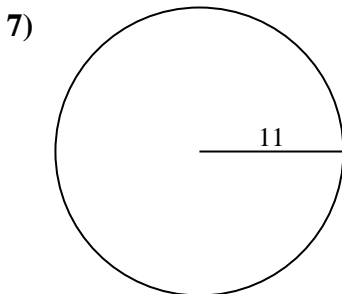
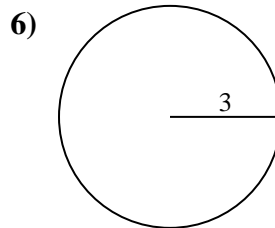
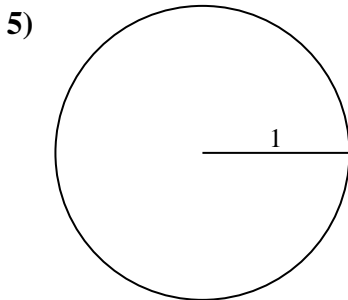
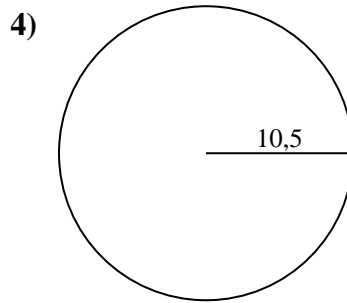
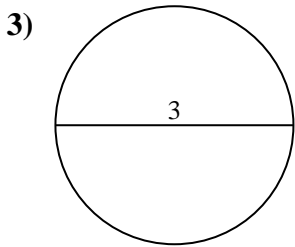
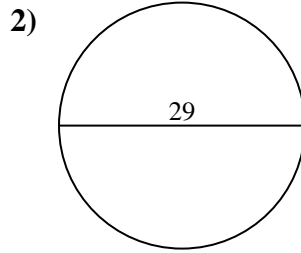
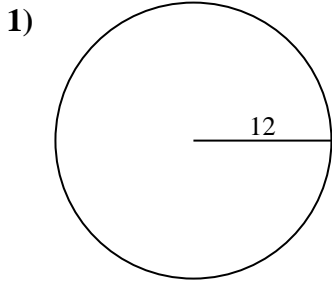


Risposte

- 1. _____
- 2. _____
- 3. _____
- 4. _____
- 5. _____
- 6. _____
- 7. _____
- 8. _____
- 9. _____
- 10. _____



Calcola l'area di ogni cerchio. i cerchi non sono in scala.

**Risposte**

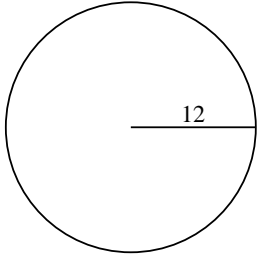
1. **452,39 cm²**
2. **660,52 cm²**
3. **7,07 cm²**
4. **346,36 cm²**
5. **3,14 cm²**
6. **28,27 cm²**
7. **380,13 cm²**
8. **113,1 cm²**
9. **95,03 cm²**
10. **490,87 cm²**



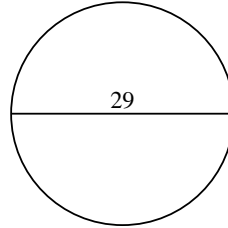
Calcola l'area di ogni cerchio. i cerchi non sono in scala.

452,39 cm²490,87 cm²7,07 cm²95,03 cm²380,13 cm²3,14 cm²28,27 cm²660,52 cm²346,36 cm²113,1 cm²

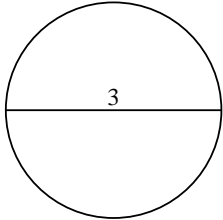
1)



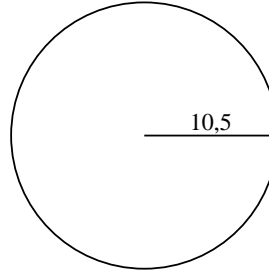
2)



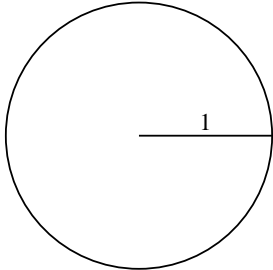
3)



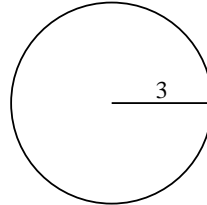
4)



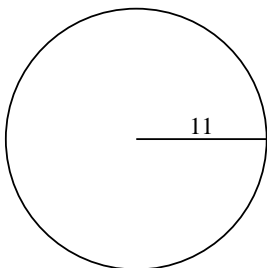
5)



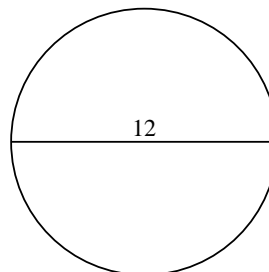
6)



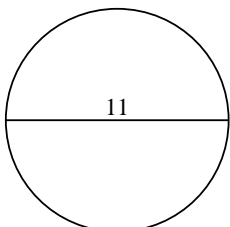
7)



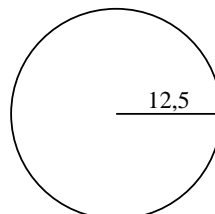
8)



9)



10)

**Risposte**

1. _____

2. _____

3. _____

4. _____

5. _____

6. _____

7. _____

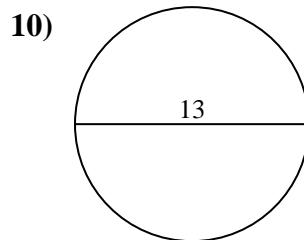
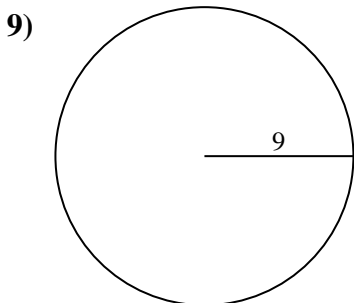
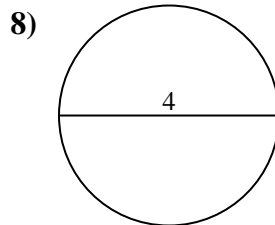
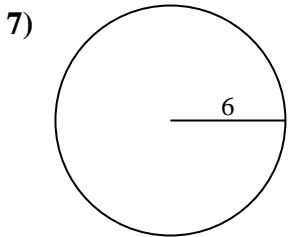
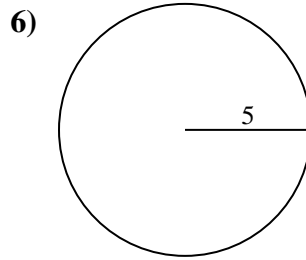
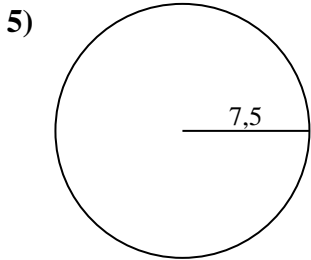
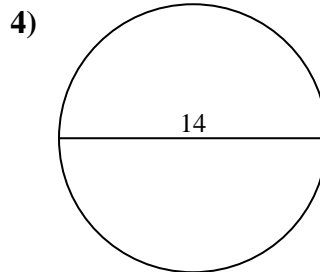
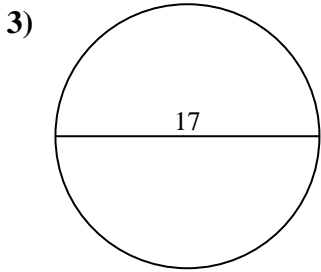
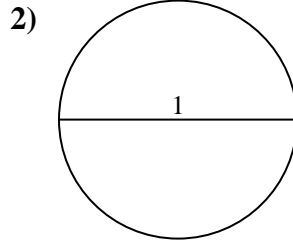
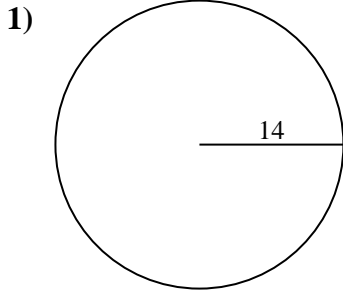
8. _____

9. _____

10. _____



Calcola l'area di ogni cerchio. i cerchi non sono in scala.

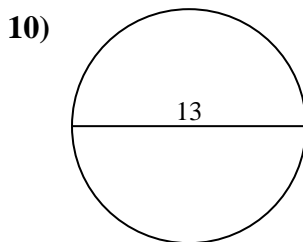
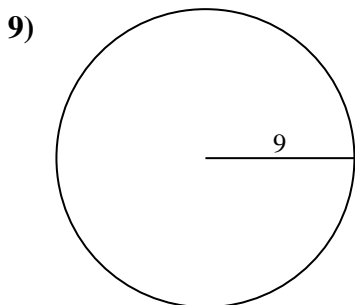
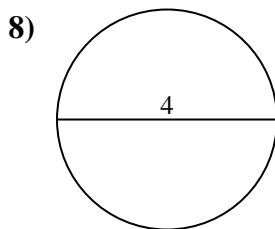
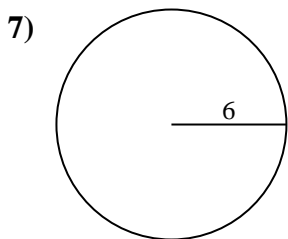
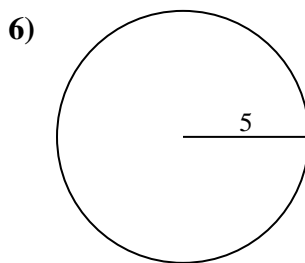
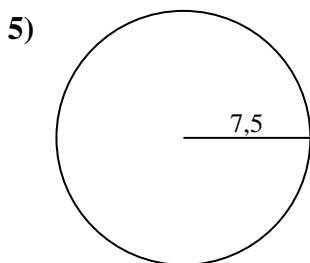
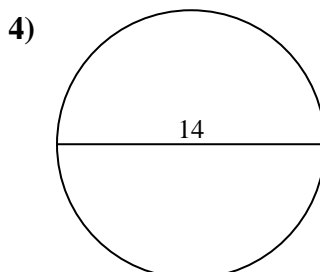
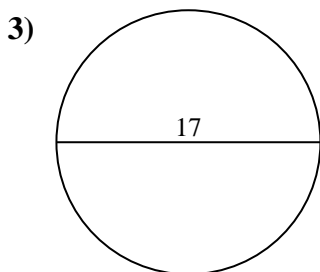
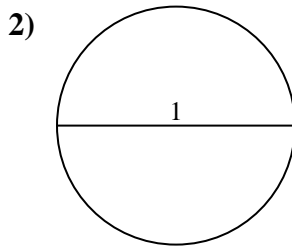
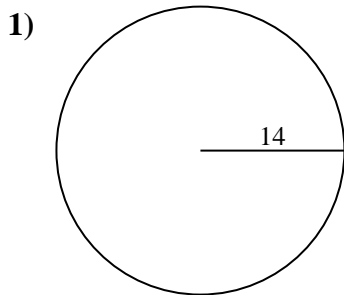


Risposte

- 1. _____
- 2. _____
- 3. _____
- 4. _____
- 5. _____
- 6. _____
- 7. _____
- 8. _____
- 9. _____
- 10. _____



Calcola l'area di ogni cerchio. i cerchi non sono in scala.

**Risposte**

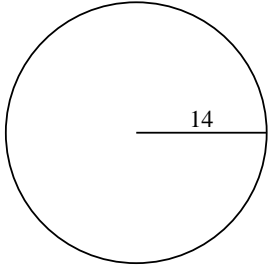
1. **615,75 cm²**
2. **0,79 cm²**
3. **226,98 cm²**
4. **153,94 cm²**
5. **176,71 cm²**
6. **78,54 cm²**
7. **113,1 cm²**
8. **12,57 cm²**
9. **254,47 cm²**
10. **132,73 cm²**



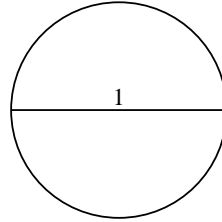
Calcola l'area di ogni cerchio. i cerchi non sono in scala.

153,94 cm²78,54 cm²0,79 cm²254,47 cm²113,1 cm²132,73 cm²226,98 cm²12,57 cm²176,71 cm²615,75 cm²

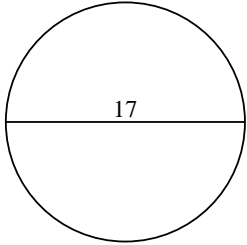
1)



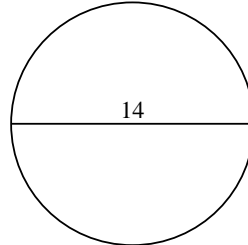
2)



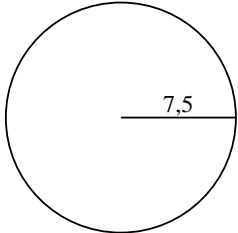
3)



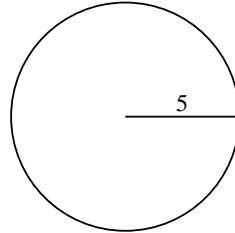
4)



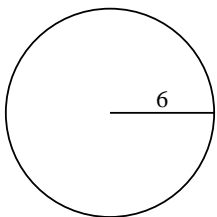
5)



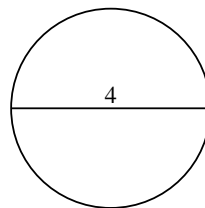
6)



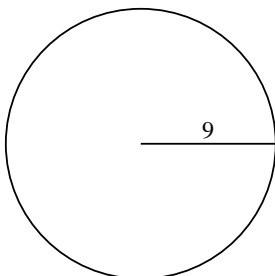
7)



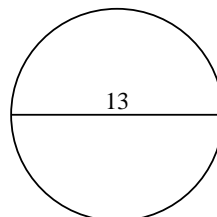
8)



9)



10)

**Risposte**

1. _____

2. _____

3. _____

4. _____

5. _____

6. _____

7. _____

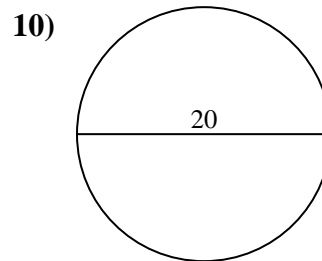
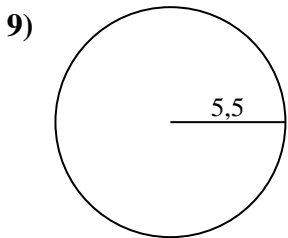
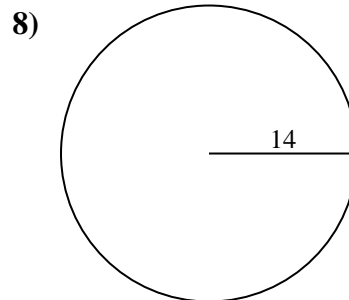
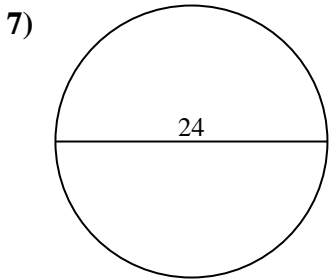
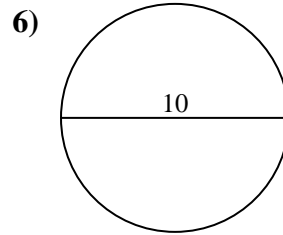
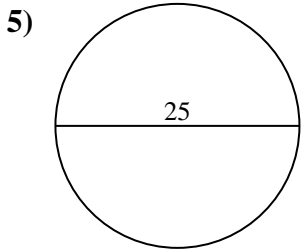
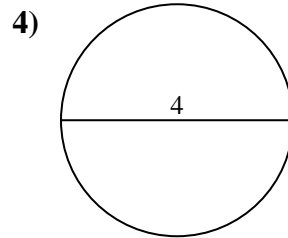
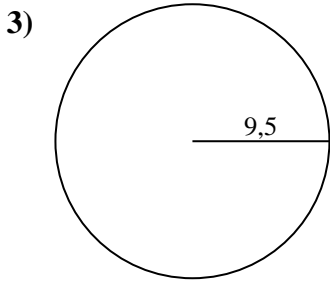
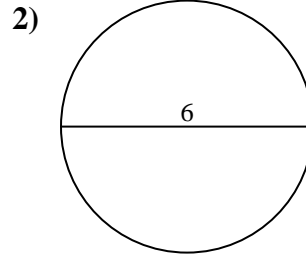
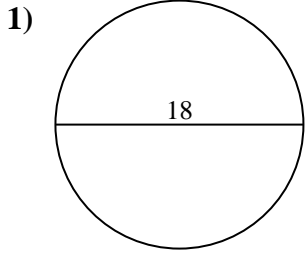
8. _____

9. _____

10. _____



Calcola l'area di ogni cerchio. i cerchi non sono in scala.

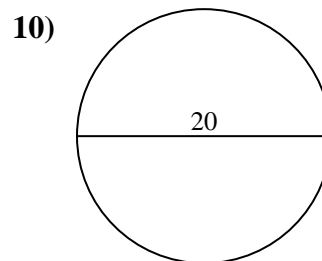
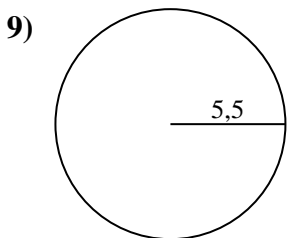
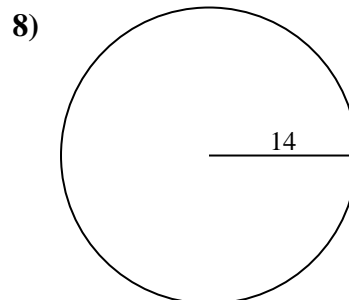
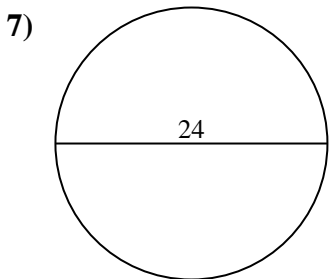
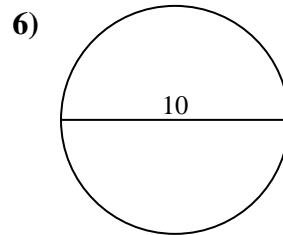
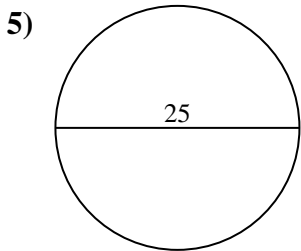
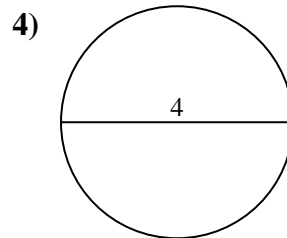
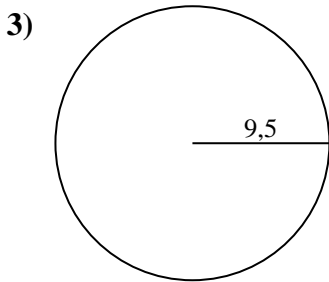
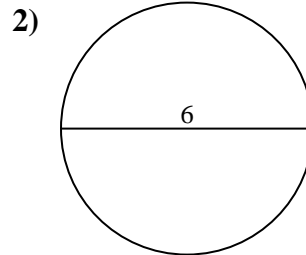
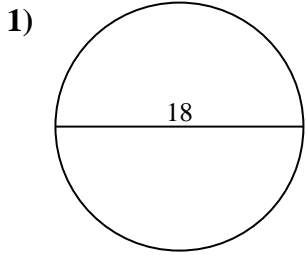


Risposte

- 1. _____
- 2. _____
- 3. _____
- 4. _____
- 5. _____
- 6. _____
- 7. _____
- 8. _____
- 9. _____
- 10. _____



Calcola l'area di ogni cerchio. i cerchi non sono in scala.

**Risposte**

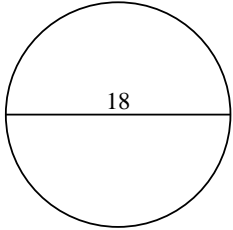
1. **254,47 cm²**
2. **28,27 cm²**
3. **283,53 cm²**
4. **12,57 cm²**
5. **490,87 cm²**
6. **78,54 cm²**
7. **452,39 cm²**
8. **615,75 cm²**
9. **95,03 cm²**
10. **314,16 cm²**



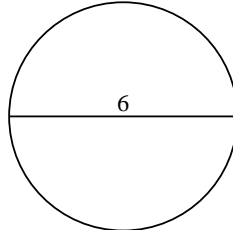
Calcola l'area di ogni cerchio. i cerchi non sono in scala.

 $283,53 \text{ cm}^2$ $490,87 \text{ cm}^2$ $254,47 \text{ cm}^2$ $314,16 \text{ cm}^2$ $95,03 \text{ cm}^2$ $28,27 \text{ cm}^2$ $12,57 \text{ cm}^2$ $452,39 \text{ cm}^2$ $615,75 \text{ cm}^2$ $78,54 \text{ cm}^2$

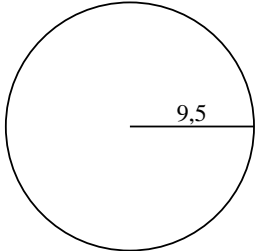
1)



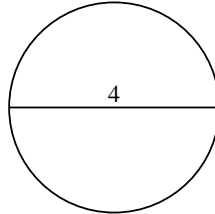
2)



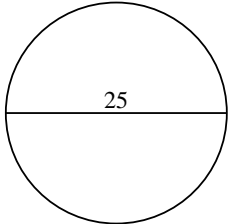
3)



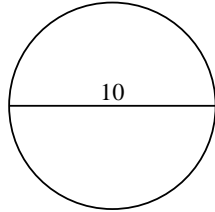
4)



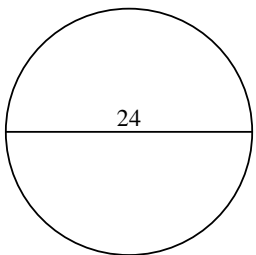
5)



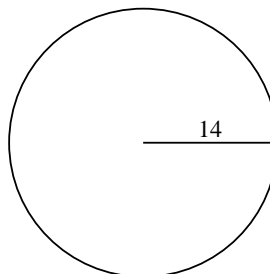
6)



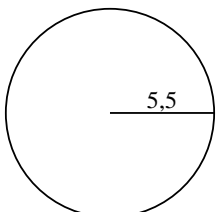
7)



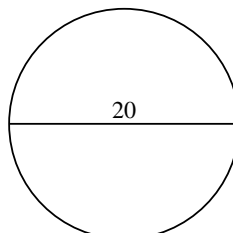
8)



9)



10)

**Risposte**

1. _____

2. _____

3. _____

4. _____

5. _____

6. _____

7. _____

8. _____

9. _____

10. _____