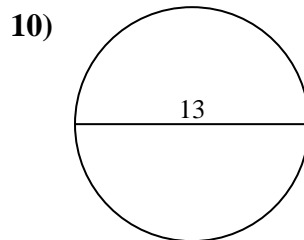
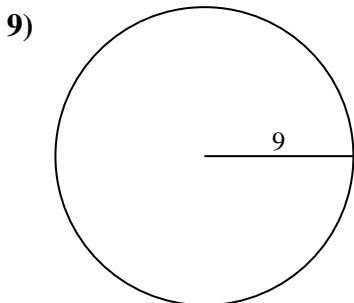
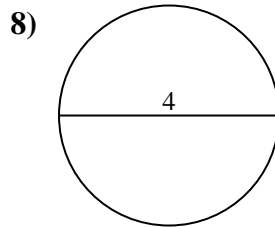
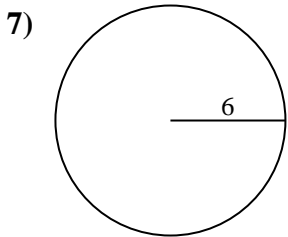
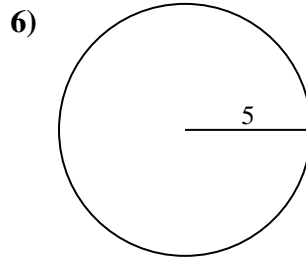
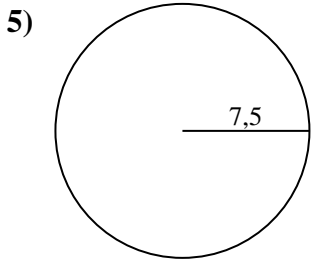
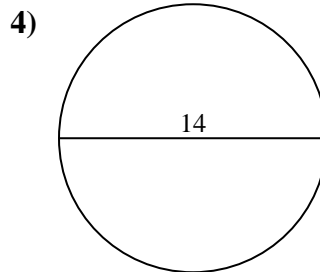
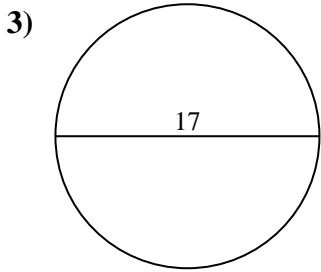
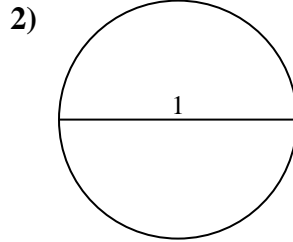
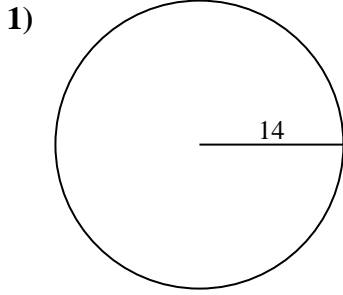




Calcola l'area di ogni cerchio. i cerchi non sono in scala.

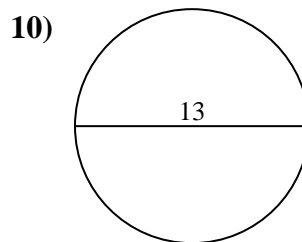
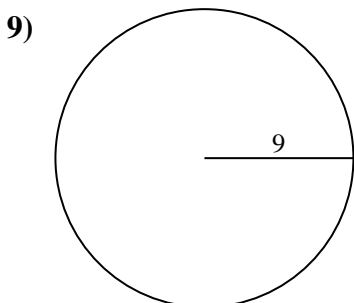
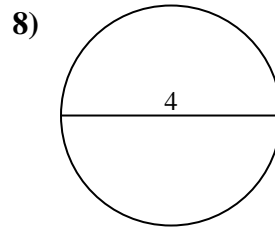
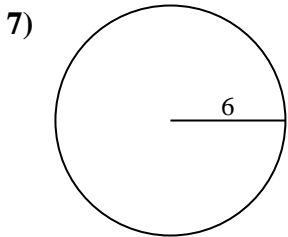
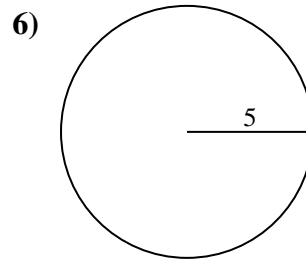
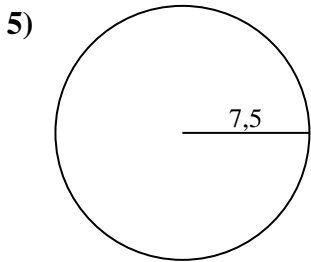
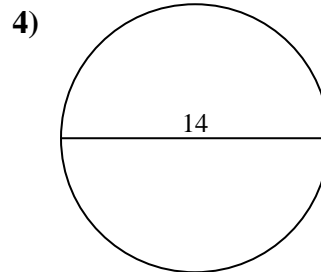
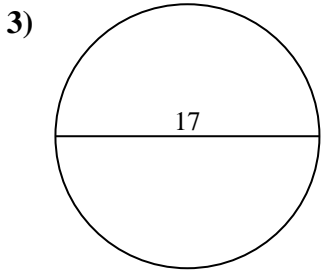
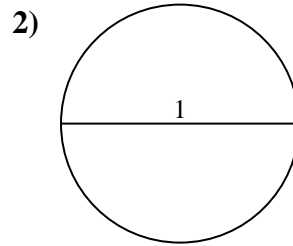
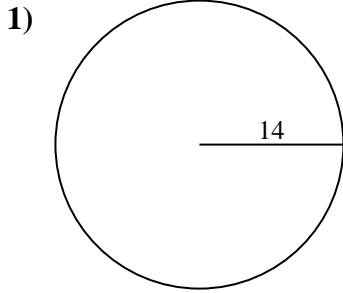


Risposte

- 1. _____
- 2. _____
- 3. _____
- 4. _____
- 5. _____
- 6. _____
- 7. _____
- 8. _____
- 9. _____
- 10. _____



Calcola l'area di ogni cerchio. i cerchi non sono in scala.

**Risposte**

1. **615,75 cm²**
2. **0,79 cm²**
3. **226,98 cm²**
4. **153,94 cm²**
5. **176,71 cm²**
6. **78,54 cm²**
7. **113,1 cm²**
8. **12,57 cm²**
9. **254,47 cm²**
10. **132,73 cm²**

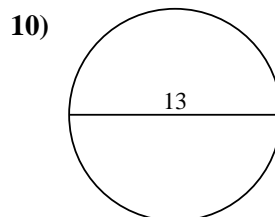
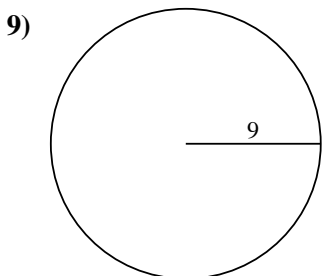
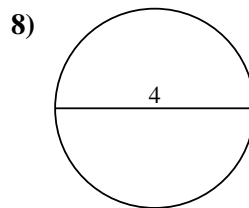
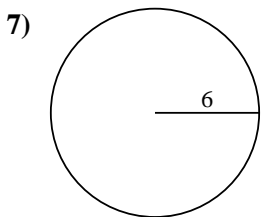
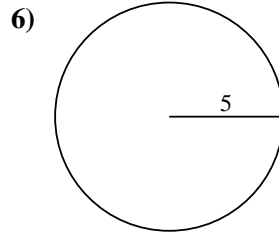
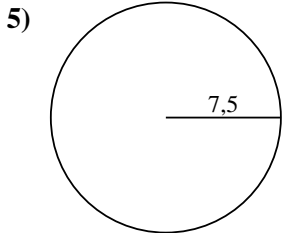
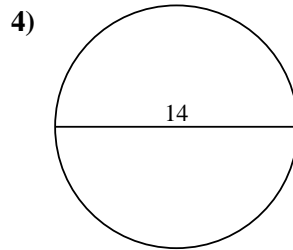
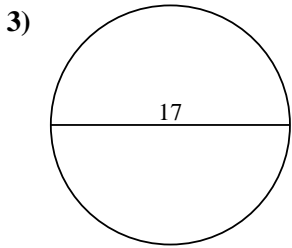
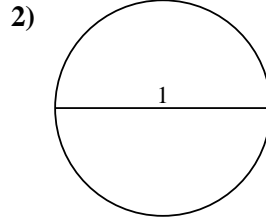
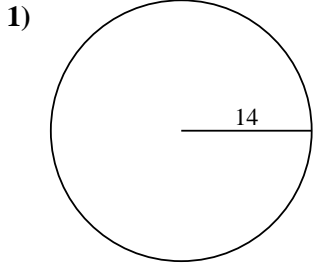


Calcola l'area di ogni cerchio. i cerchi non sono in scala.

Risposte

153,94 cm² 78,54 cm² 0,79 cm² 254,47 cm² 113,1 cm²

132,73 cm² 226,98 cm² 12,57 cm² 176,71 cm² 615,75 cm²



- 1. _____
- 2. _____
- 3. _____
- 4. _____
- 5. _____
- 6. _____
- 7. _____
- 8. _____
- 9. _____
- 10. _____