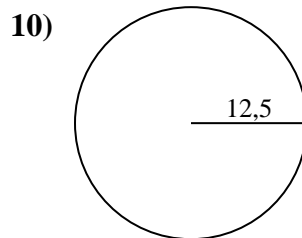
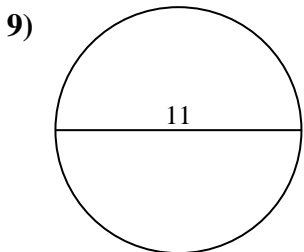
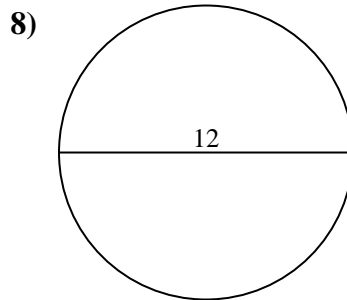
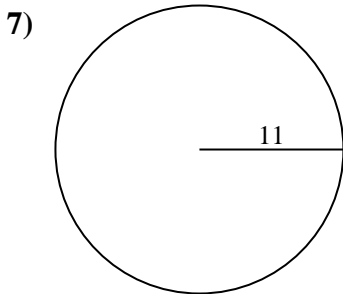
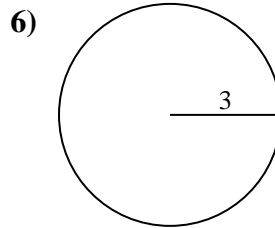
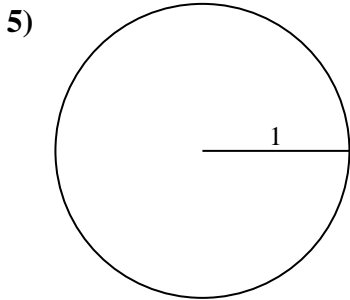
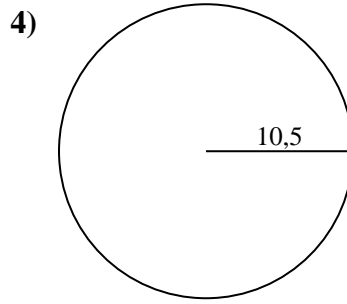
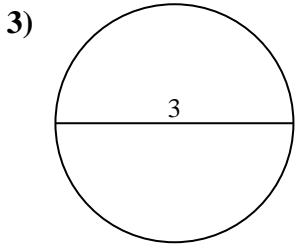
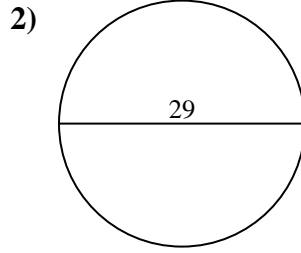
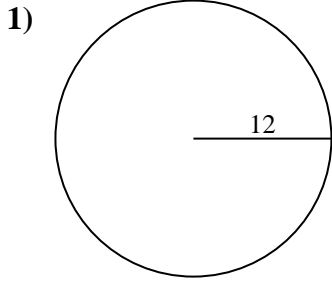




Calcola l'area di ogni cerchio. i cerchi non sono in scala.

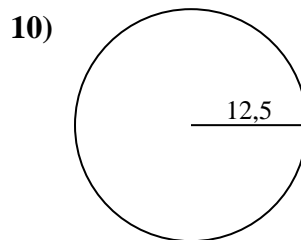
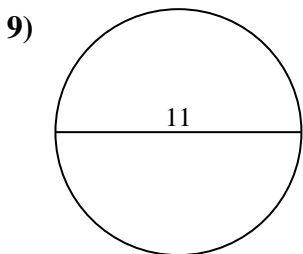
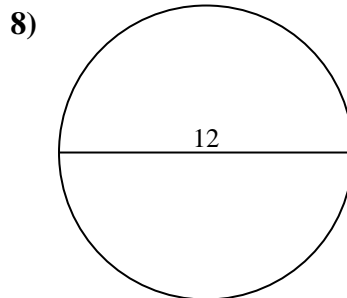
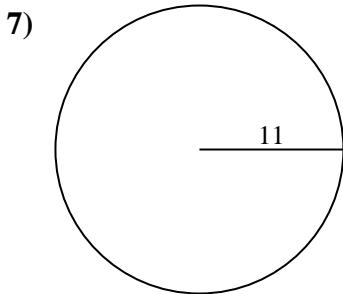
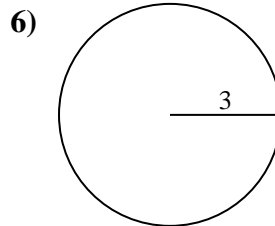
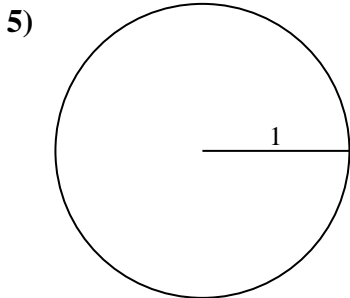
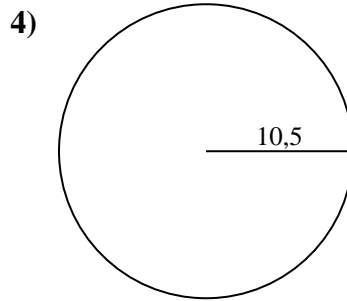
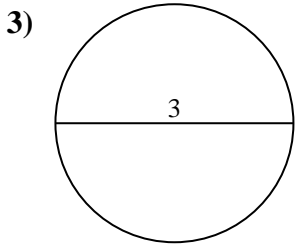
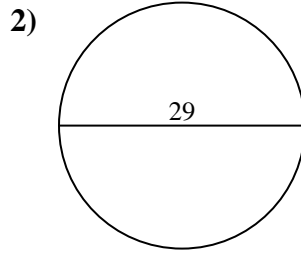
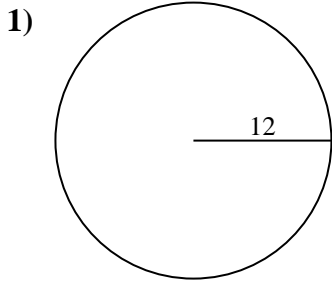


Risposte

- 1. _____
- 2. _____
- 3. _____
- 4. _____
- 5. _____
- 6. _____
- 7. _____
- 8. _____
- 9. _____
- 10. _____



Calcola l'area di ogni cerchio. i cerchi non sono in scala.

**Risposte**

1. **452,39 cm²**
2. **660,52 cm²**
3. **7,07 cm²**
4. **346,36 cm²**
5. **3,14 cm²**
6. **28,27 cm²**
7. **380,13 cm²**
8. **113,1 cm²**
9. **95,03 cm²**
10. **490,87 cm²**



Calcola l'area di ogni cerchio. i cerchi non sono in scala.

Risposte

452,39 cm²

490,87 cm²

7,07 cm²

95,03 cm²

380,13 cm²

3,14 cm²

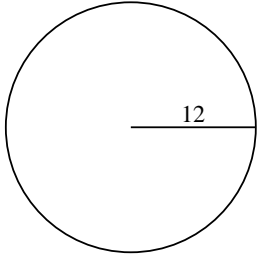
28,27 cm²

660,52 cm²

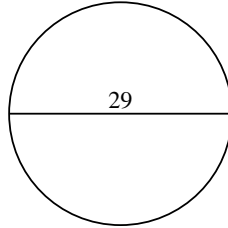
346,36 cm²

113,1 cm²

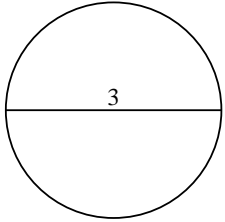
1)



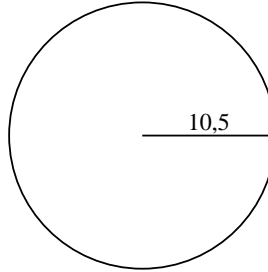
2)



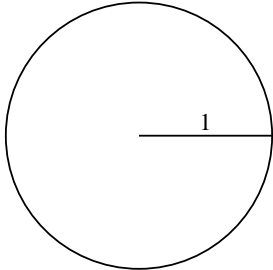
3)



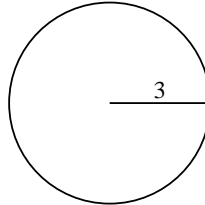
4)



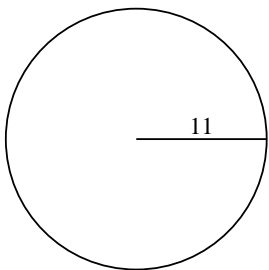
5)



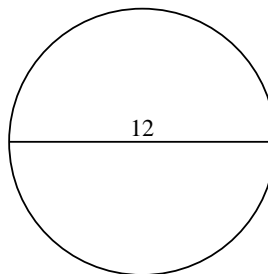
6)



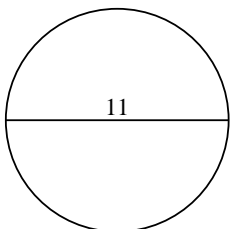
7)



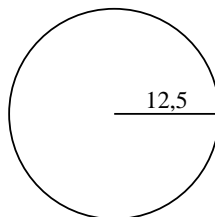
8)



9)



10)



1. _____

2. _____

3. _____

4. _____

5. _____

6. _____

7. _____

8. _____

9. _____

10. _____