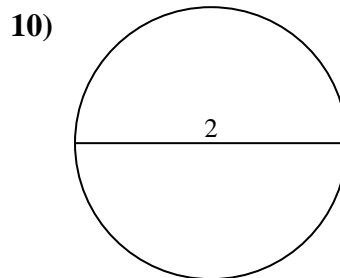
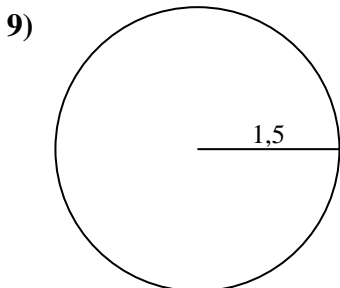
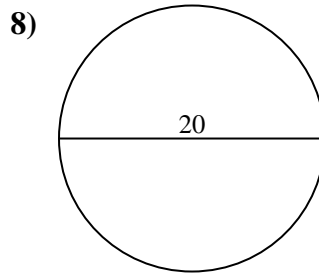
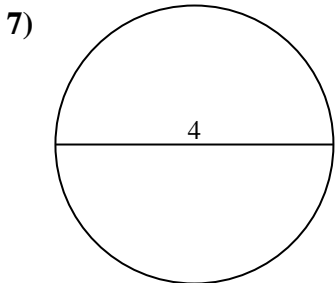
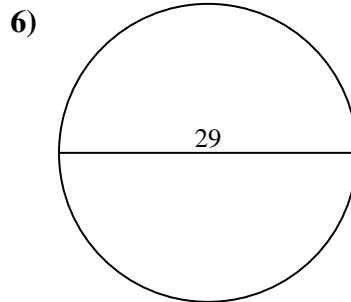
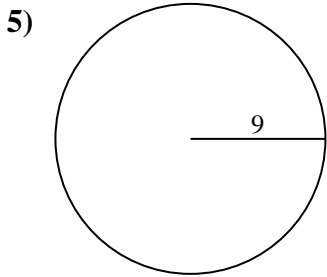
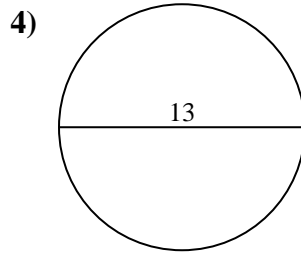
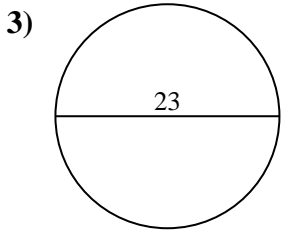
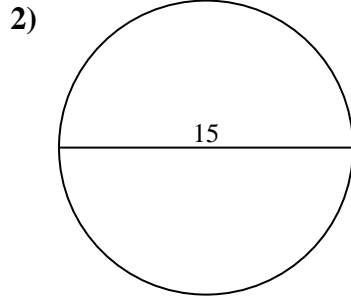
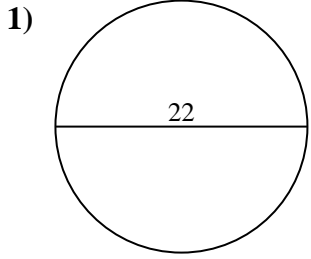




Calcola l'area di ogni cerchio. i cerchi non sono in scala.

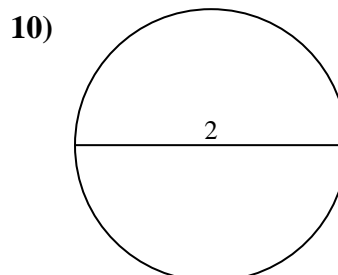
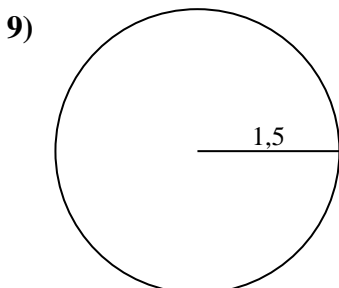
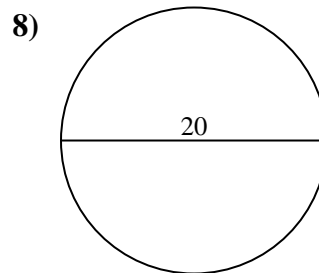
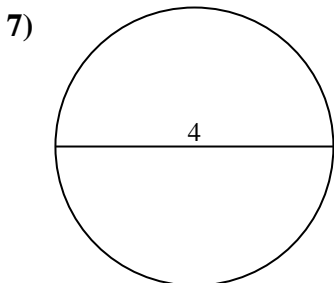
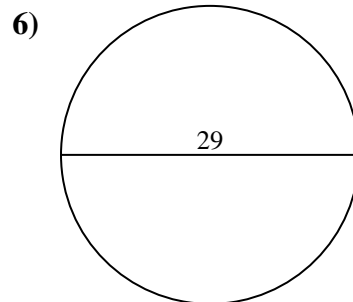
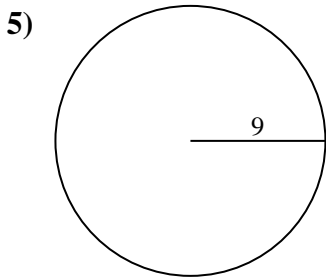
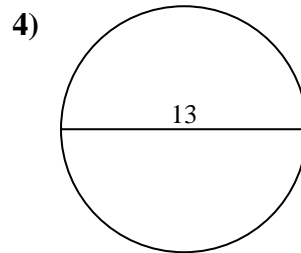
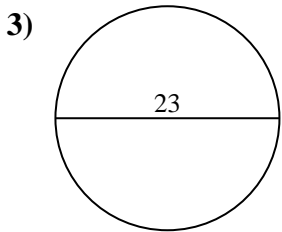
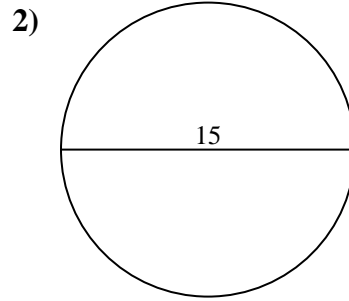
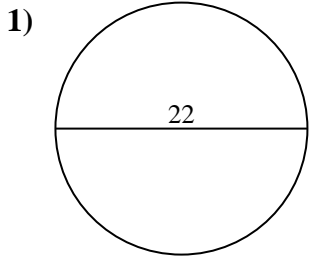


Risposte

- 1. _____
- 2. _____
- 3. _____
- 4. _____
- 5. _____
- 6. _____
- 7. _____
- 8. _____
- 9. _____
- 10. _____



Calcola l'area di ogni cerchio. i cerchi non sono in scala.

**Risposte**

1. **380,13 cm²**
2. **176,71 cm²**
3. **415,48 cm²**
4. **132,73 cm²**
5. **254,47 cm²**
6. **660,52 cm²**
7. **12,57 cm²**
8. **314,16 cm²**
9. **7,07 cm²**
10. **3,14 cm²**



Calcola l'area di ogni cerchio. i cerchi non sono in scala.

Risposte

176,71 cm² 660,52 cm² 380,13 cm² 7,07 cm² 415,48 cm²

314,16 cm² 132,73 cm² 254,47 cm² 12,57 cm² 3,14 cm²

1. _____

2. _____

3. _____

4. _____

5. _____

6. _____

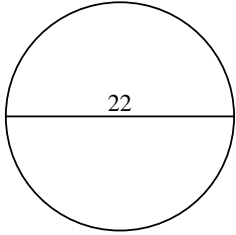
7. _____

8. _____

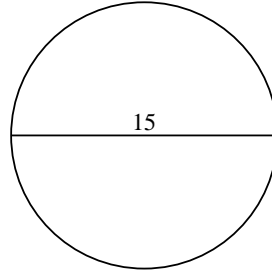
9. _____

10. _____

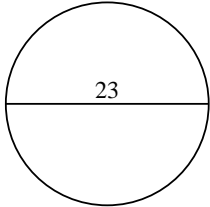
1)



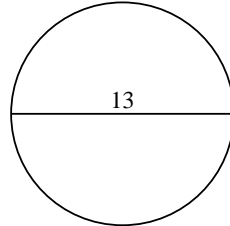
2)



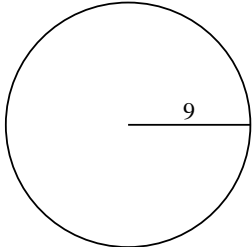
3)



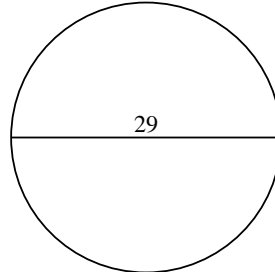
4)



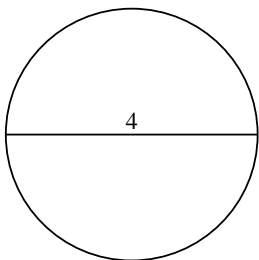
5)



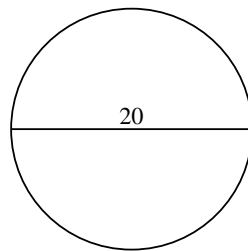
6)



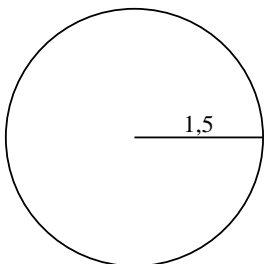
7)



8)



9)



10)

