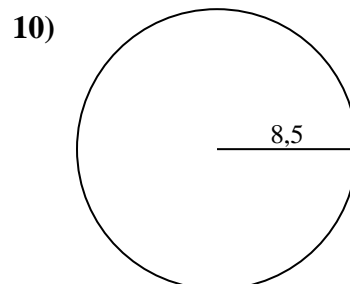
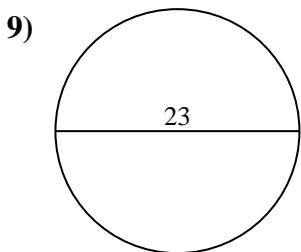
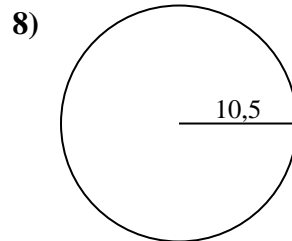
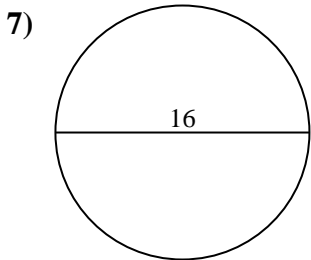
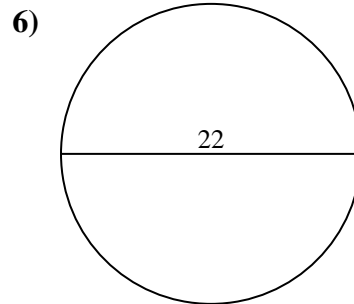
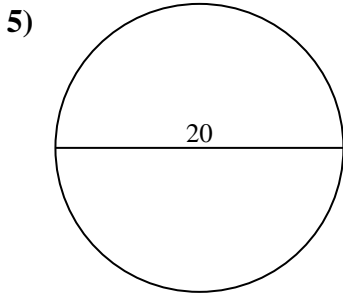
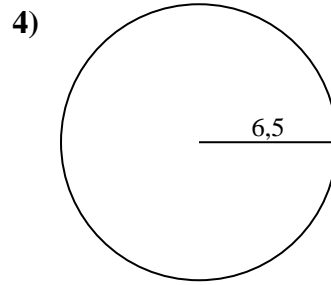
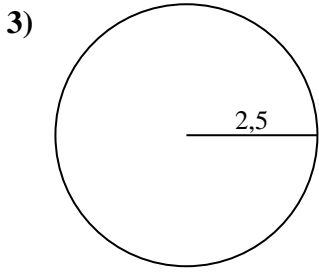
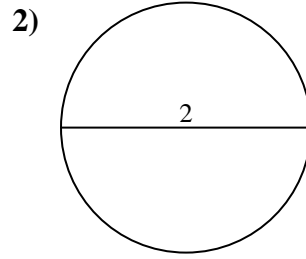
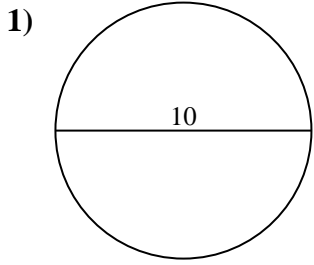




Calcola l'area di ogni cerchio. i cerchi non sono in scala.

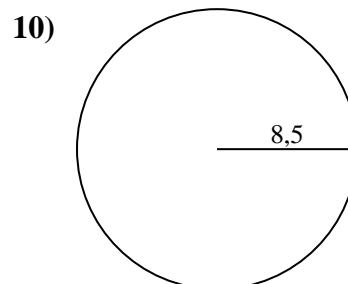
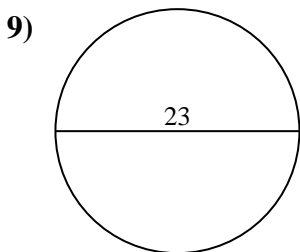
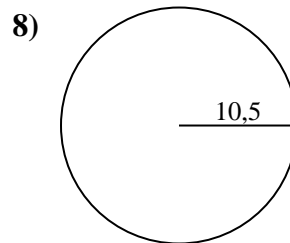
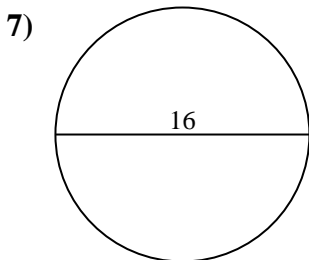
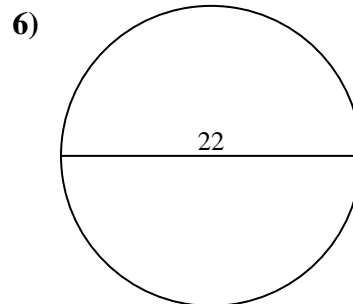
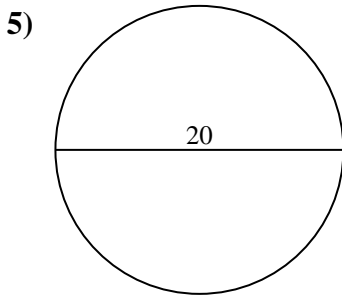
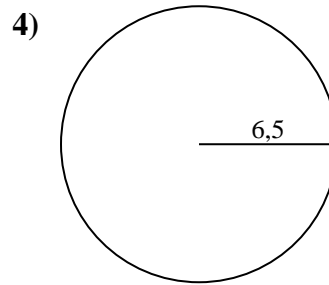
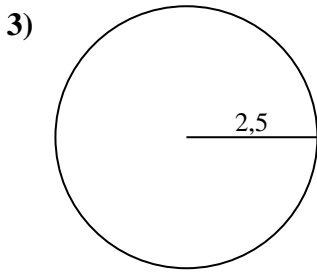
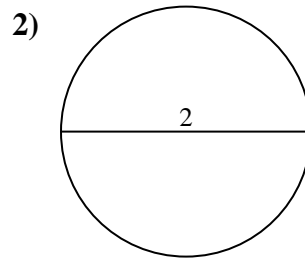
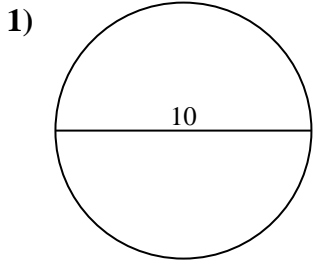


Risposte

- 1. _____
- 2. _____
- 3. _____
- 4. _____
- 5. _____
- 6. _____
- 7. _____
- 8. _____
- 9. _____
- 10. _____



Calcola l'area di ogni cerchio. i cerchi non sono in scala.

**Risposte**

1. 78,54 cm²
2. 3,14 cm²
3. 19,63 cm²
4. 132,73 cm²
5. 314,16 cm²
6. 380,13 cm²
7. 201,06 cm²
8. 346,36 cm²
9. 415,48 cm²
10. 226,98 cm²



Calcola l'area di ogni cerchio. i cerchi non sono in scala.

415,48 cm²

132,73 cm²

19,63 cm²

314,16 cm²

226,98 cm²

78,54 cm²

3,14 cm²

346,36 cm²

380,13 cm²

201,06 cm²

Risposte

1. _____

2. _____

3. _____

4. _____

5. _____

6. _____

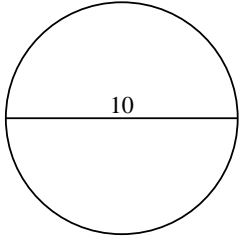
7. _____

8. _____

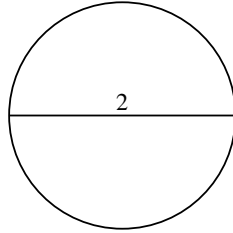
9. _____

10. _____

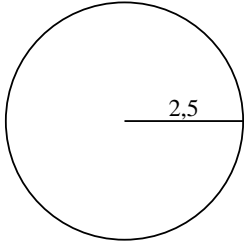
1)



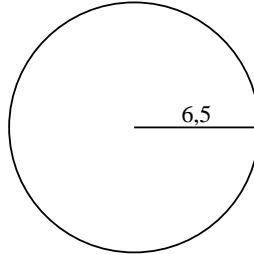
2)



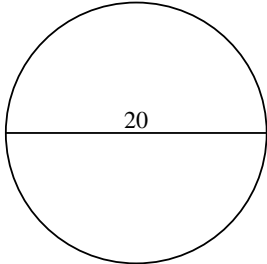
3)



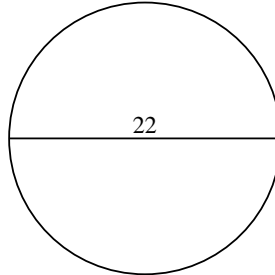
4)



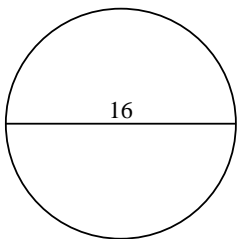
5)



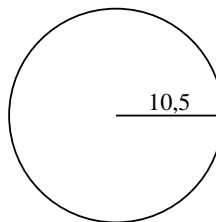
6)



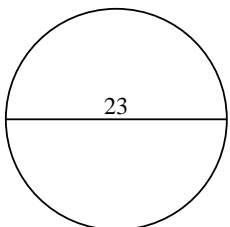
7)



8)



9)



10)

