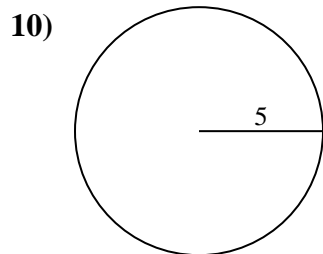
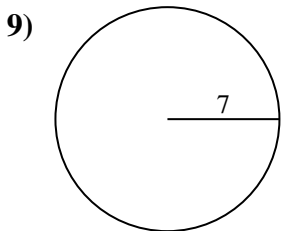
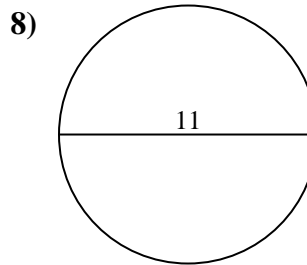
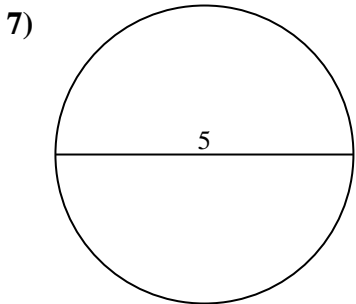
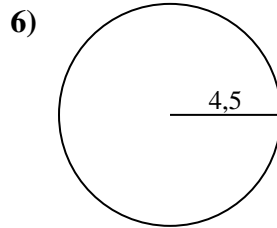
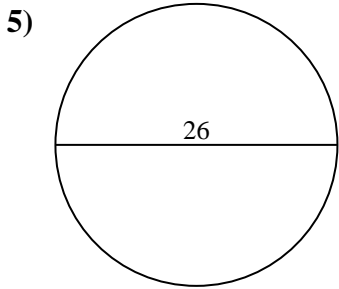
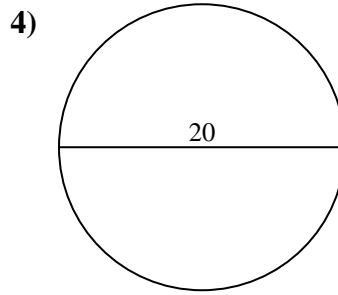
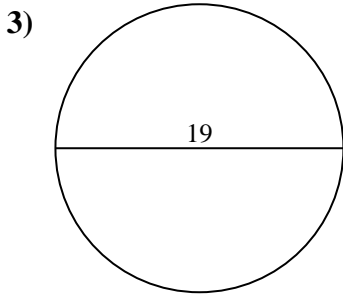
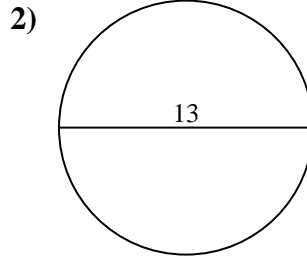
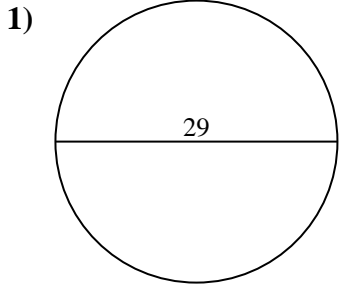




Calcola l'area di ogni cerchio. i cerchi non sono in scala.

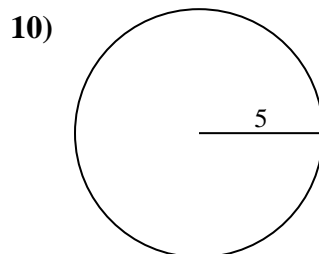
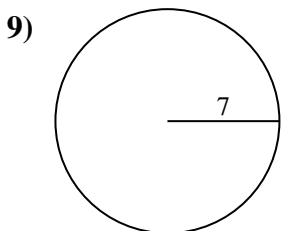
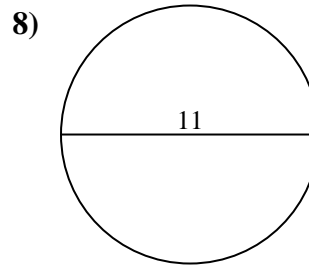
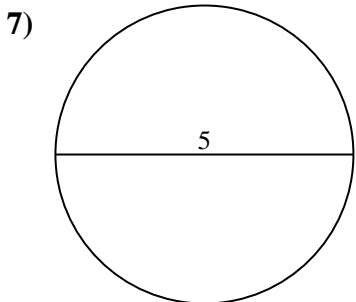
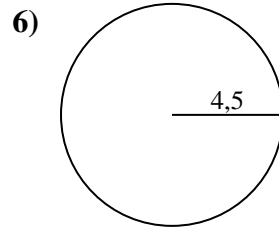
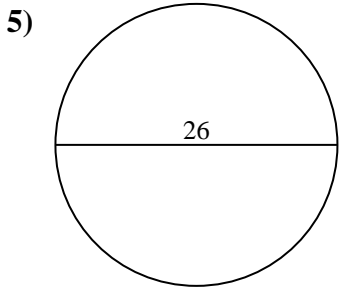
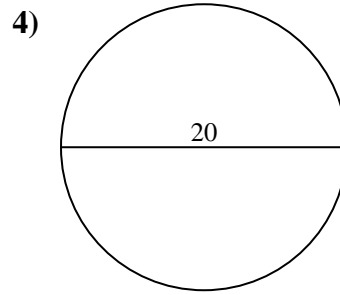
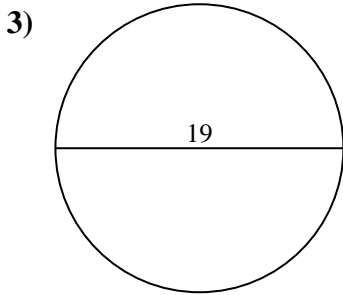
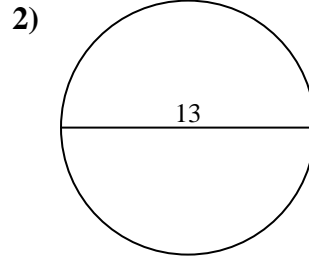
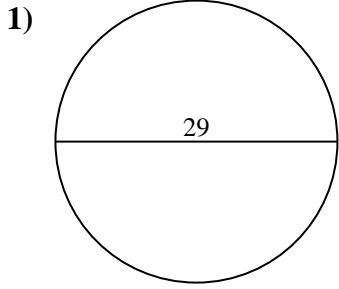


Risposte

- 1. _____
- 2. _____
- 3. _____
- 4. _____
- 5. _____
- 6. _____
- 7. _____
- 8. _____
- 9. _____
- 10. _____



Calcola l'area di ogni cerchio. i cerchi non sono in scala.

**Risposte**

1. **660,52 cm²**
2. **132,73 cm²**
3. **283,53 cm²**
4. **314,16 cm²**
5. **530,93 cm²**
6. **63,62 cm²**
7. **19,63 cm²**
8. **95,03 cm²**
9. **153,94 cm²**
10. **78,54 cm²**



Calcola l'area di ogni cerchio. i cerchi non sono in scala.

Risposte

95,03 cm²

63,62 cm²

314,16 cm²

283,53 cm²

19,63 cm²

1. _____

132,73 cm²

660,52 cm²

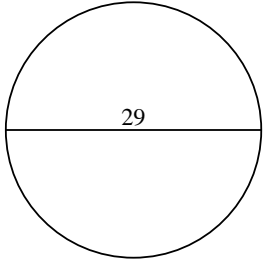
153,94 cm²

530,93 cm²

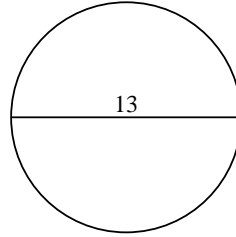
78,54 cm²

2. _____

1)



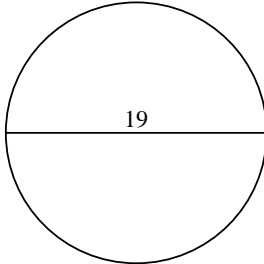
2)



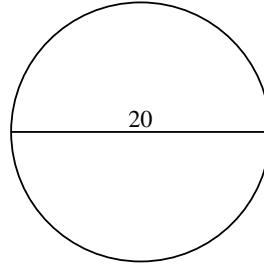
3. _____

4. _____

3)



4)



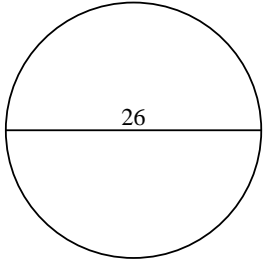
5. _____

6. _____

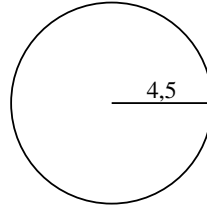
7. _____

8. _____

5)



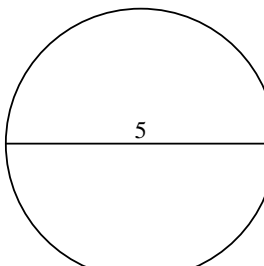
6)



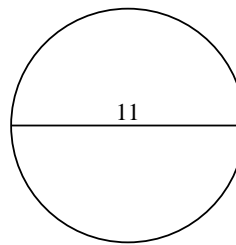
9. _____

10. _____

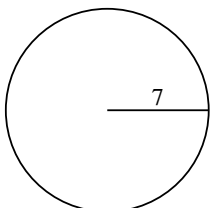
7)



8)



9)



10)

