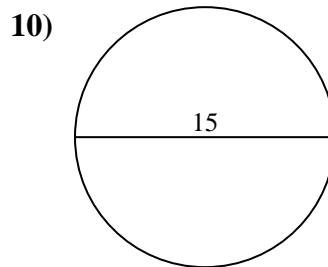
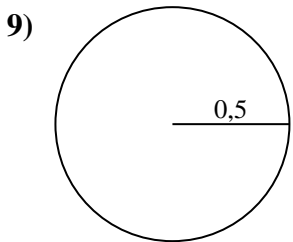
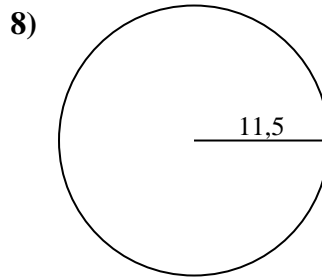
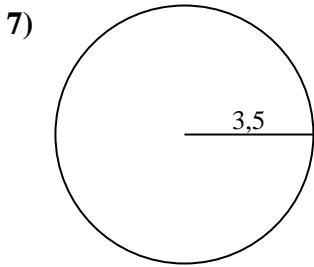
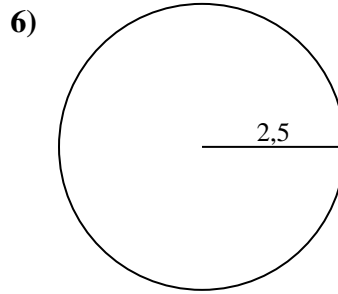
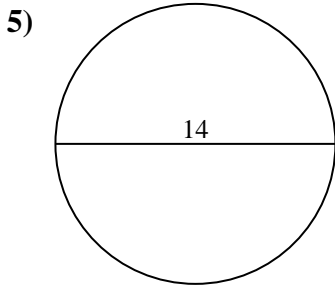
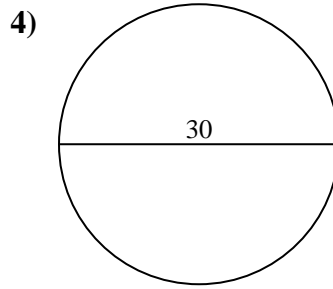
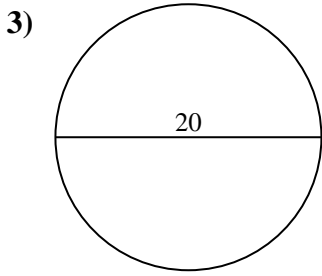
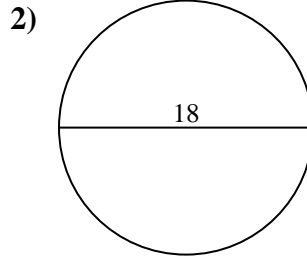
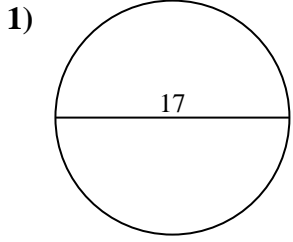




Calcola l'area di ogni cerchio. i cerchi non sono in scala.

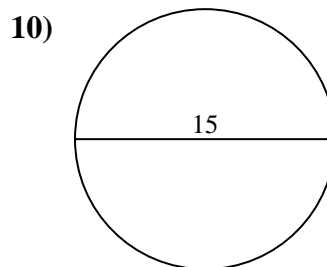
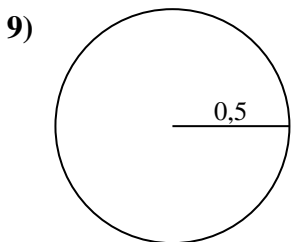
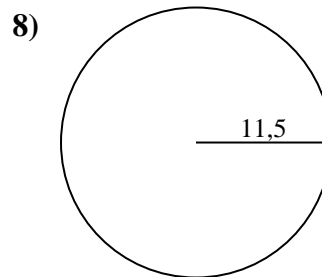
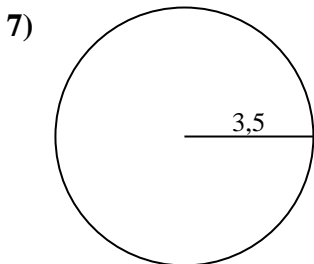
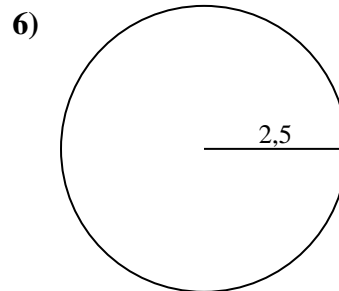
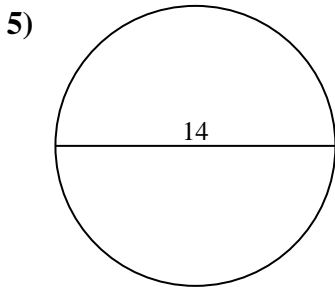
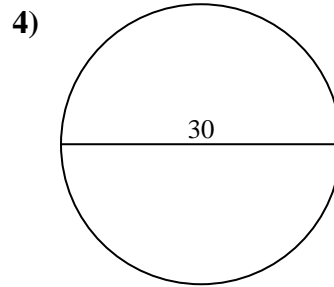
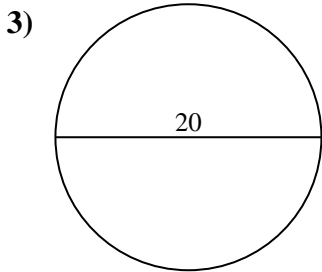
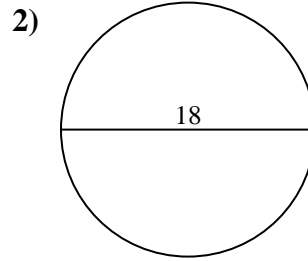
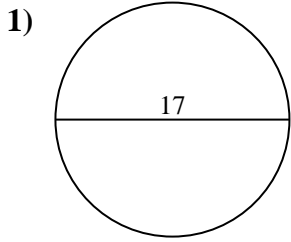


**Risposte**

- 1. \_\_\_\_\_
- 2. \_\_\_\_\_
- 3. \_\_\_\_\_
- 4. \_\_\_\_\_
- 5. \_\_\_\_\_
- 6. \_\_\_\_\_
- 7. \_\_\_\_\_
- 8. \_\_\_\_\_
- 9. \_\_\_\_\_
- 10. \_\_\_\_\_



Calcola l'area di ogni cerchio. i cerchi non sono in scala.

**Risposte**

1. **226,98 cm<sup>2</sup>**
2. **254,47 cm<sup>2</sup>**
3. **314,16 cm<sup>2</sup>**
4. **706,86 cm<sup>2</sup>**
5. **153,94 cm<sup>2</sup>**
6. **19,63 cm<sup>2</sup>**
7. **38,48 cm<sup>2</sup>**
8. **415,48 cm<sup>2</sup>**
9. **0,79 cm<sup>2</sup>**
10. **176,71 cm<sup>2</sup>**



Calcola l'area di ogni cerchio. i cerchi non sono in scala.

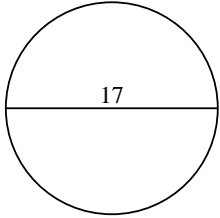
254,47 cm<sup>2</sup>    153,94 cm<sup>2</sup>    415,48 cm<sup>2</sup>    706,86 cm<sup>2</sup>    38,48 cm<sup>2</sup>

226,98 cm<sup>2</sup>    176,71 cm<sup>2</sup>    19,63 cm<sup>2</sup>    314,16 cm<sup>2</sup>    0,79 cm<sup>2</sup>

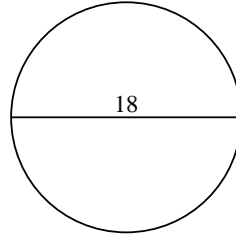
**Risposte**

1. \_\_\_\_\_
2. \_\_\_\_\_
3. \_\_\_\_\_
4. \_\_\_\_\_
5. \_\_\_\_\_
6. \_\_\_\_\_
7. \_\_\_\_\_
8. \_\_\_\_\_
9. \_\_\_\_\_
10. \_\_\_\_\_

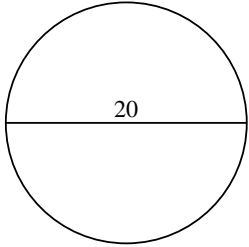
1)



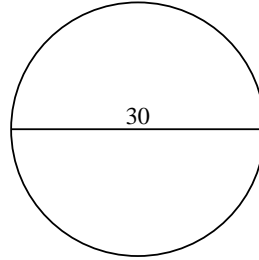
2)



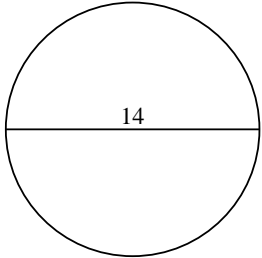
3)



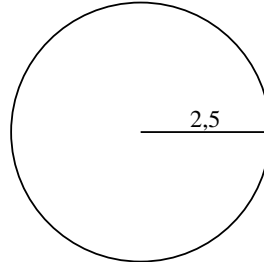
4)



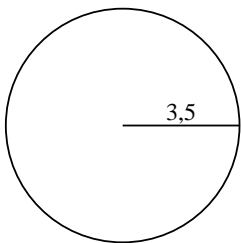
5)



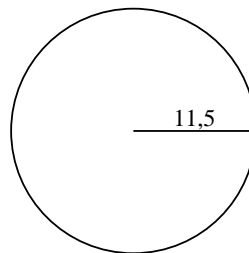
6)



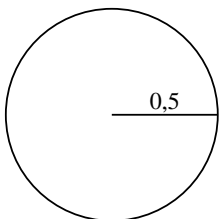
7)



8)



9)



10)

