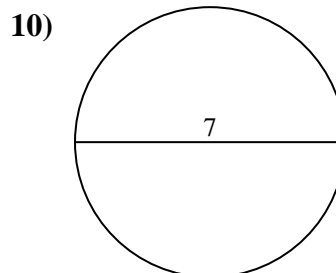
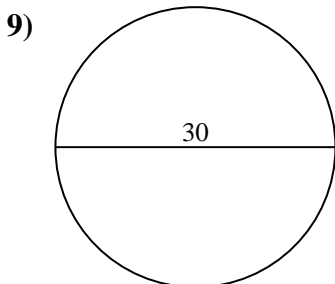
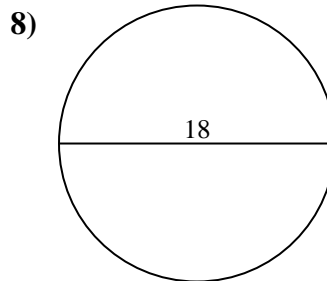
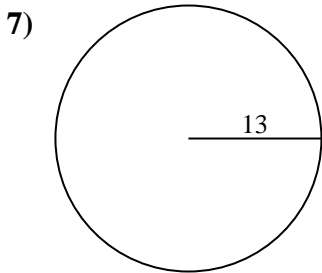
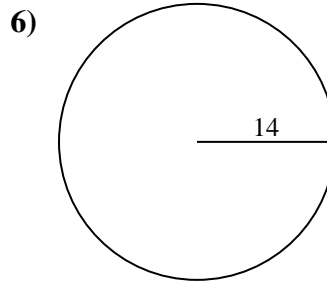
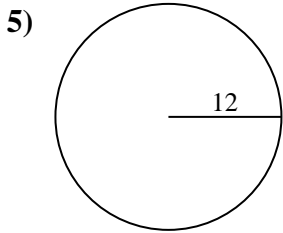
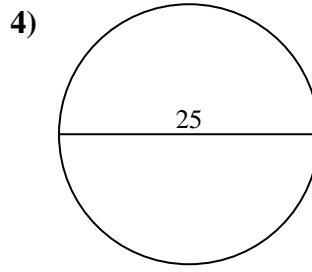
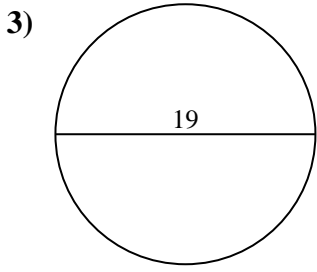
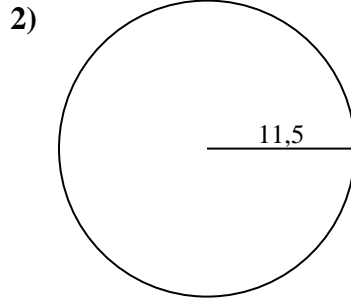
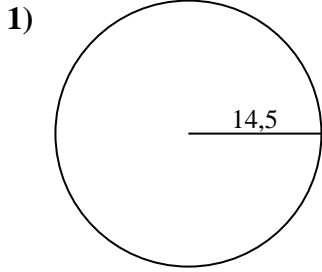




Calcola l'area di ogni cerchio. i cerchi non sono in scala.

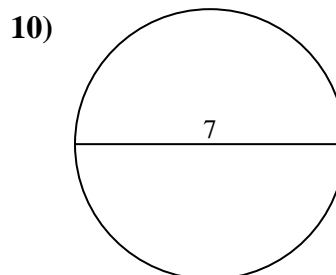
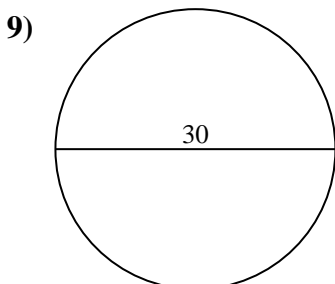
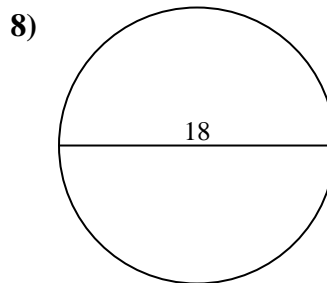
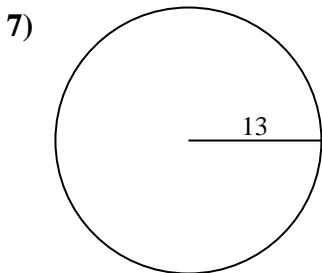
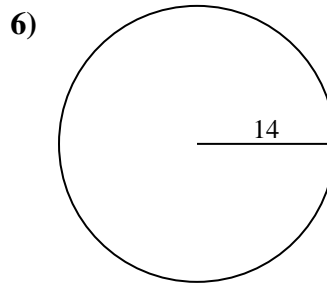
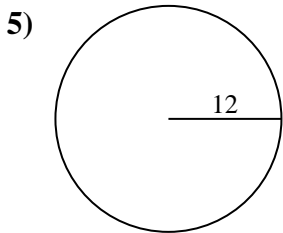
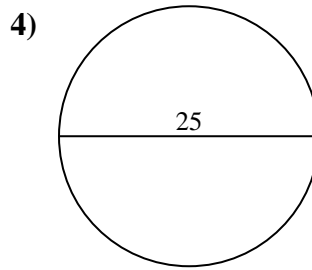
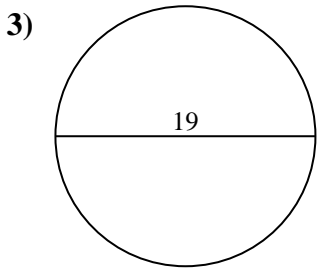
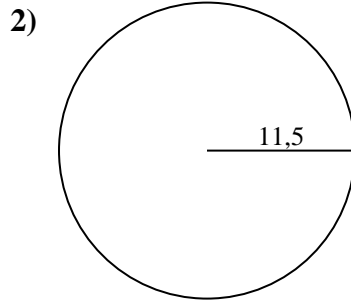
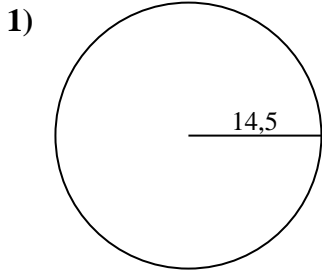


Risposte

- 1. _____
- 2. _____
- 3. _____
- 4. _____
- 5. _____
- 6. _____
- 7. _____
- 8. _____
- 9. _____
- 10. _____



Calcola l'area di ogni cerchio. i cerchi non sono in scala.

**Risposte**

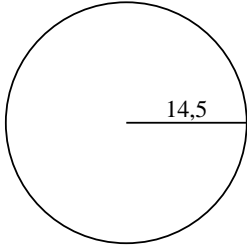
1. **660,52 cm²**
2. **415,48 cm²**
3. **283,53 cm²**
4. **490,87 cm²**
5. **452,39 cm²**
6. **615,75 cm²**
7. **530,93 cm²**
8. **254,47 cm²**
9. **706,86 cm²**
10. **38,48 cm²**



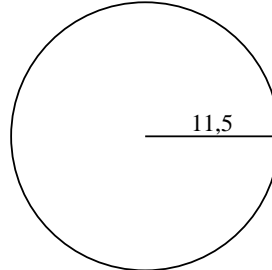
Calcola l'area di ogni cerchio. i cerchi non sono in scala.

660,52 cm²490,87 cm²283,53 cm²706,86 cm²615,75 cm²415,48 cm²452,39 cm²530,93 cm²38,48 cm²254,47 cm²

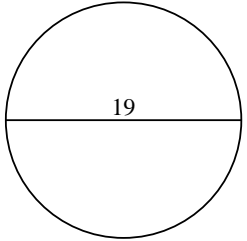
1)



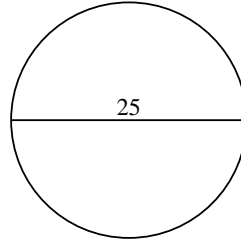
2)



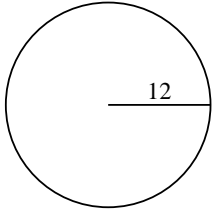
3)



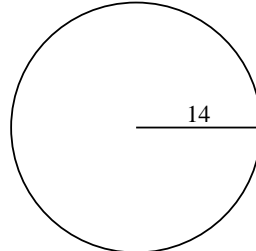
4)



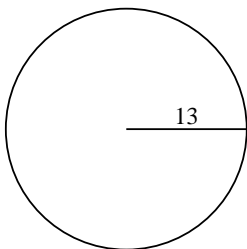
5)



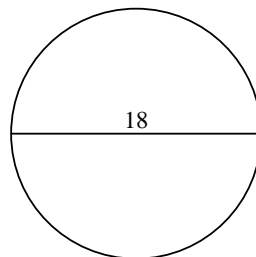
6)



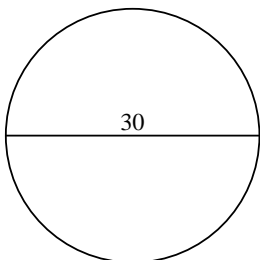
7)



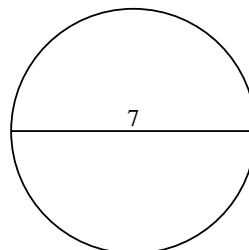
8)



9)



10)

**Risposte**

1. _____

2. _____

3. _____

4. _____

5. _____

6. _____

7. _____

8. _____

9. _____

10. _____