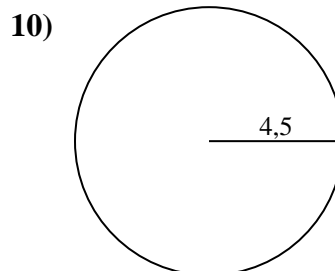
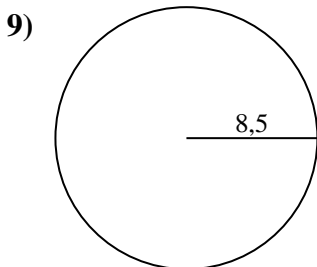
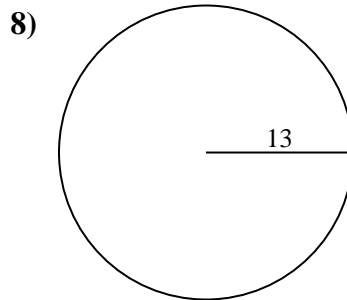
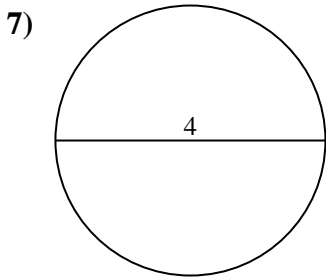
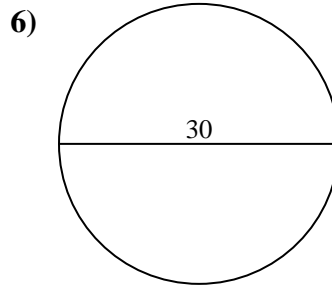
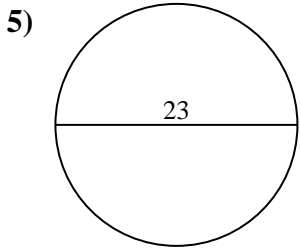
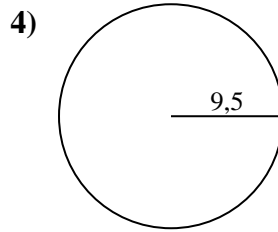
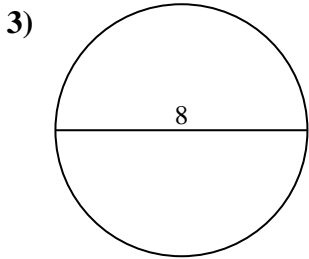
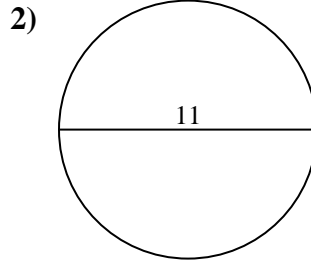
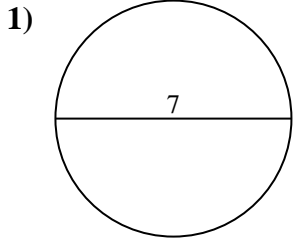




Calcola l'area di ogni cerchio. i cerchi non sono in scala.

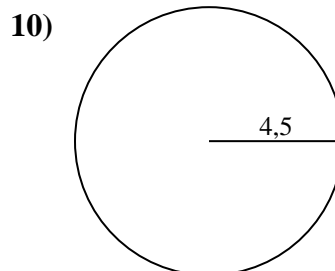
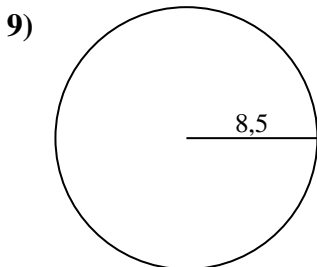
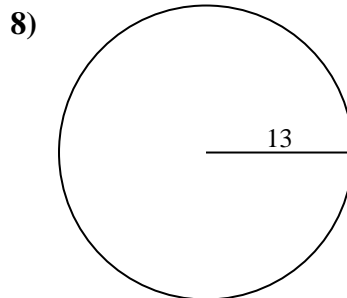
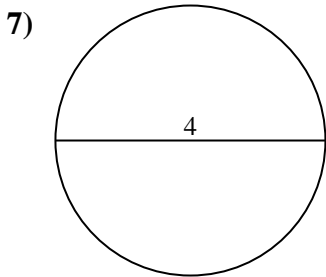
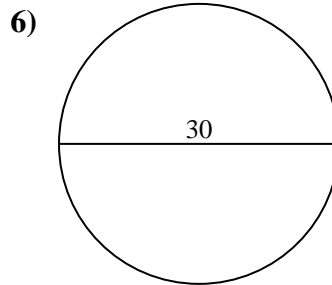
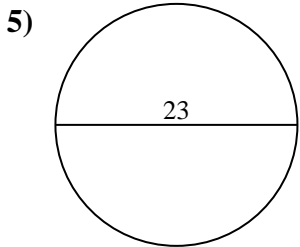
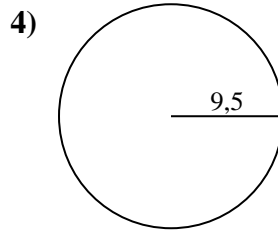
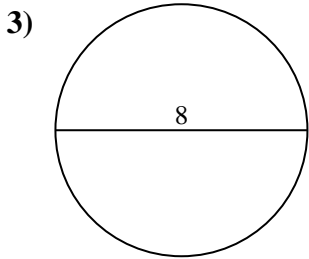
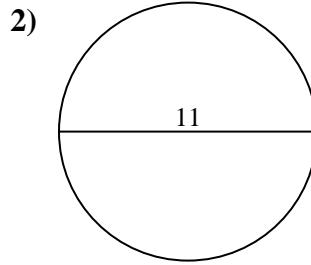
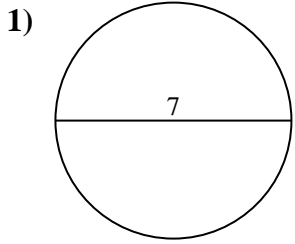


Risposte

- 1. _____
- 2. _____
- 3. _____
- 4. _____
- 5. _____
- 6. _____
- 7. _____
- 8. _____
- 9. _____
- 10. _____



Calcola l'area di ogni cerchio. i cerchi non sono in scala.



Risposte

1. 38,48 cm²
2. 95,03 cm²
3. 50,27 cm²
4. 283,53 cm²
5. 415,48 cm²
6. 706,86 cm²
7. 12,57 cm²
8. 530,93 cm²
9. 226,98 cm²
10. 63,62 cm²



Calcola l'area di ogni cerchio. i cerchi non sono in scala.

Risposte

63,62 cm²

38,48 cm²

95,03 cm²

226,98 cm²

12,57 cm²

50,27 cm²

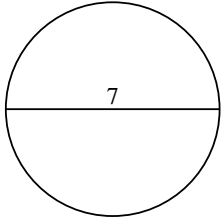
530,93 cm²

415,48 cm²

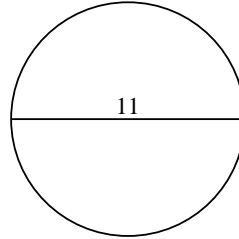
283,53 cm²

706,86 cm²

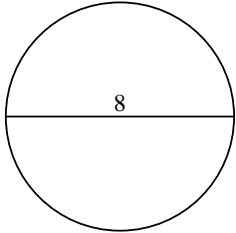
1)



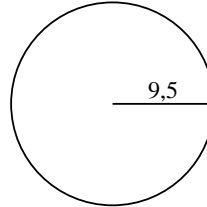
2)



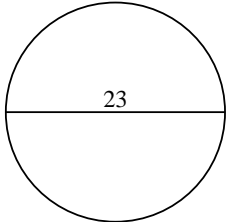
3)



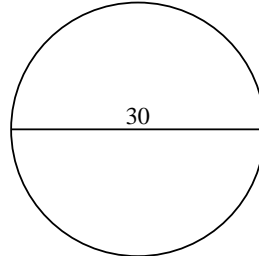
4)



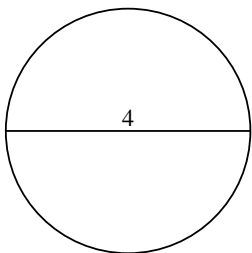
5)



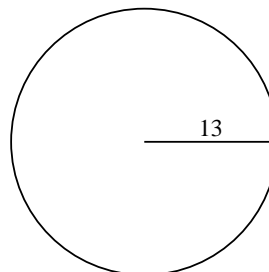
6)



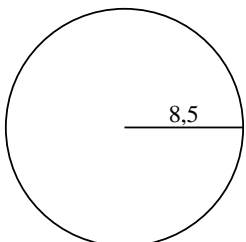
7)



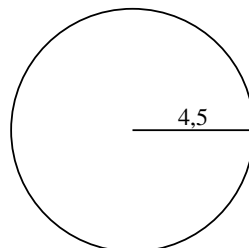
8)



9)



10)



1. _____

2. _____

3. _____

4. _____

5. _____

6. _____

7. _____

8. _____

9. _____

10. _____