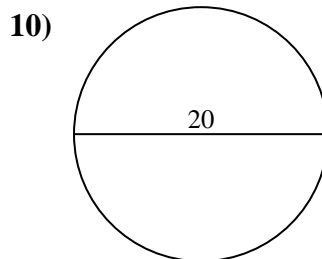
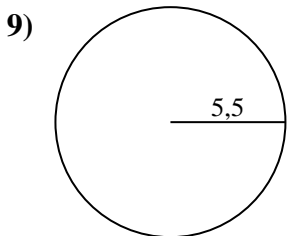
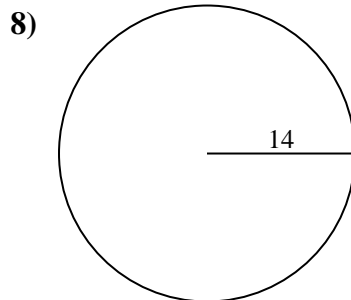
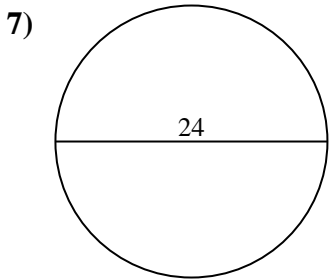
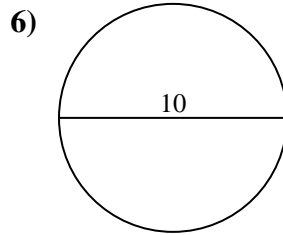
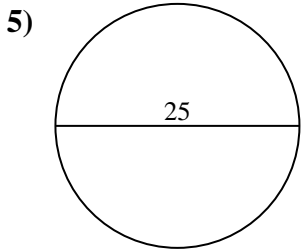
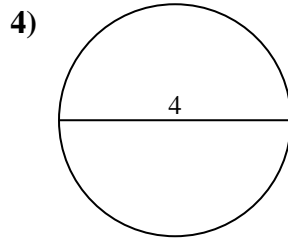
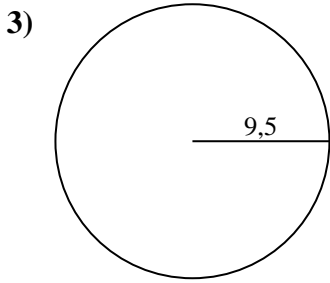
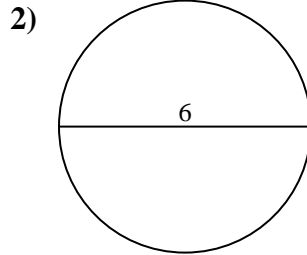
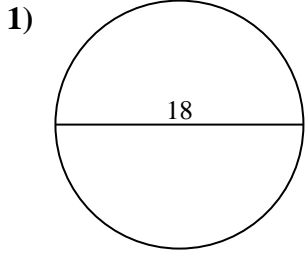




Calcola l'area di ogni cerchio. i cerchi non sono in scala.

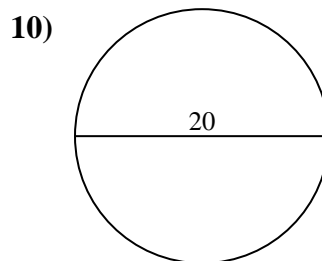
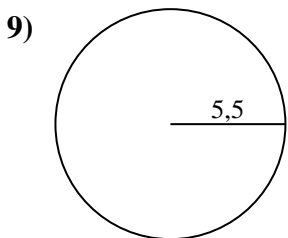
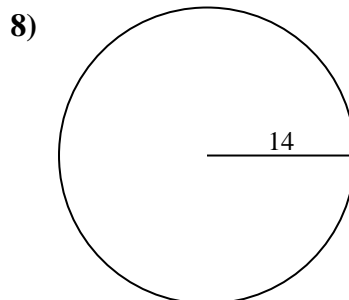
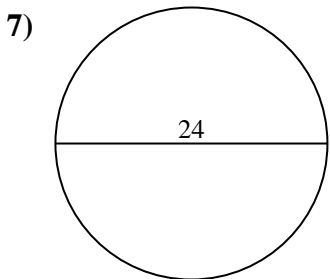
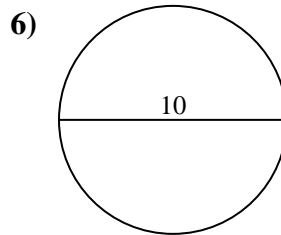
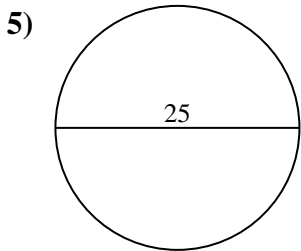
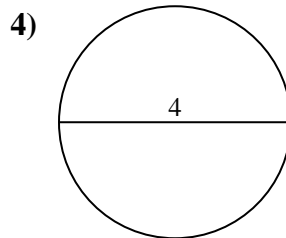
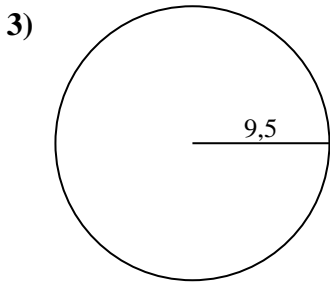
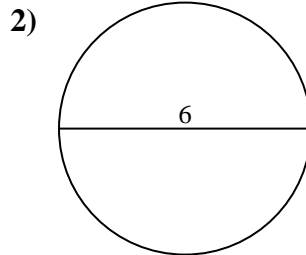
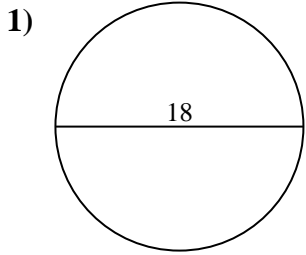


Risposte

- 1. _____
- 2. _____
- 3. _____
- 4. _____
- 5. _____
- 6. _____
- 7. _____
- 8. _____
- 9. _____
- 10. _____



Calcola l'area di ogni cerchio. i cerchi non sono in scala.

**Risposte**

1. 254,47 cm²
2. 28,27 cm²
3. 283,53 cm²
4. 12,57 cm²
5. 490,87 cm²
6. 78,54 cm²
7. 452,39 cm²
8. 615,75 cm²
9. 95,03 cm²
10. 314,16 cm²



Calcola l'area di ogni cerchio. i cerchi non sono in scala.

283,53 cm²

490,87 cm²

254,47 cm²

314,16 cm²

95,03 cm²

28,27 cm²

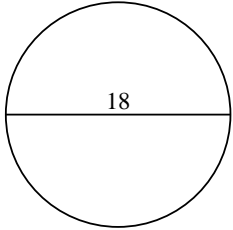
12,57 cm²

452,39 cm²

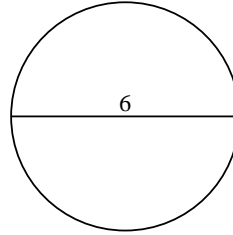
615,75 cm²

78,54 cm²

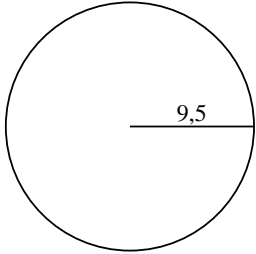
1)



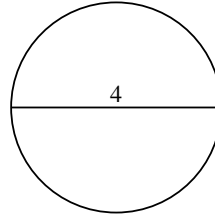
2)



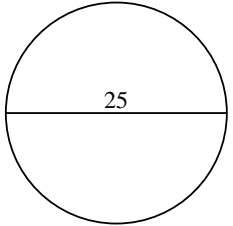
3)



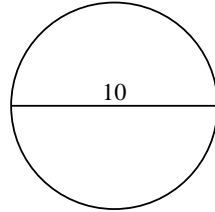
4)



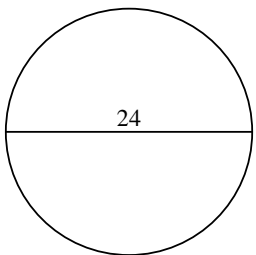
5)



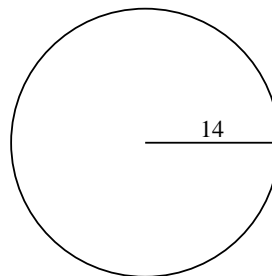
6)



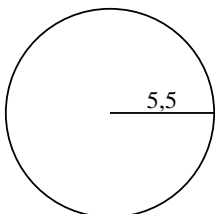
7)



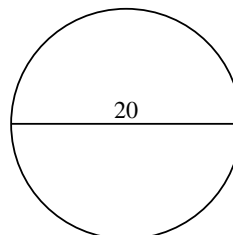
8)



9)



10)



Risposte

1. _____

2. _____

3. _____

4. _____

5. _____

6. _____

7. _____

8. _____

9. _____

10. _____