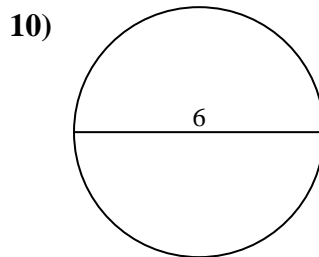
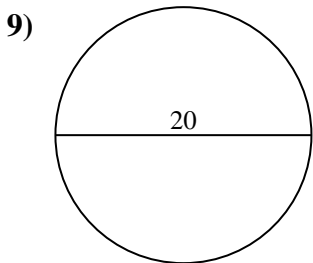
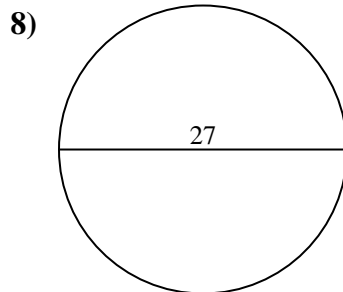
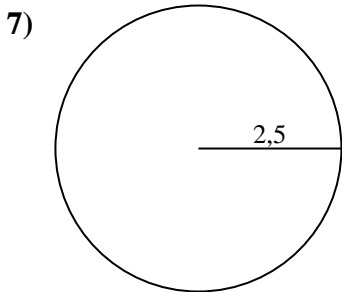
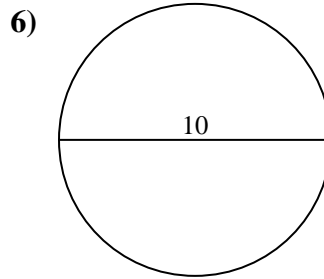
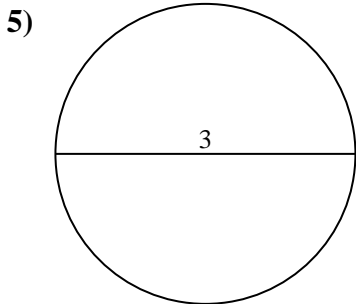
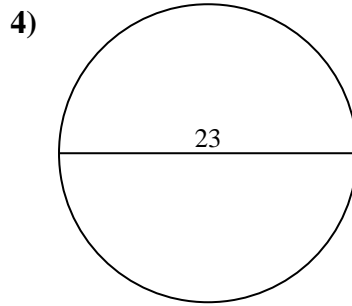
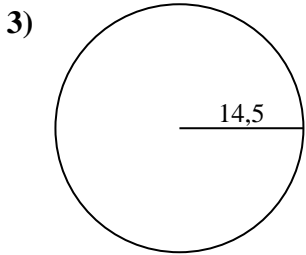
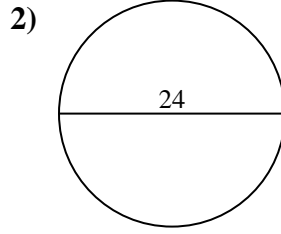
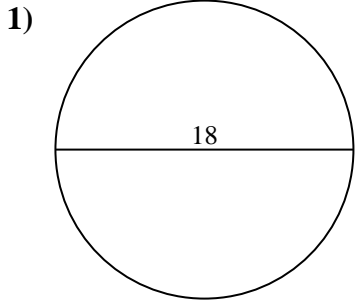




Calcola l'area di ogni cerchio. i cerchi non sono in scala.

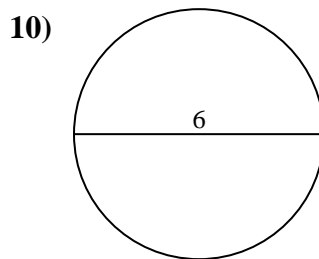
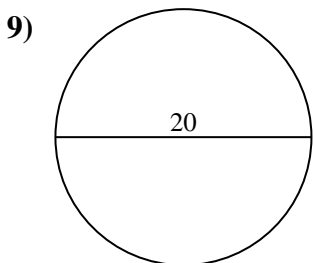
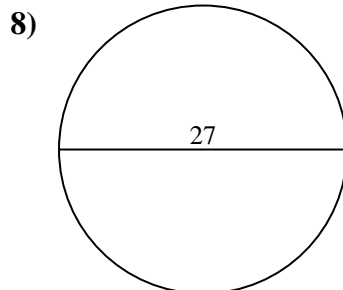
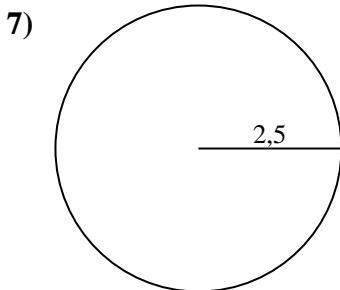
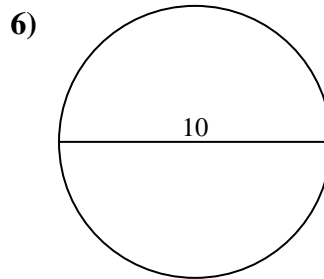
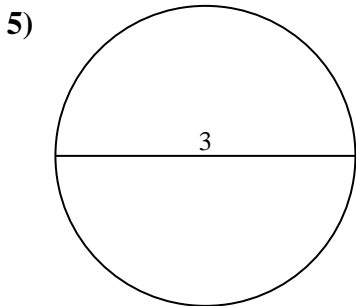
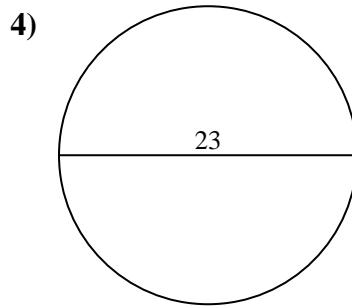
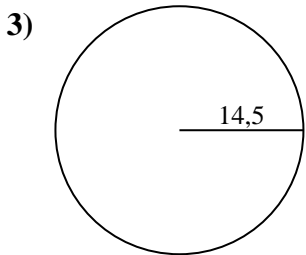
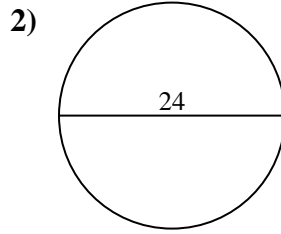
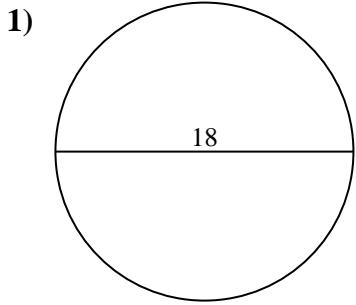


**Risposte**

- 1. \_\_\_\_\_
- 2. \_\_\_\_\_
- 3. \_\_\_\_\_
- 4. \_\_\_\_\_
- 5. \_\_\_\_\_
- 6. \_\_\_\_\_
- 7. \_\_\_\_\_
- 8. \_\_\_\_\_
- 9. \_\_\_\_\_
- 10. \_\_\_\_\_



Calcola l'area di ogni cerchio. i cerchi non sono in scala.

**Risposte**

1. 254,47 cm<sup>2</sup>
2. 452,39 cm<sup>2</sup>
3. 660,52 cm<sup>2</sup>
4. 415,48 cm<sup>2</sup>
5. 7,07 cm<sup>2</sup>
6. 78,54 cm<sup>2</sup>
7. 19,63 cm<sup>2</sup>
8. 572,56 cm<sup>2</sup>
9. 314,16 cm<sup>2</sup>
10. 28,27 cm<sup>2</sup>



Calcola l'area di ogni cerchio. i cerchi non sono in scala.

**Risposte**

254,47 cm<sup>2</sup>

28,27 cm<sup>2</sup>

452,39 cm<sup>2</sup>

78,54 cm<sup>2</sup>

19,63 cm<sup>2</sup>

660,52 cm<sup>2</sup>

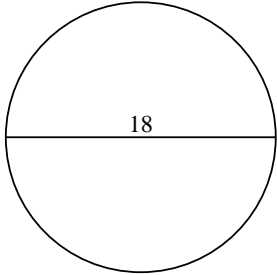
415,48 cm<sup>2</sup>

314,16 cm<sup>2</sup>

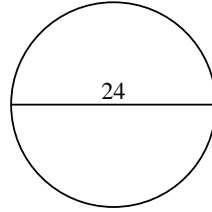
572,56 cm<sup>2</sup>

7,07 cm<sup>2</sup>

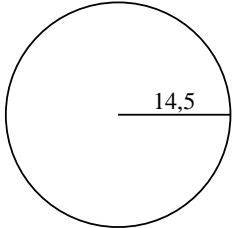
1)



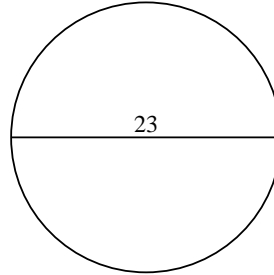
2)



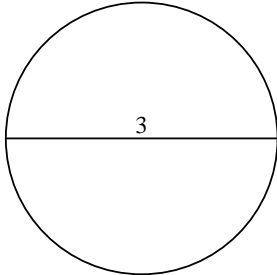
3)



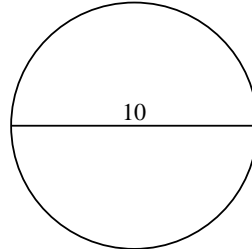
4)



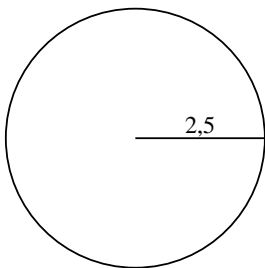
5)



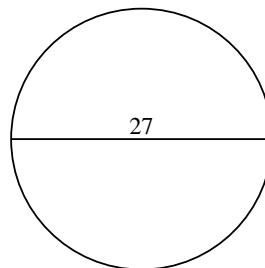
6)



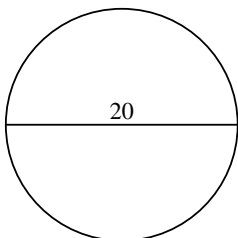
7)



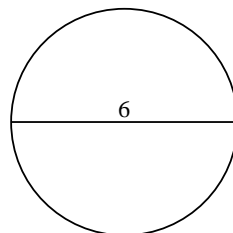
8)



9)



10)



1. \_\_\_\_\_

2. \_\_\_\_\_

3. \_\_\_\_\_

4. \_\_\_\_\_

5. \_\_\_\_\_

6. \_\_\_\_\_

7. \_\_\_\_\_

8. \_\_\_\_\_

9. \_\_\_\_\_

10. \_\_\_\_\_