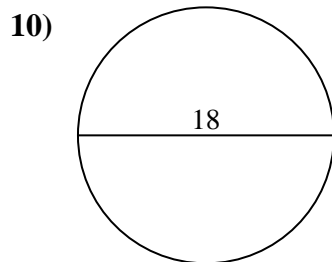
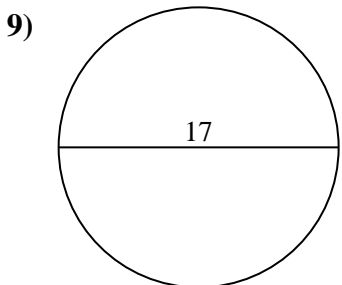
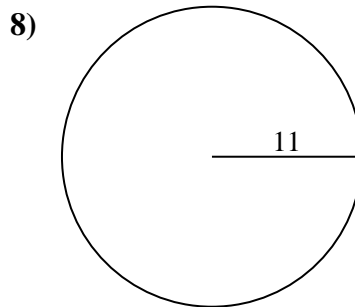
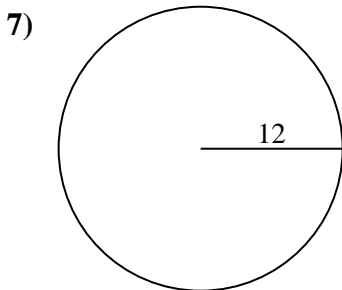
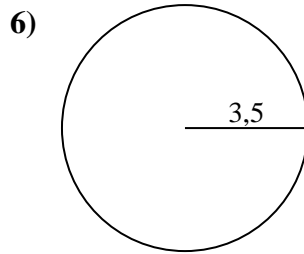
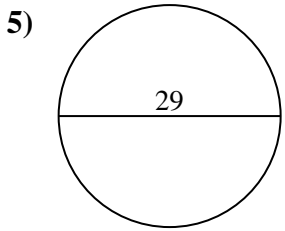
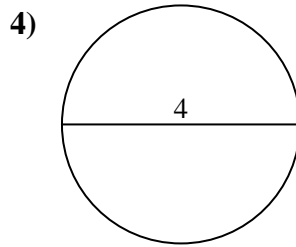
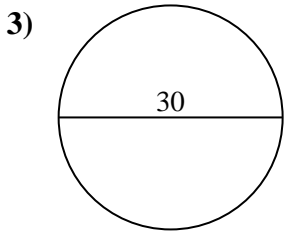
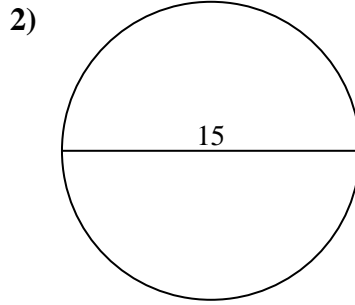
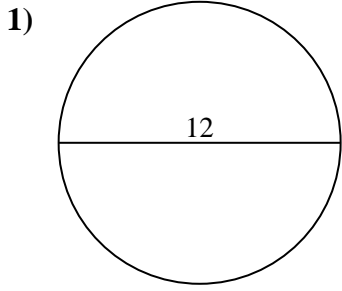




Calcola area e perimetro. Non sono in scala.



Risposte

1a. _____

1c. _____

2a. _____

2c. _____

3a. _____

3c. _____

4a. _____

4c. _____

5a. _____

5c. _____

6a. _____

6c. _____

7a. _____

7c. _____

8a. _____

8c. _____

9a. _____

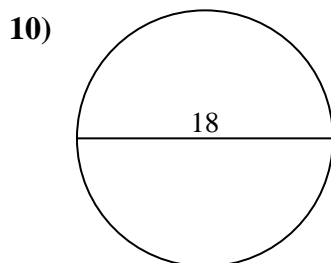
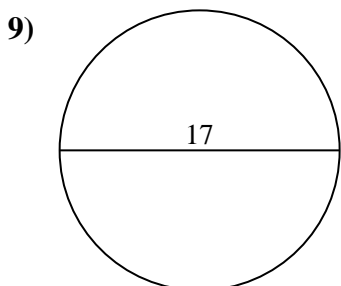
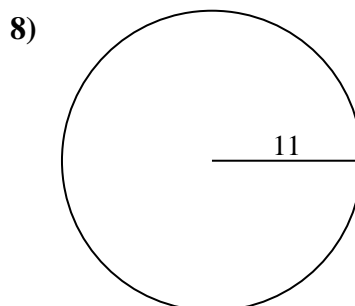
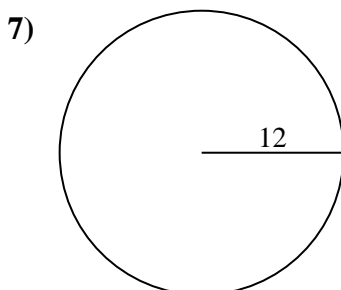
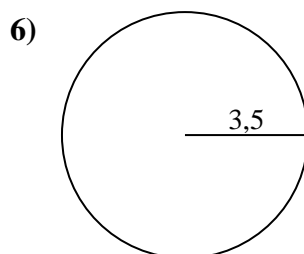
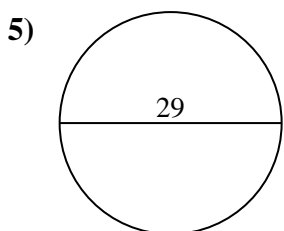
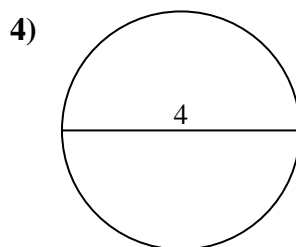
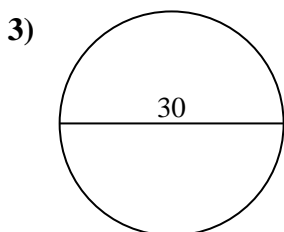
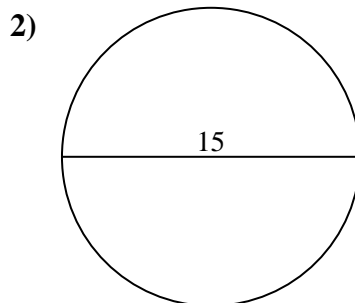
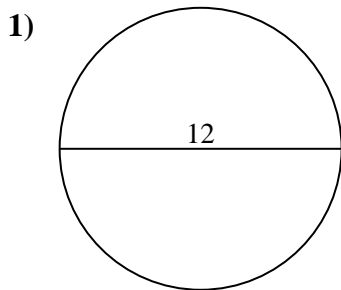
9c. _____

10a. _____

10c. _____



Calcola area e perimetro. Non sono in scala.



Risposte

1a. 113,1 cm²

1c. 37,7 cm

2a. 176,71 cm²

2c. 47,12 cm

3a. 706,86 cm²

3c. 94,25 cm

4a. 12,57 cm²

4c. 12,57 cm

5a. 660,52 cm²

5c. 91,11 cm

6a. 38,48 cm²

6c. 21,99 cm

7a. 452,39 cm²

7c. 75,4 cm

8a. 380,13 cm²

8c. 69,12 cm

9a. 226,98 cm²

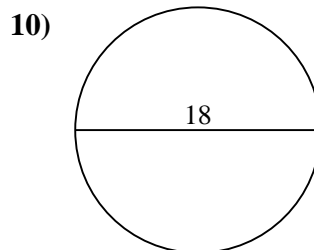
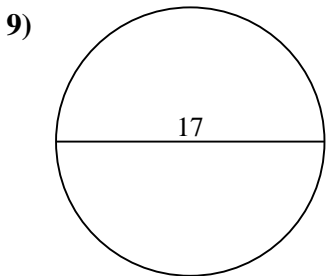
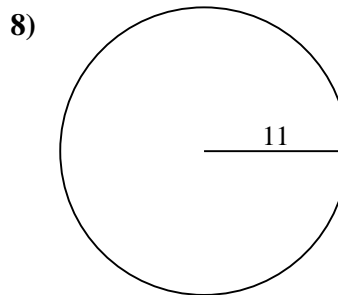
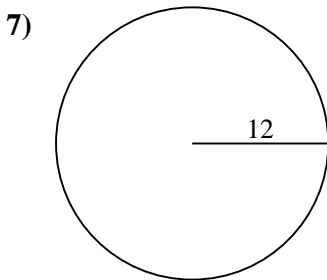
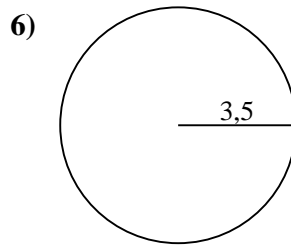
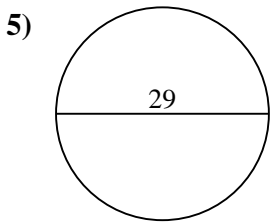
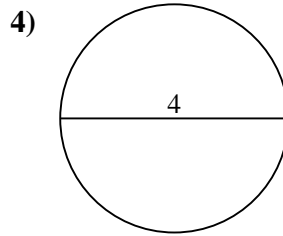
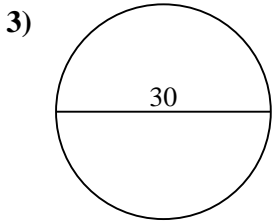
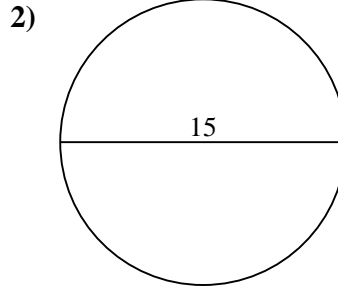
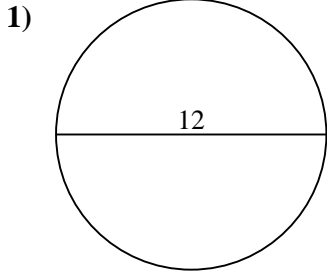
9c. 53,41 cm

10a. 254,47 cm²

10c. 56,55 cm



Calcola area e perimetro. Non sono in scala.



Risposte

1a. _____

1c. _____

2a. _____

2c. _____

3a. _____

3c. _____

4a. _____

4c. _____

5a. _____

5c. _____

6a. _____

6c. _____

7a. _____

7c. _____

8a. _____

8c. _____

9a. _____

9c. _____

10a. _____

10c. _____