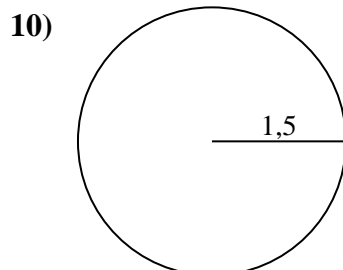
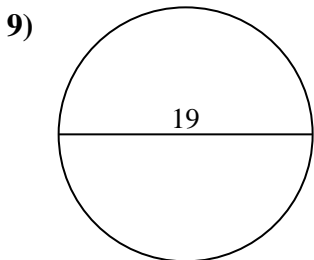
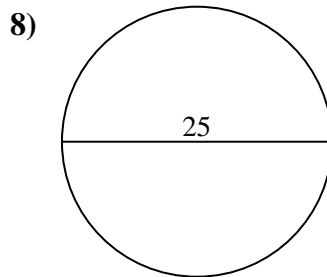
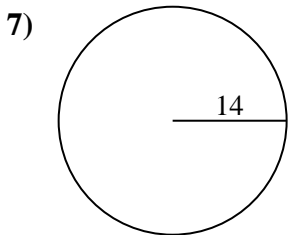
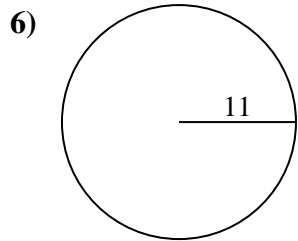
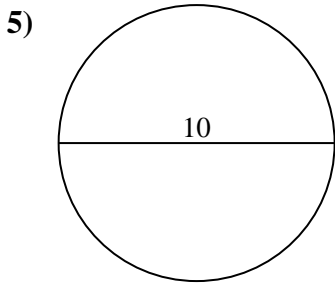
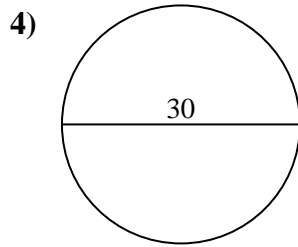
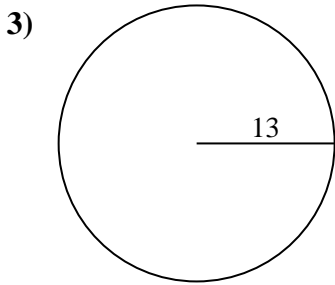
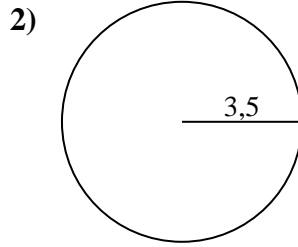
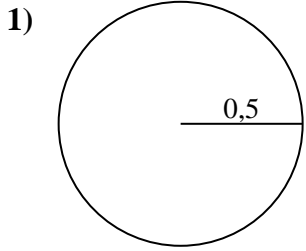




Calcola area e perimetro. Non sono in scala.



Risposte

1a. _____

1c. _____

2a. _____

2c. _____

3a. _____

3c. _____

4a. _____

4c. _____

5a. _____

5c. _____

6a. _____

6c. _____

7a. _____

7c. _____

8a. _____

8c. _____

9a. _____

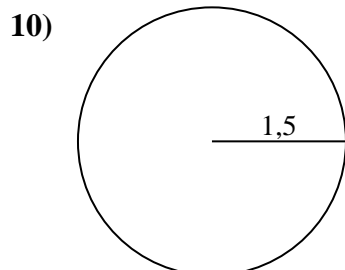
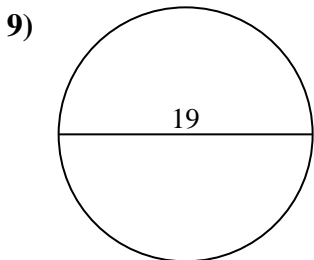
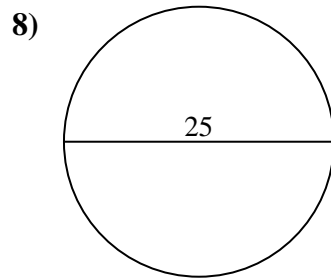
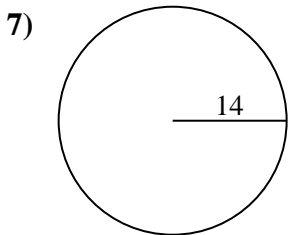
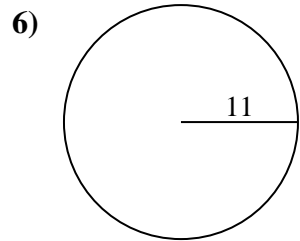
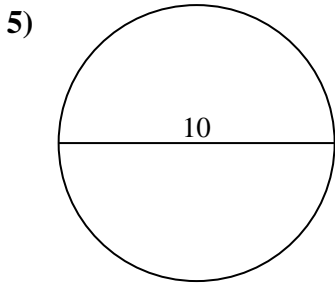
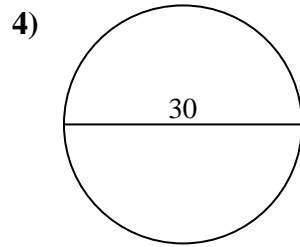
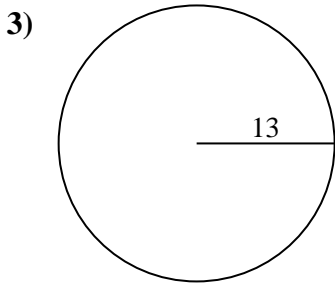
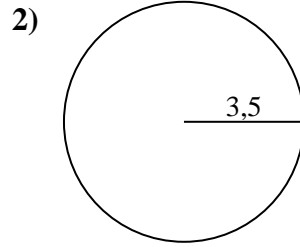
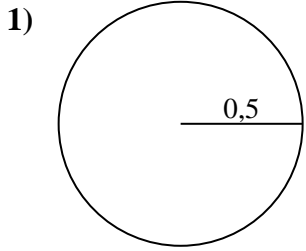
9c. _____

10a. _____

10c. _____



Calcola area e perimetro. Non sono in scala.



Risposte

1a. 0,79 cm²

1c. 3,14 cm

2a. 38,48 cm²

2c. 21,99 cm

3a. 530,93 cm²

3c. 81,68 cm

4a. 706,86 cm²

4c. 94,25 cm

5a. 78,54 cm²

5c. 31,42 cm

6a. 380,13 cm²

6c. 69,12 cm

7a. 615,75 cm²

7c. 87,96 cm

8a. 490,87 cm²

8c. 78,54 cm

9a. 283,53 cm²

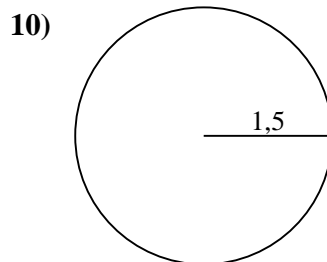
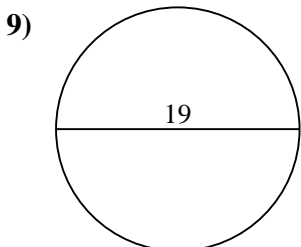
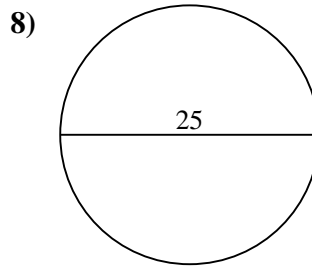
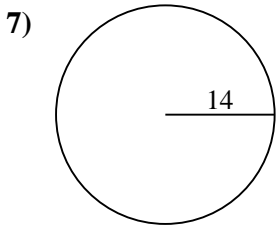
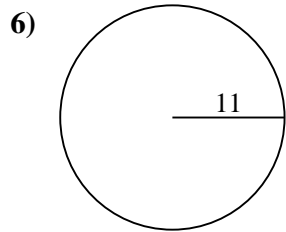
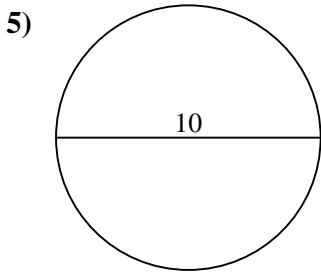
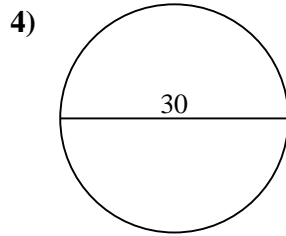
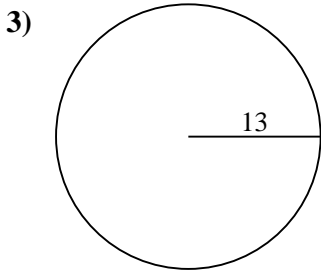
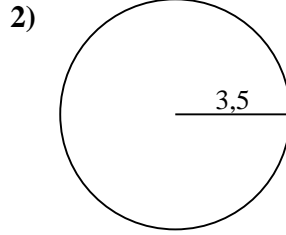
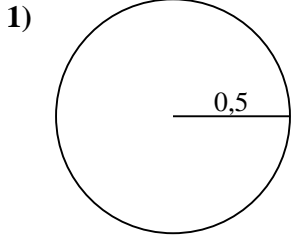
9c. 59,69 cm

10a. 7,07 cm²

10c. 9,42 cm



Calcola area e perimetro. Non sono in scala.



Risposte

1a. _____

1c. _____

2a. _____

2c. _____

3a. _____

3c. _____

4a. _____

4c. _____

5a. _____

5c. _____

6a. _____

6c. _____

7a. _____

7c. _____

8a. _____

8c. _____

9a. _____

9c. _____

10a. _____

10c. _____