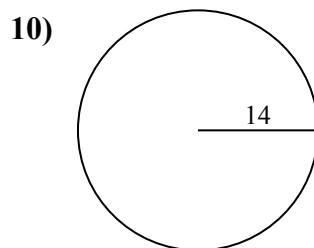
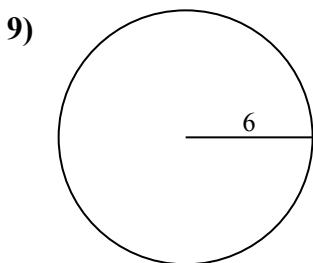
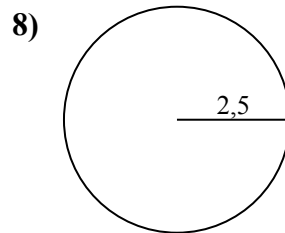
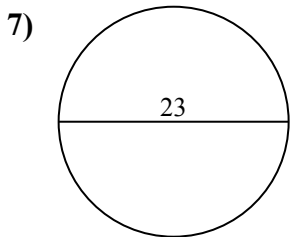
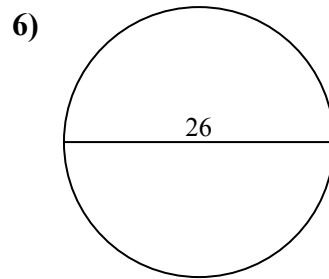
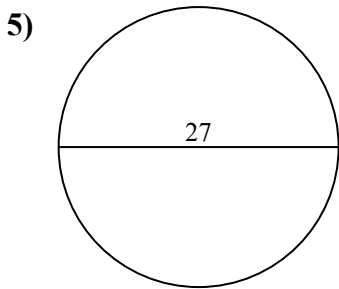
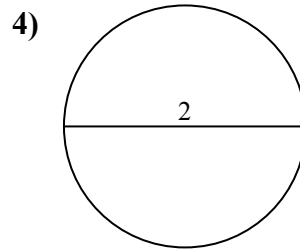
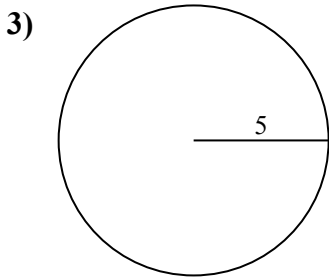
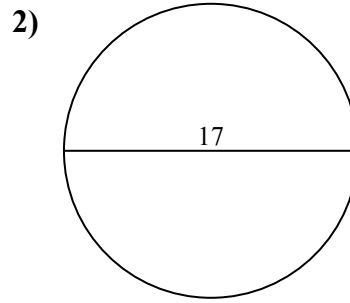
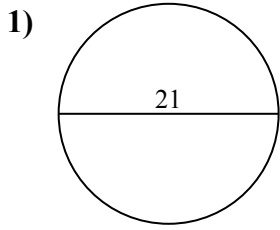




Calcola area e perimetro. Non sono in scala.



Risposte

1a. _____

1c. _____

2a. _____

2c. _____

3a. _____

3c. _____

4a. _____

4c. _____

5a. _____

5c. _____

6a. _____

6c. _____

7a. _____

7c. _____

8a. _____

8c. _____

9a. _____

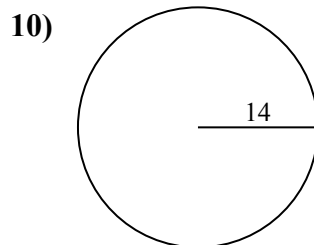
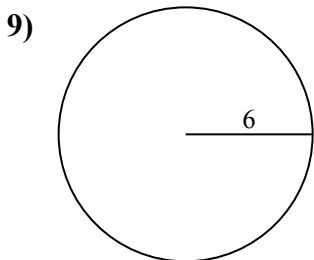
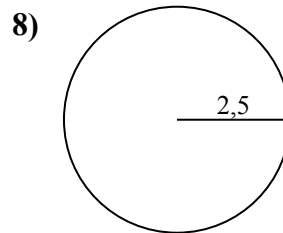
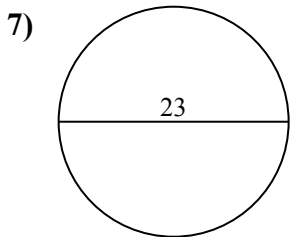
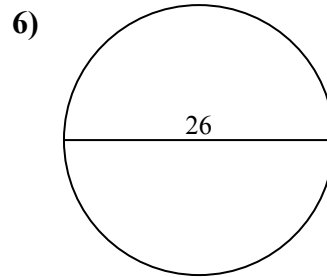
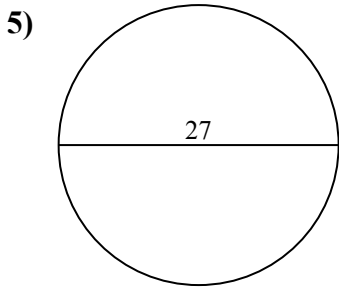
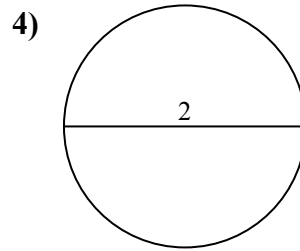
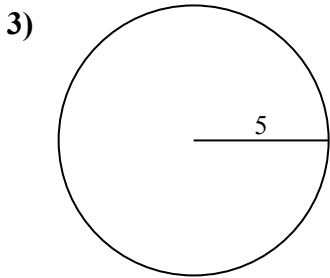
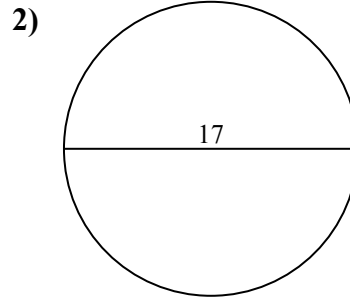
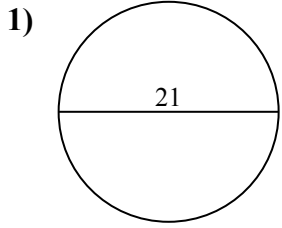
9c. _____

10a. _____

10c. _____



Calcola area e perimetro. Non sono in scala.



Risposte

1a. **346,36 cm²**

1c. **65,97 cm**

2a. **226,98 cm²**

2c. **53,41 cm**

3a. **78,54 cm²**

3c. **31,42 cm**

4a. **3,14 cm²**

4c. **6,28 cm**

5a. **572,56 cm²**

5c. **84,82 cm**

6a. **530,93 cm²**

6c. **81,68 cm**

7a. **415,48 cm²**

7c. **72,26 cm**

8a. **19,63 cm²**

8c. **15,71 cm**

9a. **113,1 cm²**

9c. **37,7 cm**

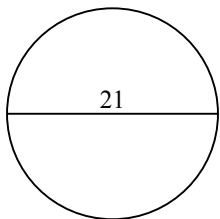
10a. **615,75 cm²**

10c. **87,96 cm**

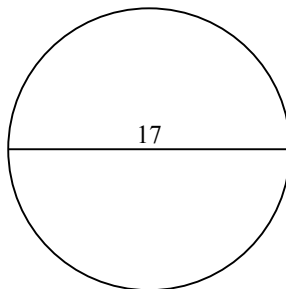


37,7 cm	31,42 cm	346,36 cm ²	6,28 cm	615,75 cm ²
53,41 cm	3,14 cm ²	530,93 cm ²	226,98 cm ²	78,54 cm ²
113,1 cm ²	19,63 cm ²	81,68 cm	87,96 cm	415,48 cm ²
65,97 cm	15,71 cm	84,82 cm	572,56 cm ²	72,26 cm

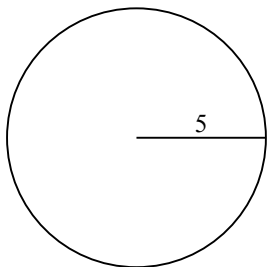
1)



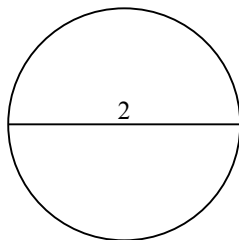
2)



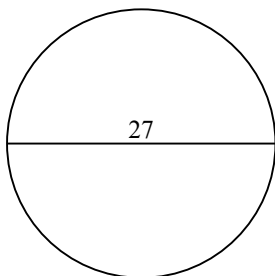
3)



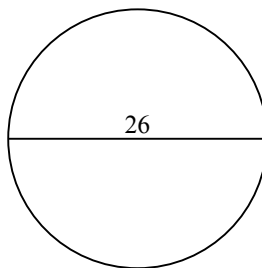
4)



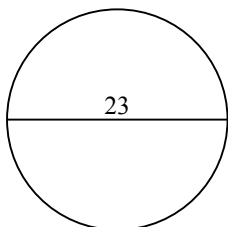
5)



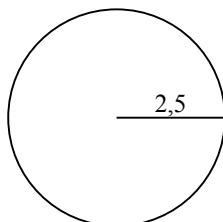
6)



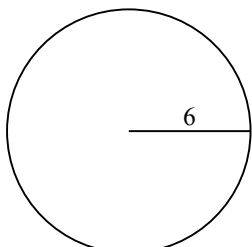
7)



8)



9)



10)

