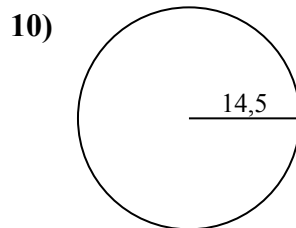
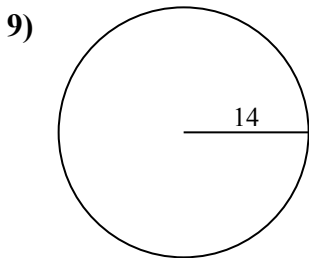
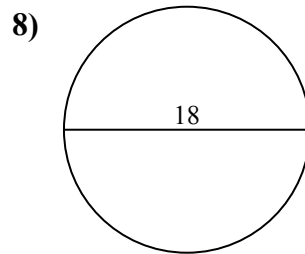
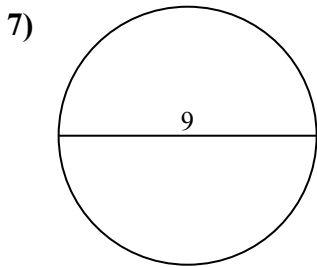
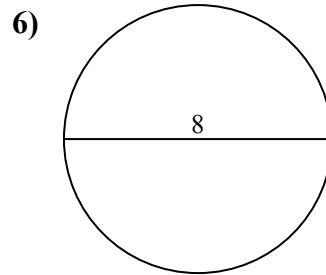
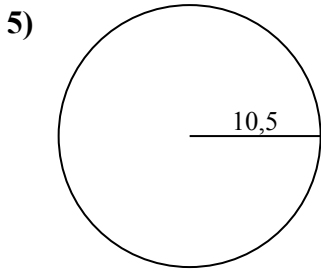
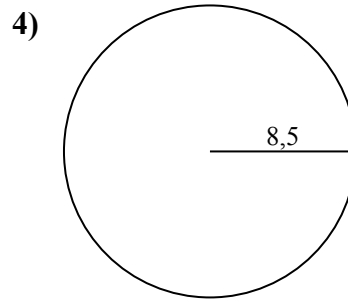
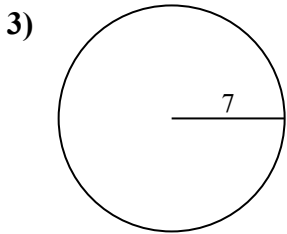
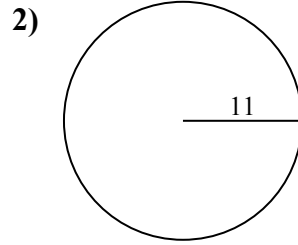
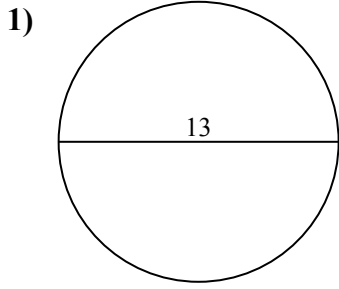




Calcola area e perimetro. Non sono in scala.



Risposte

1a. _____

1c. _____

2a. _____

2c. _____

3a. _____

3c. _____

4a. _____

4c. _____

5a. _____

5c. _____

6a. _____

6c. _____

7a. _____

7c. _____

8a. _____

8c. _____

9a. _____

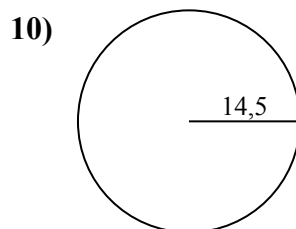
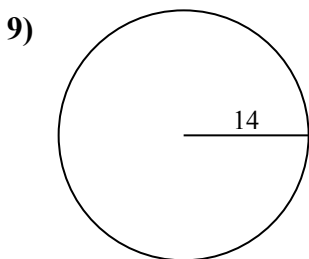
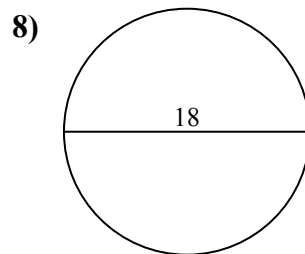
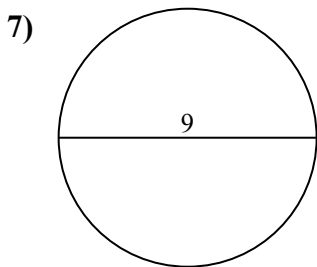
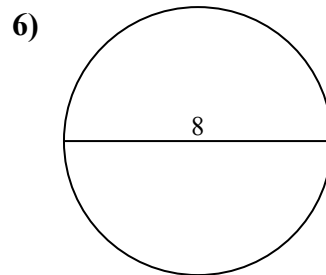
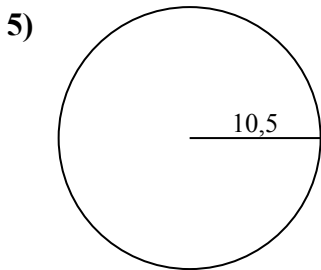
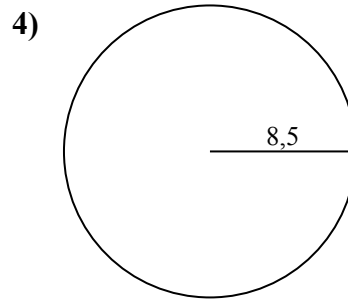
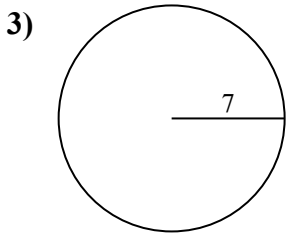
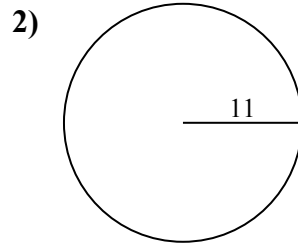
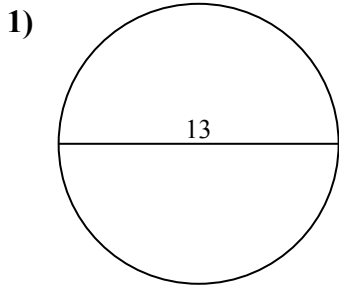
9c. _____

10a. _____

10c. _____



Calcola area e perimetro. Non sono in scala.

**Risposte**1a. **132,73 cm²**1c. **40,84 cm**2a. **380,13 cm²**2c. **69,12 cm**3a. **153,94 cm²**3c. **43,98 cm**4a. **226,98 cm²**4c. **53,41 cm**5a. **346,36 cm²**5c. **65,97 cm**6a. **50,27 cm²**6c. **25,13 cm**7a. **63,62 cm²**7c. **28,27 cm**8a. **254,47 cm²**8c. **56,55 cm**9a. **615,75 cm²**9c. **87,96 cm**10a. **660,52 cm²**10c. **91,11 cm**



53,41 cm	226,98 cm ²	43,98 cm	40,84 cm	65,97 cm
28,27 cm	63,62 cm ²	346,36 cm ²	380,13 cm ²	132,73 cm ²
50,27 cm ²	254,47 cm ²	615,75 cm ²	660,52 cm ²	91,11 cm
56,55 cm	87,96 cm	25,13 cm	69,12 cm	153,94 cm ²

