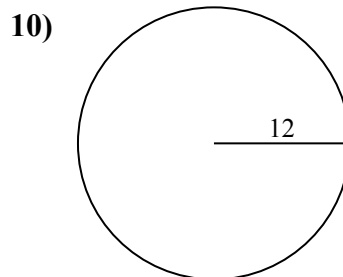
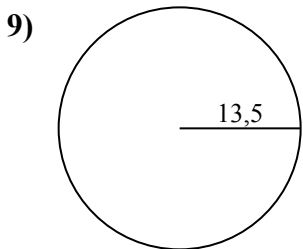
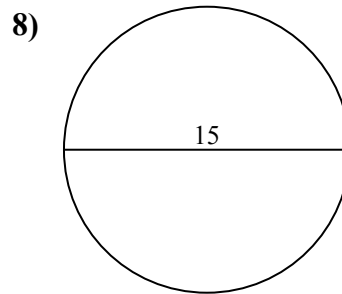
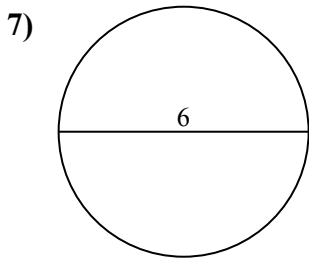
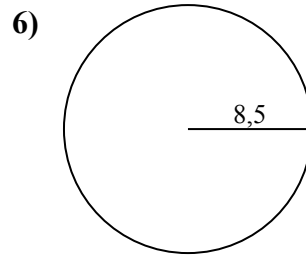
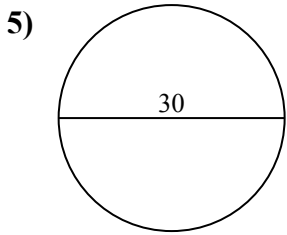
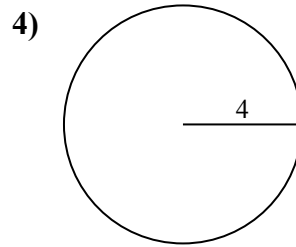
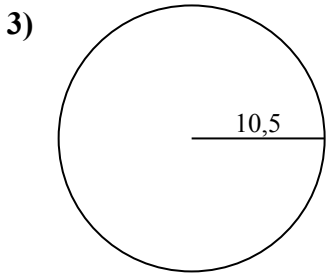
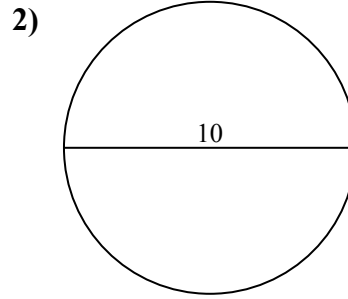
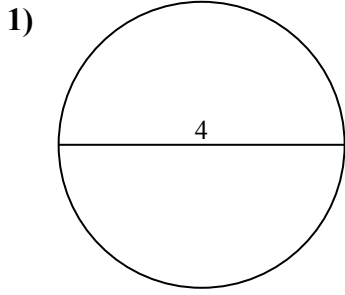




Calcola area e perimetro. Non sono in scala.



Risposte

1a. _____

1c. _____

2a. _____

2c. _____

3a. _____

3c. _____

4a. _____

4c. _____

5a. _____

5c. _____

6a. _____

6c. _____

7a. _____

7c. _____

8a. _____

8c. _____

9a. _____

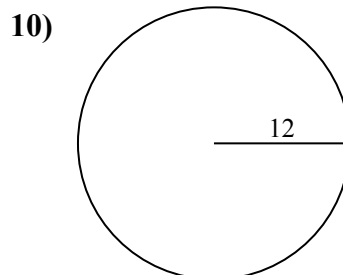
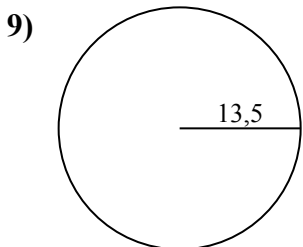
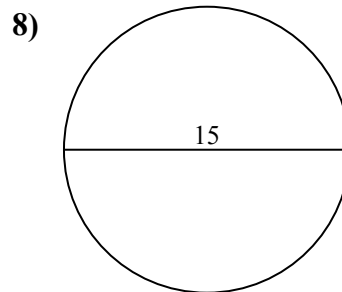
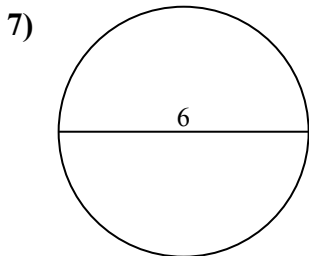
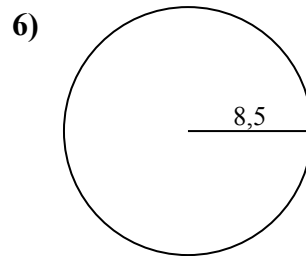
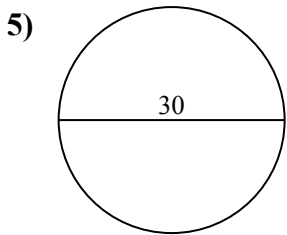
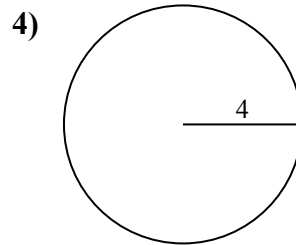
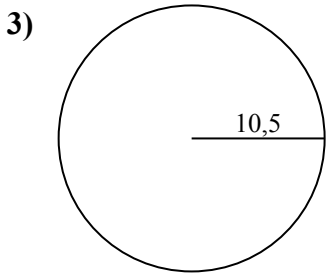
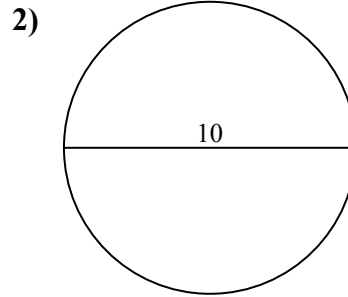
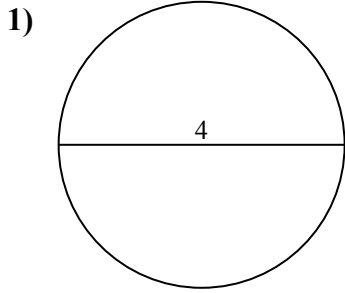
9c. _____

10a. _____

10c. _____



Calcola area e perimetro. Non sono in scala.



Risposte

1a. 12,57 cm²

1c. 12,57 cm

2a. 78,54 cm²

2c. 31,42 cm

3a. 346,36 cm²

3c. 65,97 cm

4a. 50,27 cm²

4c. 25,13 cm

5a. 706,86 cm²

5c. 94,25 cm

6a. 226,98 cm²

6c. 53,41 cm

7a. 28,27 cm²

7c. 18,85 cm

8a. 176,71 cm²

8c. 47,12 cm

9a. 572,56 cm²

9c. 84,82 cm

10a. 452,39 cm²

10c. 75,4 cm



$50,27 \text{ cm}^2$	$25,13 \text{ cm}$	$226,98 \text{ cm}^2$	$12,57 \text{ cm}^2$	$65,97 \text{ cm}$
$346,36 \text{ cm}^2$	$12,57 \text{ cm}$	$706,86 \text{ cm}^2$	$47,12 \text{ cm}$	$572,56 \text{ cm}^2$
$94,25 \text{ cm}$	$452,39 \text{ cm}^2$	$75,4 \text{ cm}$	$18,85 \text{ cm}$	$31,42 \text{ cm}$
$78,54 \text{ cm}^2$	$84,82 \text{ cm}$	$53,41 \text{ cm}$	$176,71 \text{ cm}^2$	$28,27 \text{ cm}^2$

