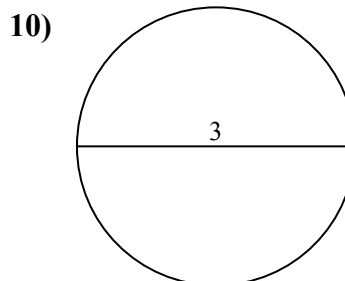
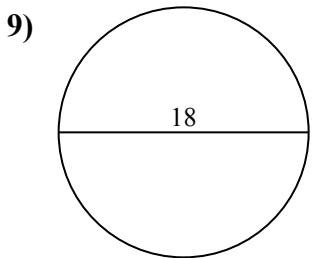
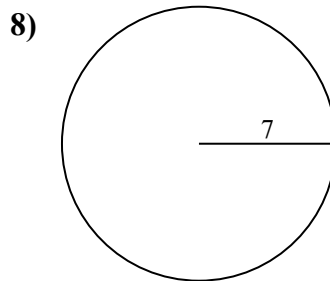
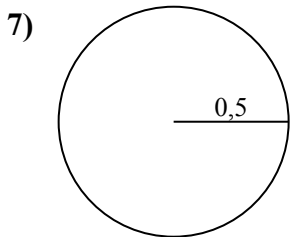
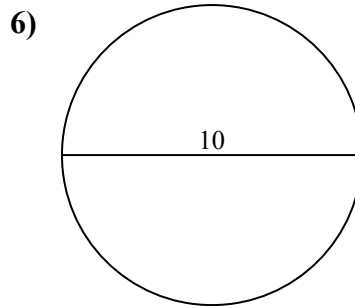
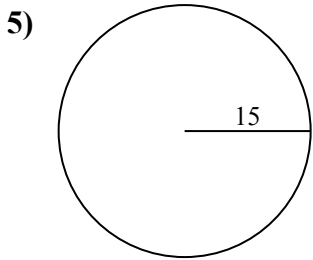
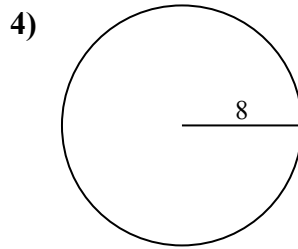
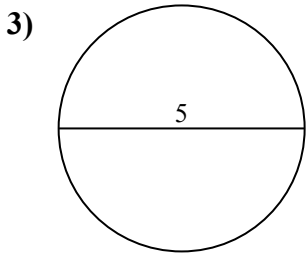
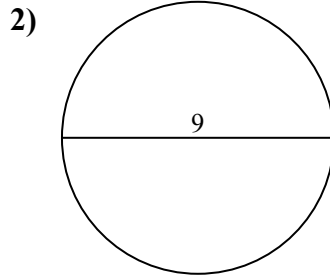
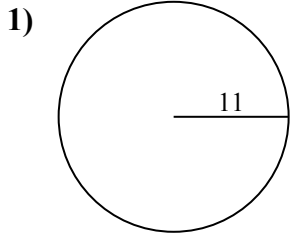




Calcola area e perimetro. Non sono in scala.



Risposte

1a. _____

1c. _____

2a. _____

2c. _____

3a. _____

3c. _____

4a. _____

4c. _____

5a. _____

5c. _____

6a. _____

6c. _____

7a. _____

7c. _____

8a. _____

8c. _____

9a. _____

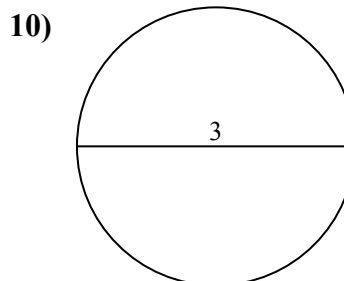
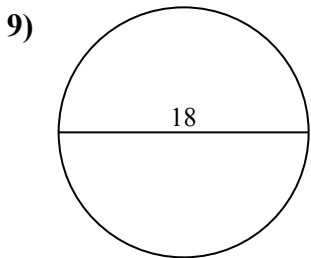
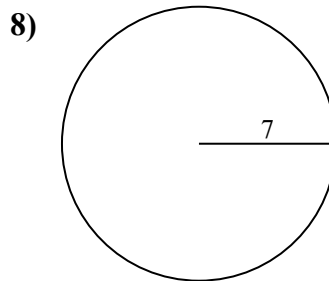
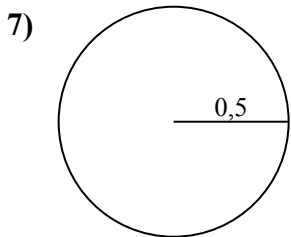
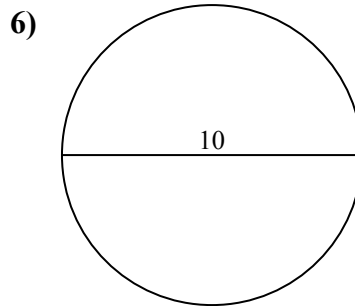
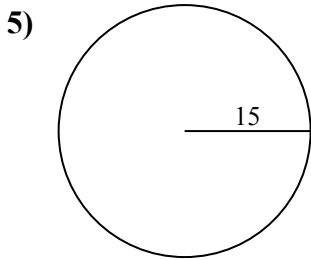
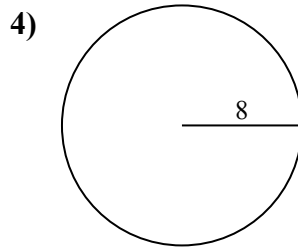
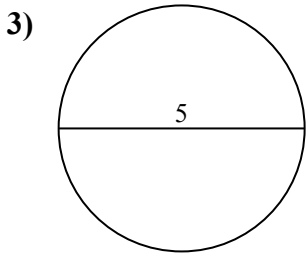
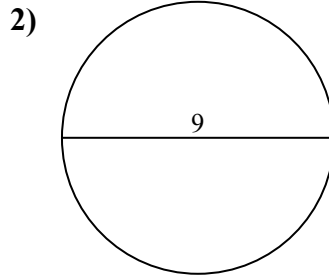
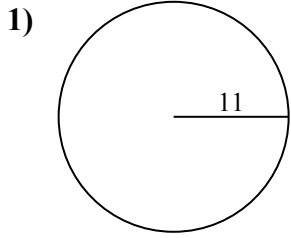
9c. _____

10a. _____

10c. _____



Calcola area e perimetro. Non sono in scala.

**Risposte**1a. **380,13 cm²**1c. **69,12 cm**2a. **63,62 cm²**2c. **28,27 cm**3a. **19,63 cm²**3c. **15,71 cm**4a. **201,06 cm²**4c. **50,27 cm**5a. **706,86 cm²**5c. **94,25 cm**6a. **78,54 cm²**6c. **31,42 cm**7a. **0,79 cm²**7c. **3,14 cm**8a. **153,94 cm²**8c. **43,98 cm**9a. **254,47 cm²**9c. **56,55 cm**10a. **7,07 cm²**10c. **9,42 cm**



28,27 cm	254,47 cm ²	380,13 cm ²	63,62 cm ²	3,14 cm
9,42 cm	19,63 cm ²	43,98 cm	31,42 cm	94,25 cm
50,27 cm	56,55 cm	15,71 cm	0,79 cm ²	78,54 cm ²
153,94 cm ²	69,12 cm	706,86 cm ²	7,07 cm ²	201,06 cm ²

