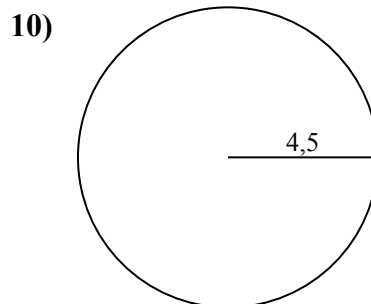
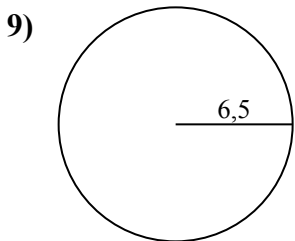
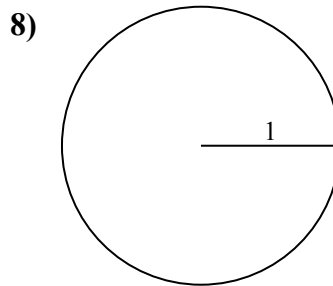
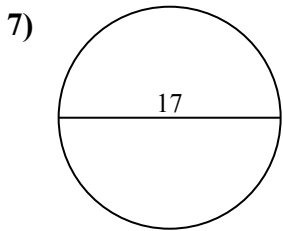
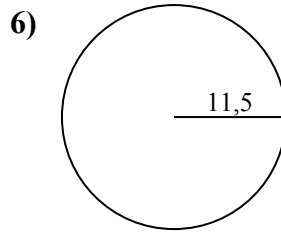
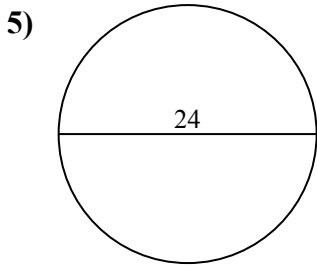
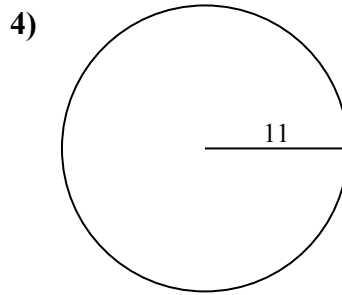
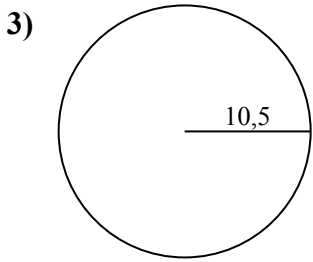
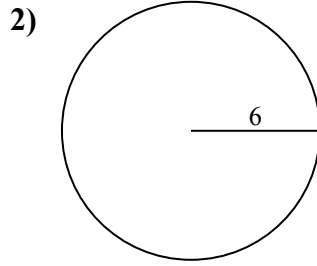
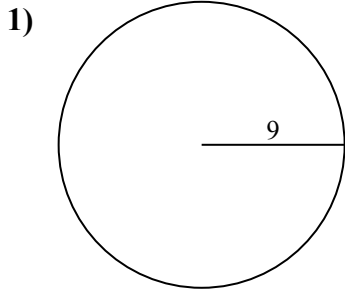




Calcola area e perimetro. Non sono in scala.



Risposte

1a. _____

1c. _____

2a. _____

2c. _____

3a. _____

3c. _____

4a. _____

4c. _____

5a. _____

5c. _____

6a. _____

6c. _____

7a. _____

7c. _____

8a. _____

8c. _____

9a. _____

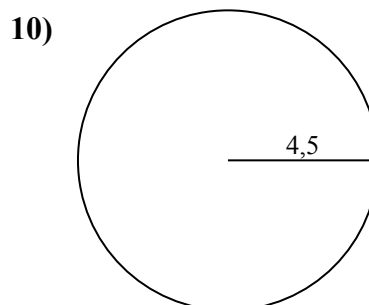
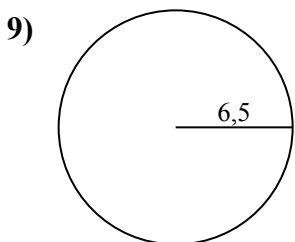
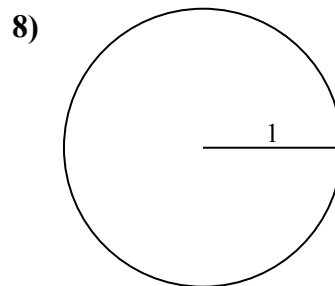
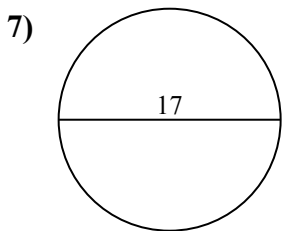
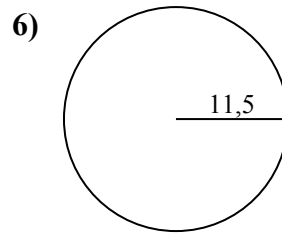
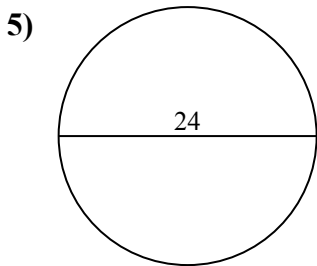
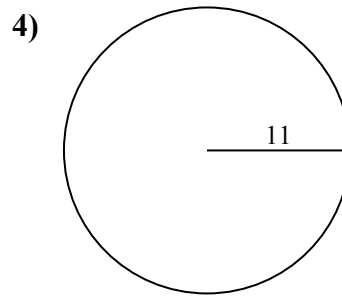
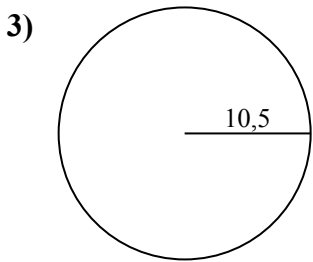
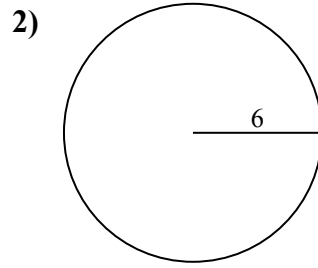
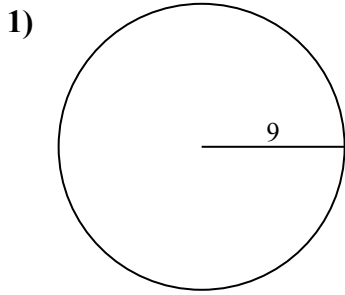
9c. _____

10a. _____

10c. _____



Calcola area e perimetro. Non sono in scala.

**Risposte**

1a. 254,47 cm²

1c. 56,55 cm

2a. 113,1 cm²

2c. 37,7 cm

3a. 346,36 cm²

3c. 65,97 cm

4a. 380,13 cm²

4c. 69,12 cm

5a. 452,39 cm²

5c. 75,4 cm

6a. 415,48 cm²

6c. 72,26 cm

7a. 226,98 cm²

7c. 53,41 cm

8a. 3,14 cm²

8c. 6,28 cm

9a. 132,73 cm²

9c. 40,84 cm

10a. 63,62 cm²

10c. 28,27 cm



53,41 cm	75,4 cm	69,12 cm	380,13 cm ²	6,28 cm
226,98 cm ²	132,73 cm ²	63,62 cm ²	56,55 cm	65,97 cm
415,48 cm ²	113,1 cm ²	72,26 cm	452,39 cm ²	254,47 cm ²
346,36 cm ²	3,14 cm ²	37,7 cm	40,84 cm	28,27 cm

