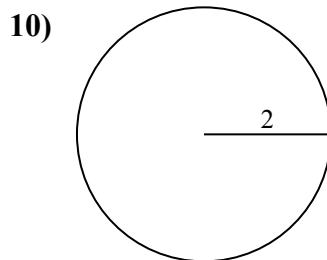
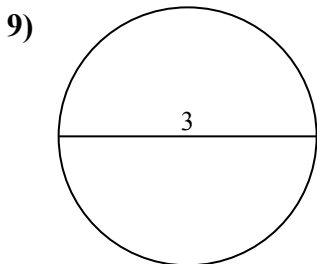
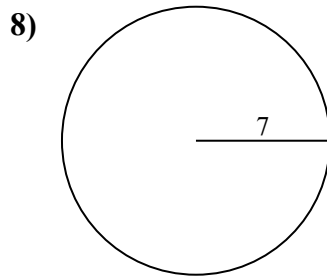
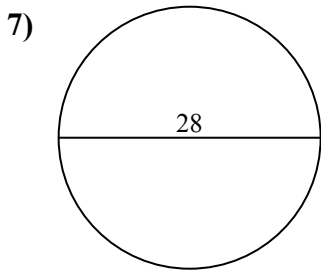
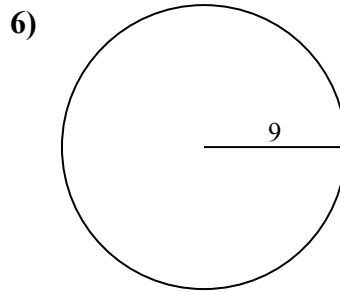
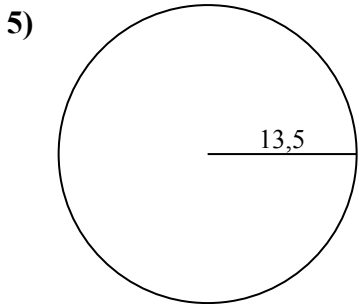
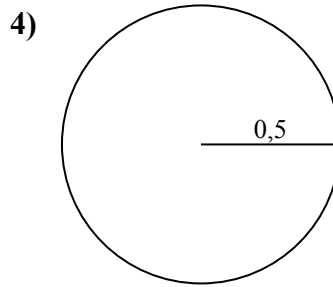
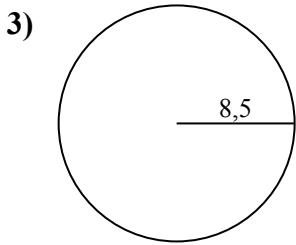
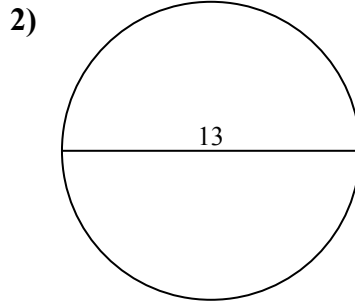
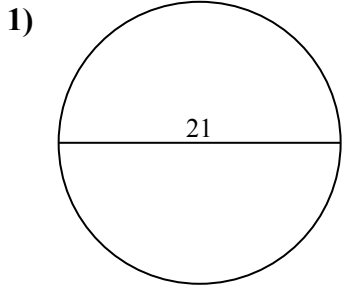




Calcola area e perimetro. Non sono in scala.



Risposte

1a. _____

1c. _____

2a. _____

2c. _____

3a. _____

3c. _____

4a. _____

4c. _____

5a. _____

5c. _____

6a. _____

6c. _____

7a. _____

7c. _____

8a. _____

8c. _____

9a. _____

9c. _____

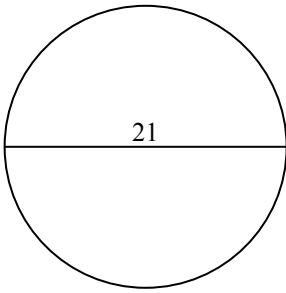
10a. _____

10c. _____

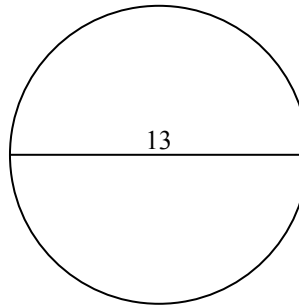


Calcola area e perimetro. Non sono in scala.

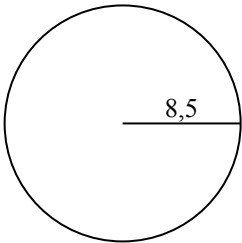
1)



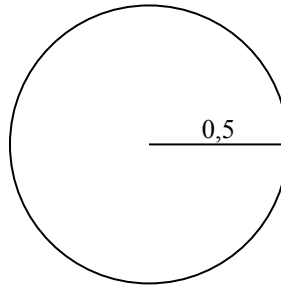
2)



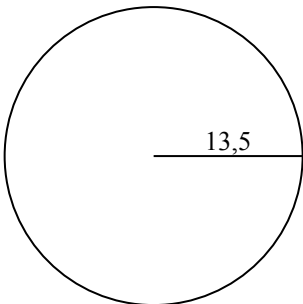
3)



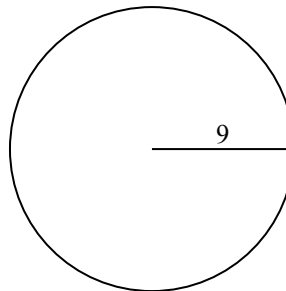
4)



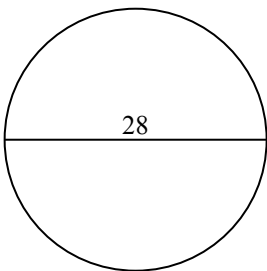
5)



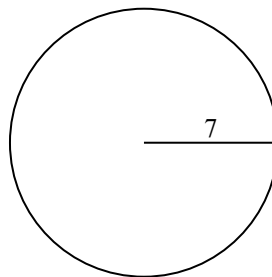
6)



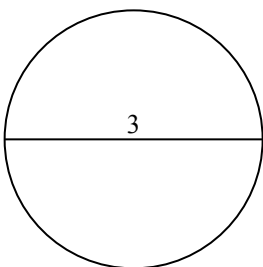
7)



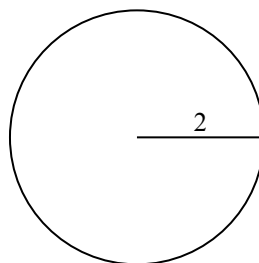
8)



9)



10)

**Risposte**1a. 346,36 cm²1c. 65,97 cm2a. 132,73 cm²2c. 40,84 cm3a. 226,98 cm²3c. 53,41 cm4a. 0,79 cm²4c. 3,14 cm5a. 572,56 cm²5c. 84,82 cm6a. 254,47 cm²6c. 56,55 cm7a. 615,75 cm²7c. 87,96 cm8a. 153,94 cm²8c. 43,98 cm9a. 7,07 cm²9c. 9,42 cm10a. 12,57 cm²10c. 12,57 cm



43,98 cm	84,82 cm	572,56 cm ²	226,98 cm ²	3,14 cm
40,84 cm	153,94 cm ²	87,96 cm	56,55 cm	65,97 cm
254,47 cm ²	12,57 cm ²	0,79 cm ²	132,73 cm ²	615,75 cm ²
9,42 cm	12,57 cm	7,07 cm ²	346,36 cm ²	53,41 cm

