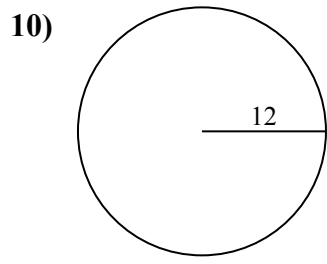
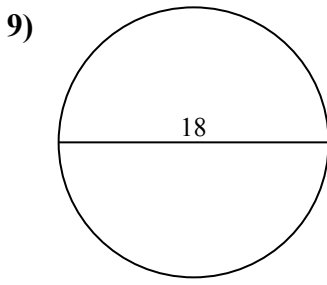
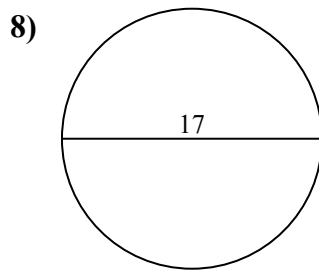
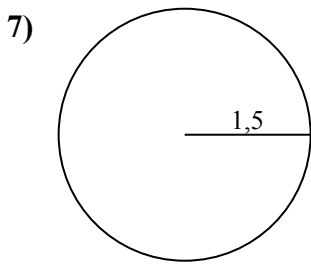
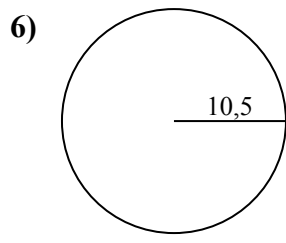
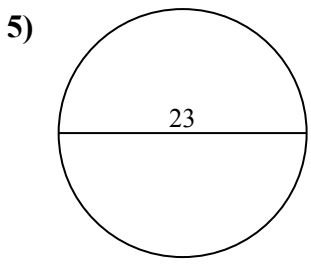
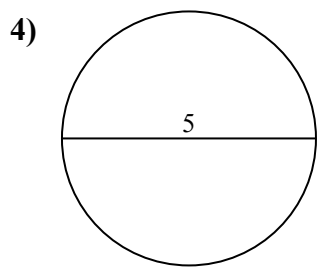
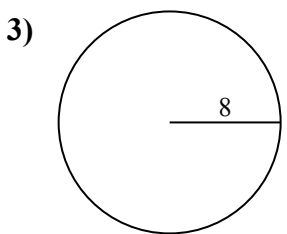
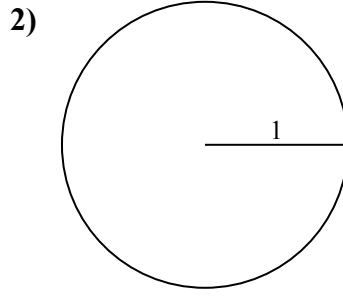
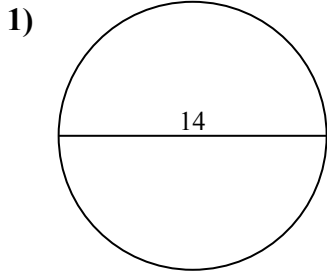




Calcola area e perimetro. Non sono in scala.

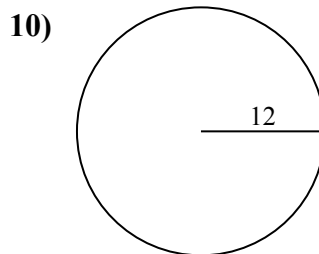
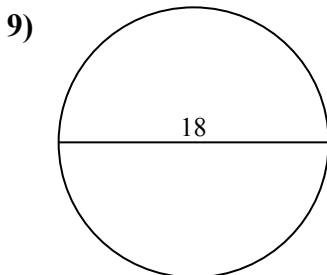
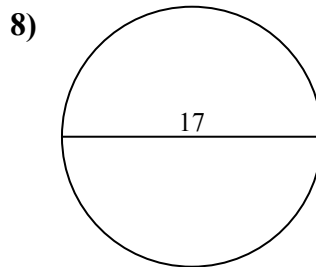
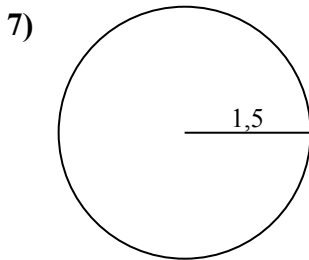
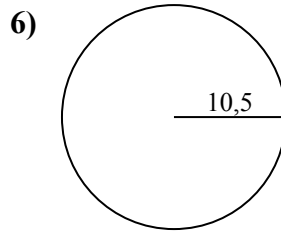
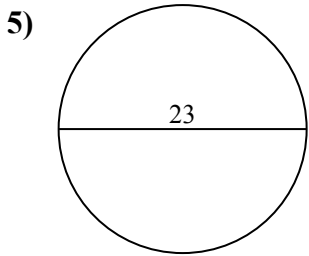
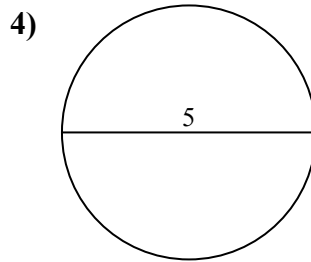
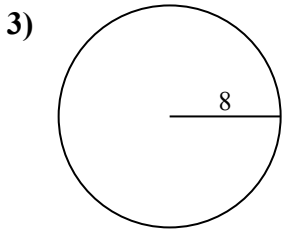
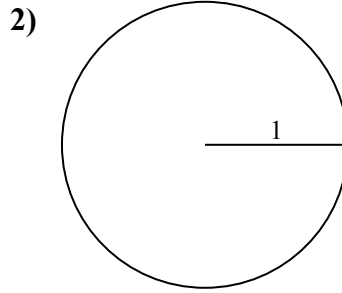
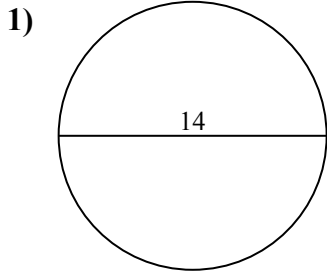


Risposte

- 1a. _____
- 1c. _____
- 2a. _____
- 2c. _____
- 3a. _____
- 3c. _____
- 4a. _____
- 4c. _____
- 5a. _____
- 5c. _____
- 6a. _____
- 6c. _____
- 7a. _____
- 7c. _____
- 8a. _____
- 8c. _____
- 9a. _____
- 9c. _____
- 10a. _____
- 10c. _____



Calcola area e perimetro. Non sono in scala.

**Risposte**

1a. **153,94 cm²**

1c. **43,98 cm**

2a. **3,14 cm²**

2c. **6,28 cm**

3a. **201,06 cm²**

3c. **50,27 cm**

4a. **19,63 cm²**

4c. **15,71 cm**

5a. **415,48 cm²**

5c. **72,26 cm**

6a. **346,36 cm²**

6c. **65,97 cm**

7a. **7,07 cm²**

7c. **9,42 cm**

8a. **226,98 cm²**

8c. **53,41 cm**

9a. **254,47 cm²**

9c. **56,55 cm**

10a. **452,39 cm²**

10c. **75,4 cm**



65,97 cm	50,27 cm	9,42 cm	3,14 cm ²	53,41 cm
226,98 cm ²	153,94 cm ²	56,55 cm	346,36 cm ²	254,47 cm ²
15,71 cm	201,06 cm ²	6,28 cm	75,4 cm	43,98 cm
72,26 cm	452,39 cm ²	7,07 cm ²	415,48 cm ²	19,63 cm ²

