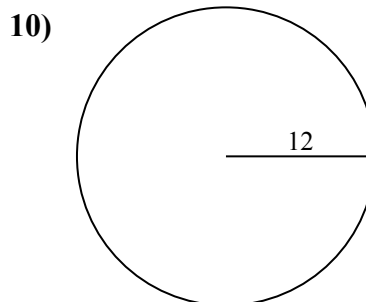
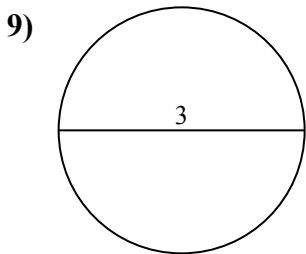
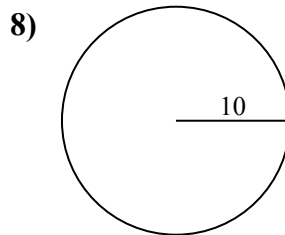
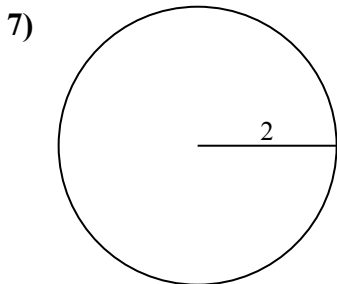
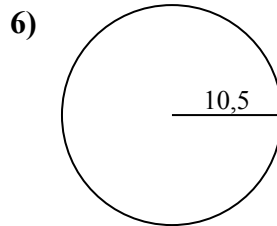
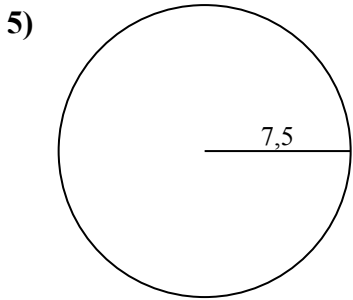
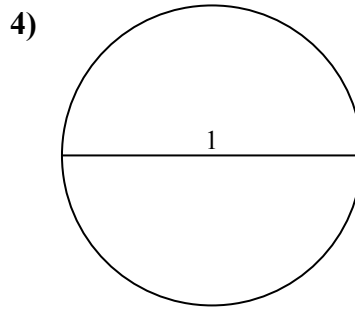
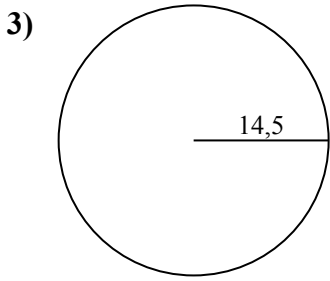
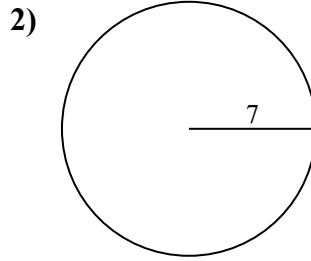
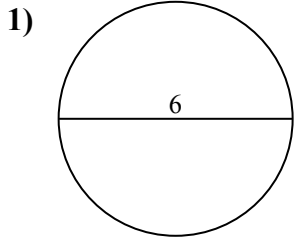




Calcola area e perimetro. Non sono in scala.



Risposte

1a. _____

1c. _____

2a. _____

2c. _____

3a. _____

3c. _____

4a. _____

4c. _____

5a. _____

5c. _____

6a. _____

6c. _____

7a. _____

7c. _____

8a. _____

8c. _____

9a. _____

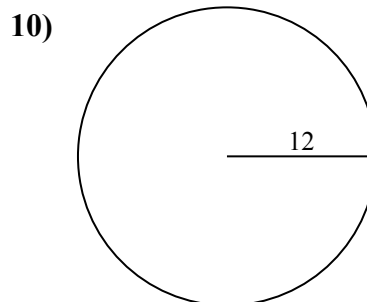
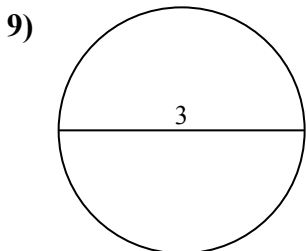
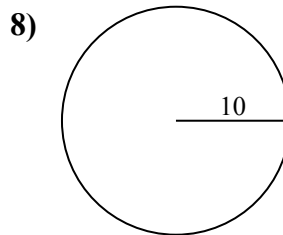
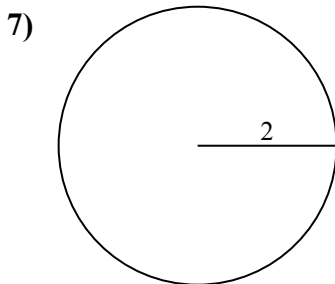
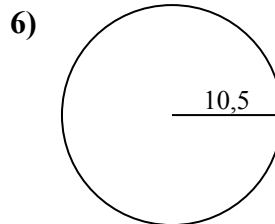
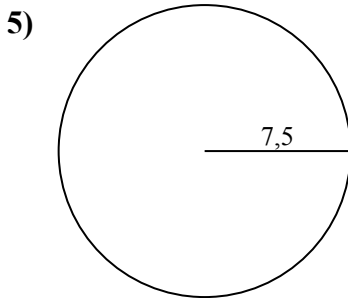
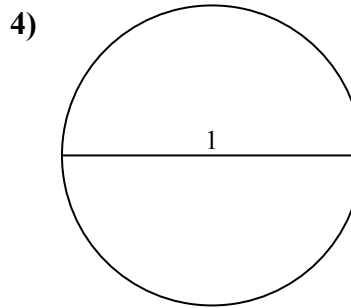
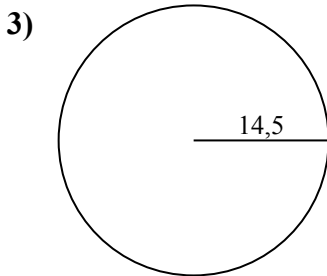
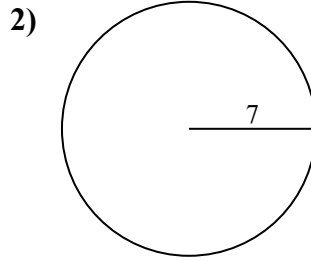
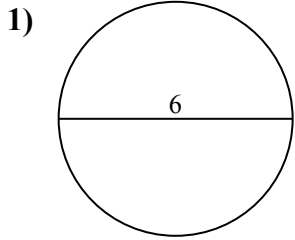
9c. _____

10a. _____

10c. _____



Calcola area e perimetro. Non sono in scala.



Risposte

1a. 28,27 cm²

1c. 18,85 cm

2a. 153,94 cm²

2c. 43,98 cm

3a. 660,52 cm²

3c. 91,11 cm

4a. 0,79 cm²

4c. 3,14 cm

5a. 176,71 cm²

5c. 47,12 cm

6a. 346,36 cm²

6c. 65,97 cm

7a. 12,57 cm²

7c. 12,57 cm

8a. 314,16 cm²

8c. 62,83 cm

9a. 7,07 cm²

9c. 9,42 cm

10a. 452,39 cm²

10c. 75,4 cm



3,14 cm	12,57 cm	65,97 cm	91,11 cm	62,83 cm
452,39 cm ²	0,79 cm ²	7,07 cm ²	314,16 cm ²	43,98 cm
176,71 cm ²	9,42 cm	12,57 cm ²	75,4 cm	660,52 cm ²
47,12 cm	346,36 cm ²	28,27 cm ²	18,85 cm	153,94 cm ²

