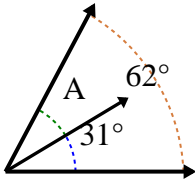


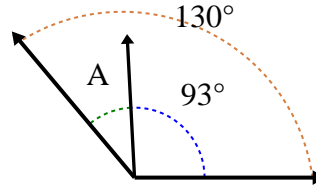


Calcola il valore di "A".

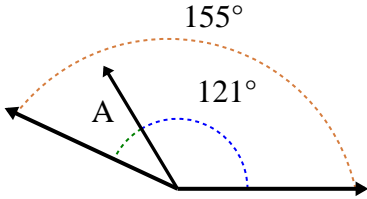
1)



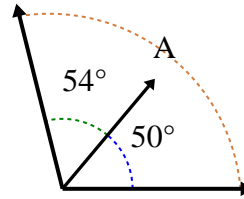
2)



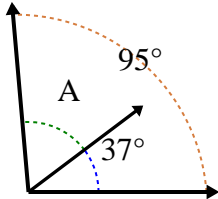
3)



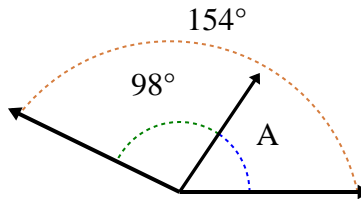
4)



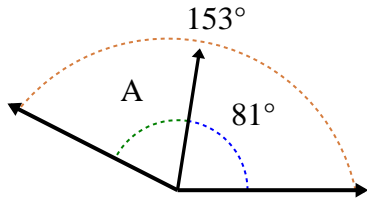
5)



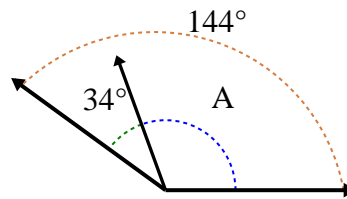
6)



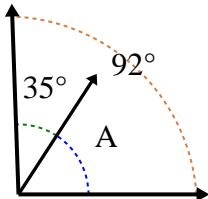
7)



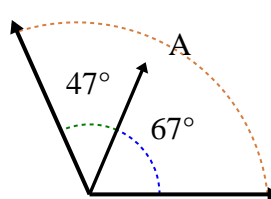
8)



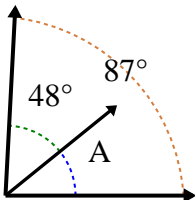
9)



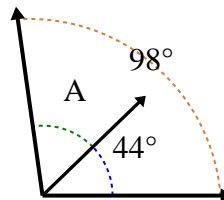
10)



11)



12)



Risposte

1. _____

2. _____

3. _____

4. _____

5. _____

6. _____

7. _____

8. _____

9. _____

10. _____

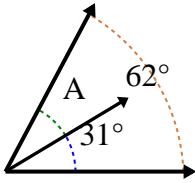
11. _____

12. _____

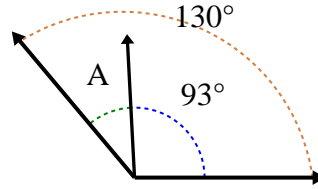


Calcola il valore di "A".

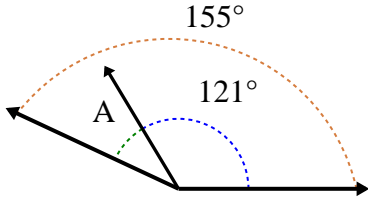
1)



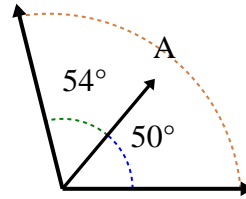
2)



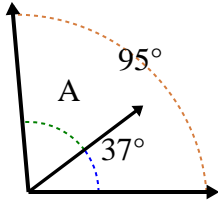
3)



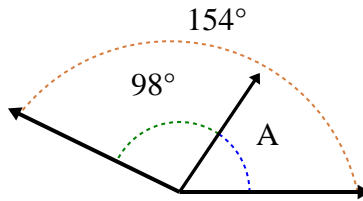
4)



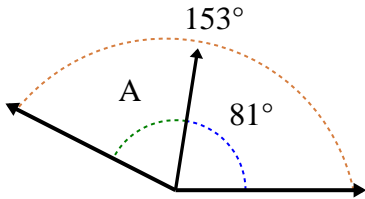
5)



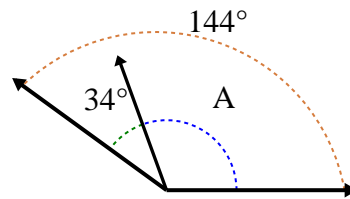
6)



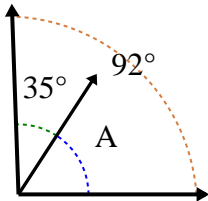
7)



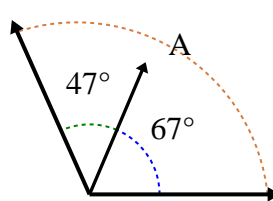
8)



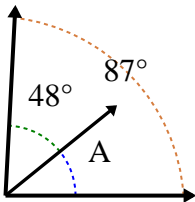
9)



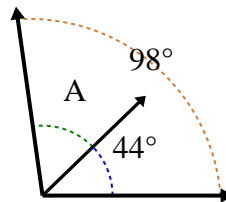
10)



11)



12)



Risposte

1. 31°

2. 37°

3. 34°

4. 104°

5. 58°

6. 56°

7. 72°

8. 110°

9. 57°

10. 114°

11. 39°

12. 54°