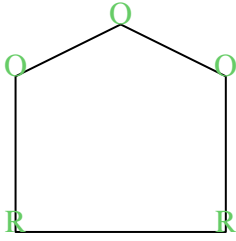


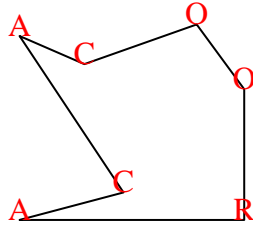


Conta il numero di angoli 'acuti', 'ottusi', 'retti' e 'concavi' in ogni forma.

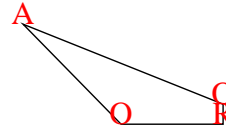
Es)



1)



2)

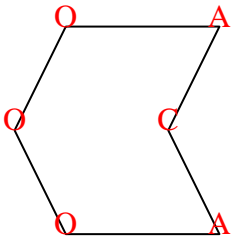


Risposte

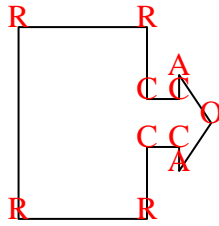
A O R C

	A	O	R	C
Es.	0	3	2	0
1.	2	2	1	2
2.	1	2	1	0
3.	2	3	0	1
4.	2	1	4	4
5.	2	0	1	0
6.	0	0	4	0
7.	1	3	4	3
8.	2	2	1	1
9.	2	2	0	1
10.	0	0	8	4
11.	2	4	1	2

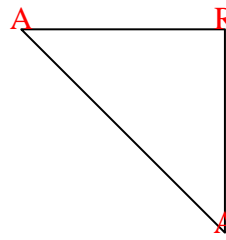
3)




4)



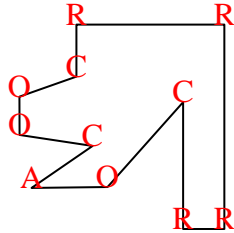
5)



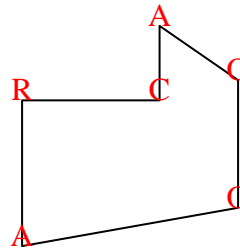
6)



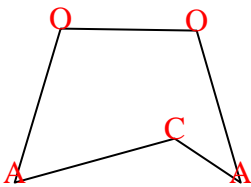
7)



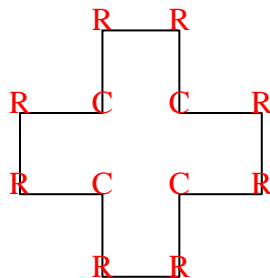
8)



9)



10)



11)

