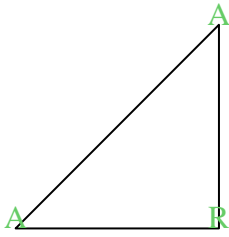




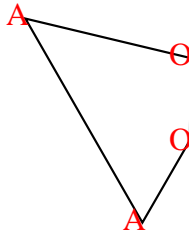


Conta il numero di angoli "acuti", "ottusi" e "retti" in ogni forma.

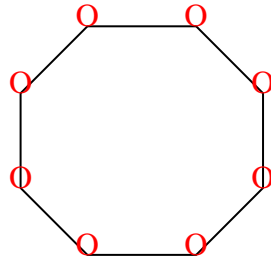
Es)



1)



2)



**Risposte**

A O R

Es. 2 0 1

1. 2 2 0

2. 0 8 0

3. 0 2 3

4. 1 4 0

5. 0 7 0

6. 0 4 2

7. 1 1 2

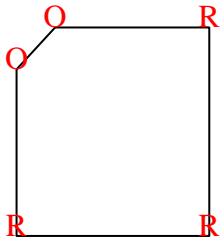
8. 0 3 2

9. 0 2 3

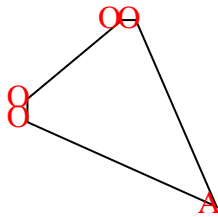
10. 0 6 0

11. 1 2 1

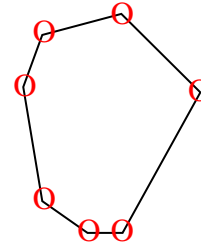
3)



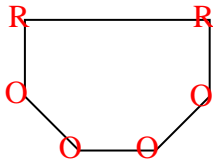
4)



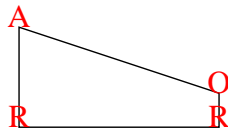
5)



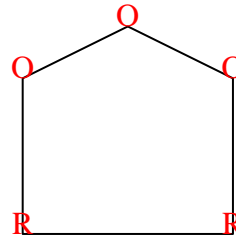
6)



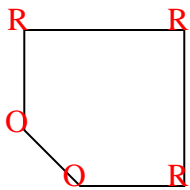
7)



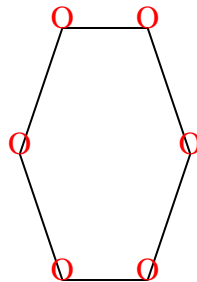
8)



9)



10)



11)

